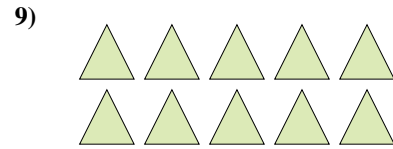

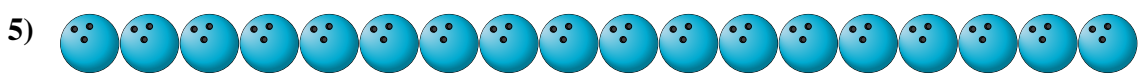
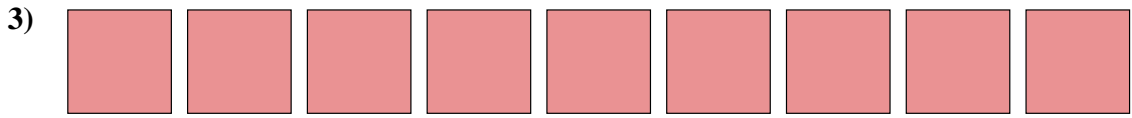






Count the amount of each of the different objects.

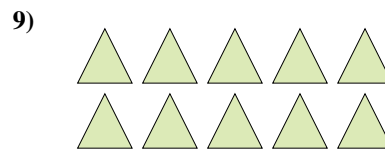


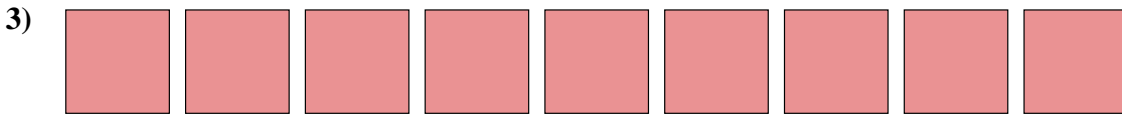




Answers

- 1. \_\_\_\_\_
- 2. \_\_\_\_\_
- 3. \_\_\_\_\_
- 4. \_\_\_\_\_
- 5. \_\_\_\_\_
- 6. \_\_\_\_\_
- 7. \_\_\_\_\_
- 8. \_\_\_\_\_
- 9. \_\_\_\_\_



Count the amount of each of the different objects.



Answers

1. 7

2. 7

3. 9

4. 16

5. 18

6. 13

7. 12

8. 8

9. 10



Count the amount of each of the different objects.


1)



2)



3)




4)



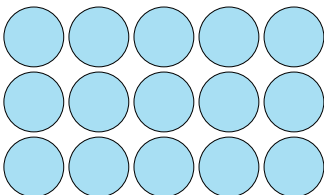
5)



6)



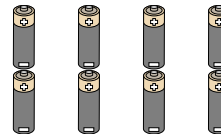
7)



8)



9)



Answers

1. \_\_\_\_\_

2. \_\_\_\_\_

3. \_\_\_\_\_

4. \_\_\_\_\_

5. \_\_\_\_\_

6. \_\_\_\_\_

7. \_\_\_\_\_

8. \_\_\_\_\_

9. \_\_\_\_\_



Count the amount of each of the different objects.


1)



2)



3)




4)



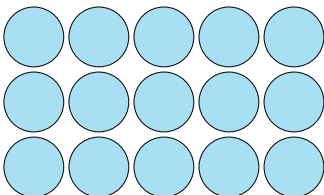
5)



6)



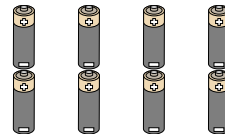
7)



8)



9)



Answers

1. 12

2. 19

3. 2

4. 9

5. 14

6. 20

7. 15

8. 20

9. 8



Count the amount of each of the different objects.

1)



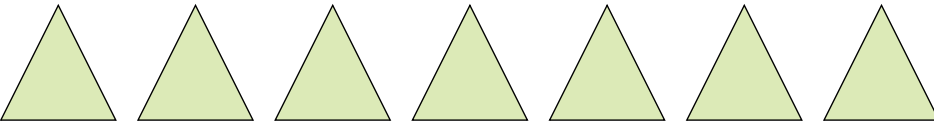
2)




3)



4)



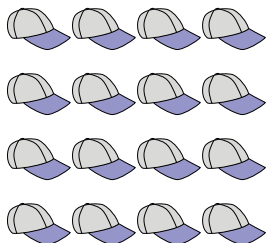
5)




6)




7)



8)



9)



Answers

1. \_\_\_\_\_

2. \_\_\_\_\_

3. \_\_\_\_\_

4. \_\_\_\_\_

5. \_\_\_\_\_

6. \_\_\_\_\_

7. \_\_\_\_\_

8. \_\_\_\_\_

9. \_\_\_\_\_



Count the amount of each of the different objects.

1)



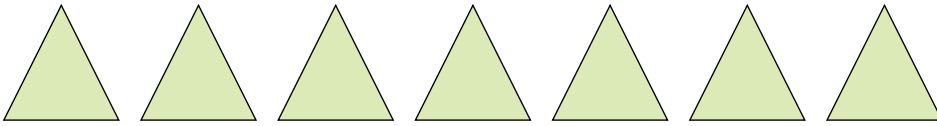
2)




3)



4)



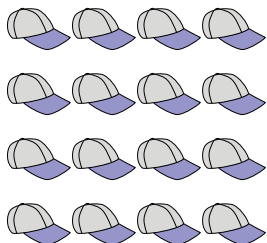
5)




6)




7)



8)



9)



Answers

1. 3

2. 17

3. 7

4. 7

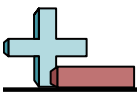
5. 5

6. 16

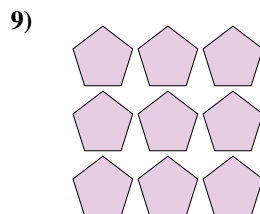



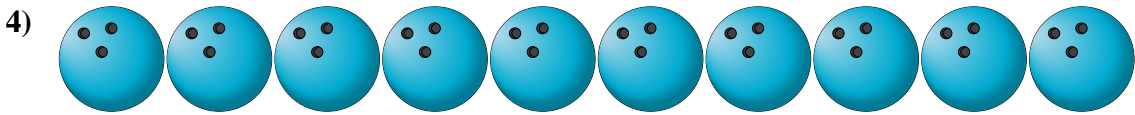

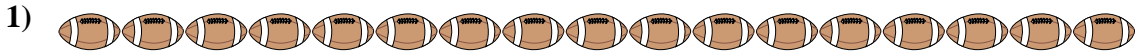
7. 16

8. 6

9. 9



Count the amount of each of the different objects.

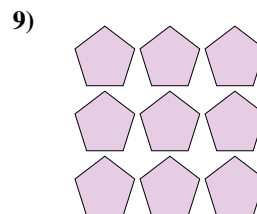

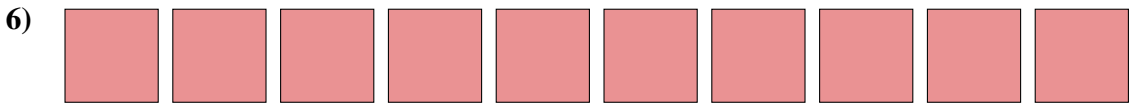

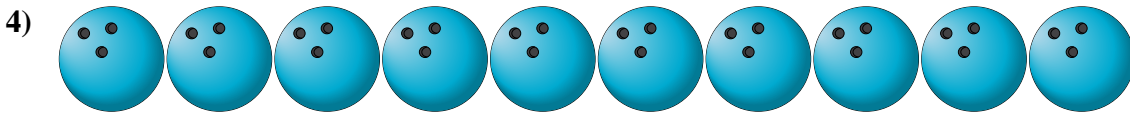

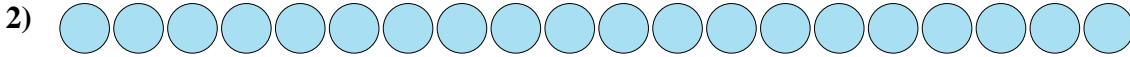
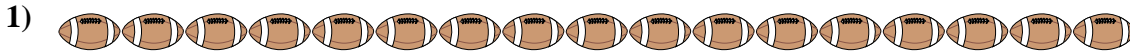


Answers

- 1. \_\_\_\_\_
- 2. \_\_\_\_\_
- 3. \_\_\_\_\_
- 4. \_\_\_\_\_
- 5. \_\_\_\_\_
- 6. \_\_\_\_\_
- 7. \_\_\_\_\_
- 8. \_\_\_\_\_
- 9. \_\_\_\_\_



Count the amount of each of the different objects.



Answers

1. 17

2. 20

3. 3

4. 10

5. 13

6. 10

7. 9

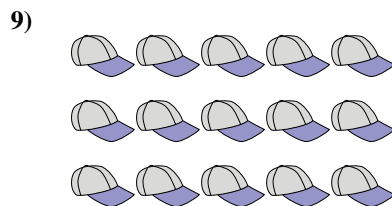
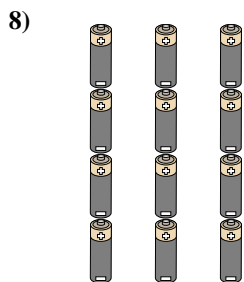


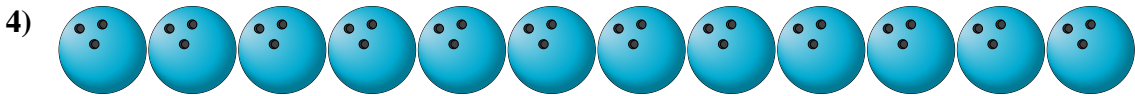

8. 16

9. 9





Count the amount of each of the different objects.

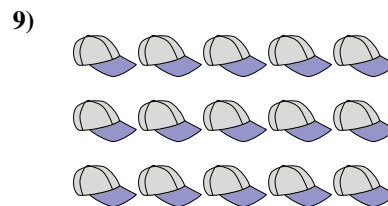
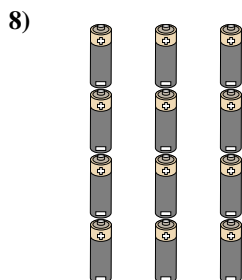


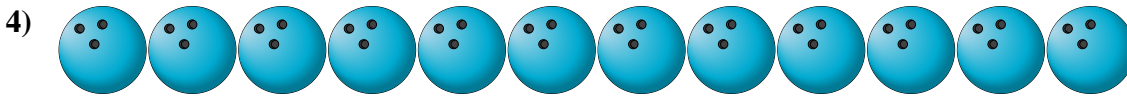



**Answers**

- 1. \_\_\_\_\_
- 2. \_\_\_\_\_
- 3. \_\_\_\_\_
- 4. \_\_\_\_\_
- 5. \_\_\_\_\_
- 6. \_\_\_\_\_
- 7. \_\_\_\_\_
- 8. \_\_\_\_\_
- 9. \_\_\_\_\_



Count the amount of each of the different objects.



Answers

1. 20

2. 18

3. 5

4. 12

5. 5

6. 18

7. 12

8. 12

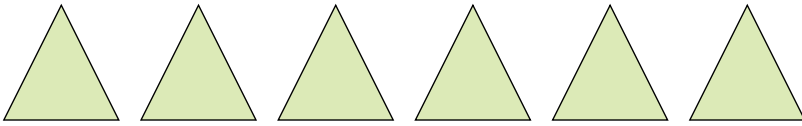
9. 15



Count the amount of each of the different objects.

Answers

1)



1. \_\_\_\_\_

2)



2. \_\_\_\_\_

3. \_\_\_\_\_

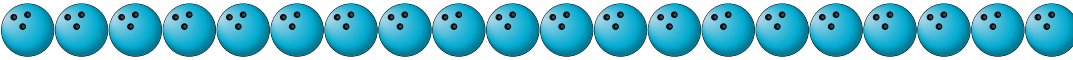
3)



4. \_\_\_\_\_

5. \_\_\_\_\_

4)



6. \_\_\_\_\_

7. \_\_\_\_\_

8. \_\_\_\_\_

9. \_\_\_\_\_


5)




6)



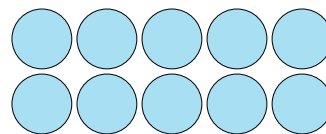
7)



8)

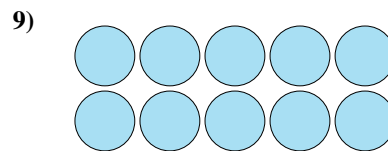


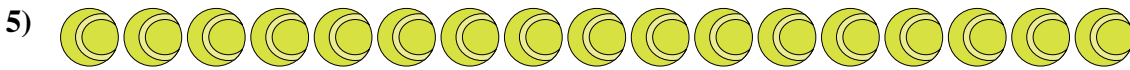
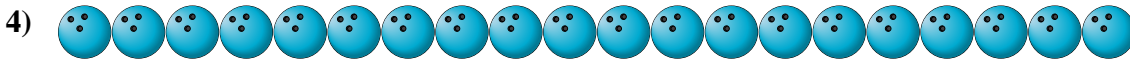

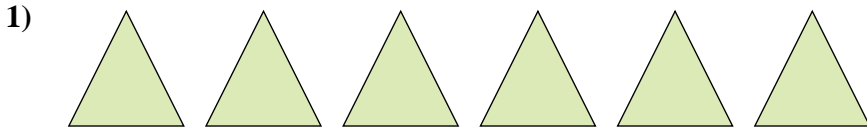


9)





Count the amount of each of the different objects.



Answers

1. 6

2. 16

3. 15

4. 20

5. 17

6. 9

7. 12

8. 15

9. 10



Count the amount of each of the different objects.


1)



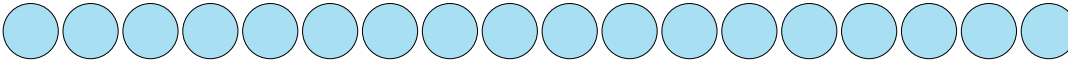
2)



3)



4)




5)



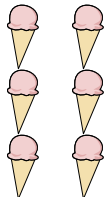
6)



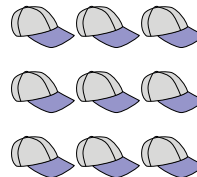
7)



8)



9)



Answers

1. \_\_\_\_\_

2. \_\_\_\_\_

3. \_\_\_\_\_

4. \_\_\_\_\_

5. \_\_\_\_\_

6. \_\_\_\_\_

7. \_\_\_\_\_

8. \_\_\_\_\_

9. \_\_\_\_\_



Count the amount of each of the different objects.


1)



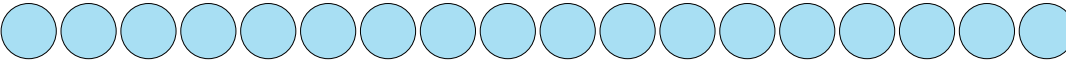
2)



3)



4)




5)



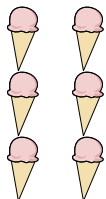
6)



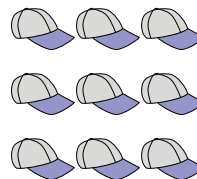
7)



8)



9)



Answers

1. 7

2. 11

3. 10

4. 18

5. 4

6. 19


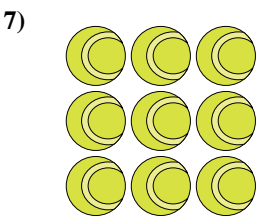
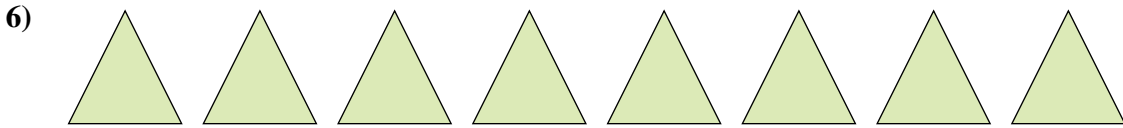



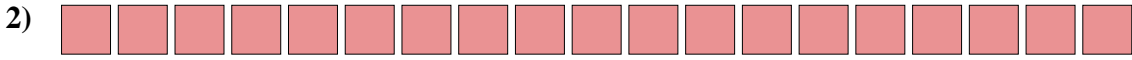
7. 8

8. 6

9. 9



Count the amount of each of the different objects.


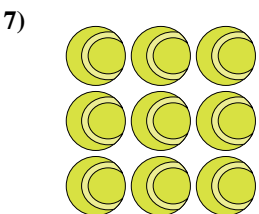
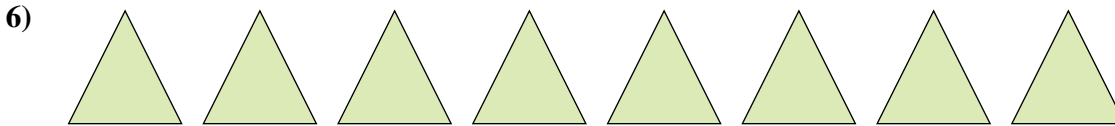




Answers

- 1. \_\_\_\_\_
- 2. \_\_\_\_\_
- 3. \_\_\_\_\_
- 4. \_\_\_\_\_
- 5. \_\_\_\_\_
- 6. \_\_\_\_\_
- 7. \_\_\_\_\_
- 8. \_\_\_\_\_
- 9. \_\_\_\_\_



Count the amount of each of the different objects.



Answers

1. 17

2. 19

3. 17

4. 6

5. 9

6. 8

7. 9

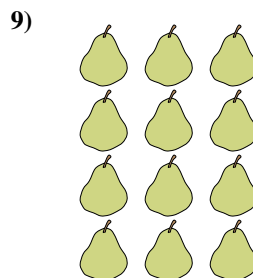


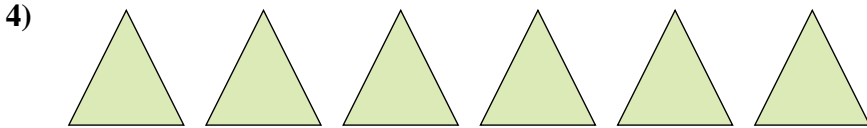
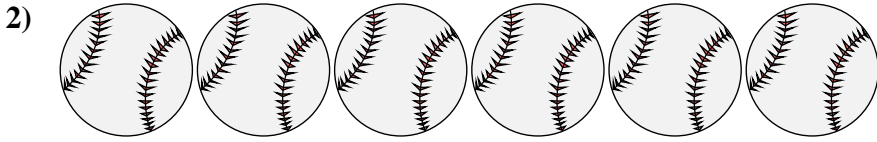
8. 20

9. 12





Count the amount of each of the different objects.



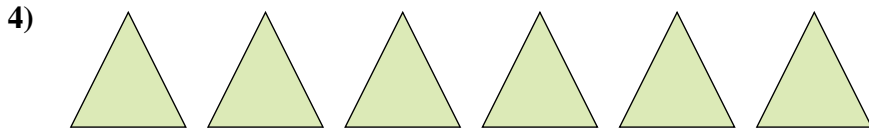
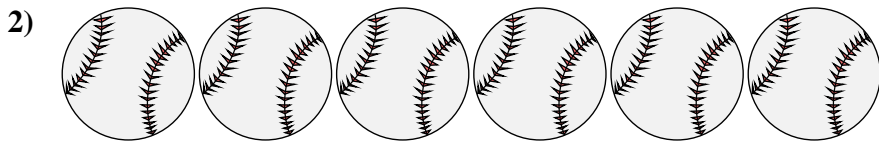


Answers

- 1. \_\_\_\_\_
- 2. \_\_\_\_\_
- 3. \_\_\_\_\_
- 4. \_\_\_\_\_
- 5. \_\_\_\_\_
- 6. \_\_\_\_\_
- 7. \_\_\_\_\_
- 8. \_\_\_\_\_
- 9. \_\_\_\_\_



Count the amount of each of the different objects.



Answers

1. 20

2. 6

3. 5

4. 6

5. 16

6. 4

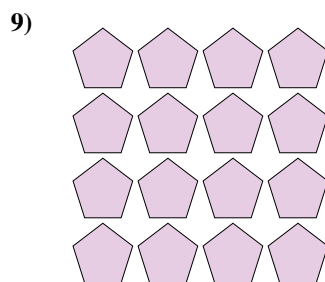

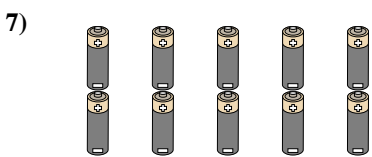


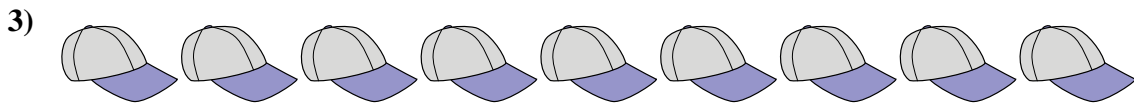
7. 8

8. 4

9. 12



Count the amount of each of the different objects.

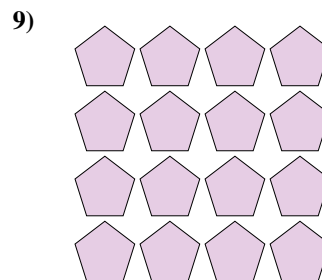

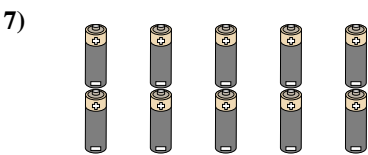


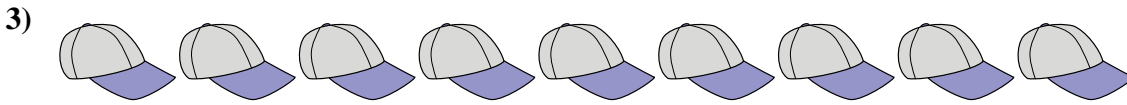


Answers

- 1. \_\_\_\_\_
- 2. \_\_\_\_\_
- 3. \_\_\_\_\_
- 4. \_\_\_\_\_
- 5. \_\_\_\_\_
- 6. \_\_\_\_\_
- 7. \_\_\_\_\_
- 8. \_\_\_\_\_
- 9. \_\_\_\_\_



Count the amount of each of the different objects.



Answers

1. 17

2. 2

3. 9

4. 8

5. 2

6. 9

7. 10

8. 15

9. 16