



Count the amount of each of the different objects.

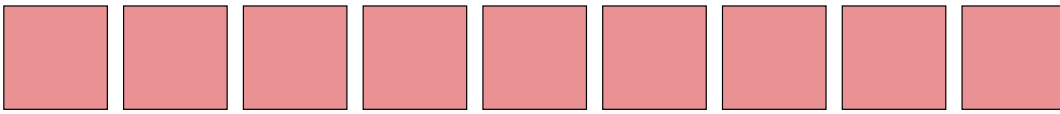
1)



2)




3)



4)




5)



6)



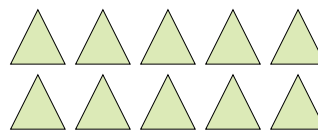
7)



8)



9)



Answers

1. \_\_\_\_\_

2. \_\_\_\_\_

3. \_\_\_\_\_

4. \_\_\_\_\_

5. \_\_\_\_\_

6. \_\_\_\_\_

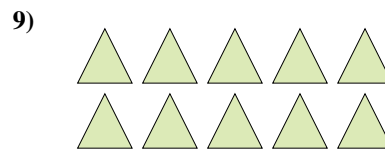

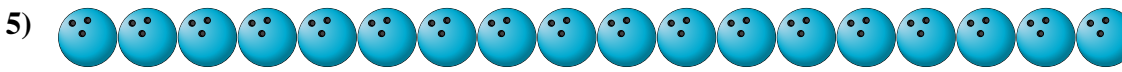
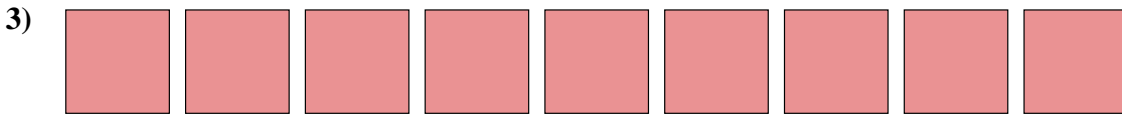


7. \_\_\_\_\_

8. \_\_\_\_\_

9. \_\_\_\_\_



Count the amount of each of the different objects.



Answers

1. 7

2. 7

3. 9

4. 16

5. 18

6. 13

7. 12

8. 8

9. 10