

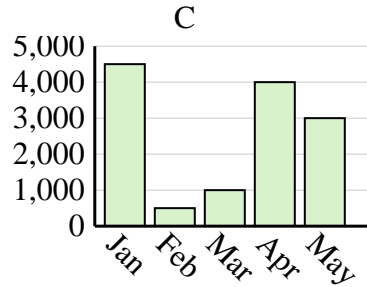
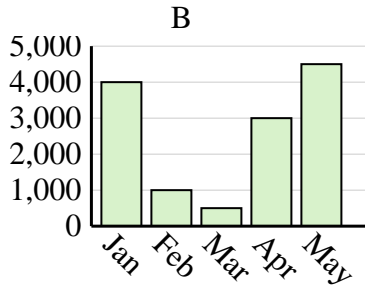
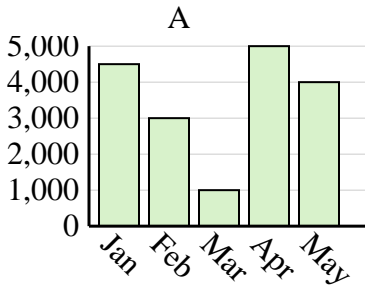


Determine which graph (A, B or C) best represents the information in the table.

**Answers**

1)

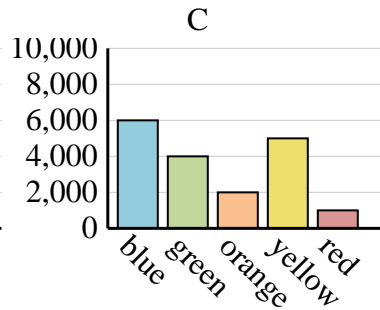
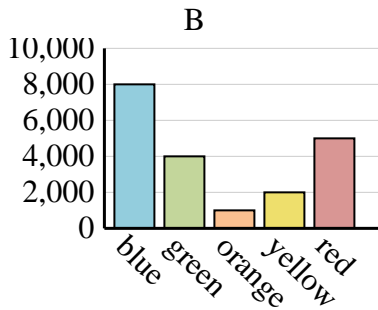
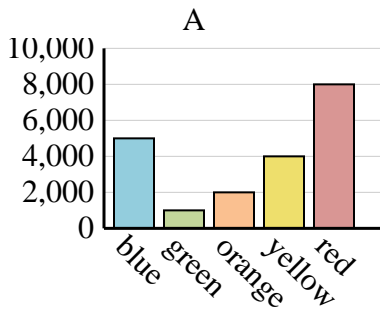
Sales	Jan	Feb	Mar	Apr	May
Month	4,000	1,000	500	3,000	4,500



1. \_\_\_\_\_
2. \_\_\_\_\_
3. \_\_\_\_\_
4. \_\_\_\_\_

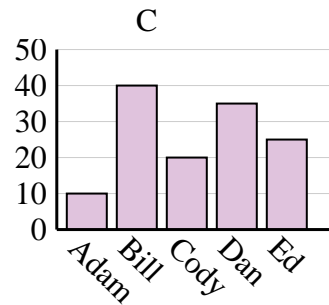
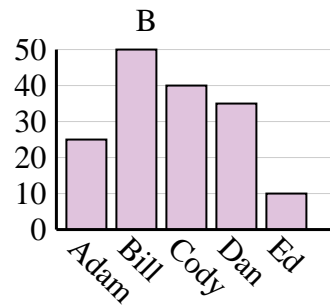
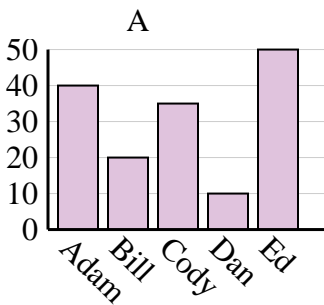
2)

Favorite Color	blue	green	orange	yellow	red
People	5,000	1,000	2,000	4,000	8,000



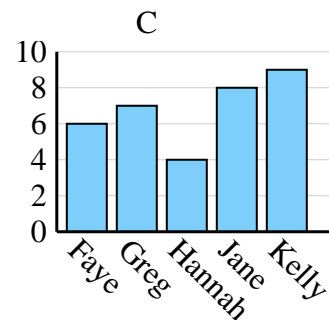
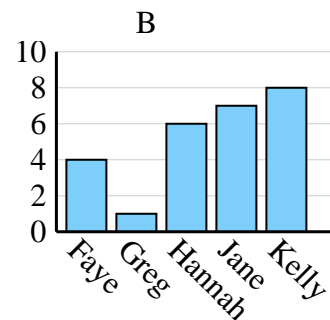
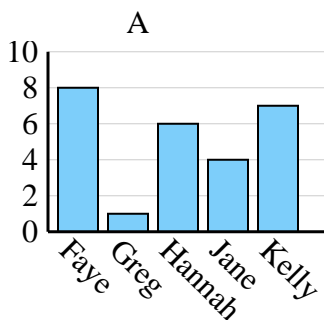
3)

Name	Adam	Bill	Cody	Dan	Ed
Points	25	50	40	35	10



4)

Name	Faye	Greg	Hannah	Jane	Kelly
States Lived In	8	1	6	4	7



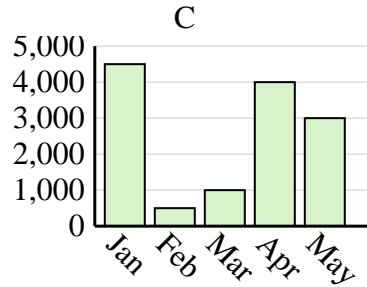
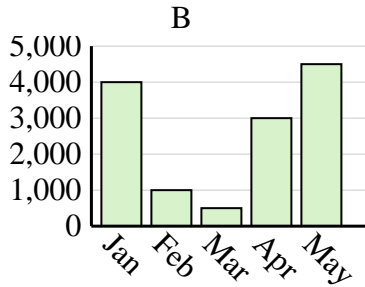
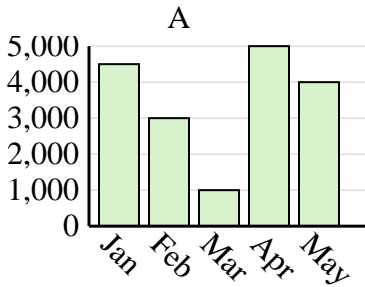


Determine which graph (A, B or C) best represents the information in the table.

Answers

1)

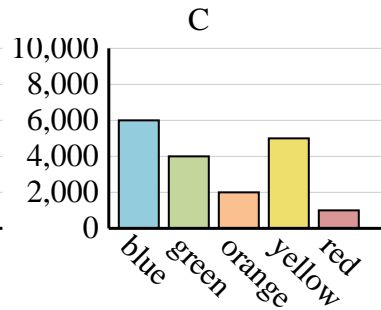
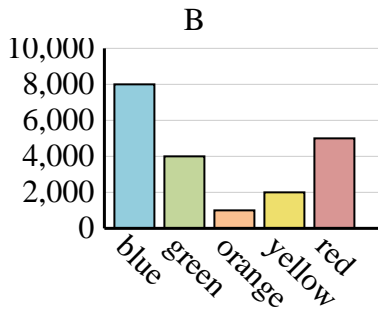
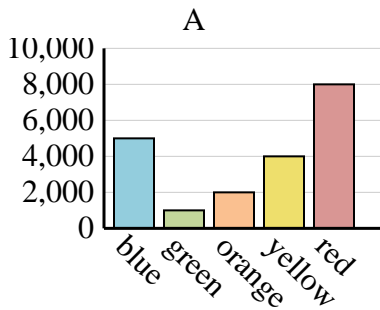
Sales	Jan	Feb	Mar	Apr	May
Month	4,000	1,000	500	3,000	4,500



1. **B**

2)

Favorite Color	blue	green	orange	yellow	red
People	5,000	1,000	2,000	4,000	8,000



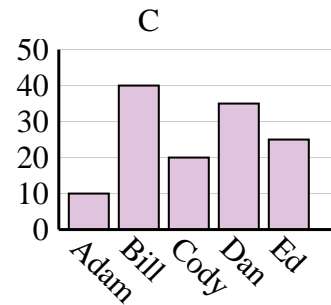
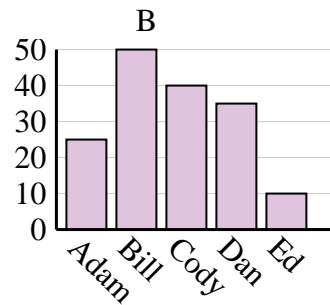
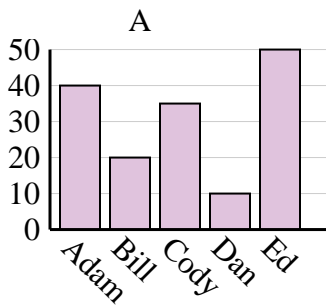
2. **A**

3. **B**

4. **A**

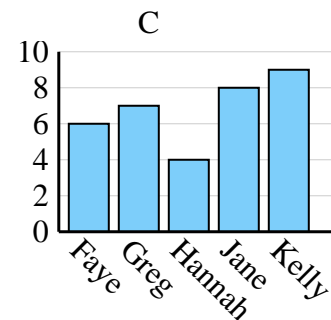
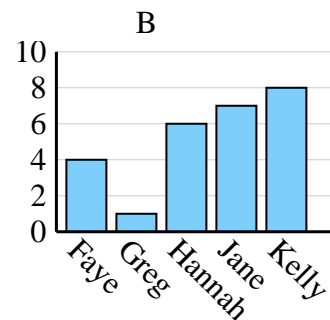
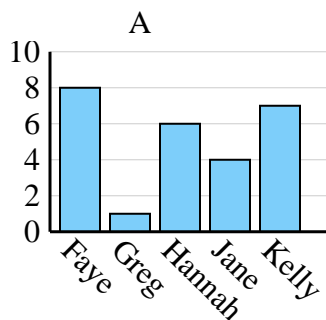
3)

Name	Adam	Bill	Cody	Dan	Ed
Points	25	50	40	35	10



4)

Name	Faye	Greg	Hannah	Jane	Kelly
States Lived In	8	1	6	4	7



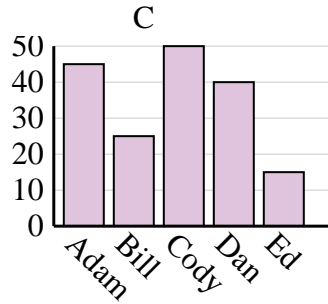
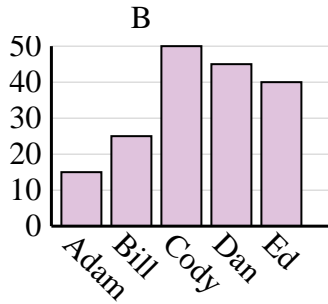
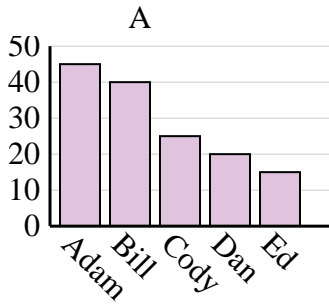


Determine which graph (A, B or C) best represents the information in the table.

**Answers**

1)

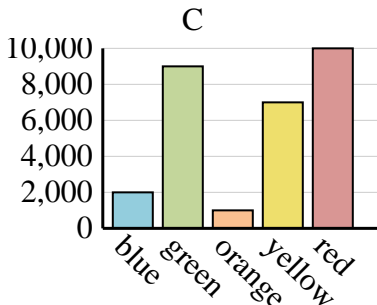
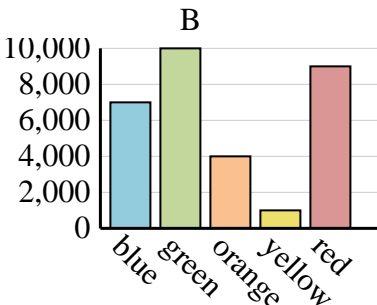
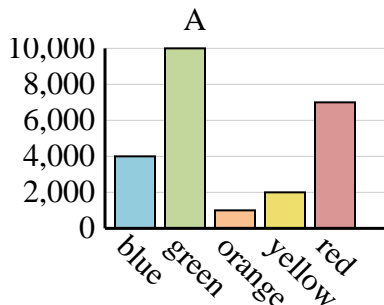
Name	Adam	Bill	Cody	Dan	Ed
Points	45	40	25	20	15



1. \_\_\_\_\_
2. \_\_\_\_\_
3. \_\_\_\_\_
4. \_\_\_\_\_

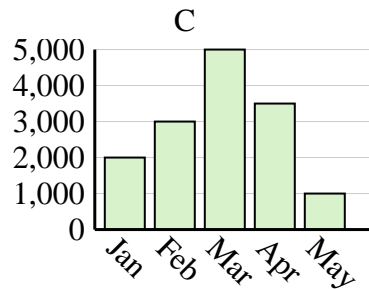
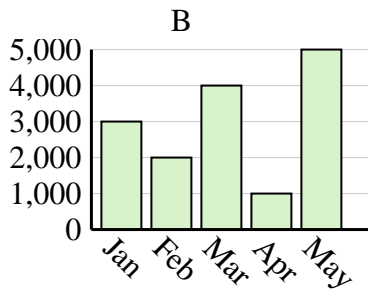
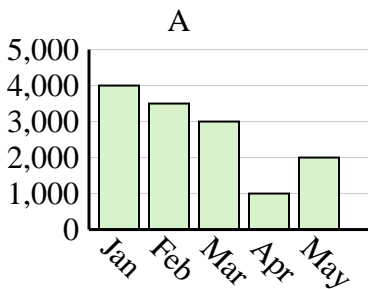
2)

Favorite Color	blue	green	orange	yellow	red
People	4,000	10,000	1,000	2,000	7,000



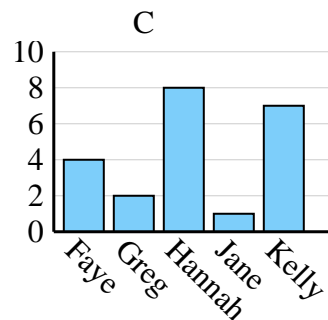
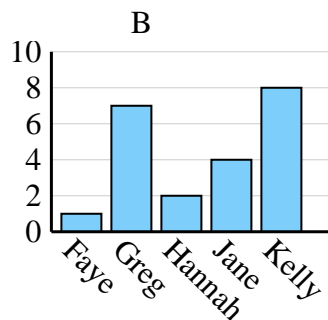
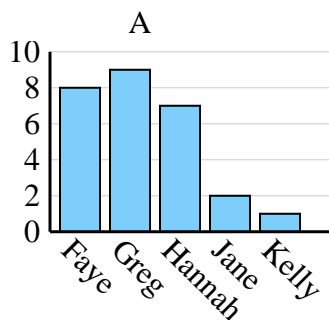
3)

Sales	Jan	Feb	Mar	Apr	May
Month	3,000	2,000	4,000	1,000	5,000



4)

Name	Faye	Greg	Hannah	Jane	Kelly
States Lived In	4	2	8	1	7

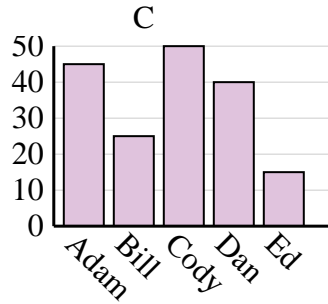
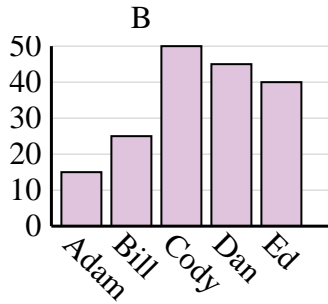
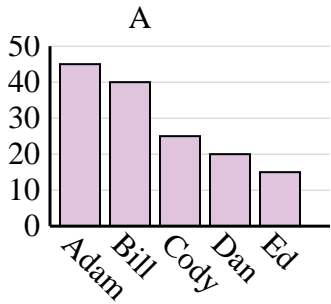




Determine which graph (A, B or C) best represents the information in the table.

Answers

<b>Name</b>	Adam	Bill	Cody	Dan	Ed
<b>Points</b>	45	40	25	20	15



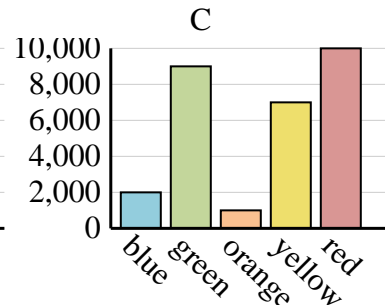
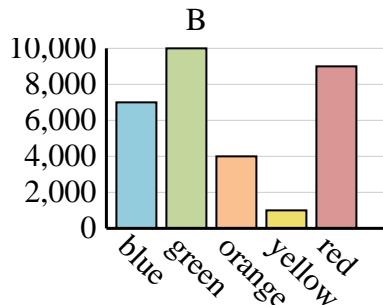
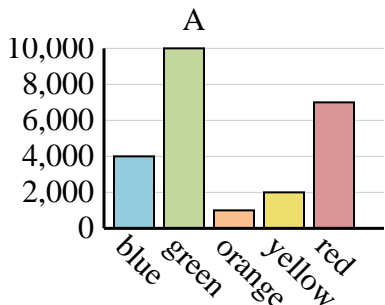
1. **A**

2. **A**

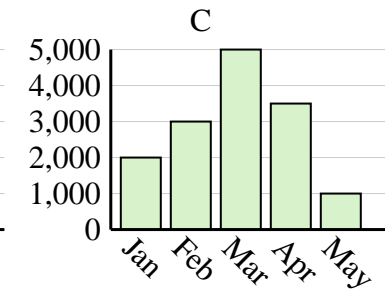
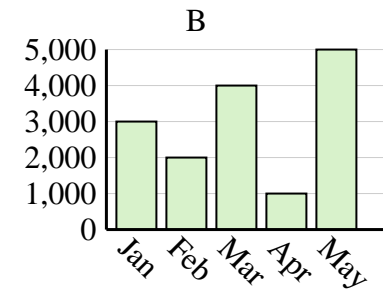
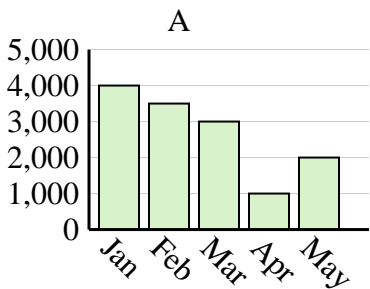
3. **B**

4. **C**

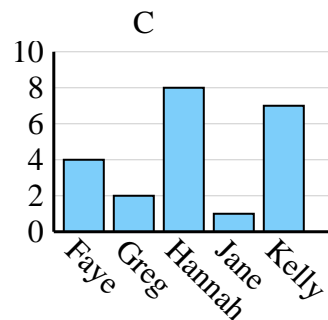
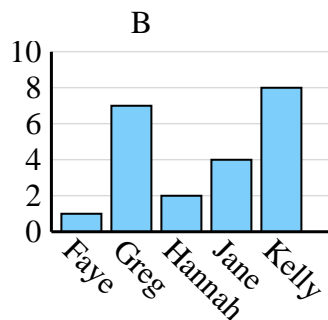
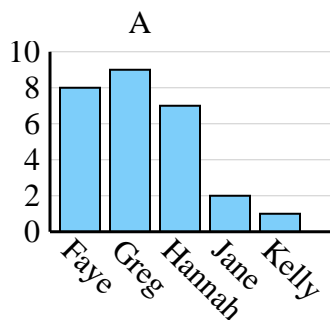
<b>Favorite Color</b>	blue	green	orange	yellow	red
<b>People</b>	4,000	10,000	1,000	2,000	7,000



<b>Sales</b>	Jan	Feb	Mar	Apr	May
<b>Month</b>	3,000	2,000	4,000	1,000	5,000



<b>Name</b>	Faye	Greg	Hannah	Jane	Kelly
<b>States Lived In</b>	4	2	8	1	7

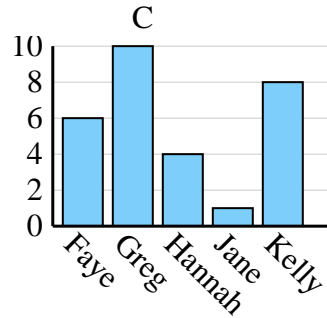
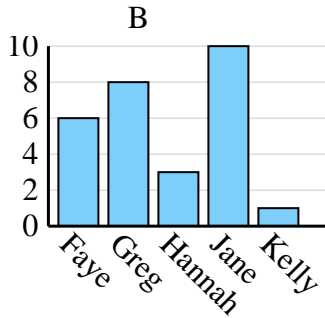
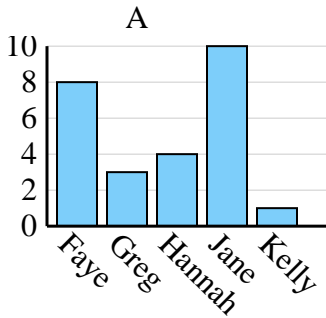




Determine which graph (A, B or C) best represents the information in the table.

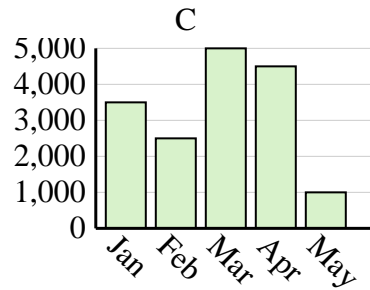
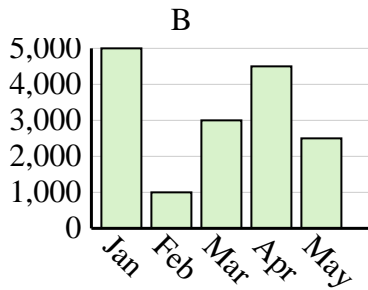
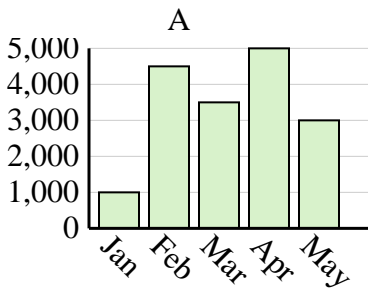
Answers

<b>Name</b>	Faye	Greg	Hannah	Jane	Kelly
<b>States Lived In</b>	6	10	4	1	8

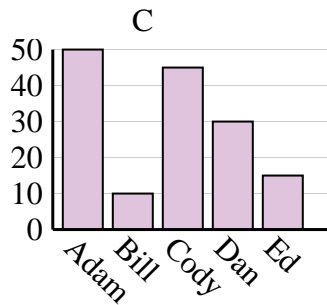
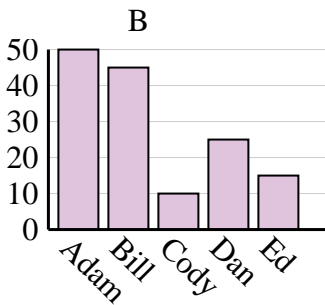
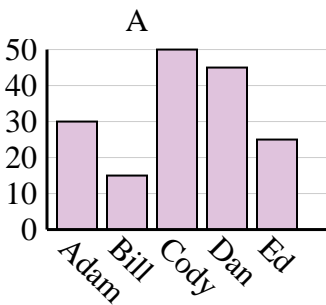


1. \_\_\_\_\_
2. \_\_\_\_\_
3. \_\_\_\_\_
4. \_\_\_\_\_

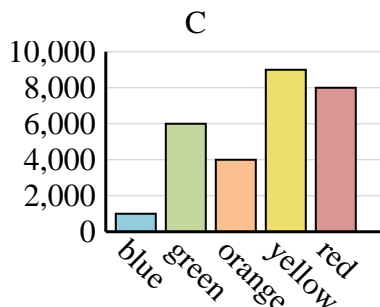
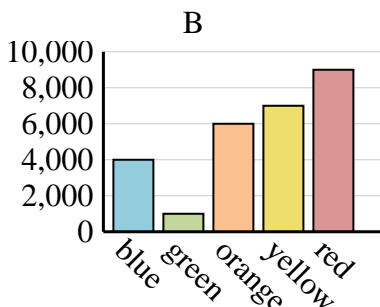
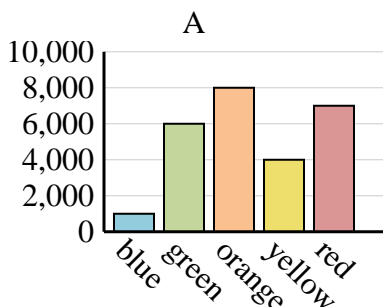
<b>Sales</b>	Jan	Feb	Mar	Apr	May
<b>Month</b>	3,500	2,500	5,000	4,500	1,000



<b>Name</b>	Adam	Bill	Cody	Dan	Ed
<b>Points</b>	30	15	50	45	25



<b>Favorite Color</b>	blue	green	orange	yellow	red
<b>People</b>	4,000	1,000	6,000	7,000	9,000

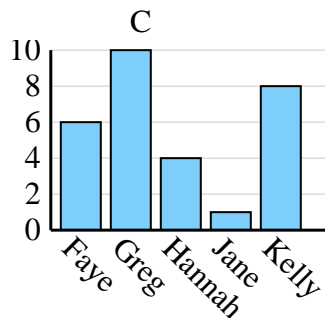
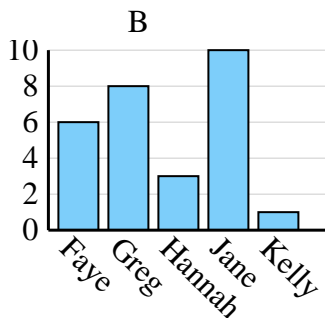
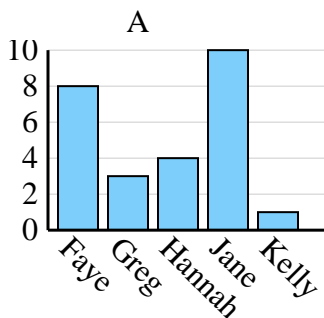




Determine which graph (A, B or C) best represents the information in the table.

Answers

Name	Faye	Greg	Hannah	Jane	Kelly
States Lived In	6	10	4	1	8



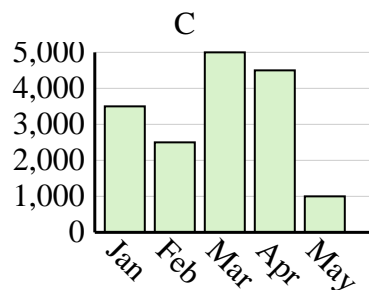
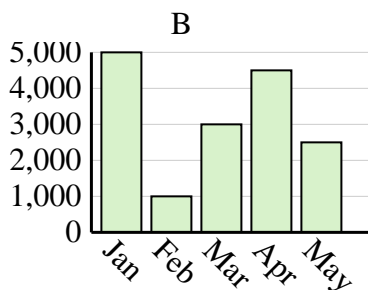
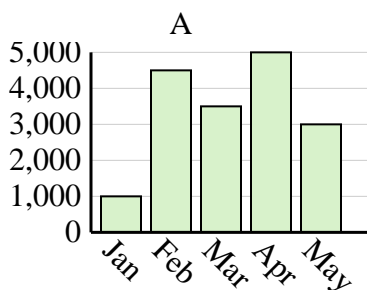
1. **C**

2. **C**

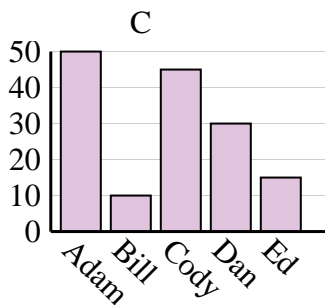
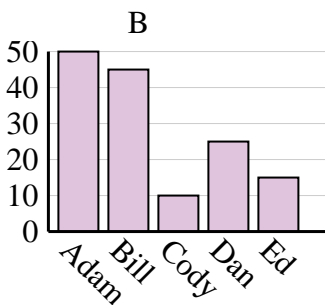
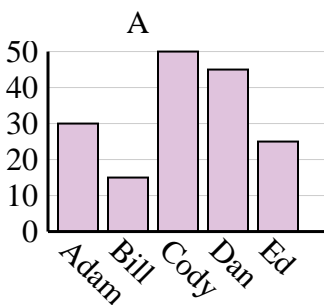
3. **A**

4. **B**

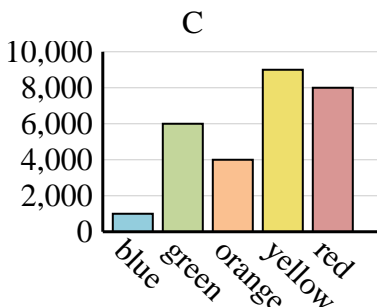
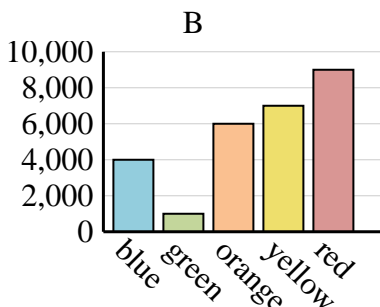
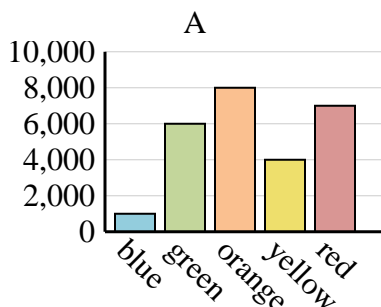
Sales	Jan	Feb	Mar	Apr	May
Month	3,500	2,500	5,000	4,500	1,000



Name	Adam	Bill	Cody	Dan	Ed
Points	30	15	50	45	25



Favorite Color	blue	green	orange	yellow	red
People	4,000	1,000	6,000	7,000	9,000



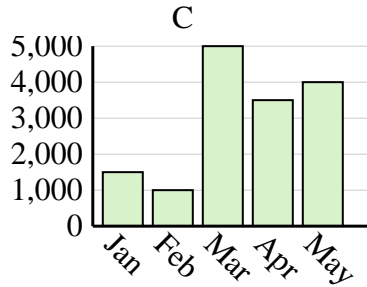
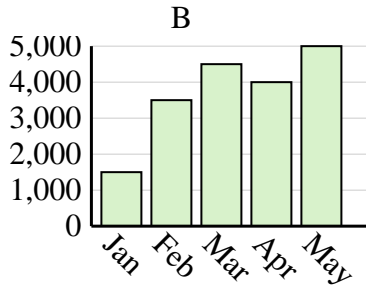
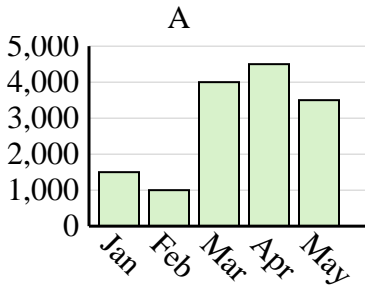


Determine which graph (A, B or C) best represents the information in the table.

Answers

1)

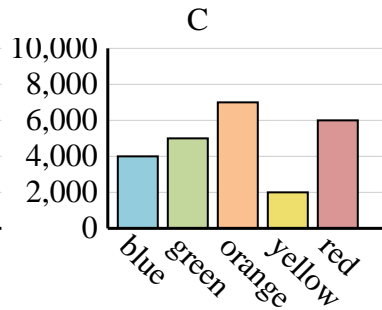
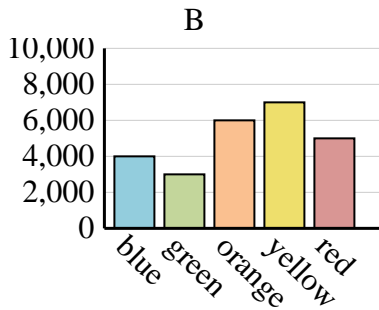
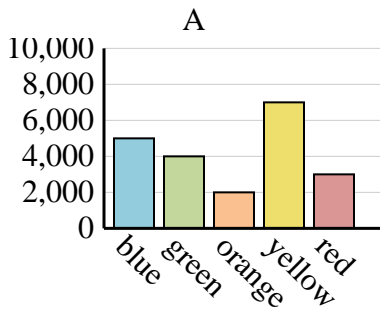
Sales	Jan	Feb	Mar	Apr	May
Month	1,500	1,000	4,000	4,500	3,500



1. \_\_\_\_\_
2. \_\_\_\_\_
3. \_\_\_\_\_
4. \_\_\_\_\_

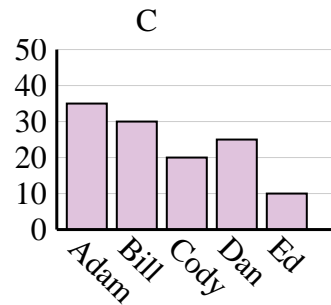
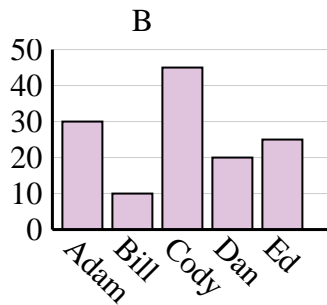
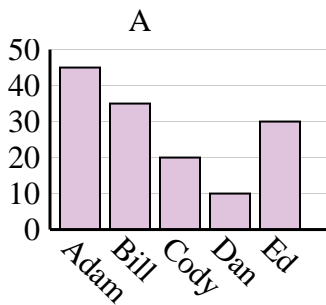
2)

Favorite Color	blue	green	orange	yellow	red
People	4,000	3,000	6,000	7,000	5,000



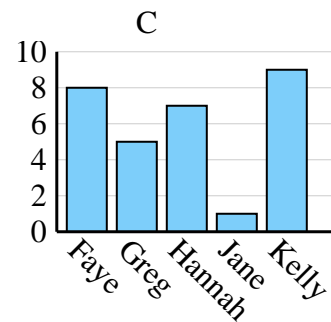
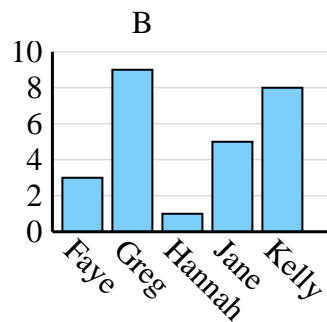
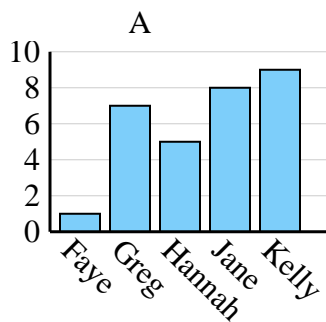
3)

Name	Adam	Bill	Cody	Dan	Ed
Points	35	30	20	25	10



4)

Name	Faye	Greg	Hannah	Jane	Kelly
States Lived In	1	7	5	8	9



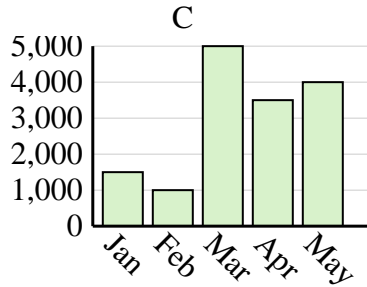
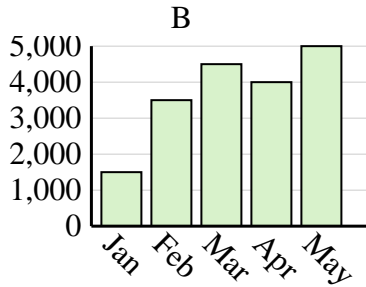
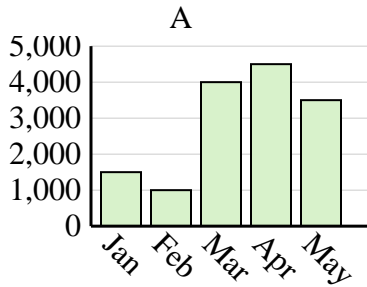


Determine which graph (A, B or C) best represents the information in the table.

Answers

1)

Sales	Jan	Feb	Mar	Apr	May
Month	1,500	1,000	4,000	4,500	3,500



1. **A**

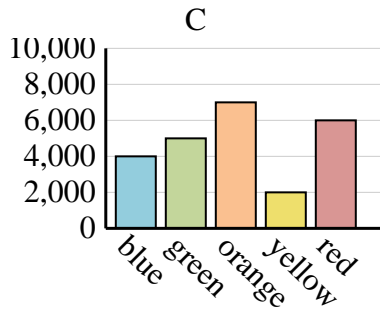
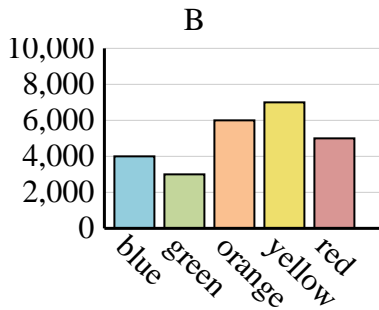
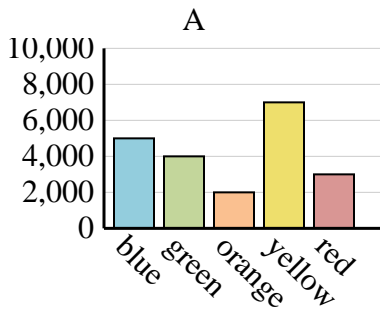
2. **B**

3. **C**

4. **A**

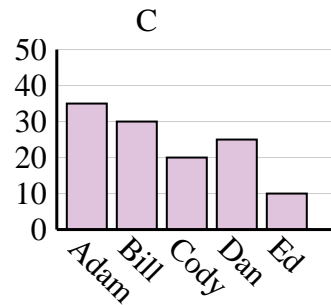
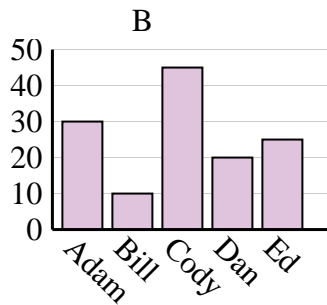
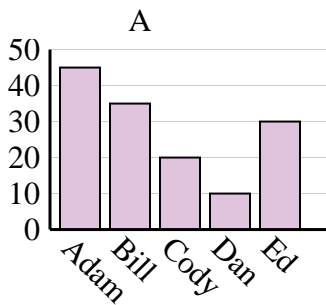
2)

Favorite Color	blue	green	orange	yellow	red
People	4,000	3,000	6,000	7,000	5,000



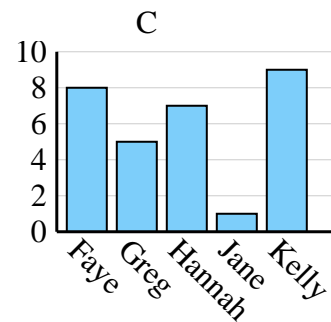
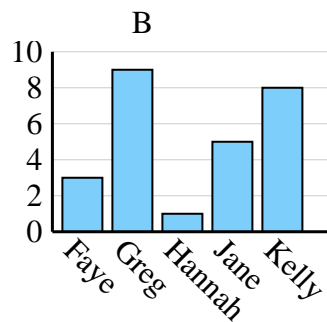
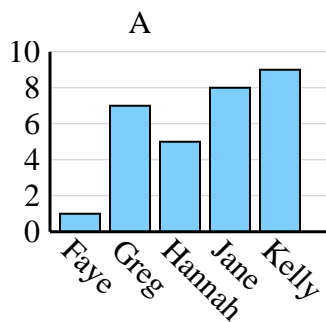
3)

Name	Adam	Bill	Cody	Dan	Ed
Points	35	30	20	25	10



4)

Name	Faye	Greg	Hannah	Jane	Kelly
States Lived In	1	7	5	8	9





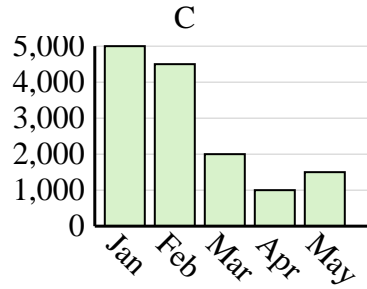
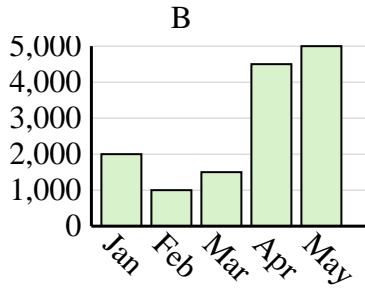
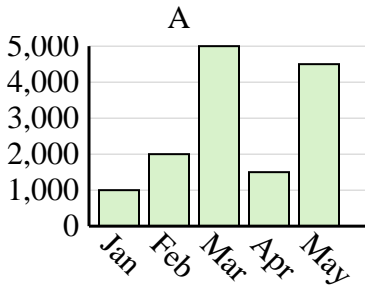


Determine which graph (A, B or C) best represents the information in the table.

Answers

1)

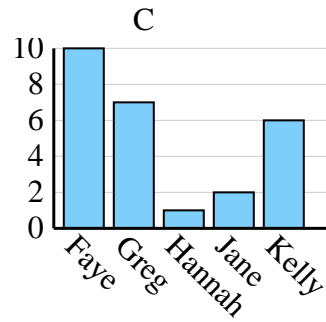
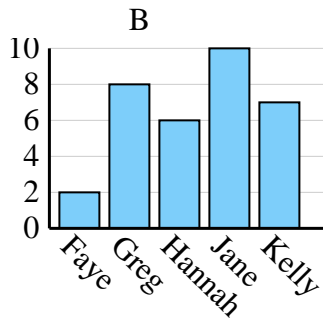
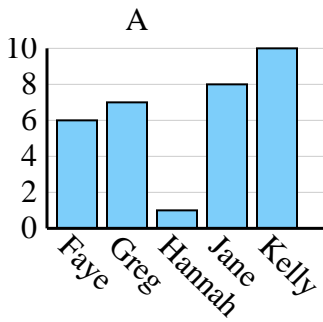
Sales	Jan	Feb	Mar	Apr	May
Month	5,000	4,500	2,000	1,000	1,500



1. \_\_\_\_\_
2. \_\_\_\_\_
3. \_\_\_\_\_
4. \_\_\_\_\_

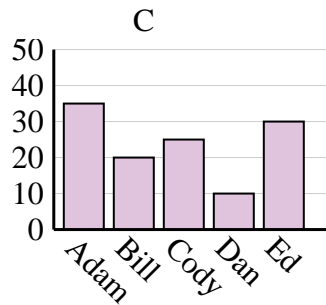
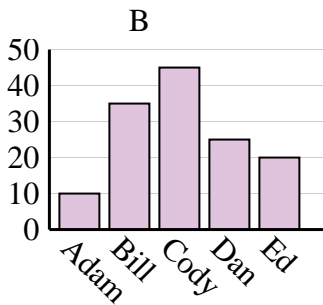
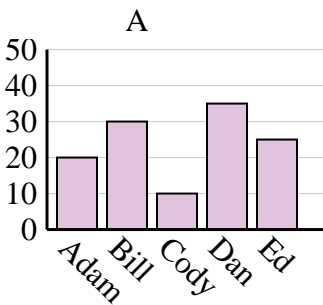
2)

Name	Faye	Greg	Hannah	Jane	Kelly
States Lived In	6	7	1	8	10



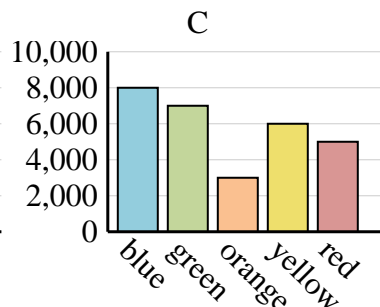
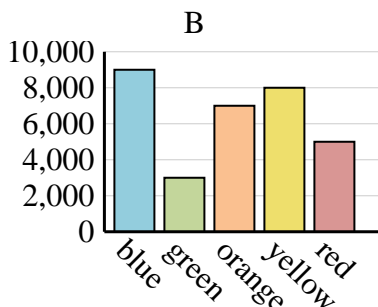
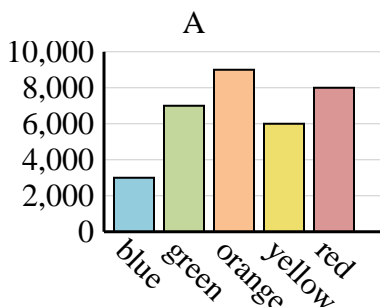
3)

Name	Adam	Bill	Cody	Dan	Ed
Points	10	35	45	25	20



4)

Favorite Color	blue	green	orange	yellow	red
People	8,000	7,000	3,000	6,000	5,000

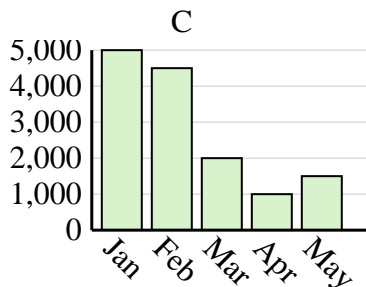
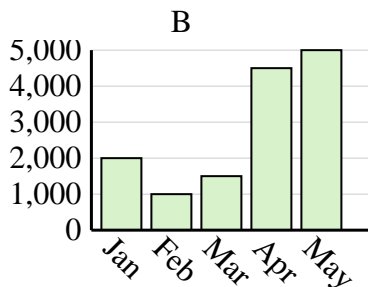
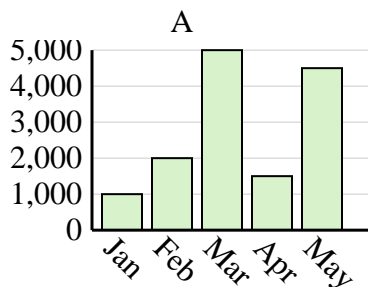




Determine which graph (A, B or C) best represents the information in the table.

Answers

<b>Sales</b>	Jan	Feb	Mar	Apr	May
<b>Month</b>	5,000	4,500	2,000	1,000	1,500



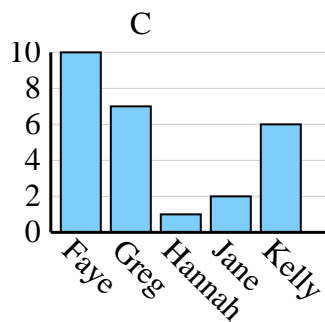
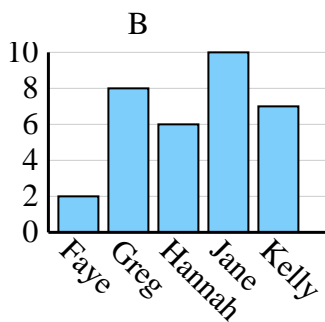
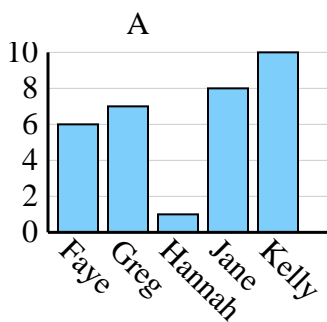
1. **C**

2. **A**

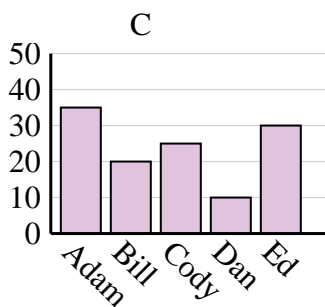
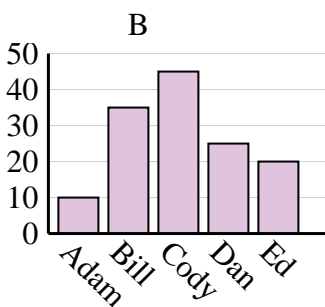
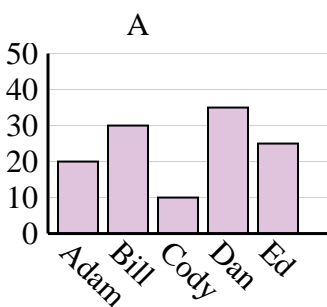
3. **B**

4. **C**

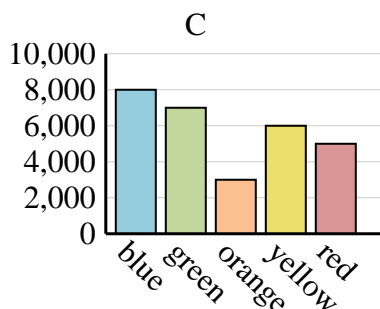
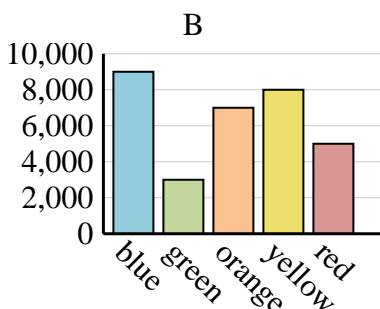
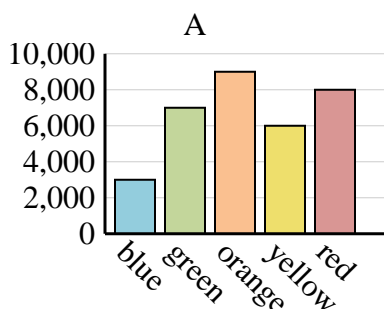
<b>Name</b>	Faye	Greg	Hannah	Jane	Kelly
<b>States Lived In</b>	6	7	1	8	10



<b>Name</b>	Adam	Bill	Cody	Dan	Ed
<b>Points</b>	10	35	45	25	20



<b>Favorite Color</b>	blue	green	orange	yellow	red
<b>People</b>	8,000	7,000	3,000	6,000	5,000



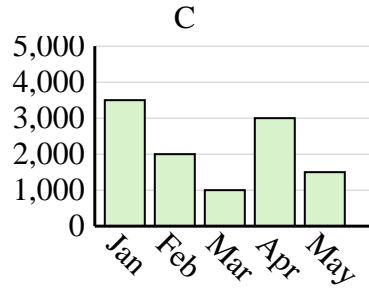
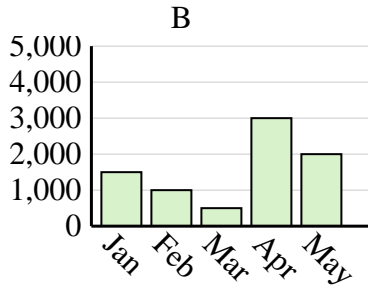
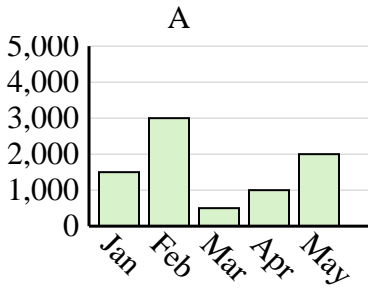


Determine which graph (A, B or C) best represents the information in the table.

Answers

1)

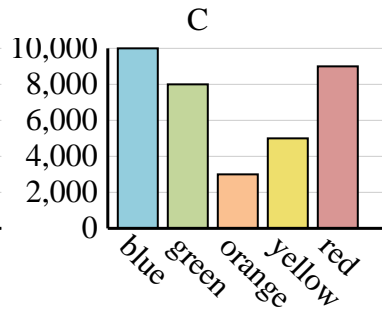
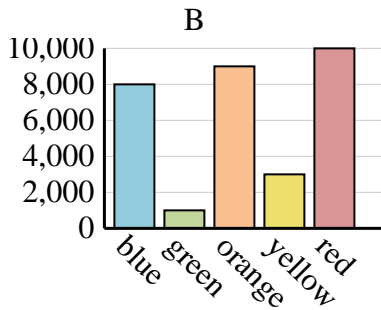
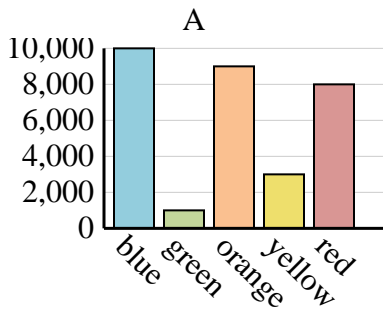
Sales	Jan	Feb	Mar	Apr	May
Month	3,500	2,000	1,000	3,000	1,500



1. \_\_\_\_\_
2. \_\_\_\_\_
3. \_\_\_\_\_
4. \_\_\_\_\_

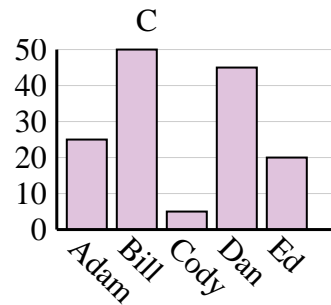
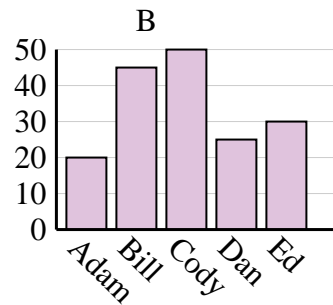
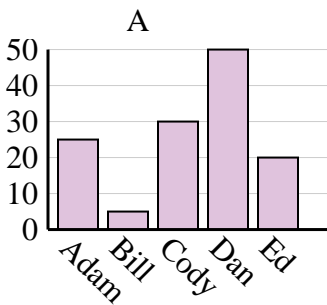
2)

Favorite Color	blue	green	orange	yellow	red
People	10,000	1,000	9,000	3,000	8,000



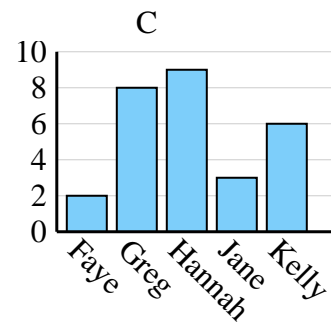
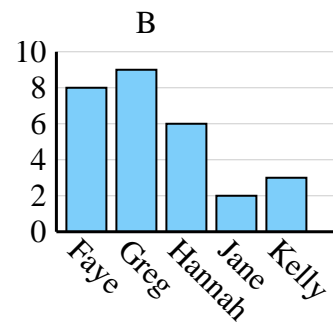
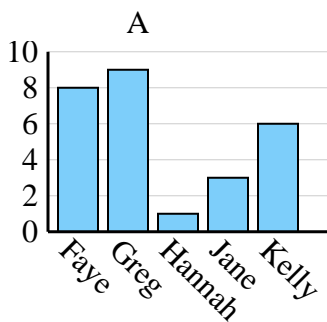
3)

Name	Adam	Bill	Cody	Dan	Ed
Points	25	5	30	50	20



4)

Name	Faye	Greg	Hannah	Jane	Kelly
States Lived In	8	9	1	3	6

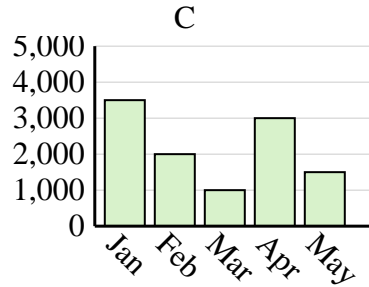
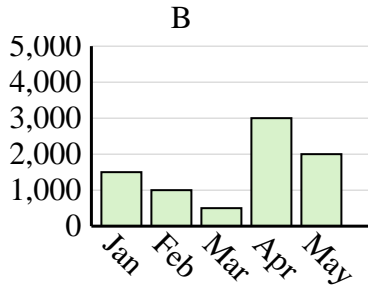
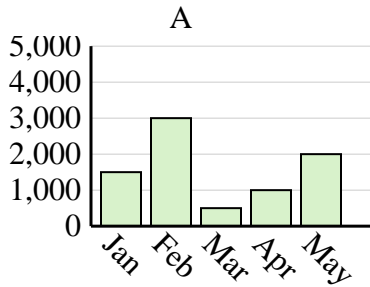




Determine which graph (A, B or C) best represents the information in the table.

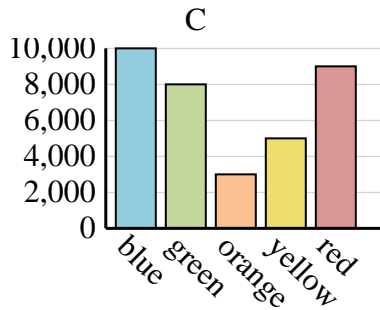
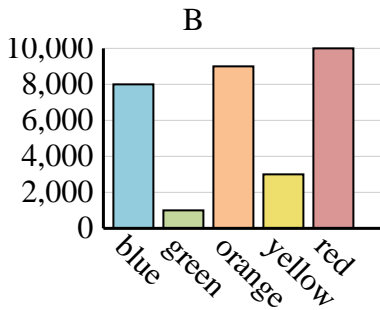
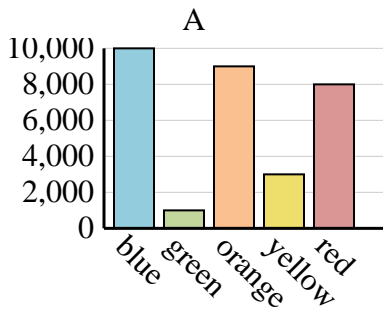
Answers

<b>Sales</b>	Jan	Feb	Mar	Apr	May
<b>Month</b>	3,500	2,000	1,000	3,000	1,500



1. **C**

<b>Favorite Color</b>	blue	green	orange	yellow	red
<b>People</b>	10,000	1,000	9,000	3,000	8,000

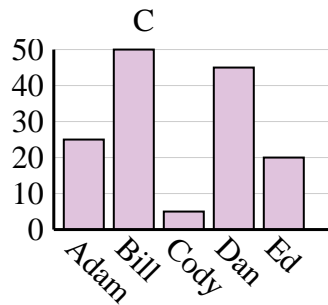
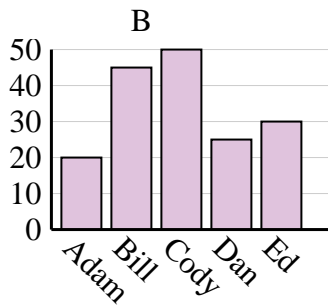
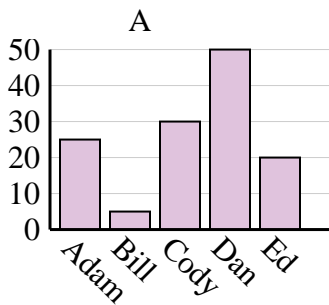


2. **A**

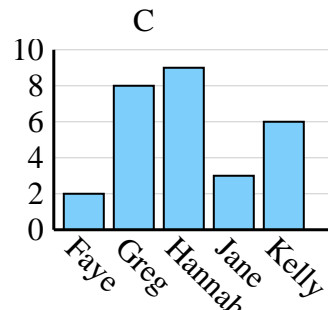
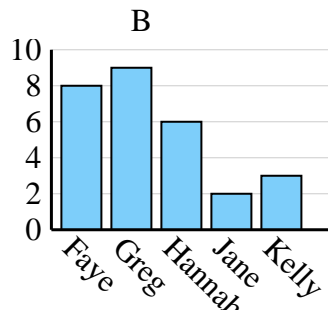
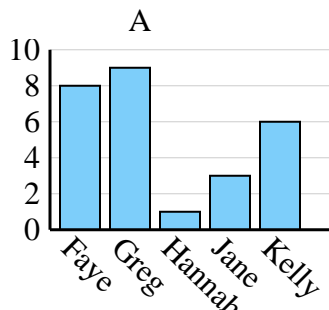
3. **A**

4. **A**

<b>Name</b>	Adam	Bill	Cody	Dan	Ed
<b>Points</b>	25	5	30	50	20



<b>Name</b>	Faye	Greg	Hannah	Jane	Kelly
<b>States Lived In</b>	8	9	1	3	6

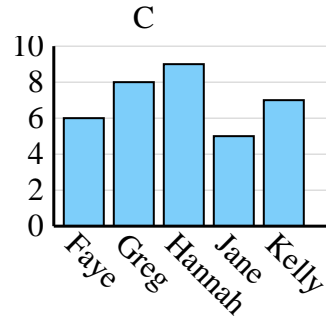
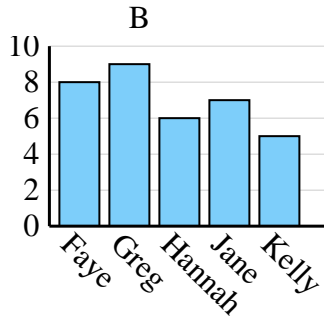
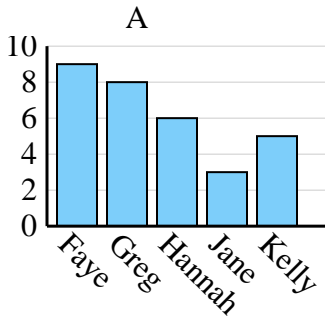




Determine which graph (A, B or C) best represents the information in the table.

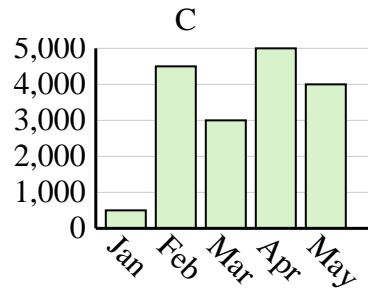
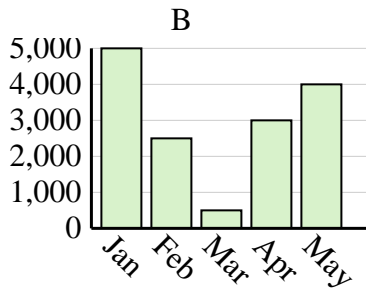
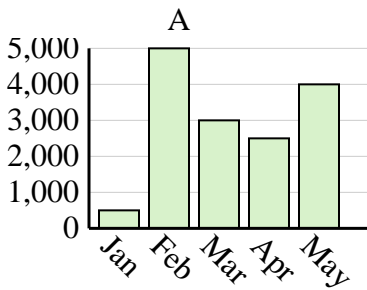
Answers

<b>Name</b>	Faye	Greg	Hannah	Jane	Kelly
<b>States Lived In</b>	6	8	9	5	7

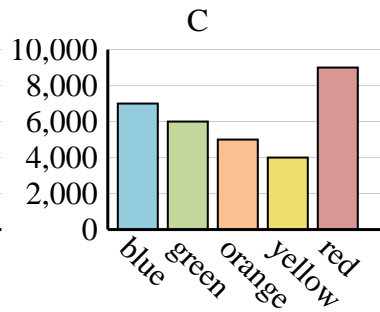
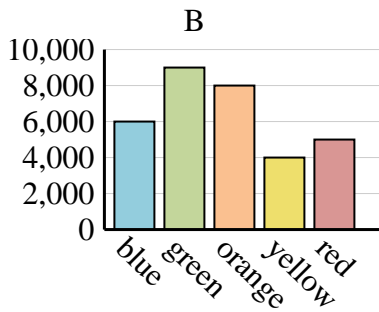
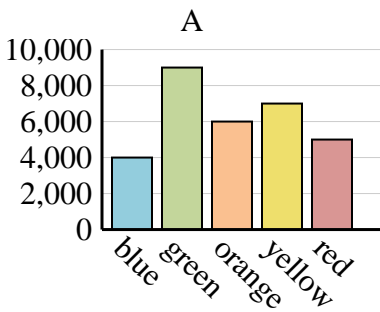


1. \_\_\_\_\_
2. \_\_\_\_\_
3. \_\_\_\_\_
4. \_\_\_\_\_

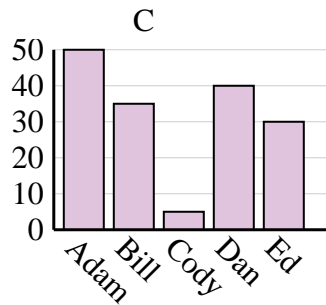
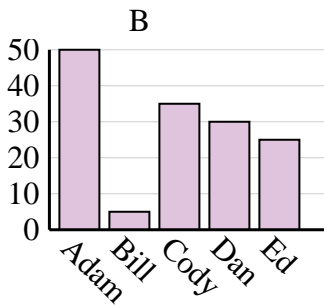
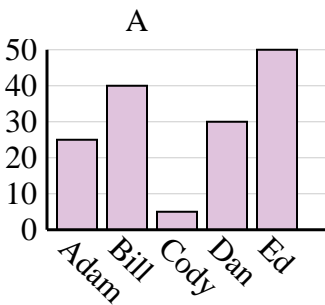
<b>Sales</b>	Jan	Feb	Mar	Apr	May
<b>Month</b>	500	4,500	3,000	5,000	4,000



<b>Favorite Color</b>	blue	green	orange	yellow	red
<b>People</b>	4,000	9,000	6,000	7,000	5,000



<b>Name</b>	Adam	Bill	Cody	Dan	Ed
<b>Points</b>	50	35	5	40	30

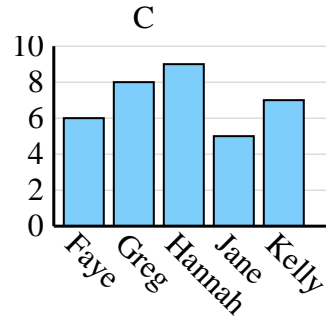
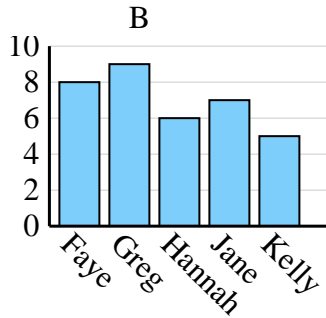
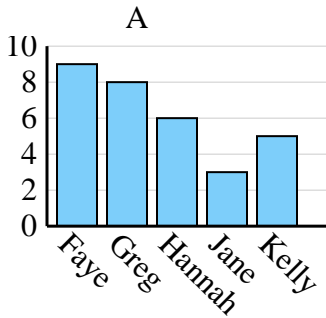




Determine which graph (A, B or C) best represents the information in the table.

Answers

<b>Name</b>	Faye	Greg	Hannah	Jane	Kelly
<b>States Lived In</b>	6	8	9	5	7



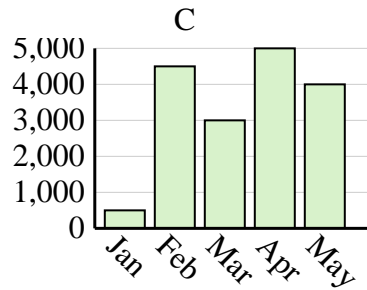
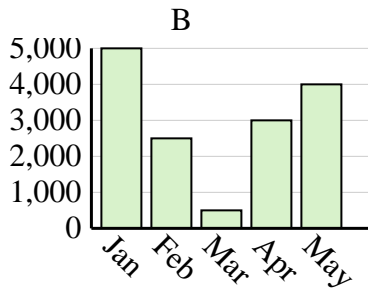
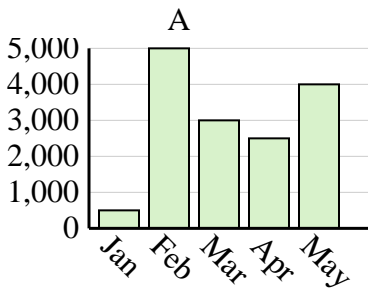
1. **C**

2. **C**

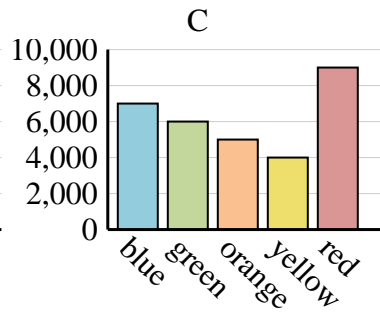
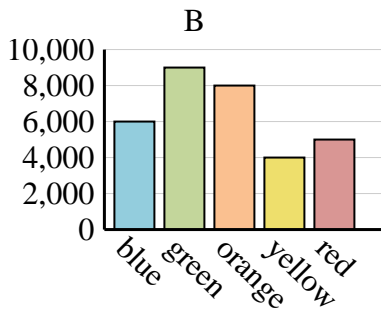
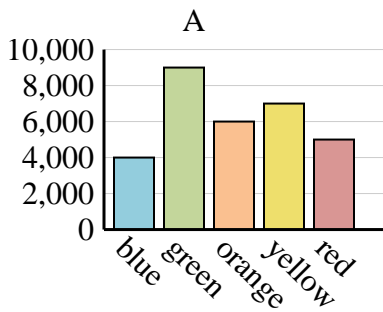
3. **A**

4. **C**

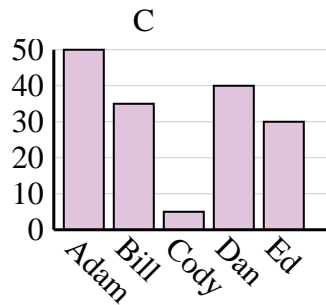
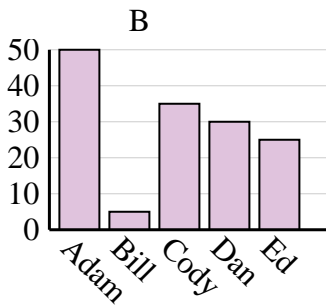
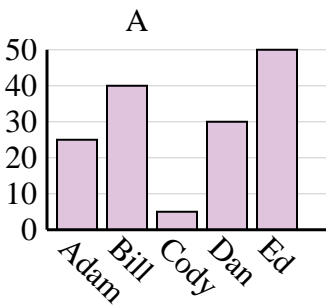
<b>Sales</b>	Jan	Feb	Mar	Apr	May
<b>Month</b>	500	4,500	3,000	5,000	4,000



<b>Favorite Color</b>	blue	green	orange	yellow	red
<b>People</b>	4,000	9,000	6,000	7,000	5,000



<b>Name</b>	Adam	Bill	Cody	Dan	Ed
<b>Points</b>	50	35	5	40	30

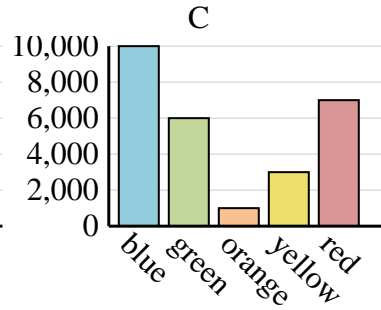
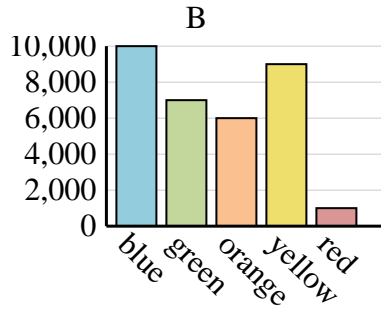
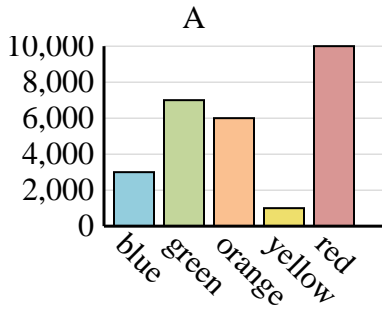




Determine which graph (A, B or C) best represents the information in the table.

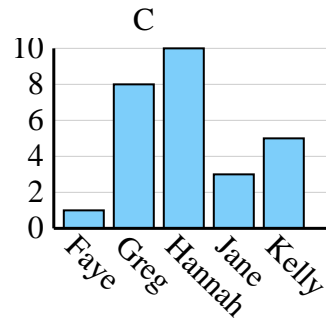
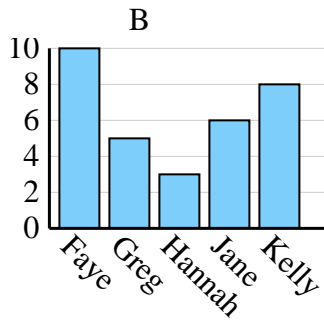
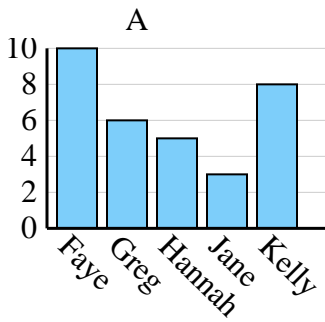
Answers

<b>Favorite Color</b>	blue	green	orange	yellow	red
<b>People</b>	10,000	6,000	1,000	3,000	7,000

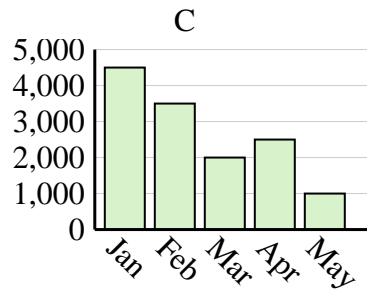
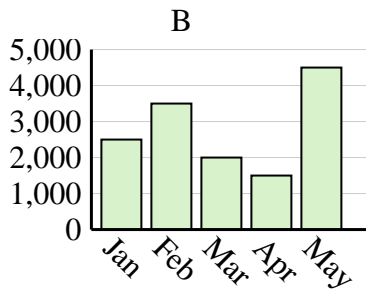
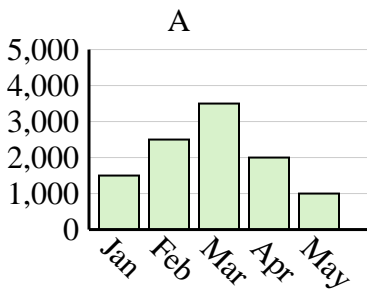


1. \_\_\_\_\_
2. \_\_\_\_\_
3. \_\_\_\_\_
4. \_\_\_\_\_

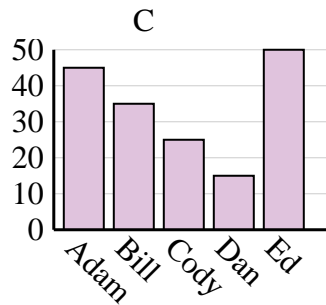
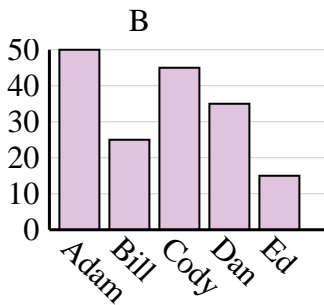
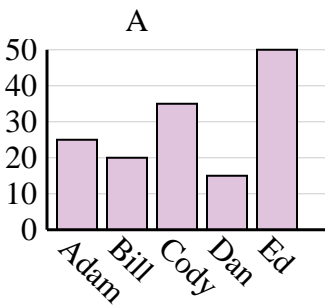
<b>Name</b>	Faye	Greg	Hannah	Jane	Kelly
<b>States Lived In</b>	1	8	10	3	5



<b>Sales</b>	Jan	Feb	Mar	Apr	May
<b>Month</b>	4,500	3,500	2,000	2,500	1,000



<b>Name</b>	Adam	Bill	Cody	Dan	Ed
<b>Points</b>	45	35	25	15	50

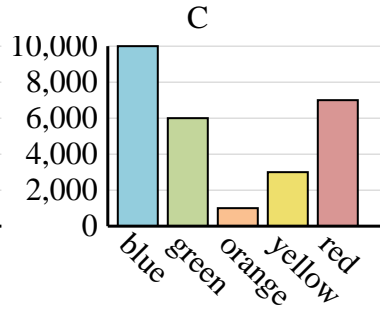
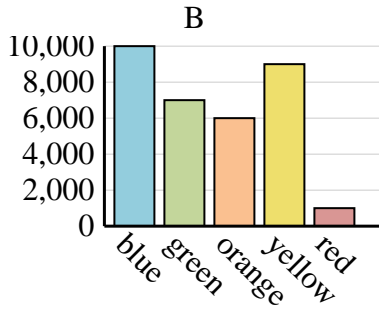
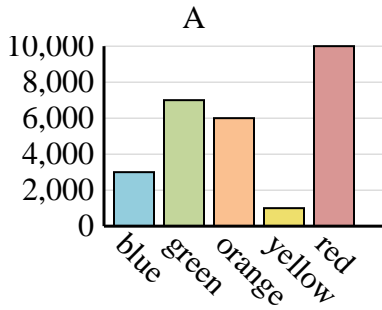




Determine which graph (A, B or C) best represents the information in the table.

Answers

Favorite Color	blue	green	orange	yellow	red
People	10,000	6,000	1,000	3,000	7,000



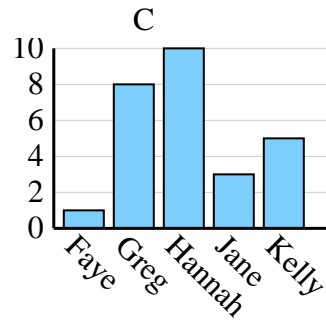
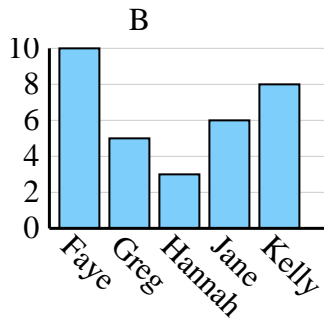
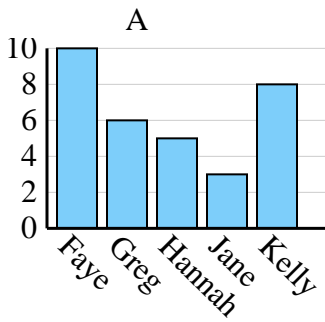
1. **C**

2. **C**

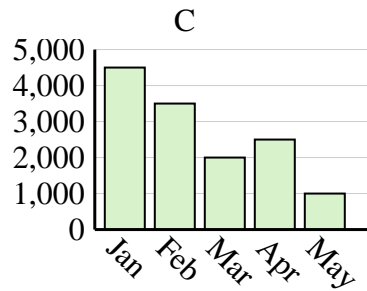
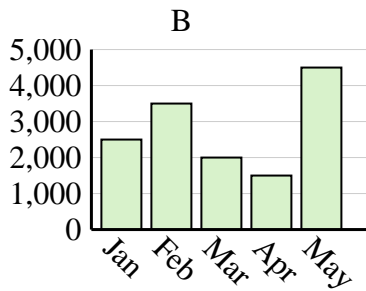
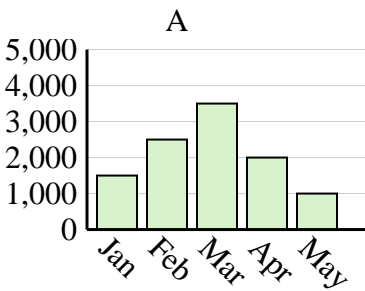
3. **C**

4. **C**

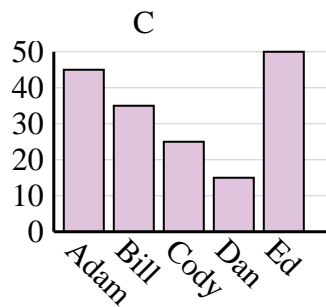
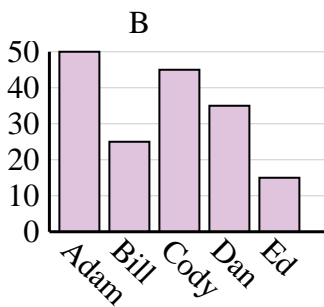
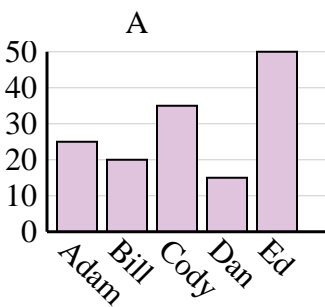
Name	Faye	Greg	Hannah	Jane	Kelly
States Lived In	1	8	10	3	5



Sales	Jan	Feb	Mar	Apr	May
Month	4,500	3,500	2,000	2,500	1,000



Name	Adam	Bill	Cody	Dan	Ed
Points	45	35	25	15	50



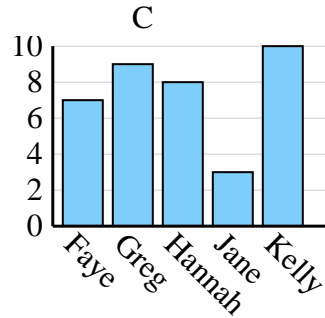
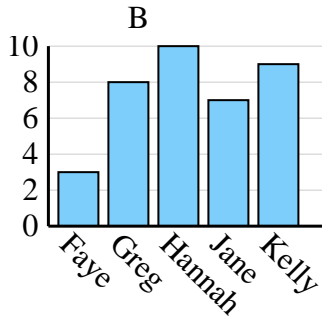
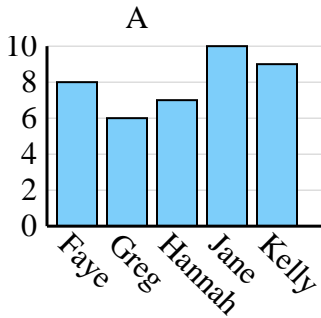




Determine which graph (A, B or C) best represents the information in the table.

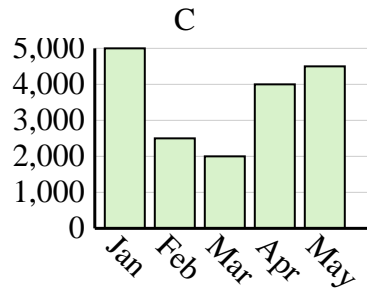
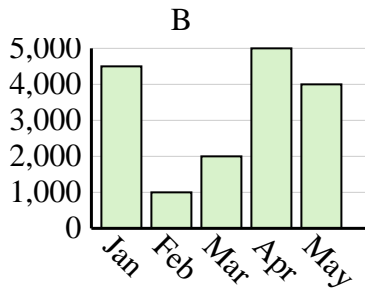
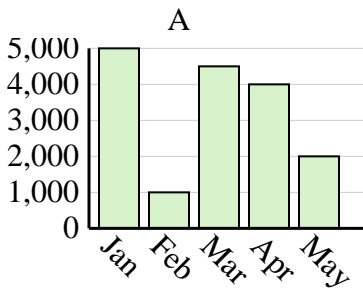
Answers

<b>Name</b>	Faye	Greg	Hannah	Jane	Kelly
<b>States Lived In</b>	7	9	8	3	10

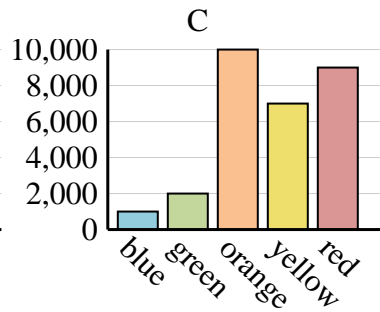
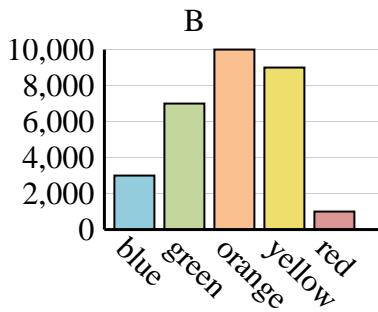
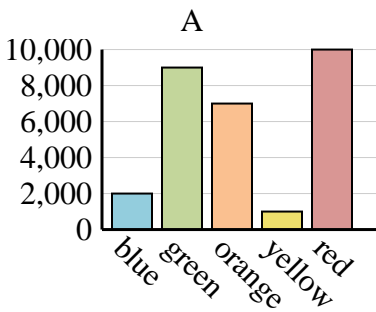


1. \_\_\_\_\_
2. \_\_\_\_\_
3. \_\_\_\_\_
4. \_\_\_\_\_

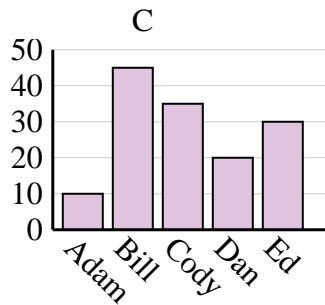
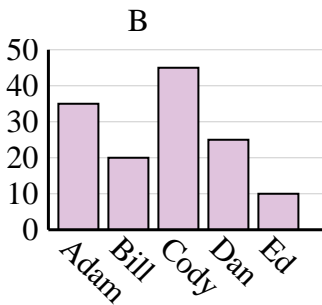
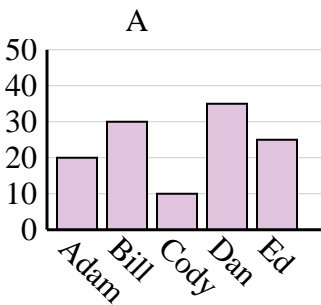
<b>Sales</b>	Jan	Feb	Mar	Apr	May
<b>Month</b>	4,500	1,000	2,000	5,000	4,000



<b>Favorite Color</b>	blue	green	orange	yellow	red
<b>People</b>	3,000	7,000	10,000	9,000	1,000



<b>Name</b>	Adam	Bill	Cody	Dan	Ed
<b>Points</b>	10	45	35	20	30

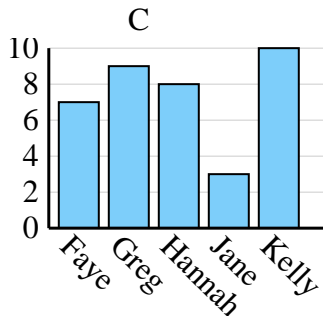
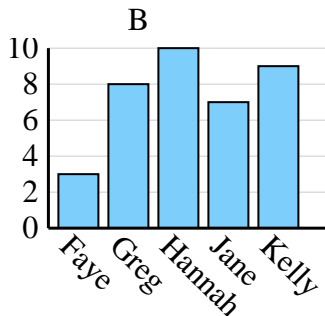
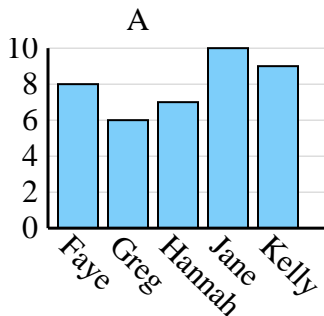




Determine which graph (A, B or C) best represents the information in the table.

Answers

Name	Faye	Greg	Hannah	Jane	Kelly
States Lived In	7	9	8	3	10



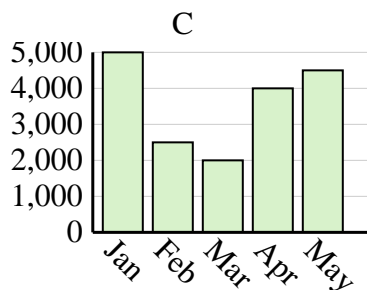
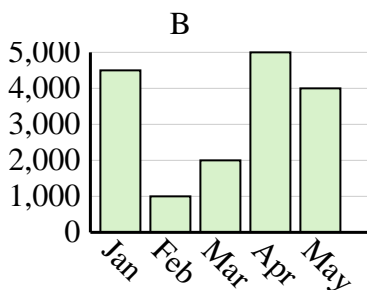
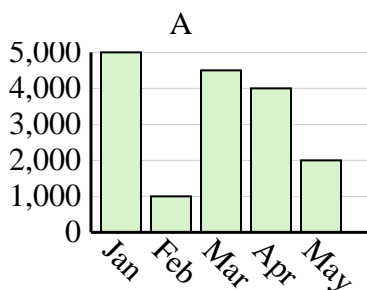
1. **C**

2. **B**

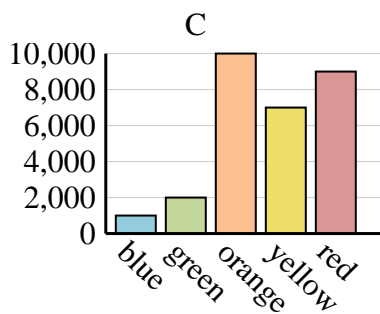
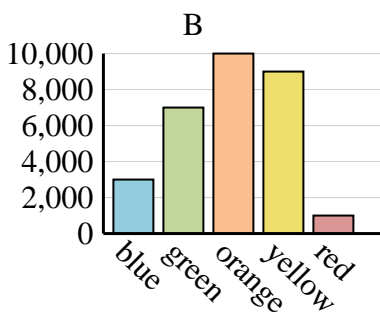
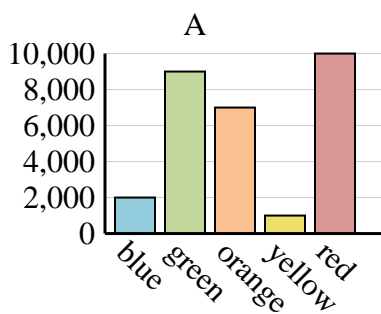
3. **B**

4. **C**

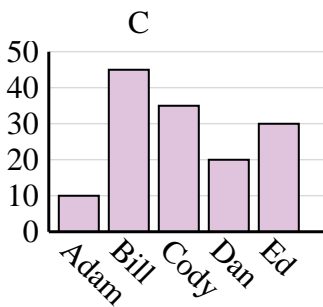
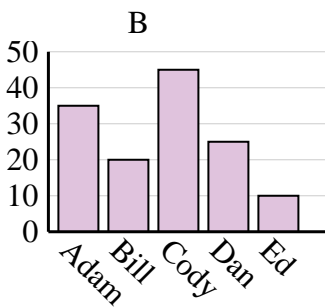
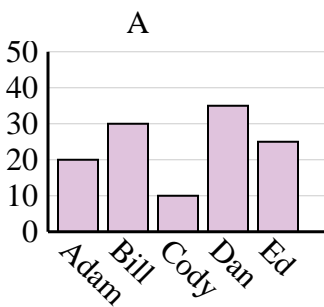
Sales	Jan	Feb	Mar	Apr	May
Month	4,500	1,000	2,000	5,000	4,000



Favorite Color	blue	green	orange	yellow	red
People	3,000	7,000	10,000	9,000	1,000



Name	Adam	Bill	Cody	Dan	Ed
Points	10	45	35	20	30

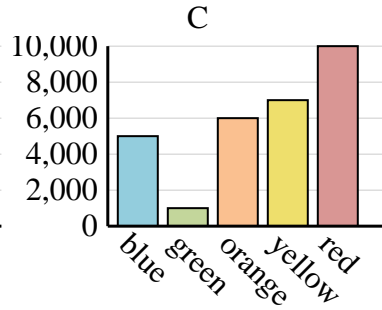
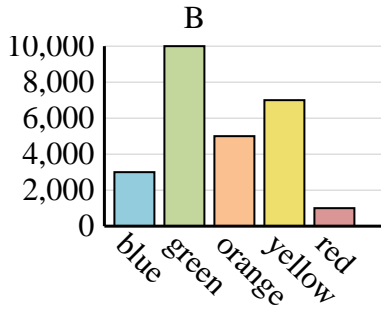
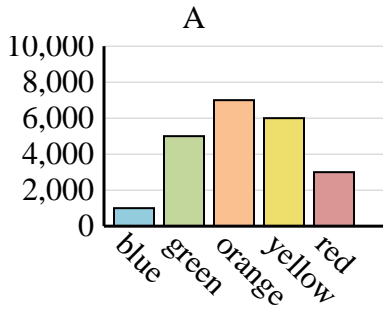




Determine which graph (A, B or C) best represents the information in the table.

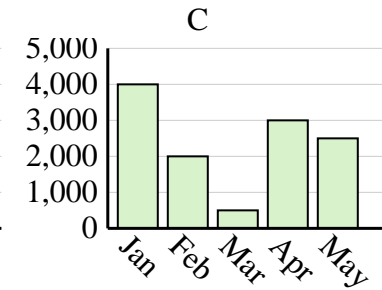
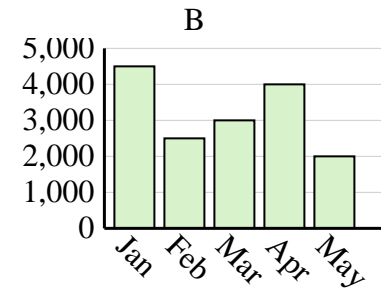
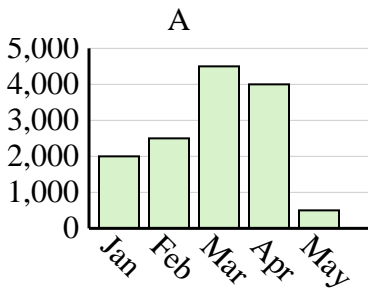
**Answers**

<b>Favorite Color</b>	blue	green	orange	yellow	red
<b>People</b>	1,000	5,000	7,000	6,000	3,000

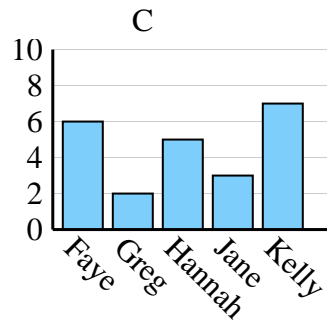
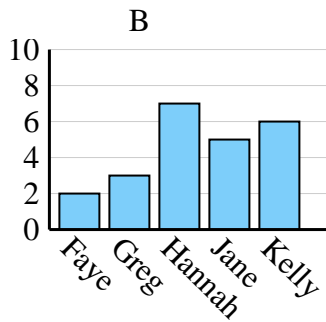
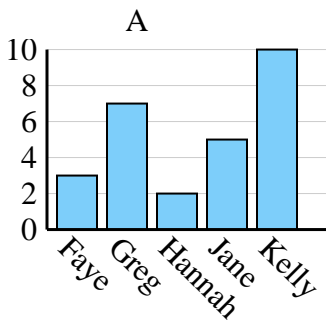


1. \_\_\_\_\_
2. \_\_\_\_\_
3. \_\_\_\_\_
4. \_\_\_\_\_

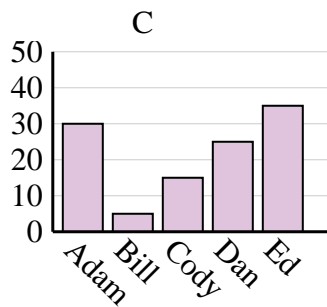
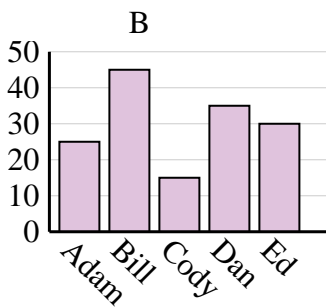
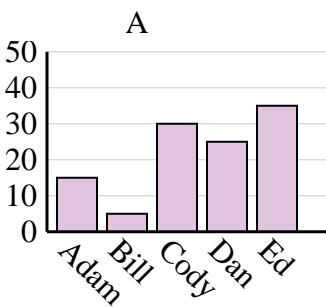
<b>Sales</b>	Jan	Feb	Mar	Apr	May
<b>Month</b>	2,000	2,500	4,500	4,000	500



<b>Name</b>	Faye	Greg	Hannah	Jane	Kelly
<b>States Lived In</b>	3	7	2	5	10



<b>Name</b>	Adam	Bill	Cody	Dan	Ed
<b>Points</b>	25	45	15	35	30

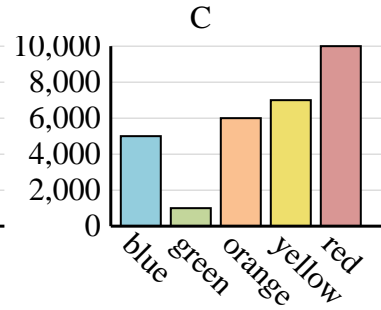
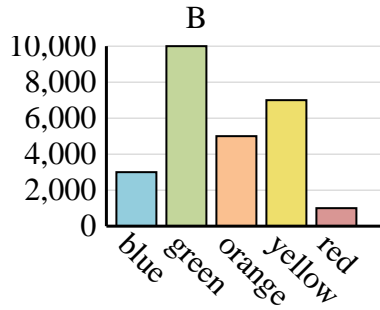
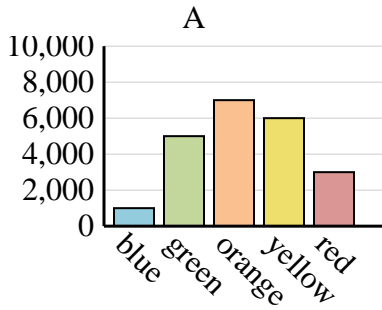




Determine which graph (A, B or C) best represents the information in the table.

Answers

Favorite Color	blue	green	orange	yellow	red
People	1,000	5,000	7,000	6,000	3,000



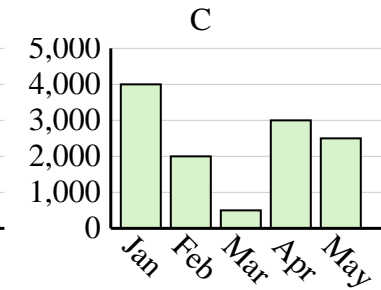
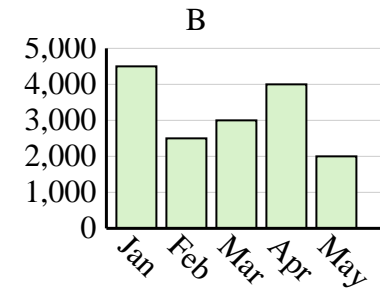
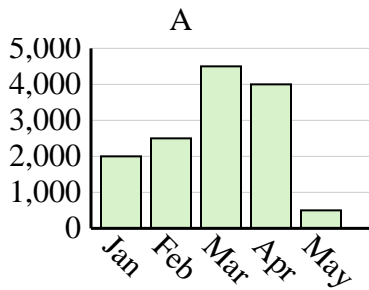
1. **A**

2. **A**

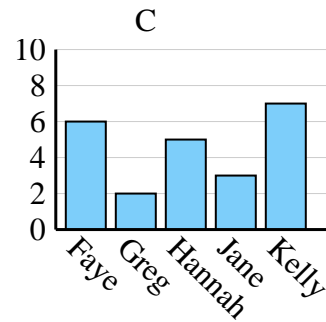
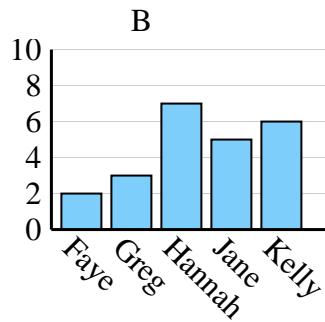
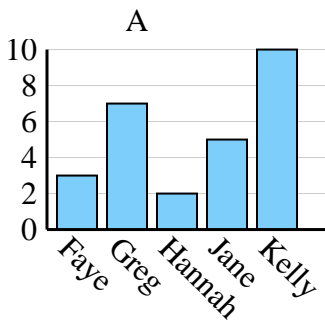
3. **A**

4. **B**

Sales	Jan	Feb	Mar	Apr	May
Month	2,000	2,500	4,500	4,000	500



Name	Faye	Greg	Hannah	Jane	Kelly
States Lived In	3	7	2	5	10



Name	Adam	Bill	Cody	Dan	Ed
Points	25	45	15	35	30

