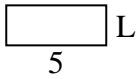


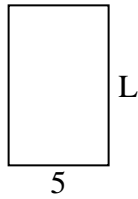


Determine the value of 'L'. Lengths are in cm (not to scale).

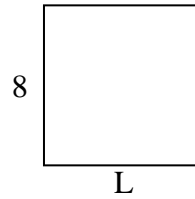
1) perimeter = 14



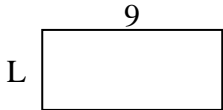
2) perimeter = 26



3) perimeter = 32



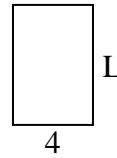
4) perimeter = 26



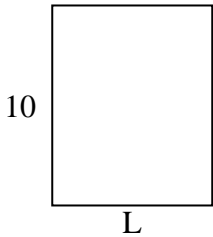
5) perimeter = 16




6) perimeter = 20



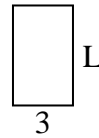
7) perimeter = 36



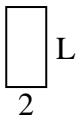
8) perimeter = 24




9) perimeter = 16



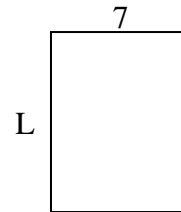
10) perimeter = 12



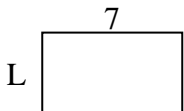
11) perimeter = 30



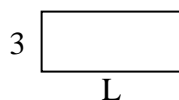
12) perimeter = 32



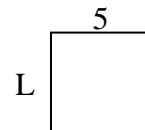
13) perimeter = 22



14) perimeter = 20



15) perimeter = 20



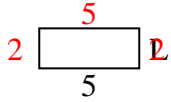
Answers

1. _____
2. _____
3. _____
4. _____
5. _____
6. _____
7. _____
8. _____
9. _____
10. _____
11. _____
12. _____
13. _____
14. _____
15. _____

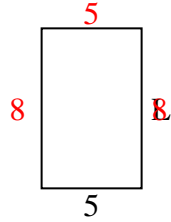


Determine the value of 'L'. Lengths are in cm (not to scale).

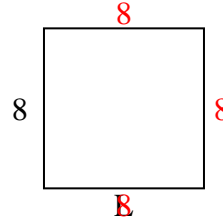
1) perimeter = 14



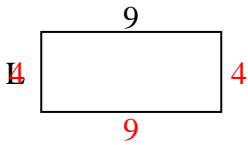
2) perimeter = 26



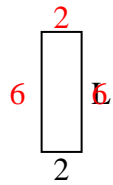
3) perimeter = 32



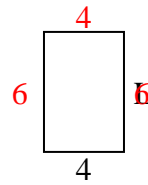
4) perimeter = 26



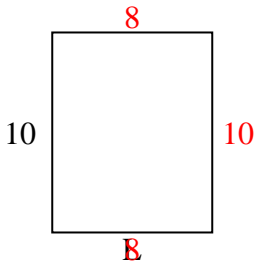
5) perimeter = 16



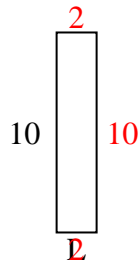
6) perimeter = 20



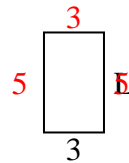
7) perimeter = 36



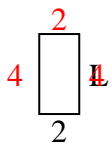
8) perimeter = 24



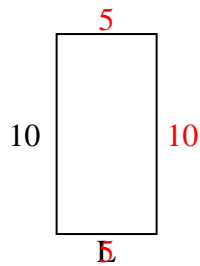
9) perimeter = 16



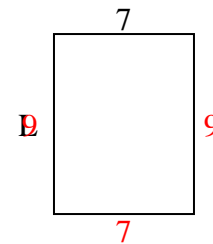
10) perimeter = 12



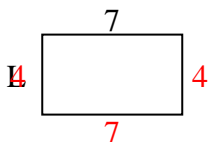
11) perimeter = 30



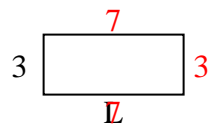
12) perimeter = 32



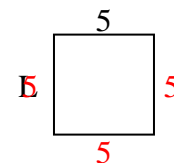
13) perimeter = 22



14) perimeter = 20



15) perimeter = 20



Answers

1. 2 cm

2. 8 cm

3. 8 cm

4. 4 cm

5. 6 cm

6. 6 cm

7. 8 cm

8. 2 cm

9. 5 cm

10. 4 cm

11. 5 cm

12. 9 cm

13. 4 cm

14. 7 cm

15. 5 cm