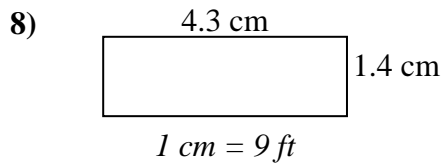
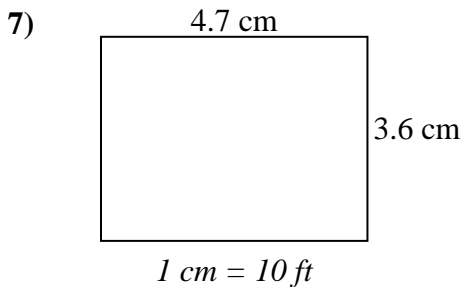
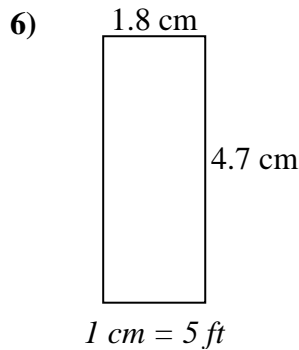
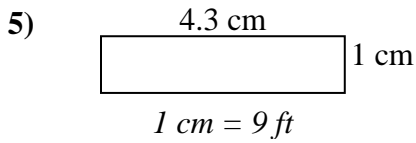
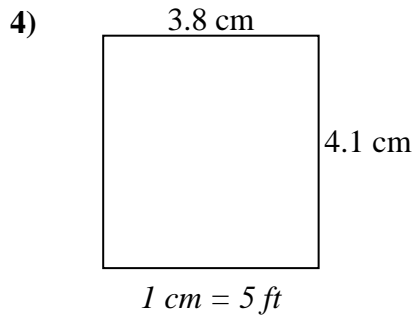
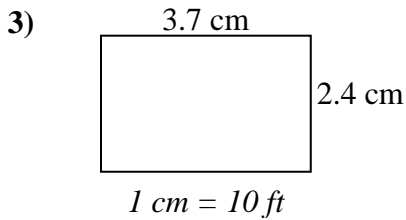
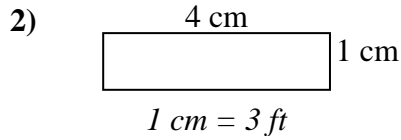
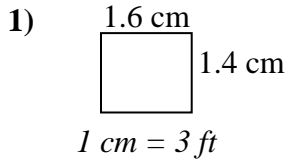




Determine the actual width, height and area of each scale rectangle.

Round the area to the nearest whole number.



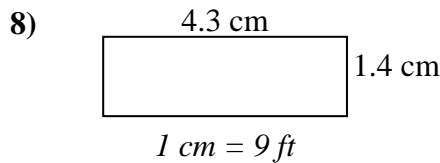
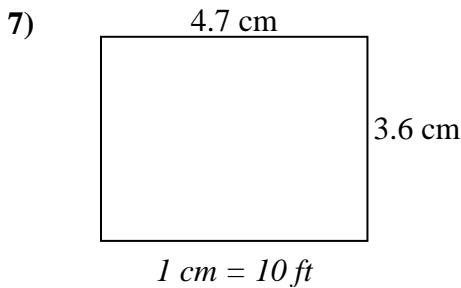
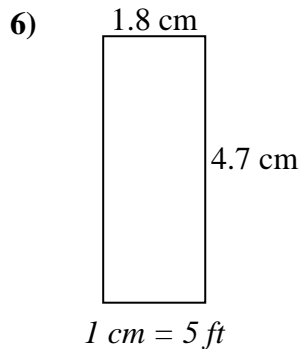
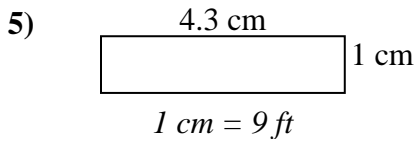
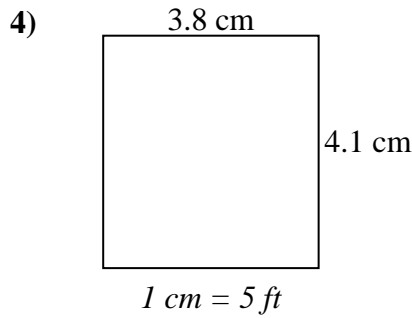
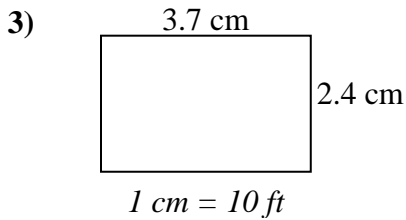
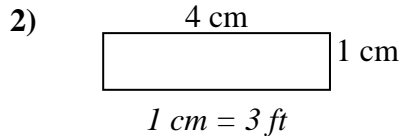
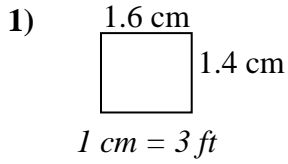
Answers

1. \_\_\_\_\_
2. \_\_\_\_\_
3. \_\_\_\_\_
4. \_\_\_\_\_
5. \_\_\_\_\_
6. \_\_\_\_\_
7. \_\_\_\_\_
8. \_\_\_\_\_



Determine the actual width, height and area of each scale rectangle.

Round the area to the nearest whole number.



Answers

|    |             |             |              |
|----|-------------|-------------|--------------|
| 1. | <u>4.8</u>  | <u>4.2</u>  | <u>20</u>    |
| 2. | <u>12</u>   | <u>3</u>    | <u>36</u>    |
| 3. | <u>37</u>   | <u>24</u>   | <u>888</u>   |
| 4. | <u>19</u>   | <u>20.5</u> | <u>390</u>   |
| 5. | <u>38.7</u> | <u>9</u>    | <u>348</u>   |
| 6. | <u>9</u>    | <u>23.5</u> | <u>212</u>   |
| 7. | <u>47</u>   | <u>36</u>   | <u>1,692</u> |
| 8. | <u>38.7</u> | <u>12.6</u> | <u>488</u>   |