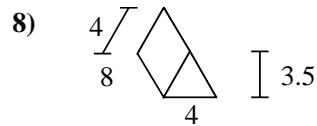
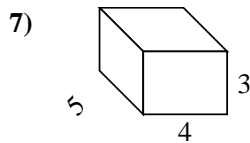
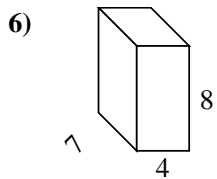
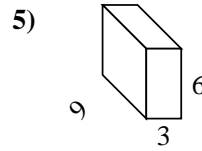
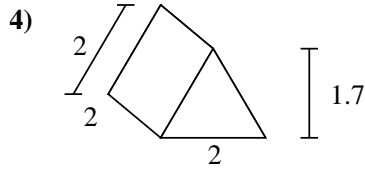
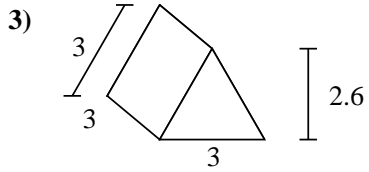
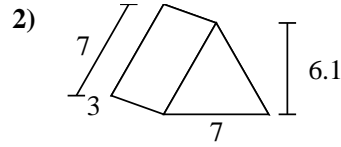
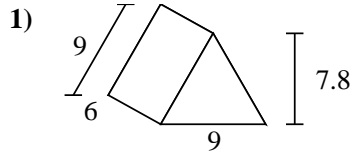
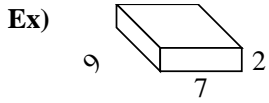




Find the surface area of each figure. Units are in cm (not to scale).



**Answers**

Ex. 190 cm<sup>2</sup>

1. \_\_\_\_\_

2. \_\_\_\_\_

3. \_\_\_\_\_

4. \_\_\_\_\_

5. \_\_\_\_\_

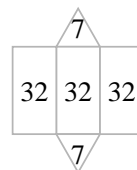
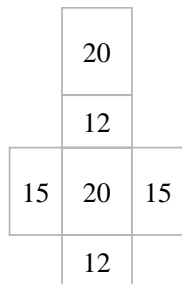
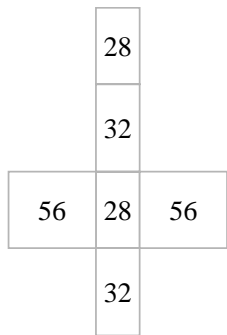
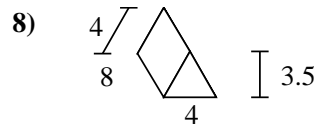
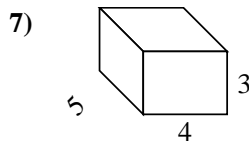
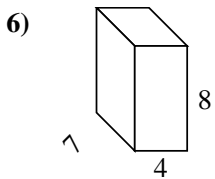
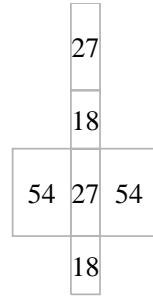
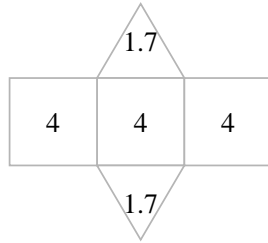
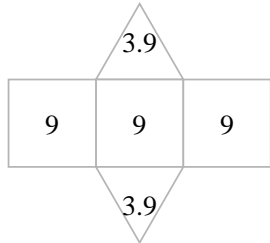
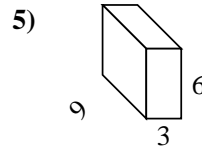
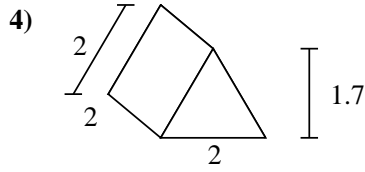
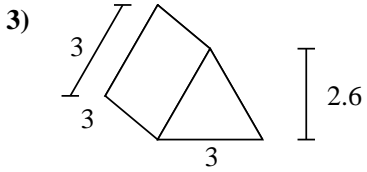
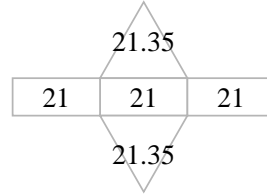
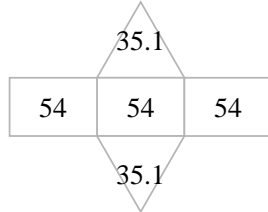
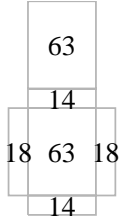
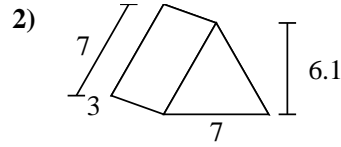
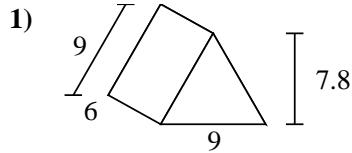
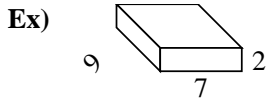
6. \_\_\_\_\_

7. \_\_\_\_\_

8. \_\_\_\_\_



Find the surface area of each figure. Units are in cm (not to scale).



**Answers**

Ex. 190 cm<sup>2</sup>

1. 232.2 cm<sup>2</sup>

2. 105.7 cm<sup>2</sup>

3. 34.8 cm<sup>2</sup>

4. 15.4 cm<sup>2</sup>

5. 198 cm<sup>2</sup>

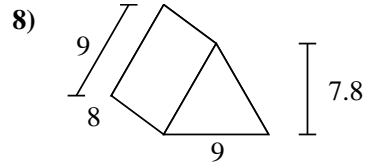
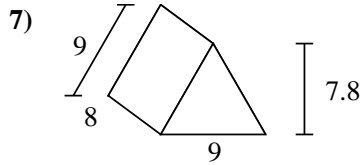
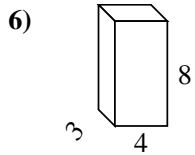
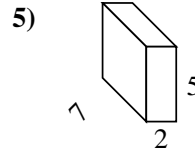
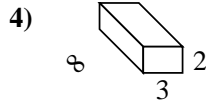
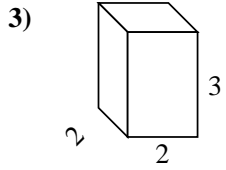
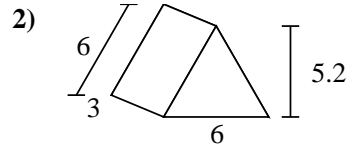
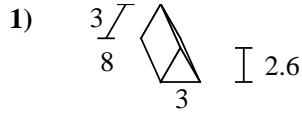
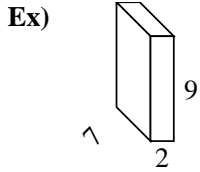
6. 232 cm<sup>2</sup>

7. 94 cm<sup>2</sup>

8. 110 cm<sup>2</sup>



Find the surface area of each figure. Units are in cm (not to scale).



**Answers**

Ex. 190 cm<sup>2</sup>

1. \_\_\_\_\_

2. \_\_\_\_\_

3. \_\_\_\_\_

4. \_\_\_\_\_

5. \_\_\_\_\_

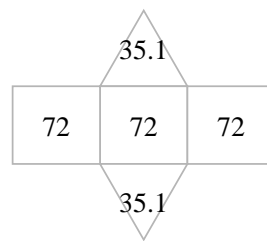
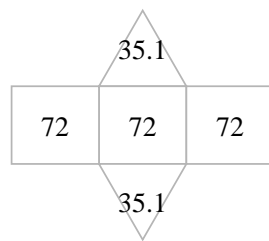
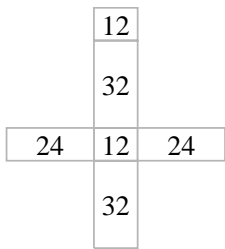
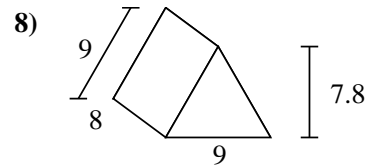
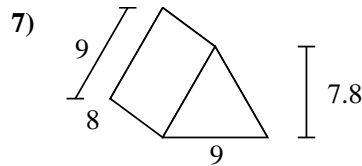
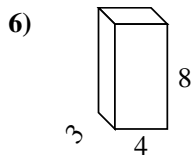
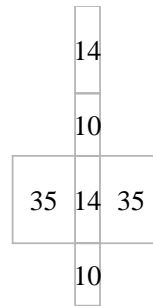
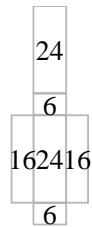
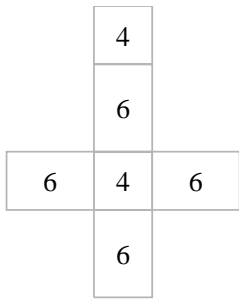
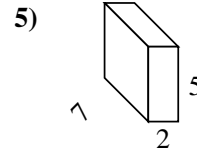
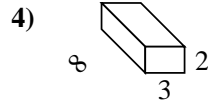
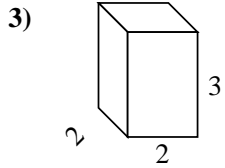
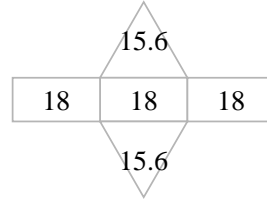
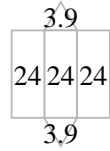
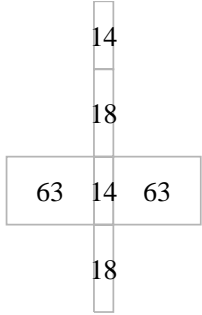
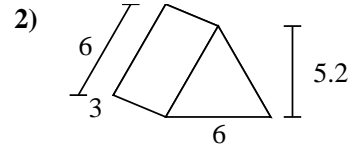
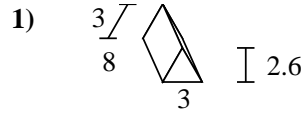
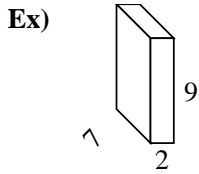
6. \_\_\_\_\_

7. \_\_\_\_\_

8. \_\_\_\_\_



Find the surface area of each figure. Units are in cm (not to scale).



**Answers**

Ex. 190 cm<sup>2</sup>

1. 79.8 cm<sup>2</sup>

2. 85.2 cm<sup>2</sup>

3. 32 cm<sup>2</sup>

4. 92 cm<sup>2</sup>

5. 118 cm<sup>2</sup>

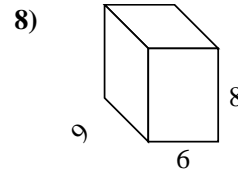
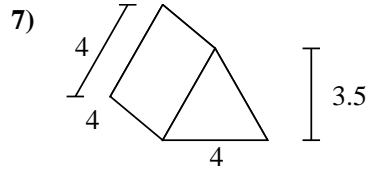
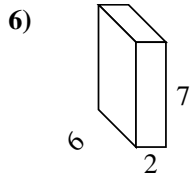
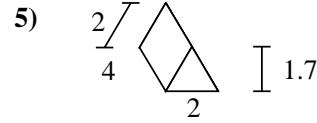
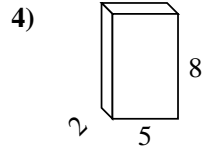
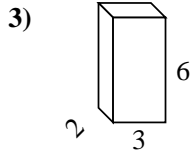
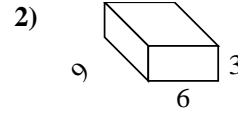
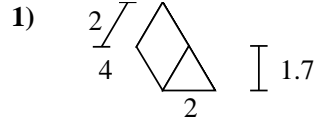
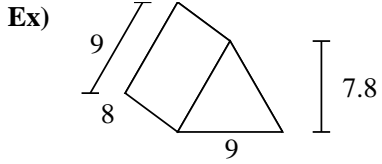
6. 136 cm<sup>2</sup>

7. 286.2 cm<sup>2</sup>

8. 286.2 cm<sup>2</sup>



Find the surface area of each figure. Units are in cm (not to scale).



**Answers**

Ex. 286.2 cm<sup>2</sup>

1. \_\_\_\_\_

2. \_\_\_\_\_

3. \_\_\_\_\_

4. \_\_\_\_\_

5. \_\_\_\_\_

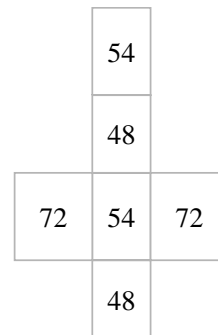
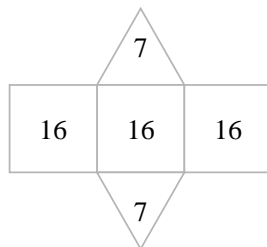
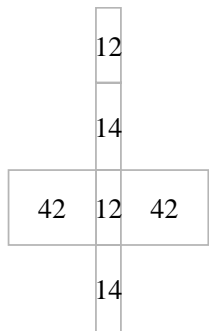
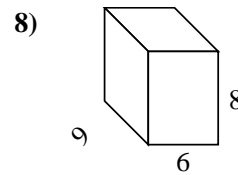
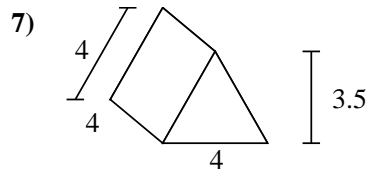
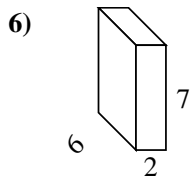
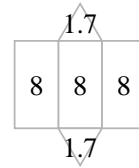
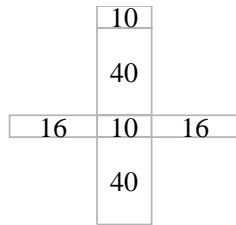
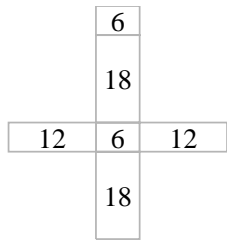
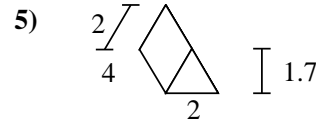
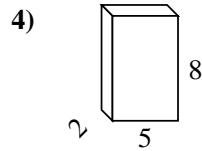
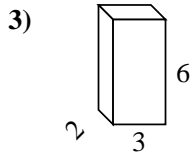
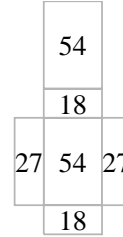
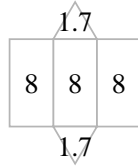
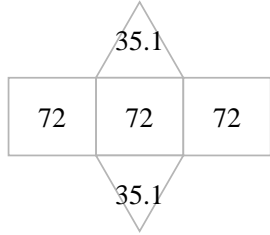
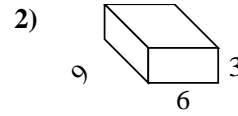
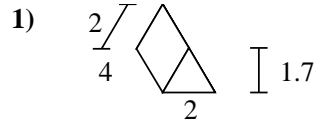
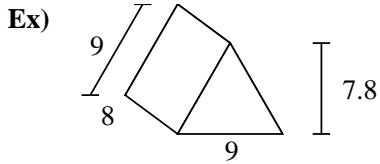
6. \_\_\_\_\_

7. \_\_\_\_\_

8. \_\_\_\_\_



Find the surface area of each figure. Units are in cm (not to scale).



**Answers**

Ex. 286.2 cm<sup>2</sup>

1. 27.4 cm<sup>2</sup>

2. 198 cm<sup>2</sup>

3. 72 cm<sup>2</sup>

4. 132 cm<sup>2</sup>

5. 27.4 cm<sup>2</sup>

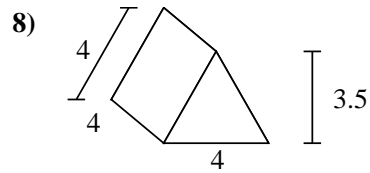
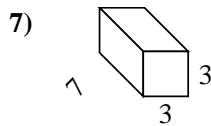
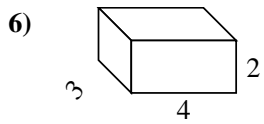
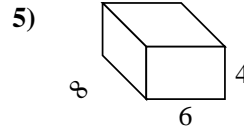
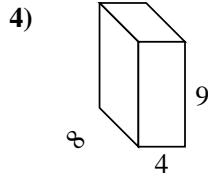
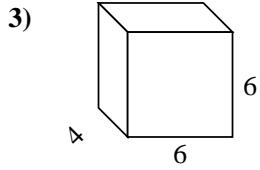
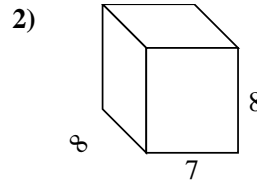
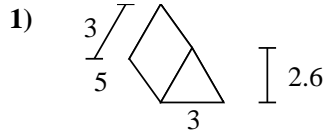
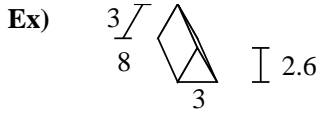
6. 136 cm<sup>2</sup>

7. 62 cm<sup>2</sup>

8. 348 cm<sup>2</sup>



Find the surface area of each figure. Units are in cm (not to scale).



Answers

Ex. 79.8 cm<sup>2</sup>

1. \_\_\_\_\_

2. \_\_\_\_\_

3. \_\_\_\_\_

4. \_\_\_\_\_

5. \_\_\_\_\_

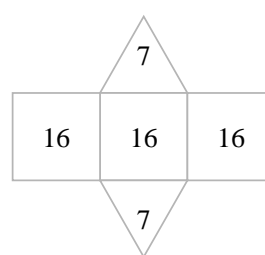
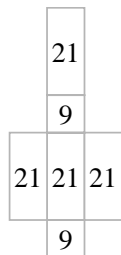
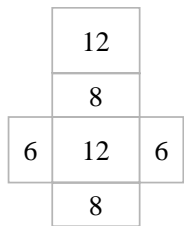
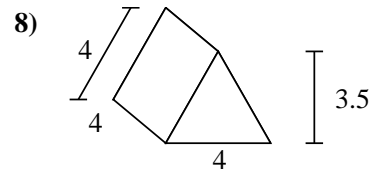
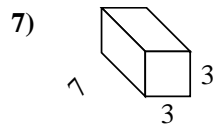
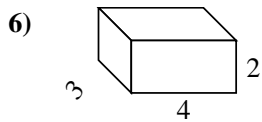
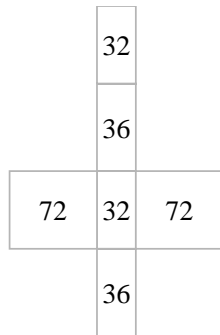
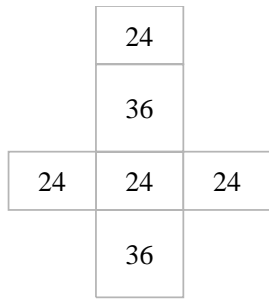
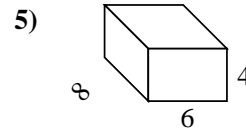
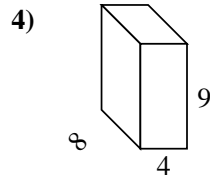
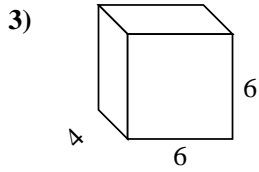
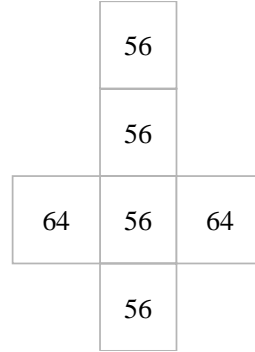
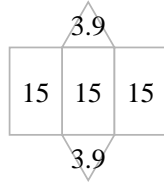
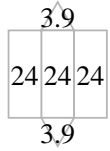
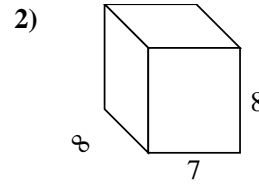
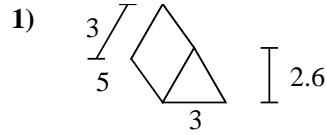
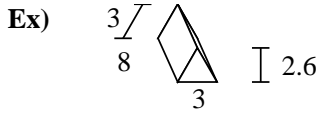
6. \_\_\_\_\_

7. \_\_\_\_\_

8. \_\_\_\_\_



Find the surface area of each figure. Units are in cm (not to scale).



**Answers**

Ex. 79.8 cm<sup>2</sup>

1. 52.8 cm<sup>2</sup>

2. 352 cm<sup>2</sup>

3. 168 cm<sup>2</sup>

4. 280 cm<sup>2</sup>

5. 208 cm<sup>2</sup>

6. 52 cm<sup>2</sup>

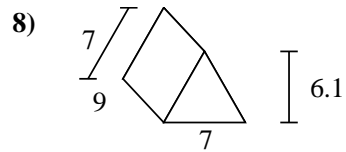
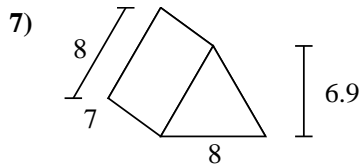
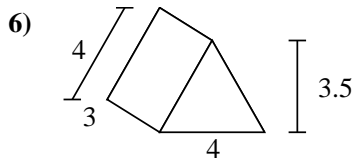
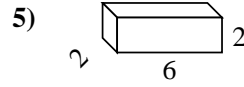
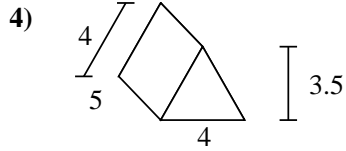
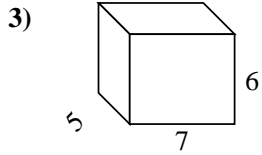
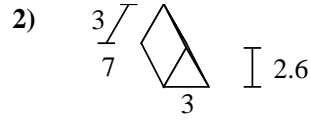
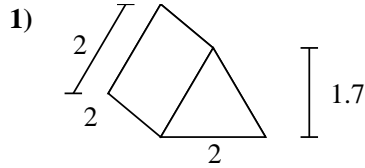
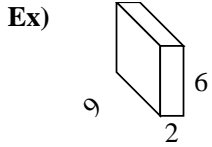
7. 102 cm<sup>2</sup>

8. 62 cm<sup>2</sup>





Find the surface area of each figure. Units are in cm (not to scale).



**Answers**

Ex. 168 cm<sup>2</sup>

1. \_\_\_\_\_

2. \_\_\_\_\_

3. \_\_\_\_\_

4. \_\_\_\_\_

5. \_\_\_\_\_

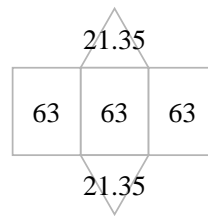
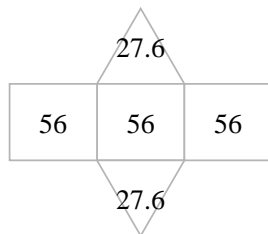
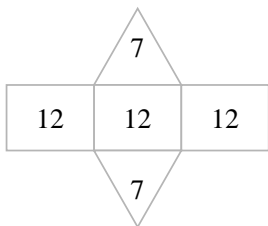
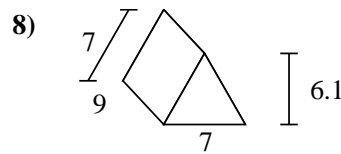
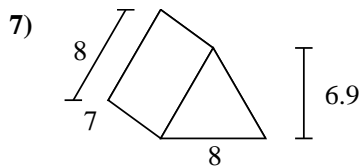
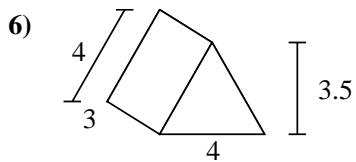
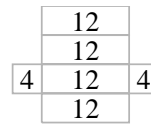
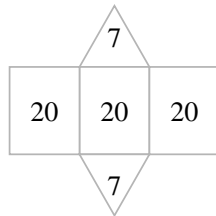
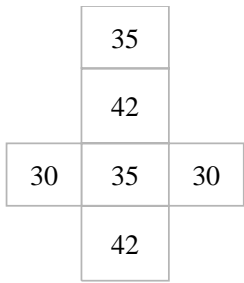
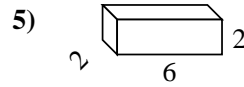
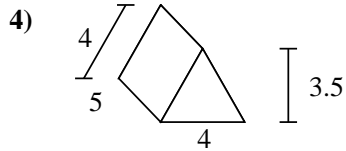
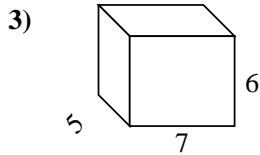
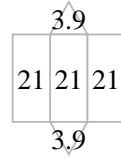
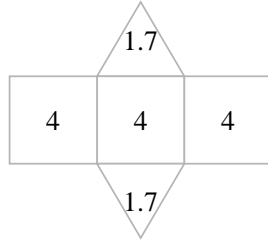
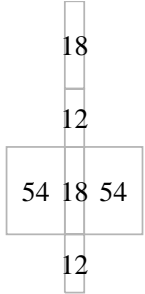
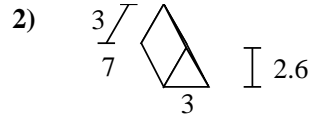
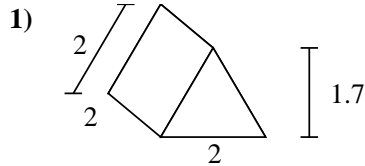
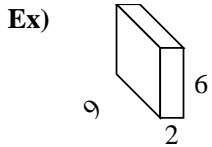
6. \_\_\_\_\_

7. \_\_\_\_\_

8. \_\_\_\_\_



Find the surface area of each figure. Units are in cm (not to scale).



**Answers**

Ex. 168 cm<sup>2</sup>

1. 15.4 cm<sup>2</sup>

2. 70.8 cm<sup>2</sup>

3. 214 cm<sup>2</sup>

4. 74 cm<sup>2</sup>

5. 56 cm<sup>2</sup>

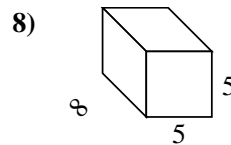
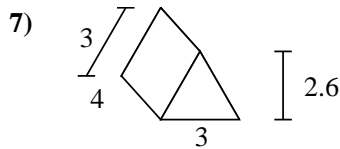
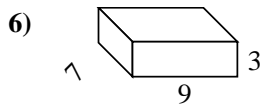
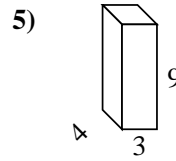
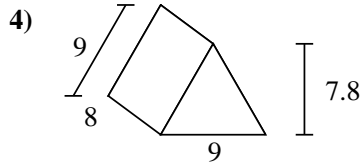
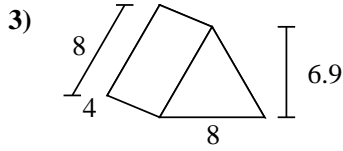
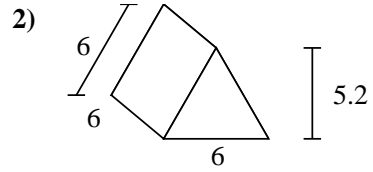
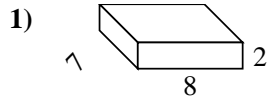
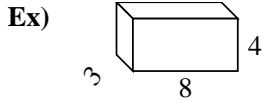
6. 50 cm<sup>2</sup>

7. 223.2 cm<sup>2</sup>

8. 231.7 cm<sup>2</sup>



Find the surface area of each figure. Units are in cm (not to scale).



**Answers**

Ex. 136 cm<sup>2</sup>

1. \_\_\_\_\_

2. \_\_\_\_\_

3. \_\_\_\_\_

4. \_\_\_\_\_

5. \_\_\_\_\_

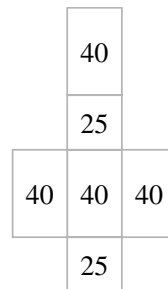
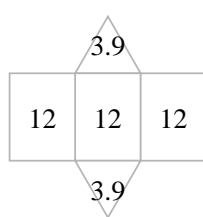
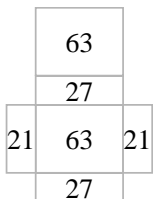
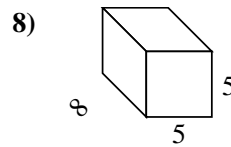
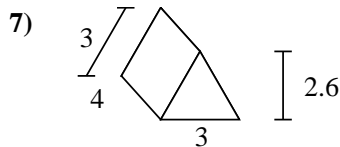
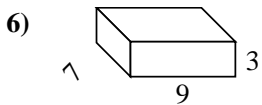
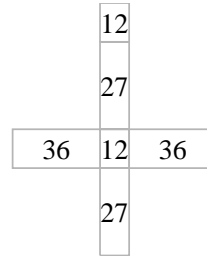
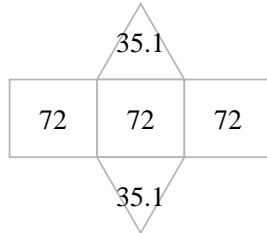
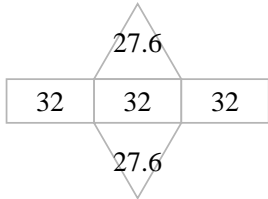
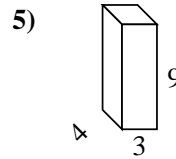
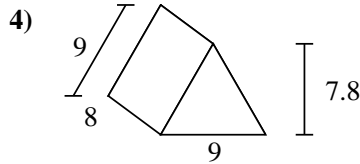
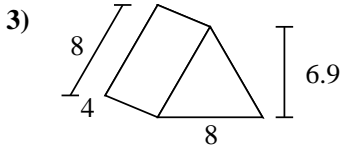
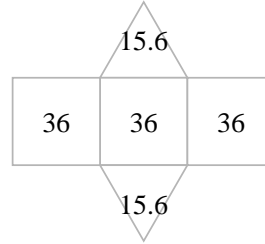
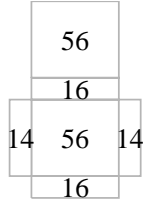
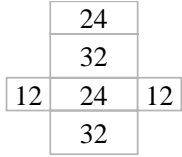
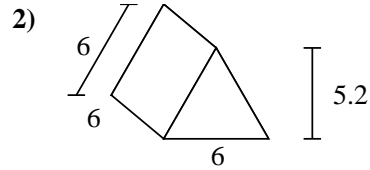
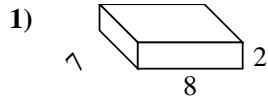
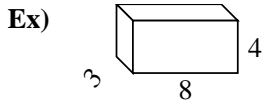
6. \_\_\_\_\_

7. \_\_\_\_\_

8. \_\_\_\_\_



Find the surface area of each figure. Units are in cm (not to scale).



Answers

Ex. 136 cm<sup>2</sup>

1. 172 cm<sup>2</sup>

2. 139.2 cm<sup>2</sup>

3. 151.2 cm<sup>2</sup>

4. 286.2 cm<sup>2</sup>

5. 150 cm<sup>2</sup>

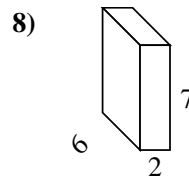
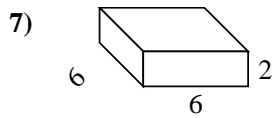
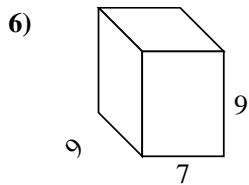
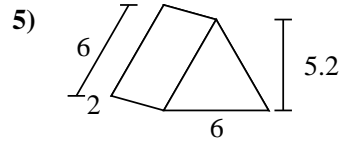
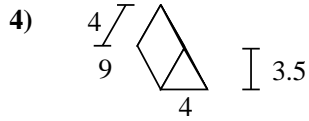
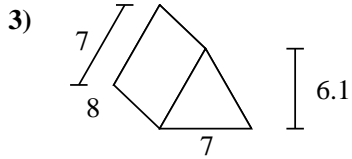
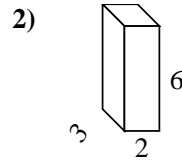
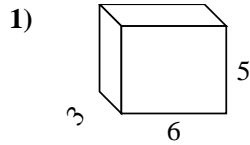
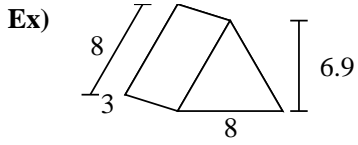
6. 222 cm<sup>2</sup>

7. 43.8 cm<sup>2</sup>

8. 210 cm<sup>2</sup>



Find the surface area of each figure. Units are in cm (not to scale).



**Answers**

Ex. 127.2 cm<sup>2</sup>

1. \_\_\_\_\_

2. \_\_\_\_\_

3. \_\_\_\_\_

4. \_\_\_\_\_

5. \_\_\_\_\_

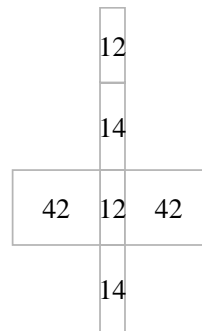
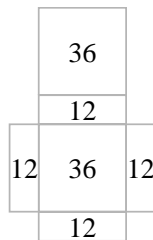
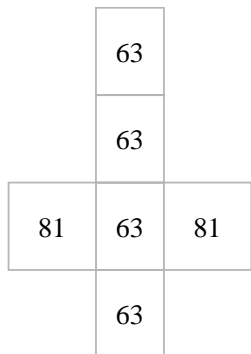
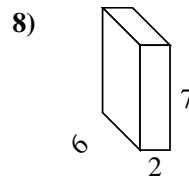
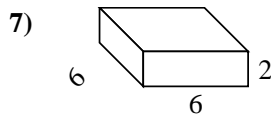
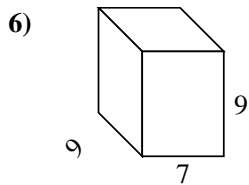
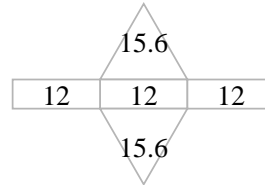
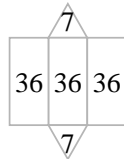
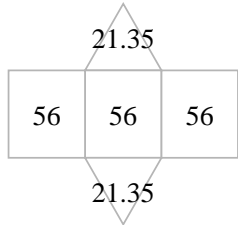
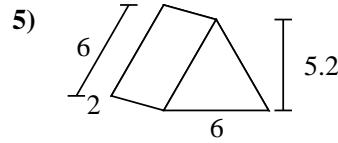
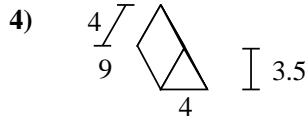
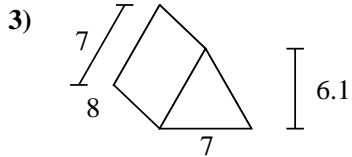
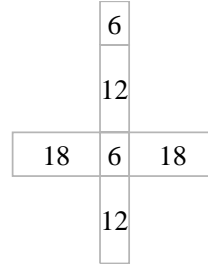
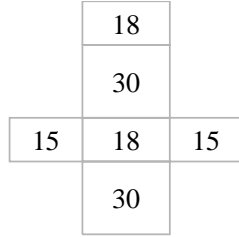
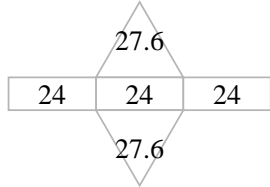
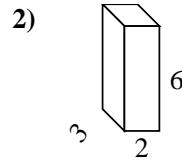
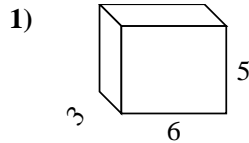
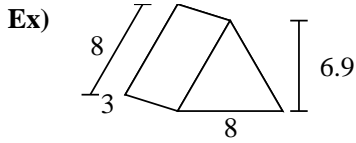
6. \_\_\_\_\_

7. \_\_\_\_\_

8. \_\_\_\_\_



Find the surface area of each figure. Units are in cm (not to scale).



Answers

Ex. 127.2 cm<sup>2</sup>

1. 126 cm<sup>2</sup>

2. 72 cm<sup>2</sup>

3. 210.7 cm<sup>2</sup>

4. 122 cm<sup>2</sup>

5. 67.2 cm<sup>2</sup>

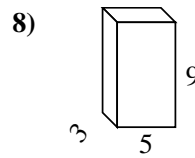
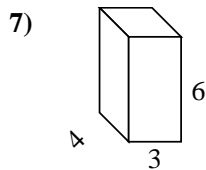
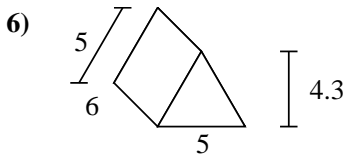
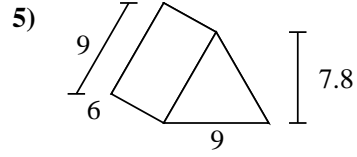
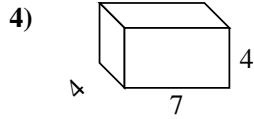
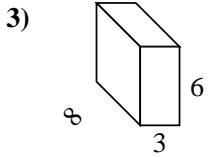
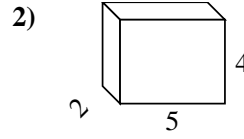
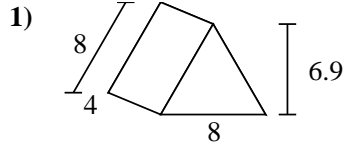
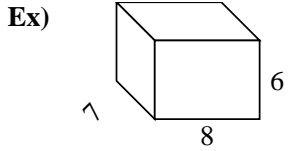
6. 414 cm<sup>2</sup>

7. 120 cm<sup>2</sup>

8. 136 cm<sup>2</sup>



Find the surface area of each figure. Units are in cm (not to scale).



**Answers**

Ex. 292 cm<sup>2</sup>

1. \_\_\_\_\_

2. \_\_\_\_\_

3. \_\_\_\_\_

4. \_\_\_\_\_

5. \_\_\_\_\_

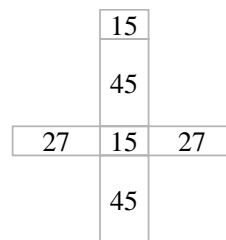
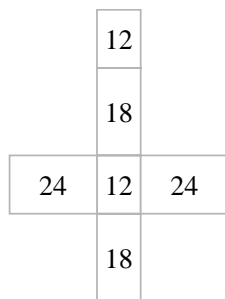
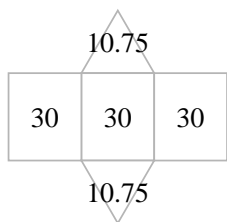
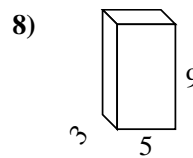
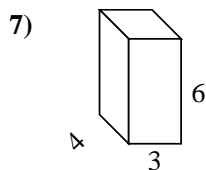
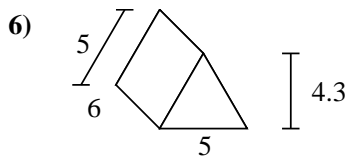
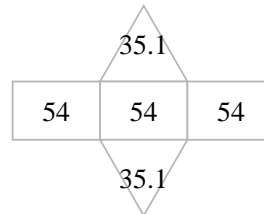
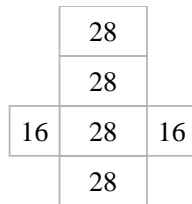
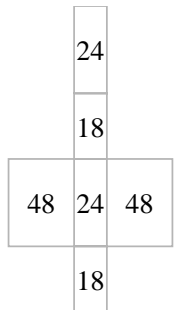
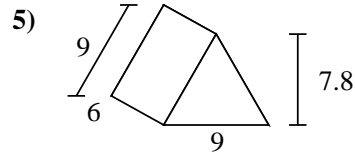
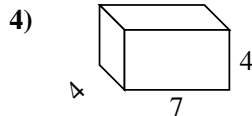
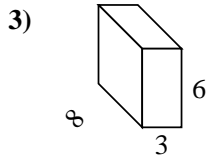
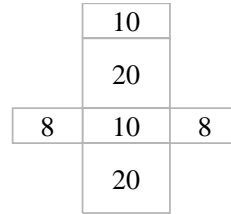
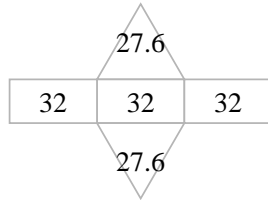
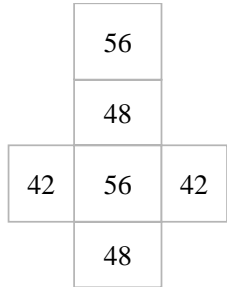
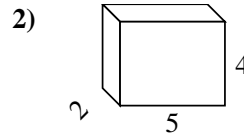
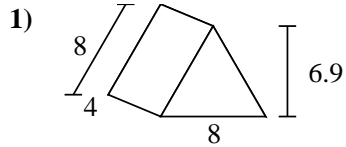
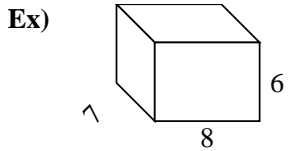
6. \_\_\_\_\_

7. \_\_\_\_\_

8. \_\_\_\_\_



Find the surface area of each figure. Units are in cm (not to scale).



**Answers**

Ex. 292 cm<sup>2</sup>

1. 151.2 cm<sup>2</sup>

2. 76 cm<sup>2</sup>

3. 180 cm<sup>2</sup>

4. 144 cm<sup>2</sup>

5. 232.2 cm<sup>2</sup>

6. 111.5 cm<sup>2</sup>

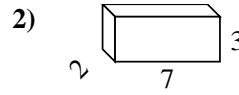
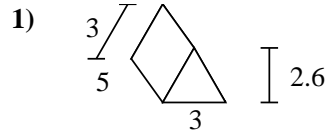
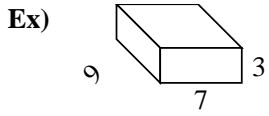
7. 108 cm<sup>2</sup>

8. 174 cm<sup>2</sup>





Find the surface area of each figure. Units are in cm (not to scale).



**Answers**

Ex. 222 cm<sup>2</sup>

1. \_\_\_\_\_

2. \_\_\_\_\_

3. \_\_\_\_\_

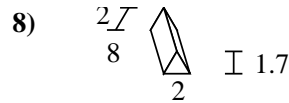
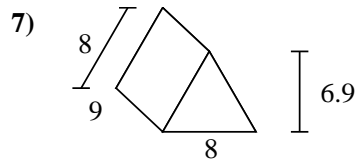
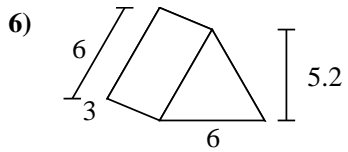
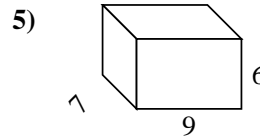
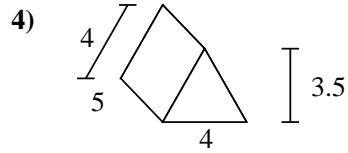
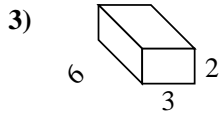
4. \_\_\_\_\_

5. \_\_\_\_\_

6. \_\_\_\_\_


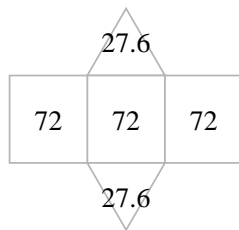
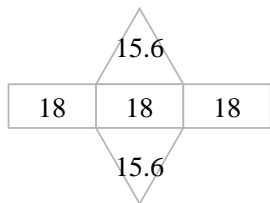
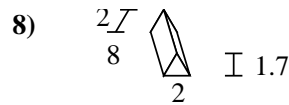
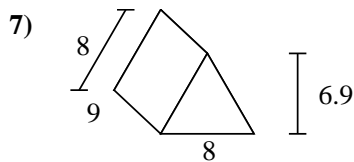
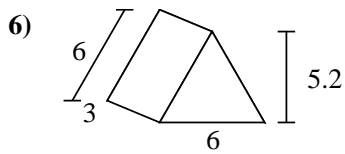
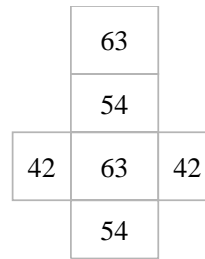
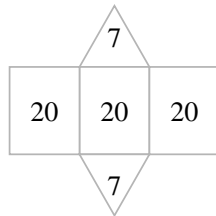
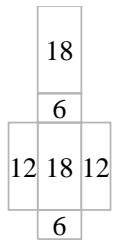
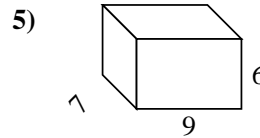
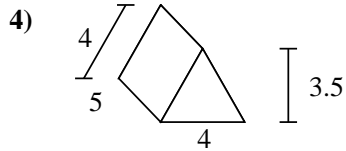
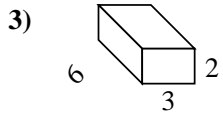
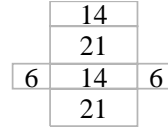
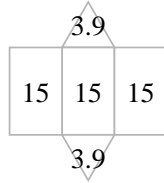
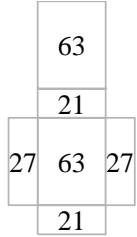
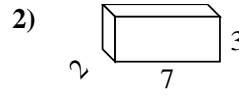
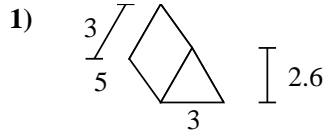
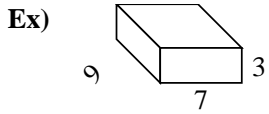
7. \_\_\_\_\_

8. \_\_\_\_\_





Find the surface area of each figure. Units are in cm (not to scale).



Answers

Ex. 222 cm<sup>2</sup>

1. 52.8 cm<sup>2</sup>

2. 82 cm<sup>2</sup>

3. 72 cm<sup>2</sup>

4. 74 cm<sup>2</sup>

5. 318 cm<sup>2</sup>

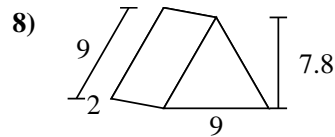
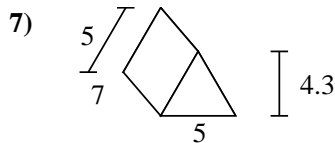
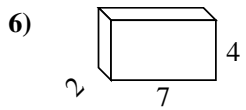
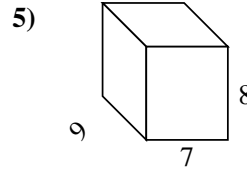
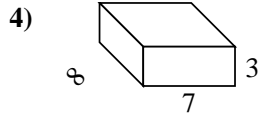
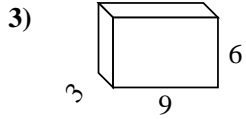
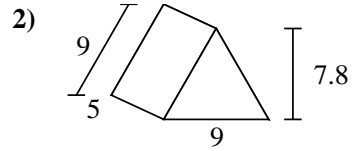
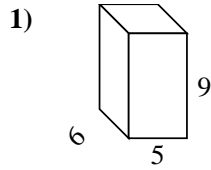
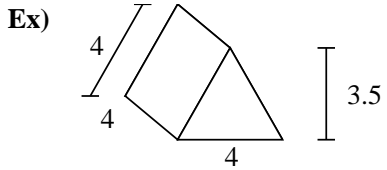
6. 85.2 cm<sup>2</sup>

7. 271.2 cm<sup>2</sup>

8. 51.4 cm<sup>2</sup>



Find the surface area of each figure. Units are in cm (not to scale).



**Answers**

Ex. 62 cm<sup>2</sup>

1. \_\_\_\_\_

2. \_\_\_\_\_

3. \_\_\_\_\_

4. \_\_\_\_\_

5. \_\_\_\_\_

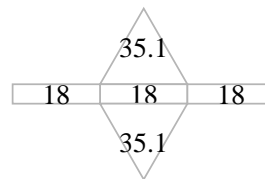
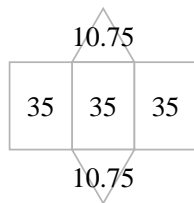
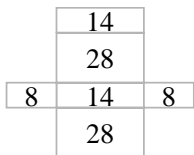
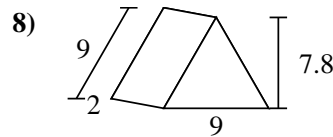
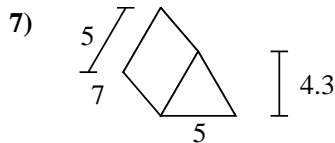
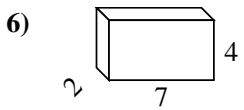
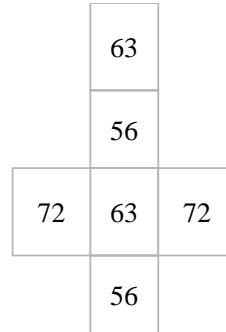
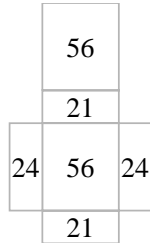
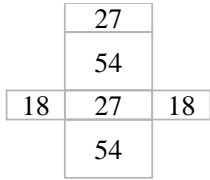
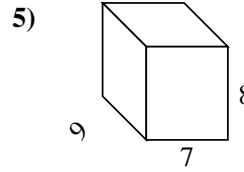
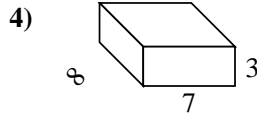
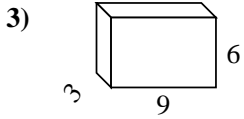
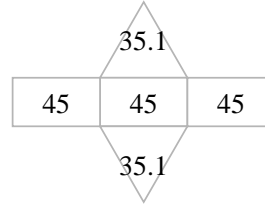
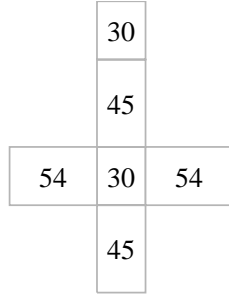
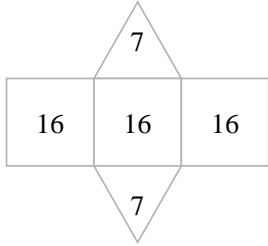
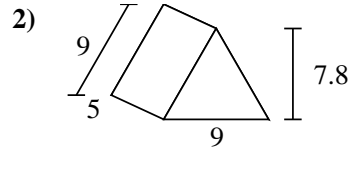
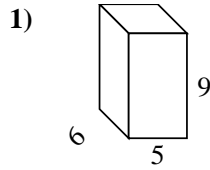
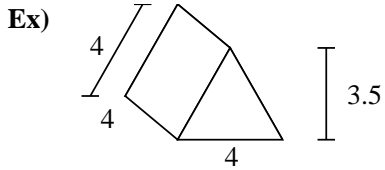
6. \_\_\_\_\_

7. \_\_\_\_\_

8. \_\_\_\_\_



Find the surface area of each figure. Units are in cm (not to scale).



Answers

Ex. 62 cm<sup>2</sup>

1. 258 cm<sup>2</sup>

2. 205.2 cm<sup>2</sup>

3. 198 cm<sup>2</sup>

4. 202 cm<sup>2</sup>

5. 382 cm<sup>2</sup>

6. 100 cm<sup>2</sup>

7. 126.5 cm<sup>2</sup>

8. 124.2 cm<sup>2</sup>