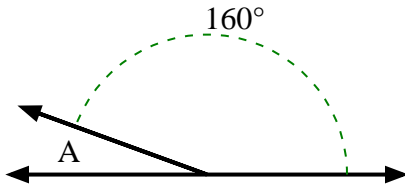


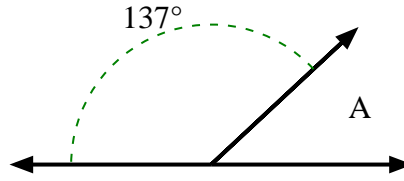


Find the value of 'A' in the set of supplementary angles.

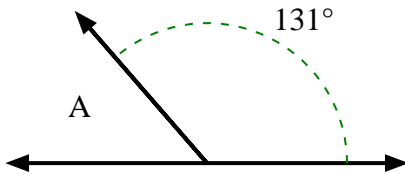
1)



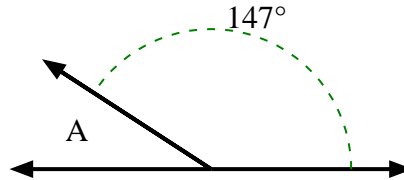
2)



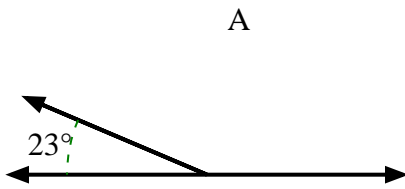
3)



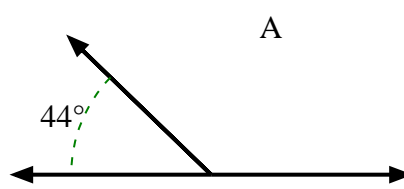
4)



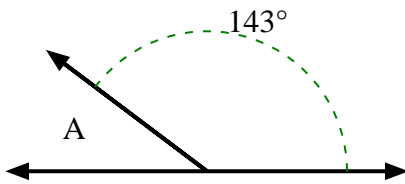
5)



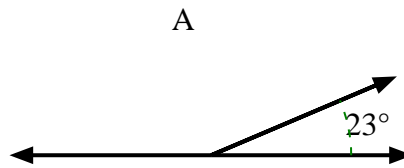
6)



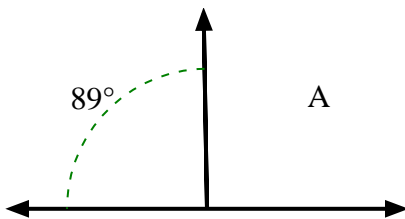
7)



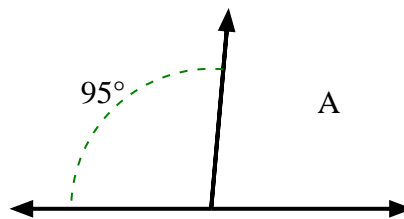
8)



9)



10)



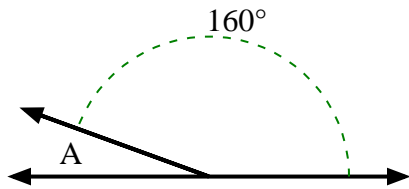
Answers

1. _____
2. _____
3. _____
4. _____
5. _____
6. _____
7. _____
8. _____
9. _____
10. _____

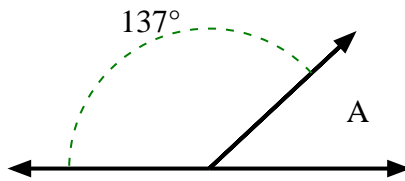


Find the value of 'A' in the set of supplementary angles.

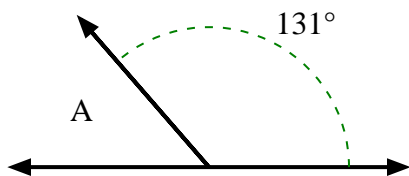
1)



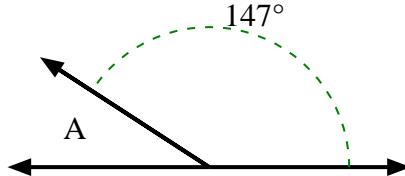
2)



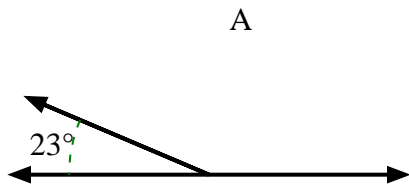
3)



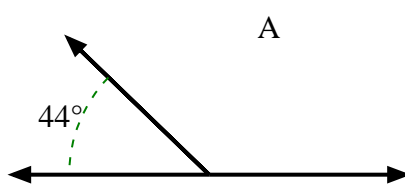
4)



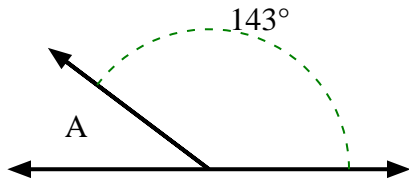
5)



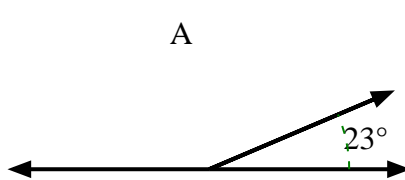
6)



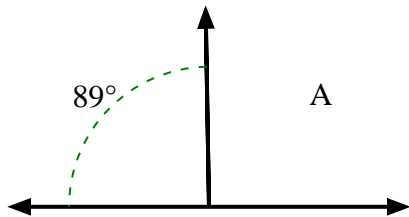
7)



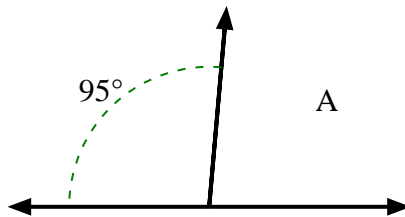
8)



9)



10)



Answers

- 1. 20°
- 2. 43°
- 3. 49°
- 4. 33°
- 5. 157°
- 6. 136°
- 7. 37°
- 8. 157°
- 9. 91°
- 10. 85°