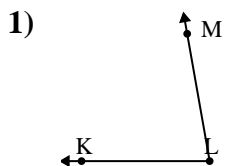




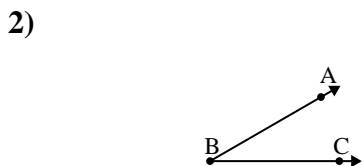
Solve each problem.

Answers



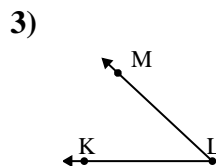
Which choice best represents  $\angle KLM$ ?

- A.  $115^\circ$
- B.  $80^\circ$
- C.  $180^\circ$
- D.  $10^\circ$



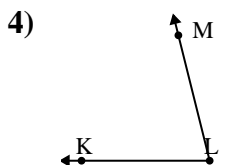
Which choice best represents  $\angle ABC$ ?

- A.  $30^\circ$
- B.  $127^\circ$
- C.  $92^\circ$
- D.  $53^\circ$



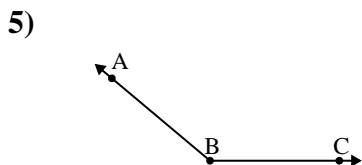
Which choice best represents  $\angle KLM$ ?

- A.  $147^\circ$
- B.  $124^\circ$
- C.  $43^\circ$
- D.  $97^\circ$



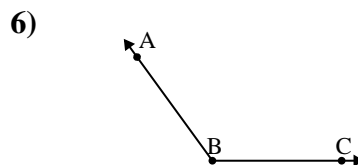
Which choice best represents  $\angle KLM$ ?

- A.  $155^\circ$
- B.  $76^\circ$
- C.  $23^\circ$
- D.  $125^\circ$



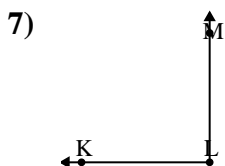
Which choice best represents  $\angle ABC$ ?

- A.  $164^\circ$
- B.  $106^\circ$
- C.  $1^\circ$
- D.  $140^\circ$



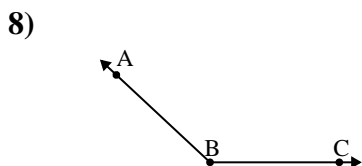
Which choice best represents  $\angle ABC$ ?

- A.  $126^\circ$
- B.  $80^\circ$
- C.  $54^\circ$
- D.  $148^\circ$



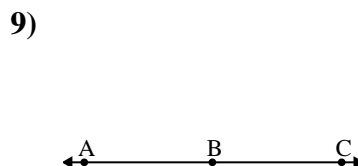
Which choice best represents  $\angle KLM$ ?

- A.  $90^\circ$
- B.  $131^\circ$
- C.  $165^\circ$
- D.  $47^\circ$



Which choice best represents  $\angle ABC$ ?

- A.  $17^\circ$
- B.  $97^\circ$
- C.  $137^\circ$
- D.  $68^\circ$



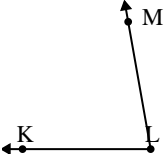
Which choice best represents  $\angle ABC$ ?

- A.  $88^\circ$
- B.  $12^\circ$
- C.  $180^\circ$
- D.  $67^\circ$

- 1. \_\_\_\_\_
- 2. \_\_\_\_\_
- 3. \_\_\_\_\_
- 4. \_\_\_\_\_
- 5. \_\_\_\_\_
- 6. \_\_\_\_\_
- 7. \_\_\_\_\_
- 8. \_\_\_\_\_
- 9. \_\_\_\_\_

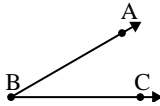


Solve each problem.

1) 

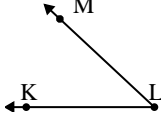
Which choice best represents  $\angle KLM$ ?

A.  $115^\circ$   
 B.  $80^\circ$   
 C.  $180^\circ$   
 D.  $10^\circ$

2) 

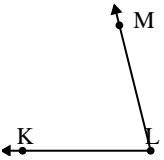
Which choice best represents  $\angle ABC$ ?

A.  $30^\circ$   
 B.  $127^\circ$   
 C.  $92^\circ$   
 D.  $53^\circ$

3) 

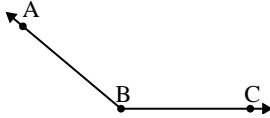
Which choice best represents  $\angle KLM$ ?

A.  $147^\circ$   
 B.  $124^\circ$   
 C.  $43^\circ$   
 D.  $97^\circ$

4) 

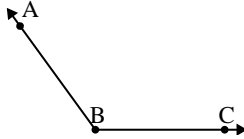
Which choice best represents  $\angle KLM$ ?

A.  $155^\circ$   
 B.  $76^\circ$   
 C.  $23^\circ$   
 D.  $125^\circ$

5) 

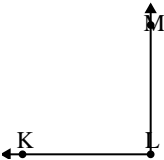
Which choice best represents  $\angle ABC$ ?

A.  $164^\circ$   
 B.  $106^\circ$   
 C.  $1^\circ$   
 D.  $140^\circ$

6) 

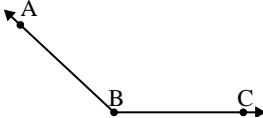
Which choice best represents  $\angle ABC$ ?

A.  $126^\circ$   
 B.  $80^\circ$   
 C.  $54^\circ$   
 D.  $148^\circ$

7) 

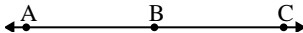
Which choice best represents  $\angle KLM$ ?

A.  $90^\circ$   
 B.  $131^\circ$   
 C.  $165^\circ$   
 D.  $47^\circ$

8) 

Which choice best represents  $\angle ABC$ ?

A.  $17^\circ$   
 B.  $97^\circ$   
 C.  $137^\circ$   
 D.  $68^\circ$

9) 

Which choice best represents  $\angle ABC$ ?

A.  $88^\circ$   
 B.  $12^\circ$   
 C.  $180^\circ$   
 D.  $67^\circ$

Answers

1.     **B**
2.     **A**
3.     **C**
4.     **B**
5.     **D**
6.     **A**
7.     **A**
8.     **C**
9.     **C**