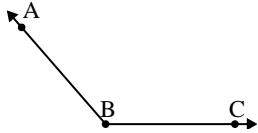




Solve each problem.

Answers


1)



Which choice best represents  $\angle ABC$ ?

- A.  $107^\circ$
- B.  $131^\circ$
- C.  $26^\circ$
- D.  $57^\circ$

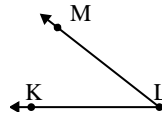
2)



Which choice best represents  $\angle ABC$ ?

- A.  $154^\circ$
- B.  $15^\circ$
- C.  $49^\circ$
- D.  $76^\circ$

3)



Which choice best represents  $\angle KLM$ ?

- A.  $38^\circ$
- B.  $81^\circ$
- C.  $175^\circ$
- D.  $107^\circ$

1. \_\_\_\_\_

2. \_\_\_\_\_

3. \_\_\_\_\_

4. \_\_\_\_\_

5. \_\_\_\_\_

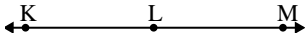
6. \_\_\_\_\_

7. \_\_\_\_\_

8. \_\_\_\_\_

9. \_\_\_\_\_

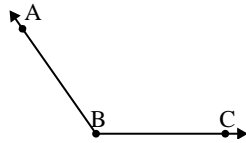
4)



Which choice best represents  $\angle KLM$ ?

- A.  $156^\circ$
- B.  $71^\circ$
- C.  $180^\circ$
- D.  $25^\circ$

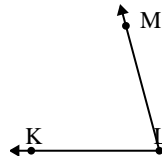
5)



Which choice best represents  $\angle ABC$ ?

- A.  $58^\circ$
- B.  $33^\circ$
- C.  $4^\circ$
- D.  $125^\circ$

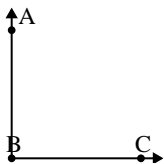
6)



Which choice best represents  $\angle KLM$ ?

- A.  $29^\circ$
- B.  $172^\circ$
- C.  $7^\circ$
- D.  $75^\circ$

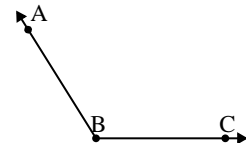
7)



Which choice best represents  $\angle ABC$ ?

- A.  $69^\circ$
- B.  $127^\circ$
- C.  $3^\circ$
- D.  $90^\circ$

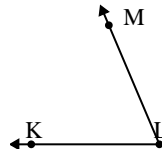
8)



Which choice best represents  $\angle ABC$ ?

- A.  $122^\circ$
- B.  $84^\circ$
- C.  $37^\circ$
- D.  $158^\circ$

9)

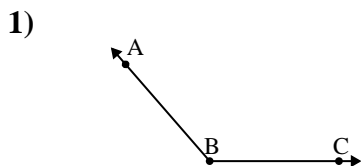


Which choice best represents  $\angle KLM$ ?

- A.  $122^\circ$
- B.  $165^\circ$
- C.  $67^\circ$
- D.  $143^\circ$

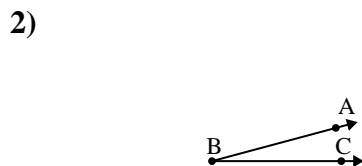


Solve each problem.



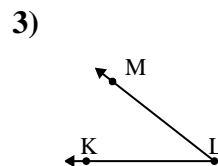
Which choice best represents  $\angle ABC$ ?

- A.  $107^\circ$
- B.  $131^\circ$
- C.  $26^\circ$
- D.  $57^\circ$



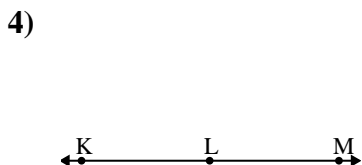
Which choice best represents  $\angle ABC$ ?

- A.  $154^\circ$
- B.  $15^\circ$
- C.  $49^\circ$
- D.  $76^\circ$



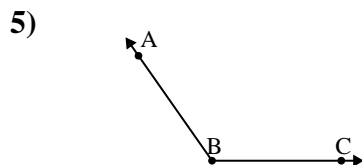
Which choice best represents  $\angle KLM$ ?

- A.  $38^\circ$
- B.  $81^\circ$
- C.  $175^\circ$
- D.  $107^\circ$



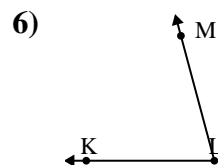
Which choice best represents  $\angle KLM$ ?

- A.  $156^\circ$
- B.  $71^\circ$
- C.  $180^\circ$
- D.  $25^\circ$



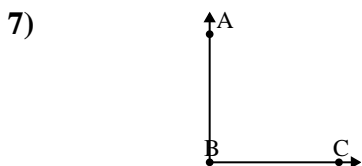
Which choice best represents  $\angle ABC$ ?

- A.  $58^\circ$
- B.  $33^\circ$
- C.  $4^\circ$
- D.  $125^\circ$



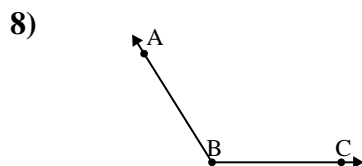
Which choice best represents  $\angle KLM$ ?

- A.  $29^\circ$
- B.  $172^\circ$
- C.  $7^\circ$
- D.  $75^\circ$



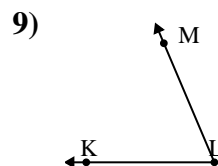
Which choice best represents  $\angle ABC$ ?

- A.  $69^\circ$
- B.  $127^\circ$
- C.  $3^\circ$
- D.  $90^\circ$



Which choice best represents  $\angle ABC$ ?

- A.  $122^\circ$
- B.  $84^\circ$
- C.  $37^\circ$
- D.  $158^\circ$



Which choice best represents  $\angle KLM$ ?

- A.  $122^\circ$
- B.  $165^\circ$
- C.  $67^\circ$
- D.  $143^\circ$

Answers

- 1. **B**
- 2. **B**
- 3. **A**
- 4. **C**
- 5. **D**
- 6. **D**
- 7. **D**
- 8. **A**
- 9. **C**