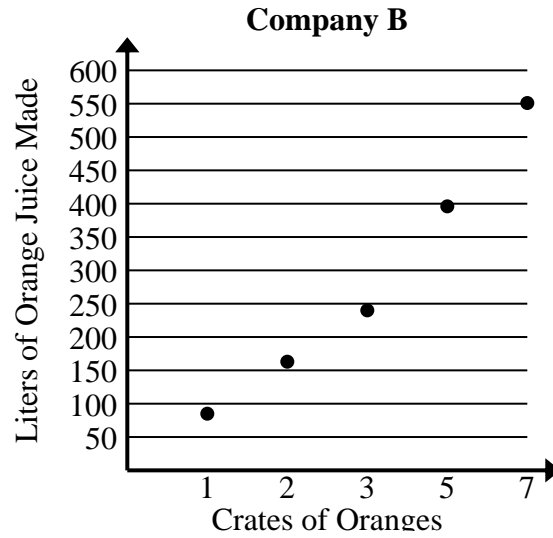




Solve each problem.

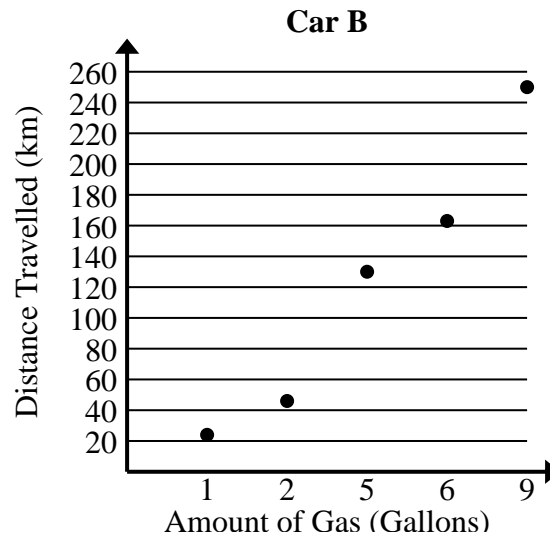
- 1) Compare the approximate liters of orange juice produced per crates used of Company A to Company B.

| Company A         |                             |
|-------------------|-----------------------------|
| Crates of Oranges | Liters of Orange Juice Made |
| 1                 | 73                          |
| 2                 | 149                         |
| 6                 | 462                         |
| 7                 | 541                         |
| 9                 | 695                         |



- 2) Compare the approximate kilometers per gallon of Car A to Car B.

| Car A                   |                         |
|-------------------------|-------------------------|
| Amount of Gas (Gallons) | Distance Travelled (km) |
| 3                       | 89                      |
| 4                       | 114                     |
| 5                       | 142                     |
| 7                       | 198                     |
| 8                       | 231                     |





Solve each problem.

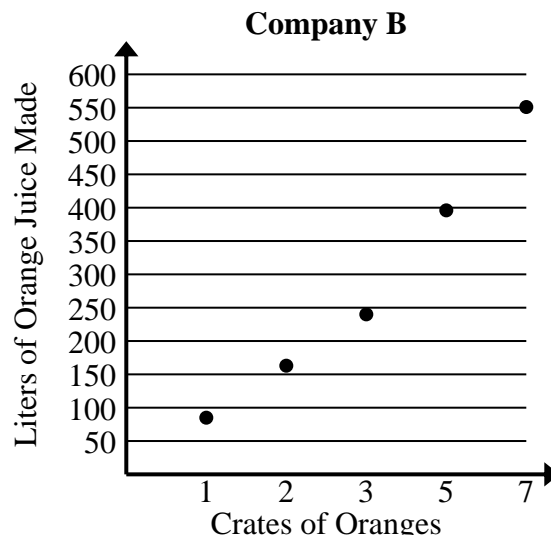
- 1) Compare the approximate liters of orange juice produced per crates used of Company A to Company B.

| Company A         |                             |
|-------------------|-----------------------------|
| Crates of Oranges | Liters of Orange Juice Made |
| 1                 | 73                          |
| 2                 | 149                         |
| 6                 | 462                         |
| 7                 | 541                         |
| 9                 | 695                         |

$$73+149+462+541+695 = 1,920 \text{ total liters}$$

$$1+2+6+7+9 = 25 \text{ total crates}$$

$$1,920 \div 25 = 76.8$$



$$85+163+240+396+551 = 1,435 \text{ total liters}$$

$$1+2+3+5+7 = 18 \text{ total crates}$$

$$1,435 \div 18 = 79.7$$

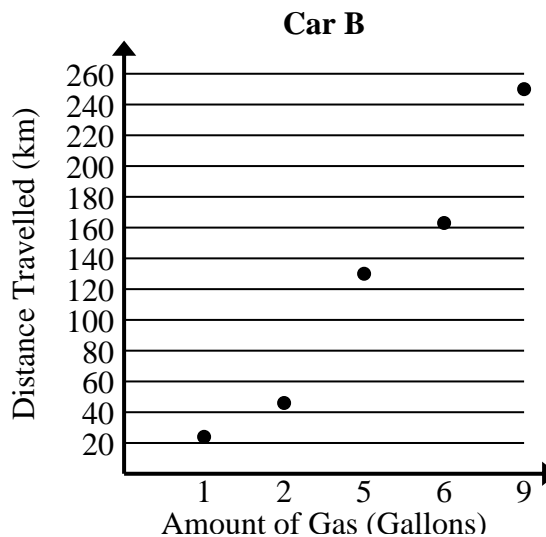
- 2) Compare the approximate kilometers per gallon of Car A to Car B.

| Car A                   |                         |
|-------------------------|-------------------------|
| Amount of Gas (Gallons) | Distance Travelled (km) |
| 3                       | 89                      |
| 4                       | 114                     |
| 5                       | 142                     |
| 7                       | 198                     |
| 8                       | 231                     |

$$89+114+142+198+231 = 774 \text{ total km}$$

$$3+4+5+7+8 = 27 \text{ total gallons}$$

$$774 \div 27 = 28.7$$



$$24+46+130+163+250 = 613 \text{ total km}$$

$$1+2+5+6+9 = 23 \text{ total gallons}$$

$$613 \div 23 = 26.7$$