



Solve each problem.

1) $1 + 1 = \underline{\quad}$

2) $2 + 1 = \underline{\quad}$

3) $1 + 4 = \underline{\quad}$

4) $3 + 0 = \underline{\quad}$

5) $3 + 2 = \underline{\quad}$

6) $4 + 0 = \underline{\quad}$

7) $1 + 2 = \underline{\quad}$

8) $5 + 0 = \underline{\quad}$

9) $2 + 3 = \underline{\quad}$

10) $2 + 0 = \underline{\quad}$

11) $5 - 5 = \underline{\quad}$

12) $2 - 2 = \underline{\quad}$

13) $2 - 1 = \underline{\quad}$

14) $4 - 2 = \underline{\quad}$

15) $5 - 3 = \underline{\quad}$

16) $3 - 3 = \underline{\quad}$

17) $4 - 3 = \underline{\quad}$

18) $5 - 4 = \underline{\quad}$

19) $4 - 4 = \underline{\quad}$

20) $1 - 1 = \underline{\quad}$

Answers

1. _____

2. _____

3. _____

4. _____

5. _____

6. _____

7. _____

8. _____

9. _____

10. _____

11. _____

12. _____

13. _____

14. _____

15. _____

16. _____

17. _____

18. _____

19. _____

20. _____



Solve each problem.

1) $1 + 1 = \underline{2}$

2) $2 + 1 = \underline{3}$

3) $1 + 4 = \underline{5}$

4) $3 + 0 = \underline{3}$

5) $3 + 2 = \underline{5}$

6) $4 + 0 = \underline{4}$

7) $1 + 2 = \underline{3}$

8) $5 + 0 = \underline{5}$

9) $2 + 3 = \underline{5}$

10) $2 + 0 = \underline{2}$

11) $5 - 5 = \underline{0}$

12) $2 - 2 = \underline{0}$

13) $2 - 1 = \underline{1}$

14) $4 - 2 = \underline{2}$

15) $5 - 3 = \underline{2}$

16) $3 - 3 = \underline{0}$

17) $4 - 3 = \underline{1}$

18) $5 - 4 = \underline{1}$

19) $4 - 4 = \underline{0}$

20) $1 - 1 = \underline{0}$

Answers1. 22. 33. 54. 35. 56. 47. 38. 59. 510. 211. 012. 013. 114. 215. 216. 017. 118. 119. 020. 0



Solve each problem.

Answers

1) 1 + 1 = _____
 +

2) 2 + 1 = _____
 +

3) 1 + 4 = _____
 +

4) 3 + 0 = _____

5) 3 + 2 = _____
 +

6) 4 + 0 = _____

7) 1 + 2 = _____
 +

8) 5 + 0 = _____

9) 2 + 3 = _____
 +

10) 2 + 0 = _____

11) 5 - 5 = _____
 -

12) 2 - 2 = _____
 -

13) 2 - 1 = _____
 -

14) 4 - 2 = _____
 -

15) 5 - 3 = _____
 -

16) 3 - 3 = _____
 -

1. _____
2. _____
3. _____
4. _____
5. _____
6. _____
7. _____
8. _____
9. _____
10. _____
11. _____
12. _____
13. _____
14. _____
15. _____
16. _____



Solve each problem.

1) $5 + 0 = \underline{\quad}$

2) $4 + 0 = \underline{\quad}$

3) $2 + 0 = \underline{\quad}$

4) $2 + 2 = \underline{\quad}$

5) $3 + 2 = \underline{\quad}$

6) $1 + 4 = \underline{\quad}$

7) $1 + 2 = \underline{\quad}$

8) $4 + 1 = \underline{\quad}$

9) $1 + 3 = \underline{\quad}$

10) $2 + 3 = \underline{\quad}$

11) $2 - 2 = \underline{\quad}$

12) $5 - 3 = \underline{\quad}$

13) $5 - 5 = \underline{\quad}$

14) $3 - 3 = \underline{\quad}$

15) $4 - 2 = \underline{\quad}$

16) $4 - 4 = \underline{\quad}$

17) $4 - 1 = \underline{\quad}$

18) $3 - 1 = \underline{\quad}$

19) $2 - 1 = \underline{\quad}$

20) $5 - 4 = \underline{\quad}$

Answers

1. _____

2. _____

3. _____

4. _____

5. _____

6. _____

7. _____

8. _____

9. _____

10. _____

11. _____

12. _____

13. _____

14. _____

15. _____

16. _____

17. _____

18. _____

19. _____

20. _____



Solve each problem.

1) $5 + 0 = \underline{5}$

2) $4 + 0 = \underline{4}$

3) $2 + 0 = \underline{2}$

4) $2 + 2 = \underline{4}$

5) $3 + 2 = \underline{5}$

6) $1 + 4 = \underline{5}$

7) $1 + 2 = \underline{3}$

8) $4 + 1 = \underline{5}$

9) $1 + 3 = \underline{4}$

10) $2 + 3 = \underline{5}$

11) $2 - 2 = \underline{0}$

12) $5 - 3 = \underline{2}$

13) $5 - 5 = \underline{0}$

14) $3 - 3 = \underline{0}$

15) $4 - 2 = \underline{2}$

16) $4 - 4 = \underline{0}$

17) $4 - 1 = \underline{3}$

18) $3 - 1 = \underline{2}$

19) $2 - 1 = \underline{1}$

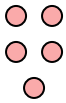
20) $5 - 4 = \underline{1}$

Answers1. 52. 43. 24. 45. 56. 57. 38. 59. 410. 511. 012. 213. 014. 015. 216. 017. 318. 219. 120. 1




Solve each problem.


1) $5 + 0 = \underline{\quad}$




2) $4 + 0 = \underline{\quad}$




3) $2 + 0 = \underline{\quad}$




4) $2 + 2 = \underline{\quad}$




5) $3 + 2 = \underline{\quad}$




6) $1 + 4 = \underline{\quad}$




7) $1 + 2 = \underline{\quad}$




8) $4 + 1 = \underline{\quad}$




9) $1 + 3 = \underline{\quad}$



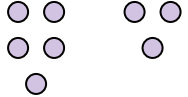
10) $2 + 3 = \underline{\quad}$



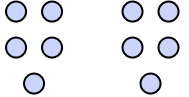
11) $2 - 2 = \underline{\quad}$




12) $5 - 3 = \underline{\quad}$




13) $5 - 5 = \underline{\quad}$




14) $3 - 3 = \underline{\quad}$



15) $4 - 2 = \underline{\quad}$



16) $4 - 4 = \underline{\quad}$



Answers

1. _____
2. _____
3. _____
4. _____
5. _____
6. _____
7. _____
8. _____
9. _____
10. _____
11. _____
12. _____
13. _____
14. _____
15. _____
16. _____



Solve each problem.

1) $3 + 2 = \underline{\quad}$

2) $1 + 3 = \underline{\quad}$

3) $2 + 1 = \underline{\quad}$

4) $2 + 3 = \underline{\quad}$

5) $1 + 2 = \underline{\quad}$

6) $5 + 0 = \underline{\quad}$

7) $4 + 0 = \underline{\quad}$

8) $1 + 4 = \underline{\quad}$

9) $1 + 0 = \underline{\quad}$

10) $4 + 1 = \underline{\quad}$

11) $5 - 5 = \underline{\quad}$

12) $3 - 1 = \underline{\quad}$

13) $2 - 2 = \underline{\quad}$

14) $1 - 1 = \underline{\quad}$

15) $5 - 2 = \underline{\quad}$

16) $5 - 4 = \underline{\quad}$

17) $5 - 3 = \underline{\quad}$

18) $2 - 1 = \underline{\quad}$

19) $3 - 2 = \underline{\quad}$

20) $4 - 4 = \underline{\quad}$

Answers

1. _____

2. _____

3. _____

4. _____

5. _____

6. _____

7. _____

8. _____

9. _____

10. _____

11. _____

12. _____

13. _____

14. _____

15. _____

16. _____

17. _____

18. _____

19. _____

20. _____



Solve each problem.

1) $3 + 2 = \underline{5}$

2) $1 + 3 = \underline{4}$

3) $2 + 1 = \underline{3}$

4) $2 + 3 = \underline{5}$

5) $1 + 2 = \underline{3}$

6) $5 + 0 = \underline{5}$

7) $4 + 0 = \underline{4}$

8) $1 + 4 = \underline{5}$

9) $1 + 0 = \underline{1}$

10) $4 + 1 = \underline{5}$

11) $5 - 5 = \underline{0}$

12) $3 - 1 = \underline{2}$

13) $2 - 2 = \underline{0}$

14) $1 - 1 = \underline{0}$

15) $5 - 2 = \underline{3}$

16) $5 - 4 = \underline{1}$

17) $5 - 3 = \underline{2}$

18) $2 - 1 = \underline{1}$

19) $3 - 2 = \underline{1}$

20) $4 - 4 = \underline{0}$

Answers1. 52. 43. 34. 55. 36. 57. 48. 59. 110. 511. 012. 213. 014. 015. 316. 117. 218. 119. 120. 0



Solve each problem.

1) $3 + 2 = \underline{\quad}$

2) $1 + 3 = \underline{\quad}$

3) $2 + 1 = \underline{\quad}$

4) $2 + 3 = \underline{\quad}$

5) $1 + 2 = \underline{\quad}$

6) $5 + 0 = \underline{\quad}$

7) $4 + 0 = \underline{\quad}$

8) $1 + 4 = \underline{\quad}$

9) $1 + 0 = \underline{\quad}$

10) $4 + 1 = \underline{\quad}$

11) $5 - 5 = \underline{\quad}$

12) $3 - 1 = \underline{\quad}$

13) $2 - 2 = \underline{\quad}$

14) $1 - 1 = \underline{\quad}$

15) $5 - 2 = \underline{\quad}$

16) $5 - 4 = \underline{\quad}$

Answers

1. _____
2. _____
3. _____
4. _____
5. _____
6. _____
7. _____
8. _____
9. _____
10. _____
11. _____
12. _____
13. _____
14. _____
15. _____
16. _____



Solve each problem.

1) $2 + 1 = \underline{\quad}$

2) $4 + 1 = \underline{\quad}$

3) $2 + 0 = \underline{\quad}$

4) $2 + 2 = \underline{\quad}$

5) $1 + 1 = \underline{\quad}$

6) $3 + 0 = \underline{\quad}$

7) $1 + 3 = \underline{\quad}$

8) $5 + 0 = \underline{\quad}$

9) $3 + 2 = \underline{\quad}$

10) $3 + 1 = \underline{\quad}$

11) $5 - 4 = \underline{\quad}$

12) $5 - 5 = \underline{\quad}$

13) $4 - 2 = \underline{\quad}$

14) $2 - 1 = \underline{\quad}$

15) $2 - 2 = \underline{\quad}$

16) $3 - 2 = \underline{\quad}$

17) $5 - 2 = \underline{\quad}$

18) $5 - 3 = \underline{\quad}$

19) $4 - 3 = \underline{\quad}$

20) $5 - 1 = \underline{\quad}$

Answers

1. _____

2. _____

3. _____

4. _____

5. _____

6. _____

7. _____

8. _____

9. _____

10. _____

11. _____

12. _____

13. _____

14. _____

15. _____

16. _____

17. _____

18. _____

19. _____

20. _____



Solve each problem.

1) $2 + 1 = \underline{3}$

2) $4 + 1 = \underline{5}$

3) $2 + 0 = \underline{2}$

4) $2 + 2 = \underline{4}$

5) $1 + 1 = \underline{2}$

6) $3 + 0 = \underline{3}$

7) $1 + 3 = \underline{4}$

8) $5 + 0 = \underline{5}$

9) $3 + 2 = \underline{5}$

10) $3 + 1 = \underline{4}$

11) $5 - 4 = \underline{1}$

12) $5 - 5 = \underline{0}$

13) $4 - 2 = \underline{2}$

14) $2 - 1 = \underline{1}$

15) $2 - 2 = \underline{0}$

16) $3 - 2 = \underline{1}$

17) $5 - 2 = \underline{3}$

18) $5 - 3 = \underline{2}$

19) $4 - 3 = \underline{1}$

20) $5 - 1 = \underline{4}$

Answers

1. 3

2. 5

3. 2

4. 4

5. 2

6. 3

7. 4

8. 5

9. 5

10. 4

11. 1

12. 0

13. 2

14. 1

15. 0

16. 1

17. 3



18. 2



19. 1


20. 4







Solve each problem.


1) $2 + 1 = \underline{\quad}$
 $+$ 



2) $4 + 1 = \underline{\quad}$
 $+$ 


3) $2 + 0 = \underline{\quad}$



4) $2 + 2 = \underline{\quad}$
 $+$ 



5) $1 + 1 = \underline{\quad}$
 $+$ 


6) $3 + 0 = \underline{\quad}$



7) $1 + 3 = \underline{\quad}$
 $+$ 


8) $5 + 0 = \underline{\quad}$




9) $3 + 2 = \underline{\quad}$




10) $3 + 1 = \underline{\quad}$
 $+$ 


11) $5 - 4 = \underline{\quad}$


12) $5 - 5 = \underline{\quad}$


13) $4 - 2 = \underline{\quad}$


14) $2 - 1 = \underline{\quad}$
 $-$ 

15) $2 - 2 = \underline{\quad}$
 $-$ 

16) $3 - 2 = \underline{\quad}$


Answers

1. _____
2. _____
3. _____
4. _____
5. _____
6. _____
7. _____
8. _____
9. _____
10. _____
11. _____
12. _____
13. _____
14. _____
15. _____
16. _____



Solve each problem.

1) $3 + 2 = \underline{\quad}$

2) $5 + 0 = \underline{\quad}$

3) $2 + 1 = \underline{\quad}$

4) $1 + 1 = \underline{\quad}$

5) $2 + 0 = \underline{\quad}$

6) $4 + 0 = \underline{\quad}$

7) $1 + 4 = \underline{\quad}$

8) $2 + 3 = \underline{\quad}$

9) $3 + 0 = \underline{\quad}$

10) $3 + 1 = \underline{\quad}$

11) $4 - 3 = \underline{\quad}$

12) $4 - 1 = \underline{\quad}$

13) $5 - 3 = \underline{\quad}$

14) $5 - 4 = \underline{\quad}$

15) $2 - 1 = \underline{\quad}$

16) $4 - 4 = \underline{\quad}$

17) $5 - 5 = \underline{\quad}$

18) $5 - 1 = \underline{\quad}$

19) $3 - 1 = \underline{\quad}$

20) $4 - 2 = \underline{\quad}$

Answers

1. _____

2. _____

3. _____

4. _____

5. _____

6. _____

7. _____

8. _____

9. _____

10. _____

11. _____

12. _____

13. _____

14. _____

15. _____

16. _____

17. _____

18. _____

19. _____

20. _____



Solve each problem.

1) $3 + 2 = \underline{5}$

2) $5 + 0 = \underline{5}$

3) $2 + 1 = \underline{3}$

4) $1 + 1 = \underline{2}$

5) $2 + 0 = \underline{2}$

6) $4 + 0 = \underline{4}$

7) $1 + 4 = \underline{5}$

8) $2 + 3 = \underline{5}$

9) $3 + 0 = \underline{3}$

10) $3 + 1 = \underline{4}$

11) $4 - 3 = \underline{1}$

12) $4 - 1 = \underline{3}$

13) $5 - 3 = \underline{2}$

14) $5 - 4 = \underline{1}$

15) $2 - 1 = \underline{1}$

16) $4 - 4 = \underline{0}$

17) $5 - 5 = \underline{0}$

18) $5 - 1 = \underline{4}$

19) $3 - 1 = \underline{2}$

20) $4 - 2 = \underline{2}$

Answers

1. 5

2. 5

3. 3

4. 2

5. 2

6. 4

7. 5

8. 5

9. 3

10. 4

11. 1

12. 3

13. 2

14. 1

15. 1

16. 0

17. 0

18. 4


19. 2

20. 2

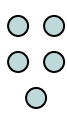


Solve each problem.


1) $3 + 2 = \underline{\quad}$




2) $5 + 0 = \underline{\quad}$




3) $2 + 1 = \underline{\quad}$




4) $1 + 1 = \underline{\quad}$




5) $2 + 0 = \underline{\quad}$




6) $4 + 0 = \underline{\quad}$




7) $1 + 4 = \underline{\quad}$



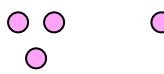
8) $2 + 3 = \underline{\quad}$




9) $3 + 0 = \underline{\quad}$




10) $3 + 1 = \underline{\quad}$



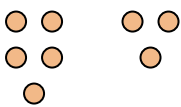
11) $4 - 3 = \underline{\quad}$



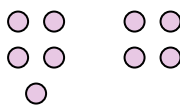
12) $4 - 1 = \underline{\quad}$




13) $5 - 3 = \underline{\quad}$




14) $5 - 4 = \underline{\quad}$



15) $2 - 1 = \underline{\quad}$



16) $4 - 4 = \underline{\quad}$



Answers

1. _____
2. _____
3. _____
4. _____
5. _____
6. _____
7. _____
8. _____
9. _____
10. _____
11. _____
12. _____
13. _____
14. _____
15. _____
16. _____



Solve each problem.

1) $2 + 2 = \underline{\quad}$

2) $5 + 0 = \underline{\quad}$

3) $3 + 0 = \underline{\quad}$

4) $1 + 1 = \underline{\quad}$

5) $4 + 1 = \underline{\quad}$

6) $2 + 3 = \underline{\quad}$

7) $1 + 4 = \underline{\quad}$

8) $1 + 2 = \underline{\quad}$

9) $4 + 0 = \underline{\quad}$

10) $1 + 3 = \underline{\quad}$

11) $5 - 4 = \underline{\quad}$

12) $5 - 3 = \underline{\quad}$

13) $5 - 2 = \underline{\quad}$

14) $5 - 5 = \underline{\quad}$

15) $3 - 3 = \underline{\quad}$

16) $4 - 3 = \underline{\quad}$

17) $4 - 1 = \underline{\quad}$

18) $3 - 2 = \underline{\quad}$

19) $1 - 1 = \underline{\quad}$

20) $4 - 2 = \underline{\quad}$

Answers

1. _____

2. _____

3. _____

4. _____

5. _____

6. _____

7. _____

8. _____

9. _____

10. _____

11. _____

12. _____

13. _____

14. _____

15. _____

16. _____

17. _____

18. _____

19. _____

20. _____



Solve each problem.

1) $2 + 2 = \underline{4}$

2) $5 + 0 = \underline{5}$

3) $3 + 0 = \underline{3}$

4) $1 + 1 = \underline{2}$

5) $4 + 1 = \underline{5}$

6) $2 + 3 = \underline{5}$

7) $1 + 4 = \underline{5}$

8) $1 + 2 = \underline{3}$

9) $4 + 0 = \underline{4}$

10) $1 + 3 = \underline{4}$

11) $5 - 4 = \underline{1}$

12) $5 - 3 = \underline{2}$

13) $5 - 2 = \underline{3}$

14) $5 - 5 = \underline{0}$

15) $3 - 3 = \underline{0}$

16) $4 - 3 = \underline{1}$

17) $4 - 1 = \underline{3}$

18) $3 - 2 = \underline{1}$

19) $1 - 1 = \underline{0}$

20) $4 - 2 = \underline{2}$

Answers

1. 4

2. 5

3. 3

4. 2

5. 5

6. 5

7. 5

8. 3

9. 4

10. 4

11. 1

12. 2

13. 3

14. 0

15. 0

16. 1

17. 3

18. 1


19. 0

20. 2

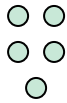


Solve each problem.


1) $2 + 2 = \underline{\quad}$




2) $5 + 0 = \underline{\quad}$




3) $3 + 0 = \underline{\quad}$




4) $1 + 1 = \underline{\quad}$




5) $4 + 1 = \underline{\quad}$




6) $2 + 3 = \underline{\quad}$




7) $1 + 4 = \underline{\quad}$




8) $1 + 2 = \underline{\quad}$



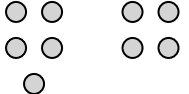
9) $4 + 0 = \underline{\quad}$



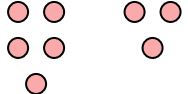
10) $1 + 3 = \underline{\quad}$



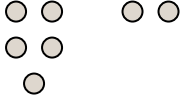
11) $5 - 4 = \underline{\quad}$



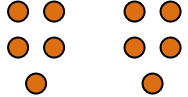
12) $5 - 3 = \underline{\quad}$




13) $5 - 2 = \underline{\quad}$




14) $5 - 5 = \underline{\quad}$



15) $3 - 3 = \underline{\quad}$



16) $4 - 3 = \underline{\quad}$



Answers

1. _____
2. _____
3. _____
4. _____
5. _____
6. _____
7. _____
8. _____
9. _____
10. _____
11. _____
12. _____
13. _____
14. _____
15. _____
16. _____



Solve each problem.

Answers

1) $4 + 0 = \underline{\quad}$

2) $5 + 0 = \underline{\quad}$

3) $4 + 1 = \underline{\quad}$

4) $2 + 2 = \underline{\quad}$

5) $1 + 2 = \underline{\quad}$

6) $1 + 3 = \underline{\quad}$

7) $1 + 0 = \underline{\quad}$

8) $3 + 2 = \underline{\quad}$

9) $2 + 1 = \underline{\quad}$

10) $1 + 4 = \underline{\quad}$

11) $5 - 5 = \underline{\quad}$

12) $2 - 1 = \underline{\quad}$

13) $3 - 3 = \underline{\quad}$

14) $1 - 1 = \underline{\quad}$

15) $4 - 3 = \underline{\quad}$

16) $4 - 4 = \underline{\quad}$

17) $3 - 2 = \underline{\quad}$

18) $4 - 1 = \underline{\quad}$

19) $5 - 4 = \underline{\quad}$

20) $5 - 3 = \underline{\quad}$

1. _____
2. _____
3. _____
4. _____
5. _____
6. _____
7. _____
8. _____
9. _____
10. _____
11. _____
12. _____
13. _____
14. _____
15. _____
16. _____
17. _____
18. _____
19. _____
20. _____



Solve each problem.

1) $4 + 0 = \underline{4}$

2) $5 + 0 = \underline{5}$

3) $4 + 1 = \underline{5}$

4) $2 + 2 = \underline{4}$

5) $1 + 2 = \underline{3}$

6) $1 + 3 = \underline{4}$

7) $1 + 0 = \underline{1}$

8) $3 + 2 = \underline{5}$

9) $2 + 1 = \underline{3}$

10) $1 + 4 = \underline{5}$

11) $5 - 5 = \underline{0}$

12) $2 - 1 = \underline{1}$

13) $3 - 3 = \underline{0}$

14) $1 - 1 = \underline{0}$

15) $4 - 3 = \underline{1}$

16) $4 - 4 = \underline{0}$

17) $3 - 2 = \underline{1}$

18) $4 - 1 = \underline{3}$

19) $5 - 4 = \underline{1}$

20) $5 - 3 = \underline{2}$

Answers

1. 4

2. 5

3. 5

4. 4

5. 3

6. 4

7. 1

8. 5

9. 3

10. 5

11. 0

12. 1

13. 0

14. 0

15. 1

16. 0

17. 1

18. 3

19. 1


20. 2




Solve each problem.

Answers


1) $4 + 0 = \underline{\quad}$




2) $5 + 0 = \underline{\quad}$




3) $4 + 1 = \underline{\quad}$



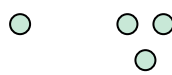
4) $2 + 2 = \underline{\quad}$




5) $1 + 2 = \underline{\quad}$




6) $1 + 3 = \underline{\quad}$




7) $1 + 0 = \underline{\quad}$




8) $3 + 2 = \underline{\quad}$



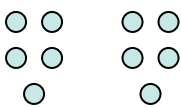
9) $2 + 1 = \underline{\quad}$




10) $1 + 4 = \underline{\quad}$




11) $5 - 5 = \underline{\quad}$




12) $2 - 1 = \underline{\quad}$




13) $3 - 3 = \underline{\quad}$




14) $1 - 1 = \underline{\quad}$



15) $4 - 3 = \underline{\quad}$



16) $4 - 4 = \underline{\quad}$



1. _____

2. _____

3. _____

4. _____

5. _____

6. _____

7. _____

8. _____

9. _____

10. _____

11. _____

12. _____

13. _____

14. _____

15. _____

16. _____



Solve each problem.

1) $2 + 2 = \underline{\quad}$

2) $3 + 2 = \underline{\quad}$

3) $5 + 0 = \underline{\quad}$

4) $4 + 1 = \underline{\quad}$

5) $4 + 0 = \underline{\quad}$

6) $2 + 3 = \underline{\quad}$

7) $2 + 1 = \underline{\quad}$

8) $3 + 0 = \underline{\quad}$

9) $3 + 1 = \underline{\quad}$

10) $1 + 3 = \underline{\quad}$

11) $4 - 4 = \underline{\quad}$

12) $3 - 3 = \underline{\quad}$

13) $5 - 4 = \underline{\quad}$

14) $5 - 5 = \underline{\quad}$

15) $4 - 2 = \underline{\quad}$

16) $4 - 3 = \underline{\quad}$

17) $3 - 1 = \underline{\quad}$

18) $5 - 3 = \underline{\quad}$

19) $2 - 1 = \underline{\quad}$

20) $1 - 1 = \underline{\quad}$

Answers

1. _____

2. _____

3. _____

4. _____

5. _____

6. _____

7. _____

8. _____

9. _____

10. _____

11. _____

12. _____

13. _____

14. _____

15. _____

16. _____

17. _____

18. _____

19. _____

20. _____



Solve each problem.

1) $2 + 2 = \underline{4}$

2) $3 + 2 = \underline{5}$

3) $5 + 0 = \underline{5}$

4) $4 + 1 = \underline{5}$

5) $4 + 0 = \underline{4}$

6) $2 + 3 = \underline{5}$

7) $2 + 1 = \underline{3}$

8) $3 + 0 = \underline{3}$

9) $3 + 1 = \underline{4}$

10) $1 + 3 = \underline{4}$

11) $4 - 4 = \underline{0}$

12) $3 - 3 = \underline{0}$

13) $5 - 4 = \underline{1}$

14) $5 - 5 = \underline{0}$

15) $4 - 2 = \underline{2}$

16) $4 - 3 = \underline{1}$

17) $3 - 1 = \underline{2}$

18) $5 - 3 = \underline{2}$

19) $2 - 1 = \underline{1}$

20) $1 - 1 = \underline{0}$

Answers

1. 4

2. 5

3. 5

4. 5

5. 4

6. 5

7. 3

8. 3

9. 4

10. 4

11. 0

12. 0

13. 1

14. 0

15. 2

16. 1

17. 2


18. 2


19. 1


20. 0





Solve each problem.


1) $2 + 2 = \underline{\quad}$



2) $3 + 2 = \underline{\quad}$



3) $5 + 0 = \underline{\quad}$



4) $4 + 1 = \underline{\quad}$



5) $4 + 0 = \underline{\quad}$



6) $2 + 3 = \underline{\quad}$



7) $2 + 1 = \underline{\quad}$


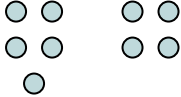
8) $3 + 0 = \underline{\quad}$


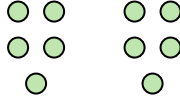
9) $3 + 1 = \underline{\quad}$



10) $1 + 3 = \underline{\quad}$



11) $4 - 4 = \underline{\quad}$


12) $3 - 3 = \underline{\quad}$


13) $5 - 4 = \underline{\quad}$


14) $5 - 5 = \underline{\quad}$


15) $4 - 2 = \underline{\quad}$


16) $4 - 3 = \underline{\quad}$


Answers

1. _____
2. _____
3. _____
4. _____
5. _____
6. _____
7. _____
8. _____
9. _____
10. _____
11. _____
12. _____
13. _____
14. _____
15. _____
16. _____



Solve each problem.

1) $4 + 1 = \underline{\quad}$

2) $1 + 3 = \underline{\quad}$

3) $3 + 2 = \underline{\quad}$

4) $4 + 0 = \underline{\quad}$

5) $1 + 2 = \underline{\quad}$

6) $3 + 1 = \underline{\quad}$

7) $2 + 2 = \underline{\quad}$

8) $2 + 0 = \underline{\quad}$

9) $5 + 0 = \underline{\quad}$

10) $3 + 0 = \underline{\quad}$

11) $5 - 5 = \underline{\quad}$

12) $4 - 3 = \underline{\quad}$

13) $3 - 2 = \underline{\quad}$

14) $1 - 1 = \underline{\quad}$

15) $3 - 1 = \underline{\quad}$

16) $4 - 4 = \underline{\quad}$

17) $4 - 1 = \underline{\quad}$

18) $5 - 2 = \underline{\quad}$

19) $5 - 3 = \underline{\quad}$

20) $4 - 2 = \underline{\quad}$

Answers

1. _____

2. _____

3. _____

4. _____

5. _____

6. _____

7. _____

8. _____

9. _____

10. _____

11. _____

12. _____

13. _____

14. _____

15. _____

16. _____

17. _____

18. _____

19. _____

20. _____



Solve each problem.

1) $4 + 1 = \underline{5}$

2) $1 + 3 = \underline{4}$

3) $3 + 2 = \underline{5}$

4) $4 + 0 = \underline{4}$

5) $1 + 2 = \underline{3}$

6) $3 + 1 = \underline{4}$

7) $2 + 2 = \underline{4}$

8) $2 + 0 = \underline{2}$

9) $5 + 0 = \underline{5}$

10) $3 + 0 = \underline{3}$

11) $5 - 5 = \underline{0}$

12) $4 - 3 = \underline{1}$

13) $3 - 2 = \underline{1}$

14) $1 - 1 = \underline{0}$

15) $3 - 1 = \underline{2}$

16) $4 - 4 = \underline{0}$

17) $4 - 1 = \underline{3}$

18) $5 - 2 = \underline{3}$

19) $5 - 3 = \underline{2}$


20) $4 - 2 = \underline{2}$

Answers1. 52. 43. 54. 45. 36. 47. 48. 29. 510. 311. 012. 113. 114. 015. 216. 017. 318. 319. 220. 2




Solve each problem.


1) $4 + 1 = \underline{\quad}$




2) $1 + 3 = \underline{\quad}$




3) $3 + 2 = \underline{\quad}$




4) $4 + 0 = \underline{\quad}$




5) $1 + 2 = \underline{\quad}$




6) $3 + 1 = \underline{\quad}$




7) $2 + 2 = \underline{\quad}$




8) $2 + 0 = \underline{\quad}$



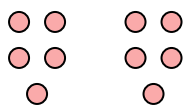
9) $5 + 0 = \underline{\quad}$




10) $3 + 0 = \underline{\quad}$




11) $5 - 5 = \underline{\quad}$




12) $4 - 3 = \underline{\quad}$




13) $3 - 2 = \underline{\quad}$




14) $1 - 1 = \underline{\quad}$



15) $3 - 1 = \underline{\quad}$



16) $4 - 4 = \underline{\quad}$



Answers

1. _____
2. _____
3. _____
4. _____
5. _____
6. _____
7. _____
8. _____
9. _____
10. _____
11. _____
12. _____
13. _____
14. _____
15. _____
16. _____



Solve each problem.

1) $4 + 1 = \underline{\quad}$

2) $5 + 0 = \underline{\quad}$

3) $2 + 3 = \underline{\quad}$

4) $3 + 2 = \underline{\quad}$

5) $1 + 4 = \underline{\quad}$

6) $4 + 0 = \underline{\quad}$

7) $3 + 1 = \underline{\quad}$

8) $2 + 2 = \underline{\quad}$

9) $1 + 3 = \underline{\quad}$

10) $3 + 0 = \underline{\quad}$

11) $5 - 4 = \underline{\quad}$

12) $4 - 4 = \underline{\quad}$

13) $2 - 1 = \underline{\quad}$

14) $5 - 5 = \underline{\quad}$

15) $5 - 3 = \underline{\quad}$

16) $4 - 3 = \underline{\quad}$

17) $1 - 1 = \underline{\quad}$

18) $5 - 1 = \underline{\quad}$

19) $5 - 2 = \underline{\quad}$

20) $2 - 2 = \underline{\quad}$

Answers

1. _____

2. _____

3. _____

4. _____

5. _____

6. _____

7. _____

8. _____

9. _____

10. _____

11. _____

12. _____

13. _____

14. _____

15. _____

16. _____

17. _____

18. _____

19. _____

20. _____



Solve each problem.

1) $4 + 1 = \underline{5}$

2) $5 + 0 = \underline{5}$

3) $2 + 3 = \underline{5}$

4) $3 + 2 = \underline{5}$

5) $1 + 4 = \underline{5}$

6) $4 + 0 = \underline{4}$

7) $3 + 1 = \underline{4}$

8) $2 + 2 = \underline{4}$

9) $1 + 3 = \underline{4}$

10) $3 + 0 = \underline{3}$

11) $5 - 4 = \underline{1}$

12) $4 - 4 = \underline{0}$

13) $2 - 1 = \underline{1}$

14) $5 - 5 = \underline{0}$

15) $5 - 3 = \underline{2}$

16) $4 - 3 = \underline{1}$

17) $1 - 1 = \underline{0}$

18) $5 - 1 = \underline{4}$

19) $5 - 2 = \underline{3}$


20) $2 - 2 = \underline{0}$

Answers1. 52. 53. 54. 55. 56. 47. 48. 49. 410. 311. 112. 013. 114. 015. 216. 117. 018. 419. 320. 0




Solve each problem.


1) $4 + 1 = \underline{\quad}$




2) $5 + 0 = \underline{\quad}$




3) $2 + 3 = \underline{\quad}$




4) $3 + 2 = \underline{\quad}$




5) $1 + 4 = \underline{\quad}$




6) $4 + 0 = \underline{\quad}$




7) $3 + 1 = \underline{\quad}$




8) $2 + 2 = \underline{\quad}$



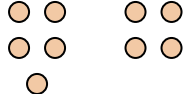
9) $1 + 3 = \underline{\quad}$




10) $3 + 0 = \underline{\quad}$




11) $5 - 4 = \underline{\quad}$



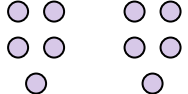
12) $4 - 4 = \underline{\quad}$



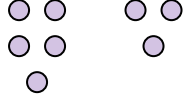
13) $2 - 1 = \underline{\quad}$




14) $5 - 5 = \underline{\quad}$



15) $5 - 3 = \underline{\quad}$



16) $4 - 3 = \underline{\quad}$



Answers

1. _____
2. _____
3. _____
4. _____
5. _____
6. _____
7. _____
8. _____
9. _____
10. _____
11. _____
12. _____
13. _____
14. _____
15. _____
16. _____