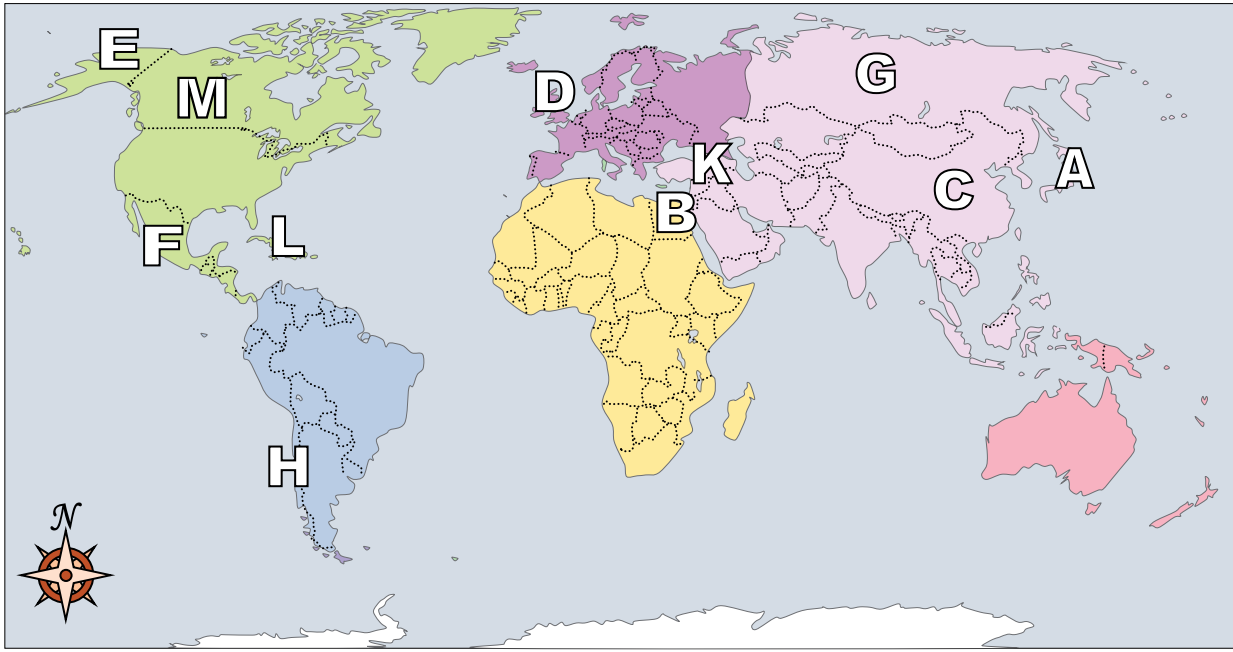






Using the map below, determine which letter represents each continent or ocean.



**Answers**

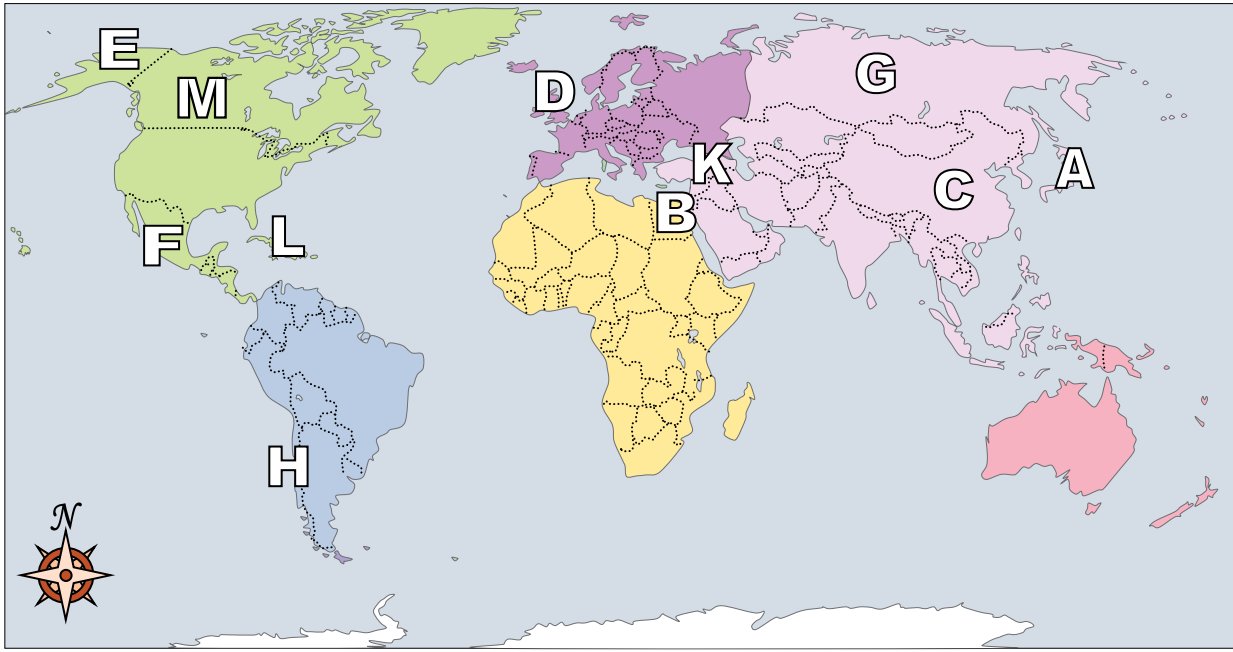
1. \_\_\_\_\_
2. \_\_\_\_\_
3. \_\_\_\_\_
4. \_\_\_\_\_
5. \_\_\_\_\_
6. \_\_\_\_\_
7. \_\_\_\_\_
8. \_\_\_\_\_
9. \_\_\_\_\_
10. \_\_\_\_\_
11. \_\_\_\_\_
12. \_\_\_\_\_
13. \_\_\_\_\_
14. \_\_\_\_\_
15. \_\_\_\_\_
16. \_\_\_\_\_

- |                  |                         |
|------------------|-------------------------|
| 1) Canada _____  | 7) Mexico _____         |
| 2) Chile _____   | 8) Alaska (State) _____ |
| 3) Britain _____ | 9) Japan _____          |
| 4) Russia _____  | 10) Cuba _____          |
| 5) Egypt _____   | 11) Iraq _____          |
| 6) China _____   |                         |

- 12) Which country attacked the United State's base at Pearl Harbor during World War 2?  
 A. Japan                      C. Mexico  
 B. Egypt                      D. China
- 13) Which country touches the USA's northern border?  
 A. Canada                      C. Egypt  
 B. France                      D. Britain
- 14) Which country touches the USA's southern border?  
 A. Egypt                      C. Mexico  
 B. Japan                      D. Britain
- 15) Alaska is \_\_\_\_\_ of the rest of the United States?  
 A. south                      C. west  
 B. east                      D. north
- 16) Who was the United States of America at war with during the American Revolution?  
 A. Canada                      C. Mexico  
 B. Egypt                      D. Britain



Using the map below, determine which letter represents each continent or ocean.



**Answers**

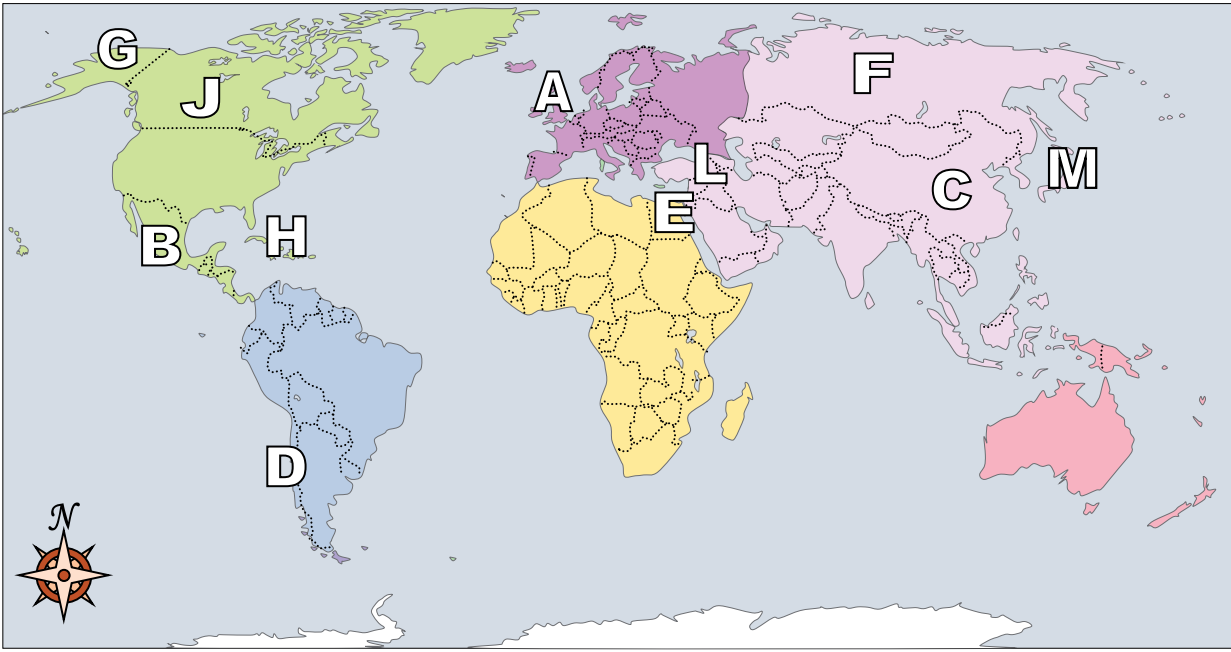
1.   **M**
2.   **H**
3.   **D**
4.   **G**
5.   **B**
6.   **C**
7.   **F**
8.   **E**
9.   **A**
10.   **L**
11.   **K**
12.   **A**
13.   **A**
14.   **C**
15.   **D**
16.   **D**

- |            |                     |                   |                     |
|------------|---------------------|-------------------|---------------------|
| 1) Canada  | <u>  <b>M</b>  </u> | 7) Mexico         | <u>  <b>F</b>  </u> |
| 2) Chile   | <u>  <b>H</b>  </u> | 8) Alaska (State) | <u>  <b>E</b>  </u> |
| 3) Britain | <u>  <b>D</b>  </u> | 9) Japan          | <u>  <b>A</b>  </u> |
| 4) Russia  | <u>  <b>G</b>  </u> | 10) Cuba          | <u>  <b>L</b>  </u> |
| 5) Egypt   | <u>  <b>B</b>  </u> | 11) Iraq          | <u>  <b>K</b>  </u> |
| 6) China   | <u>  <b>C</b>  </u> |                   |                     |

- 12) Which country attacked the United State's base at Pearl Harbor during World War 2?  
 A. Japan                                      C. Mexico  
 B. Egypt                                      D. China
- 13) Which country touches the USA's northern border?  
 A. Canada                                      C. Egypt  
 B. France                                      D. Britain
- 14) Which country touches the USA's southern border?  
 A. Egypt                                      C. Mexico  
 B. Japan                                      D. Britain
- 15) Alaska is \_\_\_\_\_ of the rest of the United States?  
 A. south                                      C. west  
 B. east                                      D. north
- 16) Who was the United States of America at war with during the American Revolution?  
 A. Canada                                      C. Mexico  
 B. Egypt                                      D. Britain



Using the map below, determine which letter represents each continent or ocean.



**Answers**

1. \_\_\_\_\_
2. \_\_\_\_\_
3. \_\_\_\_\_
4. \_\_\_\_\_
5. \_\_\_\_\_
6. \_\_\_\_\_
7. \_\_\_\_\_
8. \_\_\_\_\_
9. \_\_\_\_\_
10. \_\_\_\_\_
11. \_\_\_\_\_
12. \_\_\_\_\_
13. \_\_\_\_\_
14. \_\_\_\_\_
15. \_\_\_\_\_
16. \_\_\_\_\_

- |                  |                         |
|------------------|-------------------------|
| 1) Canada _____  | 7) Mexico _____         |
| 2) Chile _____   | 8) Alaska (State) _____ |
| 3) Britain _____ | 9) Japan _____          |
| 4) Russia _____  | 10) Cuba _____          |
| 5) Egypt _____   | 11) Iraq _____          |
| 6) China _____   |                         |

12) Alaska is \_\_\_\_\_ of the rest of the United States?  
 A. west                      C. north  
 B. east                      D. south

13) The state of Alaska is touching which country?  
 A. Mexico                      C. China  
 B. Canada                      D. Russia

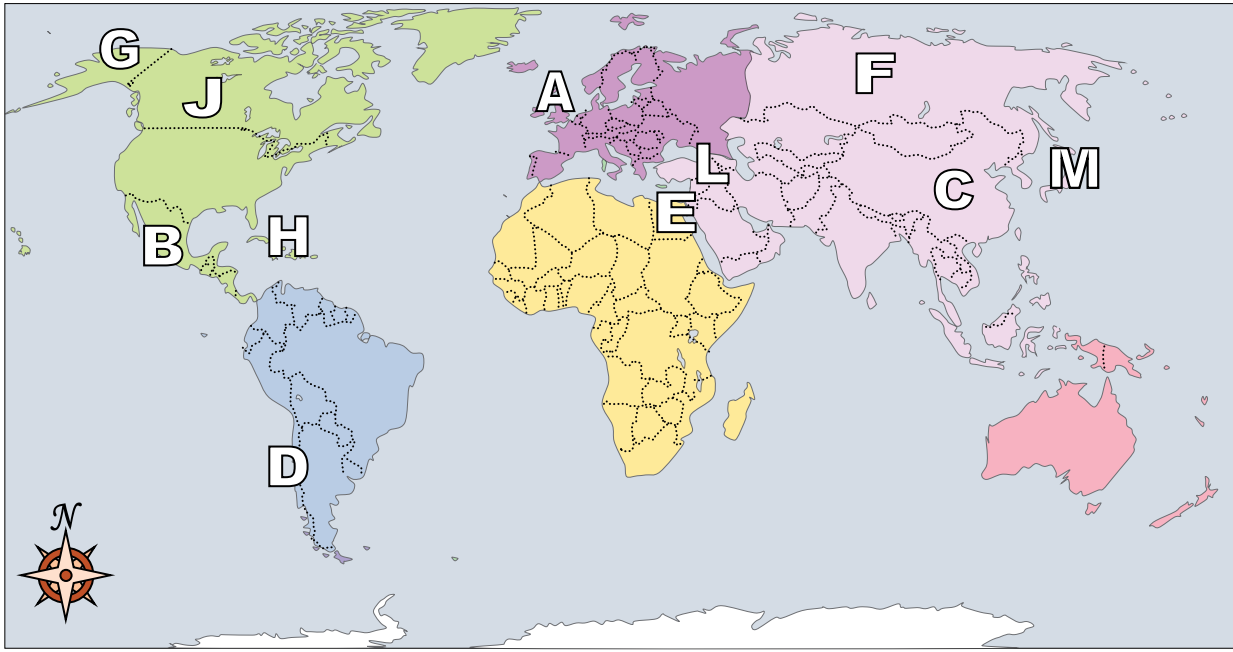
14) Which country attacked the United State's base at Pearl Harbor during World War 2?  
 A. Mexico                      C. Britain  
 B. Japan                      D. Egypt

15) Which is not part of North America?  
 A. Alaska                      C. Canada  
 B. The United States                      D. France

16) Which country is the largest in Asia?  
 A. Canada                      C. Russia  
 B. Japan                      D. China



Using the map below, determine which letter represents each continent or ocean.



- 1) Canada   J
- 2) Chile   D
- 3) Britain   A
- 4) Russia   F
- 5) Egypt   E
- 6) China   C
- 7) Mexico   B
- 8) Alaska (State)   G
- 9) Japan   M
- 10) Cuba   H
- 11) Iraq   L

12) Alaska is \_\_\_\_\_ of the rest of the United States?  
 A. west                      C. north  
 B. east                      D. south

13) The state of Alaska is touching which country?  
 A. Mexico                    C. China  
 B. Canada                    D. Russia

14) Which country attacked the United State's base at Pearl Harbor during World War 2?  
 A. Mexico                    C. Britain  
 B. Japan                      D. Egypt

15) Which is not part of North America?  
 A. Alaska                    C. Canada  
 B. The United States        D. France

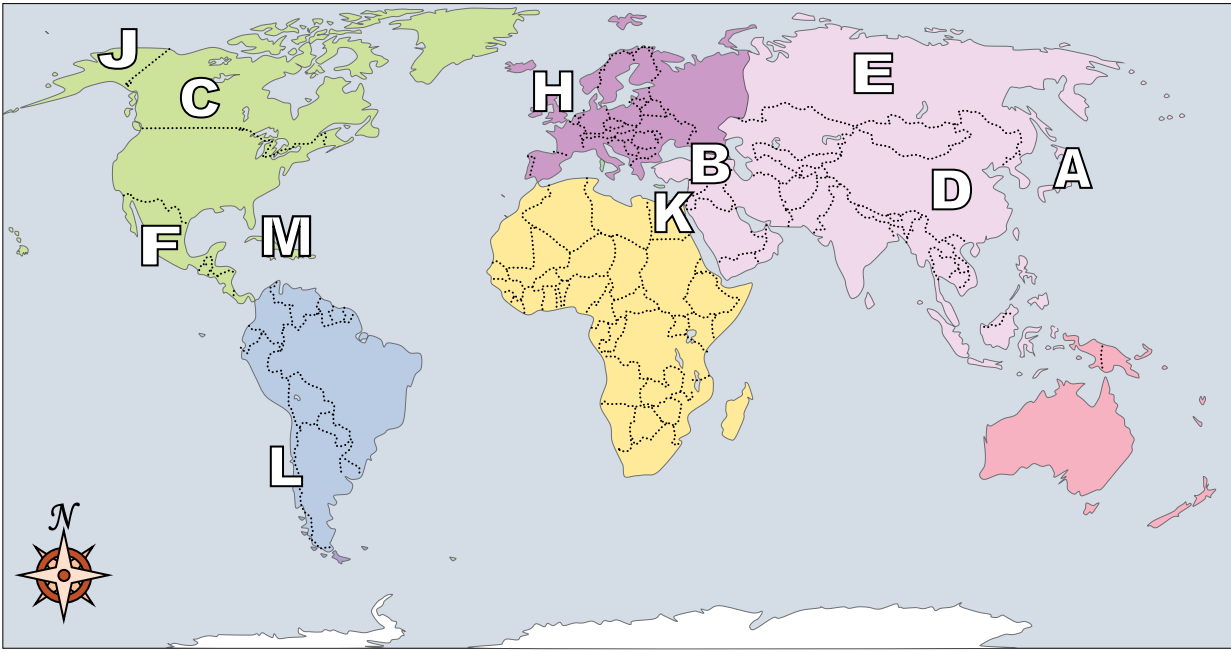
16) Which country is the largest in Asia?  
 A. Canada                    C. Russia  
 B. Japan                      D. China

**Answers**

- 1.   J
- 2.   D
- 3.   A
- 4.   F
- 5.   E
- 6.   C
- 7.   B
- 8.   G
- 9.   M
- 10.   H
- 11.   L
- 12.   C
- 13.   B
- 14.   B
- 15.   D
- 16.   C



Using the map below, determine which letter represents each continent or ocean.



**Answers**

1. \_\_\_\_\_
2. \_\_\_\_\_
3. \_\_\_\_\_
4. \_\_\_\_\_
5. \_\_\_\_\_
6. \_\_\_\_\_
7. \_\_\_\_\_
8. \_\_\_\_\_
9. \_\_\_\_\_
10. \_\_\_\_\_
11. \_\_\_\_\_
12. \_\_\_\_\_
13. \_\_\_\_\_
14. \_\_\_\_\_
15. \_\_\_\_\_
16. \_\_\_\_\_

- |                  |                         |
|------------------|-------------------------|
| 1) Canada _____  | 7) Mexico _____         |
| 2) Chile _____   | 8) Alaska (State) _____ |
| 3) Britain _____ | 9) Japan _____          |
| 4) Russia _____  | 10) Cuba _____          |
| 5) Egypt _____   | 11) Iraq _____          |
| 6) China _____   |                         |

- 12) Which country is closest to the state of Florida?
 

A. Japan	C. China
B. Mexico	D. Cuba
- 13) Which is not part of North America?
 

A. Canada	C. Japan
B. Mexico	D. Alaska
- 14) Which country touches the USA's northern border?
 

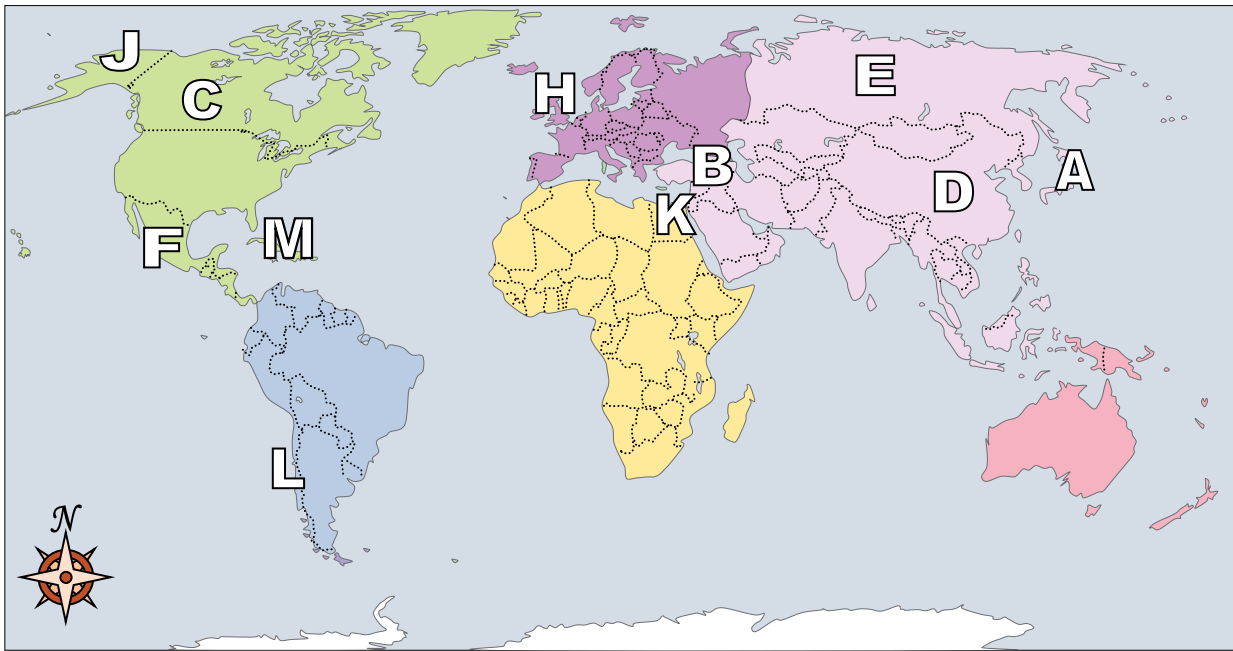
A. Britain	C. Canada
B. Egypt	D. Mexico
- 15) Which country attacked the United State's base at Pearl Harbor during World War 2?
 

A. Canada	C. Mexico
B. Japan	D. France
- 16) Who was the United States of America at war with during the American Revolution?
 

A. France	C. Mexico
B. Japan	D. Britain



Using the map below, determine which letter represents each continent or ocean.



**Answers**

1.     **C**
2.     **L**
3.     **H**
4.     **E**
5.     **K**
6.     **D**
7.     **F**
8.     **J**
9.     **A**
10.    **M**
11.    **B**
12.    **D**
13.    **C**
14.    **C**
15.    **B**
16.    **D**

- |            |                         |                   |                         |
|------------|-------------------------|-------------------|-------------------------|
| 1) Canada  | <u>    <b>C</b>    </u> | 7) Mexico         | <u>    <b>F</b>    </u> |
| 2) Chile   | <u>    <b>L</b>    </u> | 8) Alaska (State) | <u>    <b>J</b>    </u> |
| 3) Britain | <u>    <b>H</b>    </u> | 9) Japan          | <u>    <b>A</b>    </u> |
| 4) Russia  | <u>    <b>E</b>    </u> | 10) Cuba          | <u>    <b>M</b>    </u> |
| 5) Egypt   | <u>    <b>K</b>    </u> | 11) Iraq          | <u>    <b>B</b>    </u> |
| 6) China   | <u>    <b>D</b>    </u> |                   |                         |

- 12) Which country is closest to the state of Florida?
 

A. Japan	C. China
B. Mexico	D. Cuba
- 13) Which is not part of North America?
 

A. Canada	C. Japan
B. Mexico	D. Alaska
- 14) Which country touches the USA's northern border?
 

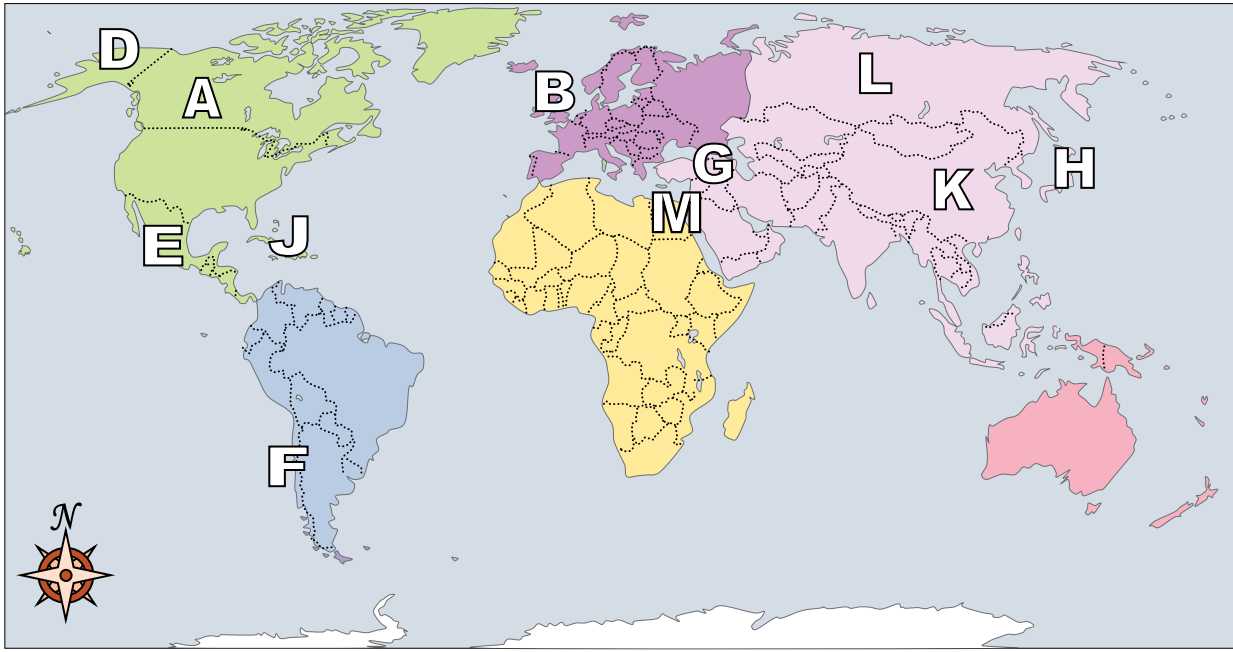
A. Britain	C. Canada
B. Egypt	D. Mexico
- 15) Which country attacked the United State's base at Pearl Harbor during World War 2?
 

A. Canada	C. Mexico
B. Japan	D. France
- 16) Who was the United States of America at war with during the American Revolution?
 

A. France	C. Mexico
B. Japan	D. Britain



Using the map below, determine which letter represents each continent or ocean.



**Answers**

1. \_\_\_\_\_
2. \_\_\_\_\_
3. \_\_\_\_\_
4. \_\_\_\_\_
5. \_\_\_\_\_
6. \_\_\_\_\_
7. \_\_\_\_\_
8. \_\_\_\_\_
9. \_\_\_\_\_
10. \_\_\_\_\_
11. \_\_\_\_\_
12. \_\_\_\_\_
13. \_\_\_\_\_
14. \_\_\_\_\_
15. \_\_\_\_\_
16. \_\_\_\_\_

- |                  |                         |
|------------------|-------------------------|
| 1) Canada _____  | 7) Mexico _____         |
| 2) Chile _____   | 8) Alaska (State) _____ |
| 3) Britain _____ | 9) Japan _____          |
| 4) Russia _____  | 10) Cuba _____          |
| 5) Egypt _____   | 11) Iraq _____          |
| 6) China _____   |                         |

- 12) Alaska is \_\_\_\_\_ of the rest of the United States?
 

A. north	C. east
B. west	D. south
- 13) If you wanted to see pyramids where should you go?
 

A. France	C. Egypt
B. Japan	D. Canada
- 14) Which is not part of North America?
 

A. The United States	C. Britain
B. Mexico	D. Alaska
- 15) Which country touches the USA's northern border?
 

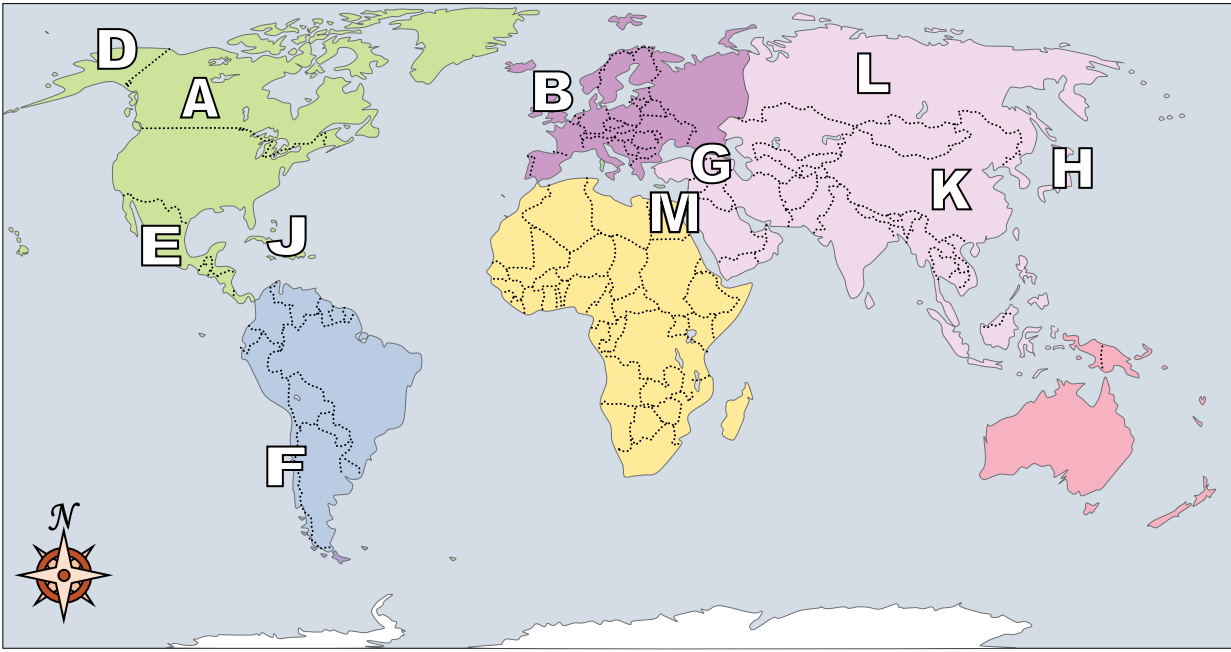
A. Canada	C. Japan
B. Egypt	D. France
- 16) Which country attacked the United State's base at Pearl Harbor during World War 2?
 

A. Egypt	C. Japan
B. Canada	D. Britain





Using the map below, determine which letter represents each continent or ocean.



- 1) Canada   A
- 2) Chile   F
- 3) Britain   B
- 4) Russia   L
- 5) Egypt   M
- 6) China   K
- 7) Mexico   E
- 8) Alaska (State)   D
- 9) Japan   H
- 10) Cuba   J
- 11) Iraq   G

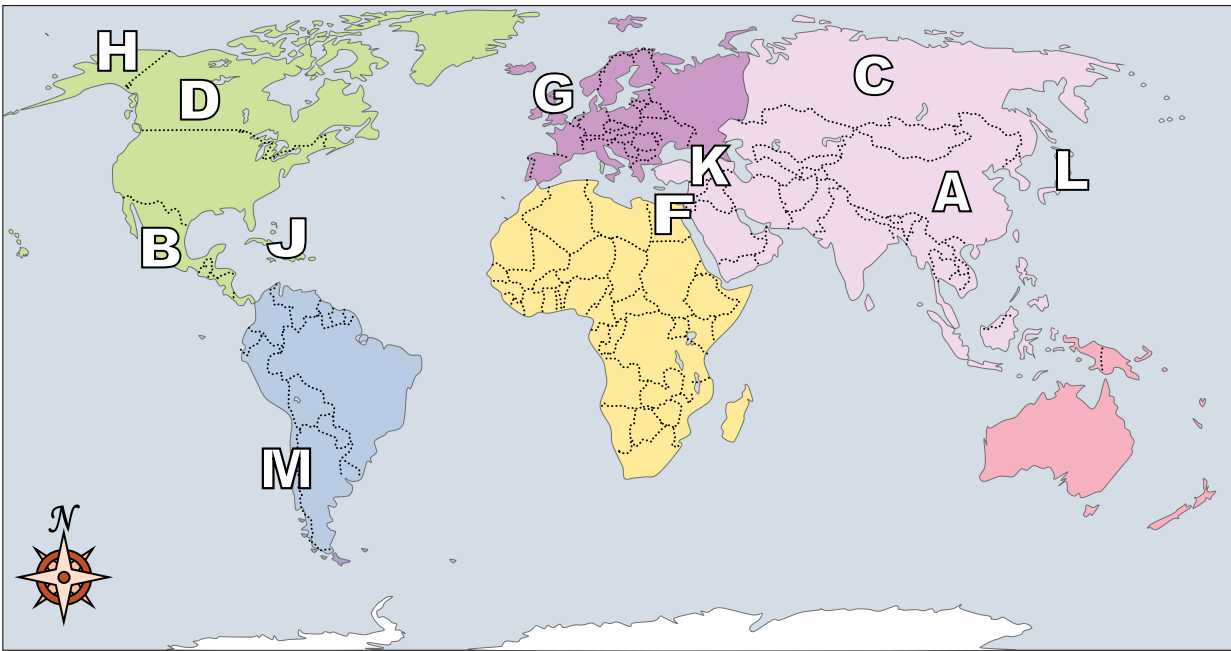
- 12) Alaska is \_\_\_\_\_ of the rest of the United States?  
 A. north                      C. east  
 B. west                        D. south
- 13) If you wanted to see pyramids where should you go?  
 A. France                      C. Egypt  
 B. Japan                        D. Canada
- 14) Which is not part of North America?  
 A. The United States        C. Britain  
 B. Mexico                      D. Alaska
- 15) Which country touches the USA's northern border?  
 A. Canada                      C. Japan  
 B. Egypt                        D. France
- 16) Which country attacked the United State's base at Pearl Harbor during World War 2?  
 A. Egypt                        C. Japan  
 B. Canada                       D. Britain

**Answers**

- 1.   A
- 2.   F
- 3.   B
- 4.   L
- 5.   M
- 6.   K
- 7.   E
- 8.   D
- 9.   H
- 10.   J
- 11.   G
- 12.   A
- 13.   C
- 14.   C
- 15.   A
- 16.   C



Using the map below, determine which letter represents each continent or ocean.



**Answers**

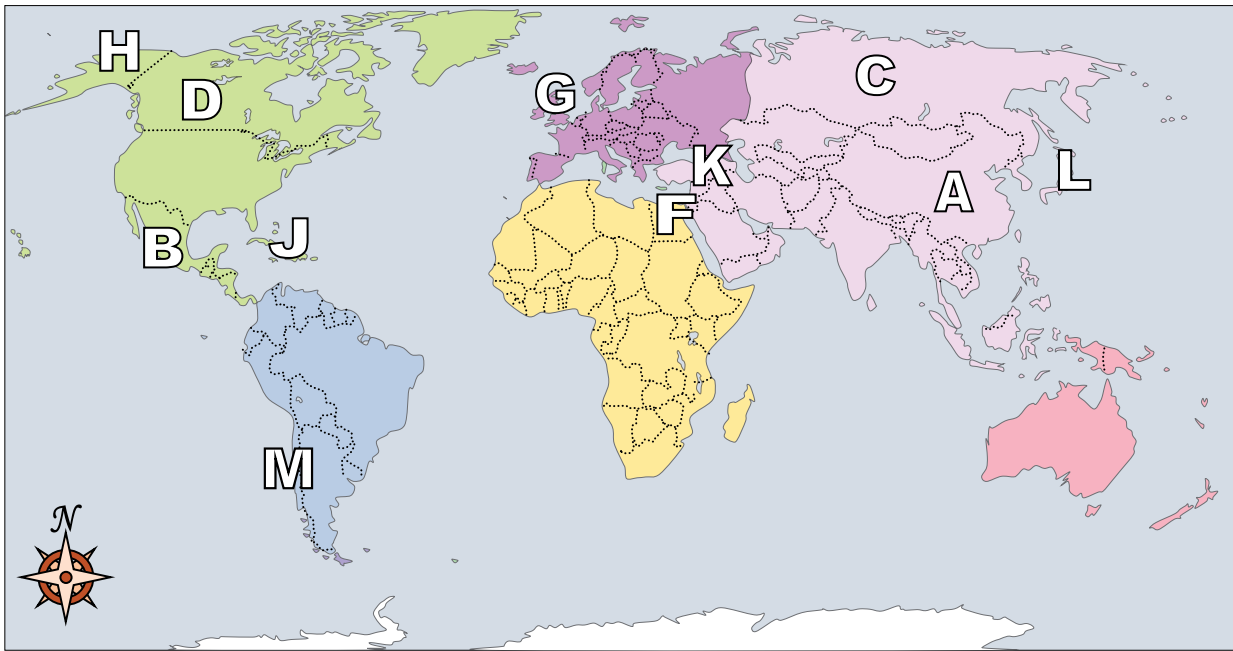
1. \_\_\_\_\_
2. \_\_\_\_\_
3. \_\_\_\_\_
4. \_\_\_\_\_
5. \_\_\_\_\_
6. \_\_\_\_\_
7. \_\_\_\_\_
8. \_\_\_\_\_
9. \_\_\_\_\_
10. \_\_\_\_\_
11. \_\_\_\_\_
12. \_\_\_\_\_
13. \_\_\_\_\_
14. \_\_\_\_\_
15. \_\_\_\_\_
16. \_\_\_\_\_

- |                  |                         |
|------------------|-------------------------|
| 1) Canada _____  | 7) Mexico _____         |
| 2) Chile _____   | 8) Alaska (State) _____ |
| 3) Britain _____ | 9) Japan _____          |
| 4) Russia _____  | 10) Cuba _____          |
| 5) Egypt _____   | 11) Iraq _____          |
| 6) China _____   |                         |

- 12) Who was the United States of America at war with during the American Revolution?
- |            |           |
|------------|-----------|
| A. Canada  | C. Egypt  |
| B. Britain | D. Mexico |
- 13) Which country is closest to the state of Florida?
- |           |            |
|-----------|------------|
| A. Cuba   | C. Mexico  |
| B. France | D. Britain |
- 14) Alaska is \_\_\_\_\_ of the rest of the United States?
- |          |          |
|----------|----------|
| A. south | C. north |
| B. west  | D. east  |
- 15) Which country attacked the United State's base at Pearl Harbor during World War 2?
- |           |          |
|-----------|----------|
| A. France | C. Japan |
| B. China  | D. Egypt |
- 16) If you wanted to see pyramids where should you go?
- |           |            |
|-----------|------------|
| A. Mexico | C. China   |
| B. Egypt  | D. Britain |



Using the map below, determine which letter represents each continent or ocean.



**Answers**

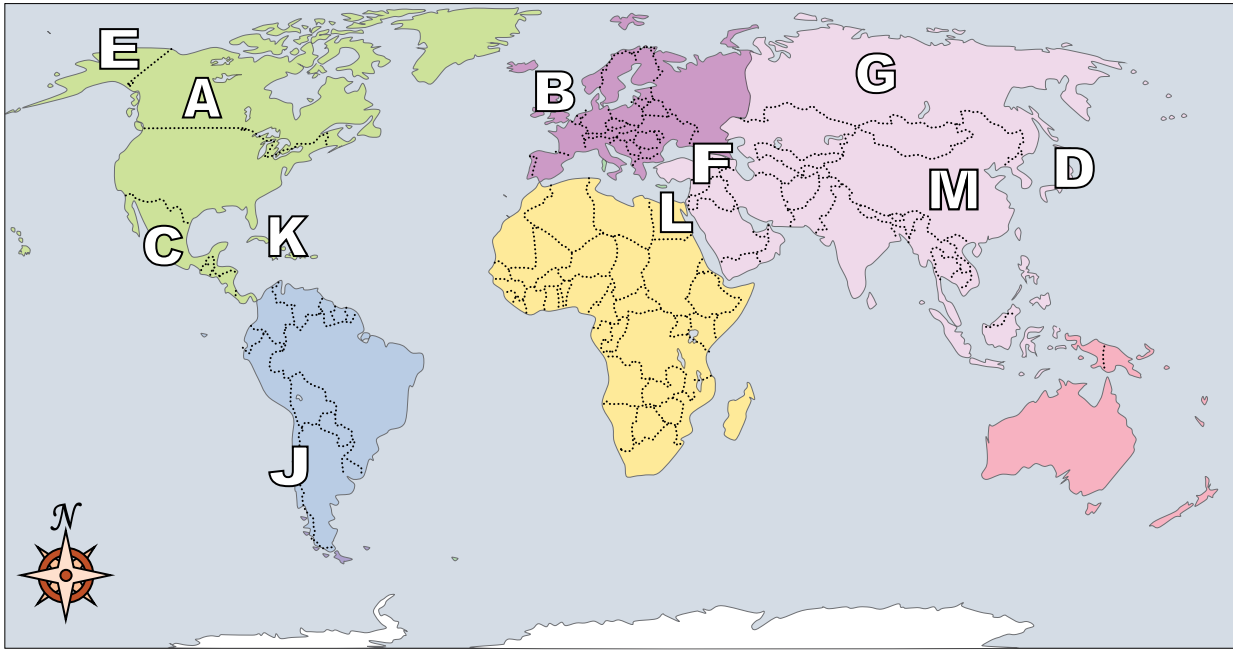
- 1.   **D**
- 2.   **M**
- 3.   **G**
- 4.   **C**
- 5.   **F**
- 6.   **A**
- 7.   **B**
- 8.   **H**
- 9.   **L**
- 10.   **J**
- 11.   **K**
- 12.   **B**
- 13.   **A**
- 14.   **C**
- 15.   **C**
- 16.   **B**

- 1) Canada   **D**
- 2) Chile   **M**
- 3) Britain   **G**
- 4) Russia   **C**
- 5) Egypt   **F**
- 6) China   **A**
- 7) Mexico   **B**
- 8) Alaska (State)   **H**
- 9) Japan   **L**
- 10) Cuba   **J**
- 11) Iraq   **K**

- 12) Who was the United States of America at war with during the American Revolution?  
 A. Canada                                      C. Egypt  
 B. Britain                                        D. Mexico
- 13) Which country is closest to the state of Florida?  
 A. Cuba    C. Mexico  
 B. France                                         D. Britain
- 14) Alaska is \_\_\_\_\_ of the rest of the United States?  
 A. south    C. north  
 B. west     D. east
- 15) Which country attacked the United State's base at Pearl Harbor during World War 2?  
 A. France                                         C. Japan  
 B. China    D. Egypt
- 16) If you wanted to see pyramids where should you go?  
 A. Mexico                                         C. China  
 B. Egypt    D. Britain



Using the map below, determine which letter represents each continent or ocean.



**Answers**

1. \_\_\_\_\_
2. \_\_\_\_\_
3. \_\_\_\_\_
4. \_\_\_\_\_
5. \_\_\_\_\_
6. \_\_\_\_\_
7. \_\_\_\_\_
8. \_\_\_\_\_
9. \_\_\_\_\_
10. \_\_\_\_\_
11. \_\_\_\_\_
12. \_\_\_\_\_
13. \_\_\_\_\_
14. \_\_\_\_\_
15. \_\_\_\_\_
16. \_\_\_\_\_

- |                  |                         |
|------------------|-------------------------|
| 1) Canada _____  | 7) Mexico _____         |
| 2) Chile _____   | 8) Alaska (State) _____ |
| 3) Britain _____ | 9) Japan _____          |
| 4) Russia _____  | 10) Cuba _____          |
| 5) Egypt _____   | 11) Iraq _____          |
| 6) China _____   |                         |

- 12) Which is not part of North America?
 

A. Japan	C. Alaska
B. Canada	D. Mexico
- 13) Which country touches the USA's southern border?
 

A. France	C. Britain
B. Mexico	D. Japan
- 14) The state of Alaska is touching which country?
 

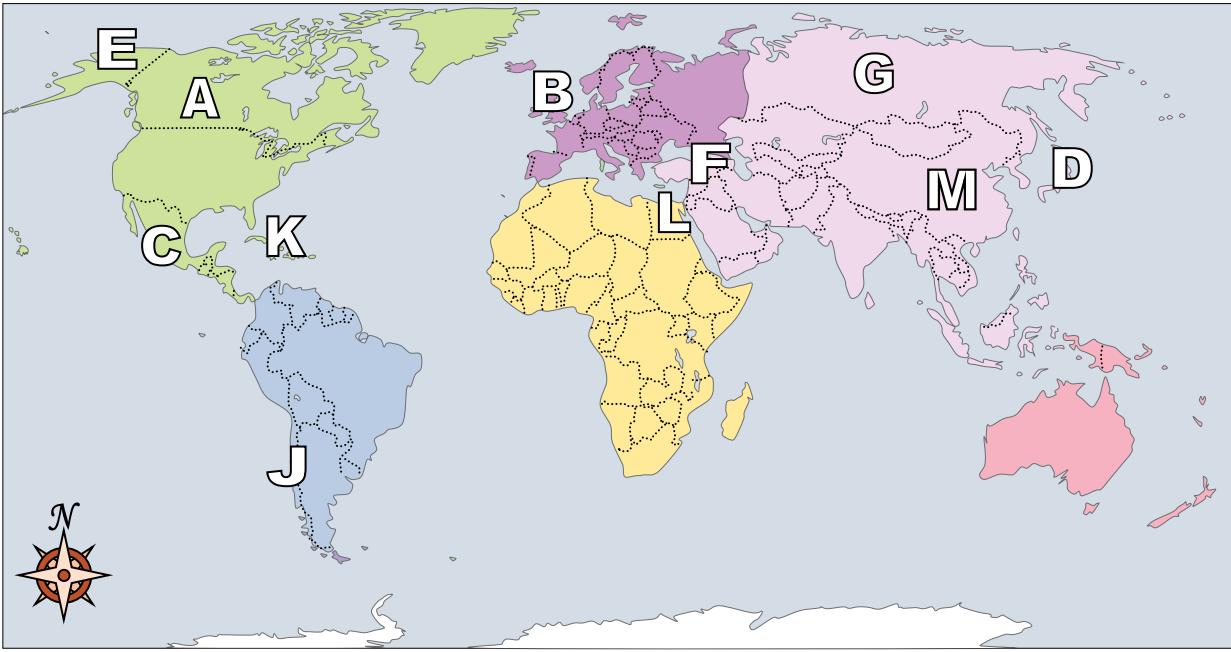
A. Britain	C. Japan
B. Mexico	D. Canada
- 15) Which country is the largest in Asia?
 

A. Britain	C. China
B. Mexico	D. Russia
- 16) Which country touches the USA's northern border?
 

A. Britain	C. Mexico
B. Canada	D. China



Using the map below, determine which letter represents each continent or ocean.



**Answers**

1.   **A**
2.   **J**
3.   **B**
4.   **G**
5.   **L**
6.   **M**
7.   **C**
8.   **E**
9.   **D**
10.   **K**
11.   **F**
12.   **A**
13.   **B**
14.   **D**
15.   **D**
16.   **B**

- |            |                     |                   |                     |
|------------|---------------------|-------------------|---------------------|
| 1) Canada  | <u>  <b>A</b>  </u> | 7) Mexico         | <u>  <b>C</b>  </u> |
| 2) Chile   | <u>  <b>J</b>  </u> | 8) Alaska (State) | <u>  <b>E</b>  </u> |
| 3) Britain | <u>  <b>B</b>  </u> | 9) Japan          | <u>  <b>D</b>  </u> |
| 4) Russia  | <u>  <b>G</b>  </u> | 10) Cuba          | <u>  <b>K</b>  </u> |
| 5) Egypt   | <u>  <b>L</b>  </u> | 11) Iraq          | <u>  <b>F</b>  </u> |
| 6) China   | <u>  <b>M</b>  </u> |                   |                     |

- 12) Which is not part of North America?
 

A. Japan	C. Alaska
B. Canada	D. Mexico
- 13) Which country touches the USA's southern border?
 

A. France	C. Britain
B. Mexico	D. Japan
- 14) The state of Alaska is touching which country?
 

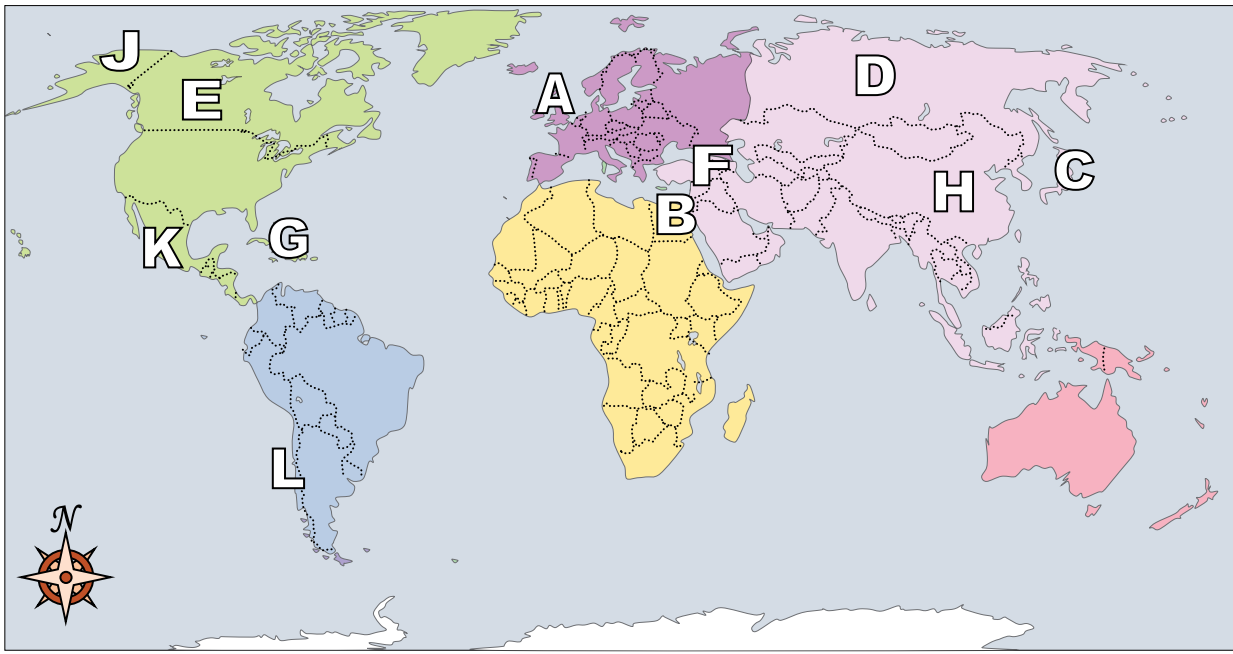
A. Britain	C. Japan
B. Mexico	D. Canada
- 15) Which country is the largest in Asia?
 

A. Britain	C. China
B. Mexico	D. Russia
- 16) Which country touches the USA's northern border?
 

A. Britain	C. Mexico
B. Canada	D. China



Using the map below, determine which letter represents each continent or ocean.



**Answers**

1. \_\_\_\_\_
2. \_\_\_\_\_
3. \_\_\_\_\_
4. \_\_\_\_\_
5. \_\_\_\_\_
6. \_\_\_\_\_
7. \_\_\_\_\_
8. \_\_\_\_\_
9. \_\_\_\_\_
10. \_\_\_\_\_
11. \_\_\_\_\_
12. \_\_\_\_\_
13. \_\_\_\_\_
14. \_\_\_\_\_
15. \_\_\_\_\_
16. \_\_\_\_\_

- |                  |                         |
|------------------|-------------------------|
| 1) Canada _____  | 7) Mexico _____         |
| 2) Chile _____   | 8) Alaska (State) _____ |
| 3) Britain _____ | 9) Japan _____          |
| 4) Russia _____  | 10) Cuba _____          |
| 5) Egypt _____   | 11) Iraq _____          |
| 6) China _____   |                         |

- 12) Which country is closest to the state of Florida?
 

A. Japan	C. Cuba
B. Russia	D. Britain
- 13) Which country touches the USA's northern border?
 

A. Egypt	C. Canada
B. China	D. Mexico
- 14) Which country touches the USA's southern border?
 

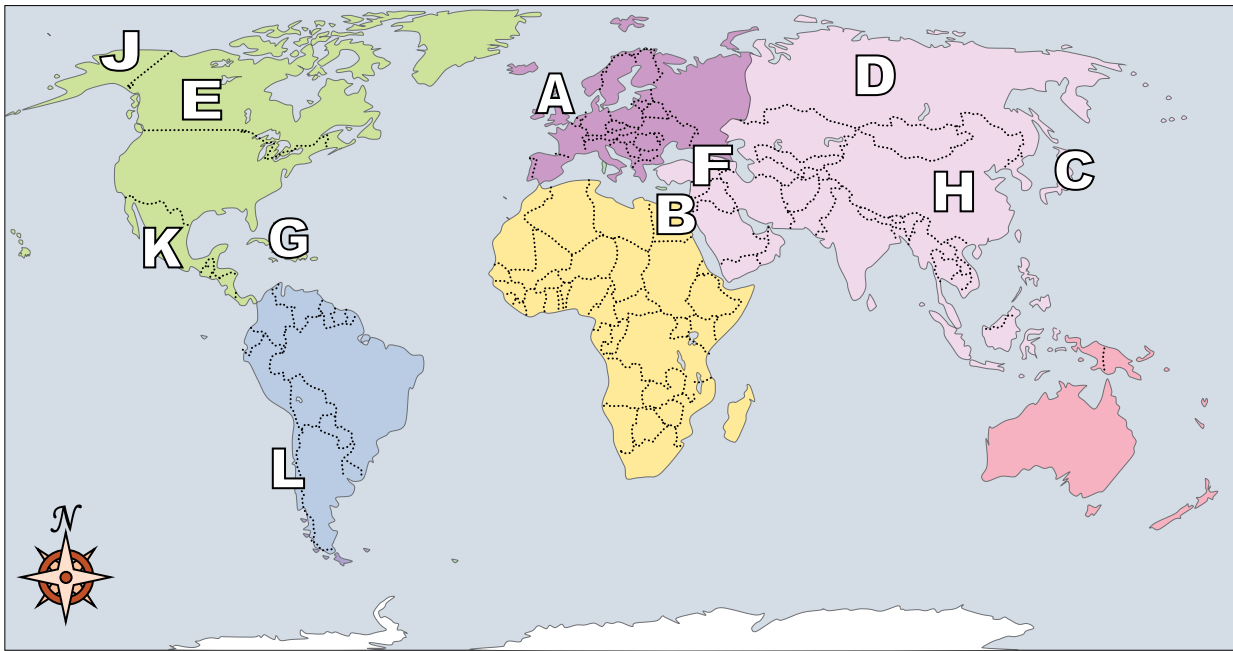
A. Japan	C. Mexico
B. Canada	D. Egypt
- 15) Alaska is \_\_\_\_\_ of the rest of the United States?
 

A. east	C. west
B. north	D. south
- 16) The state of Alaska is touching which country?
 

A. Britain	C. Canada
B. France	D. Mexico



Using the map below, determine which letter represents each continent or ocean.



**Answers**

1.   **E**
2.   **L**
3.   **A**
4.   **D**
5.   **B**
6.   **H**
7.   **K**
8.   **J**
9.   **C**
10.   **G**
11.   **F**
12.   **C**
13.   **C**
14.   **C**
15.   **B**
16.   **C**

- |            |                     |                   |                     |
|------------|---------------------|-------------------|---------------------|
| 1) Canada  | <u>  <b>E</b>  </u> | 7) Mexico         | <u>  <b>K</b>  </u> |
| 2) Chile   | <u>  <b>L</b>  </u> | 8) Alaska (State) | <u>  <b>J</b>  </u> |
| 3) Britain | <u>  <b>A</b>  </u> | 9) Japan          | <u>  <b>C</b>  </u> |
| 4) Russia  | <u>  <b>D</b>  </u> | 10) Cuba          | <u>  <b>G</b>  </u> |
| 5) Egypt   | <u>  <b>B</b>  </u> | 11) Iraq          | <u>  <b>F</b>  </u> |
| 6) China   | <u>  <b>H</b>  </u> |                   |                     |

- 12) Which country is closest to the state of Florida?
 

A. Japan	C. Cuba
B. Russia	D. Britain
- 13) Which country touches the USA's northern border?
 

A. Egypt	C. Canada
B. China	D. Mexico
- 14) Which country touches the USA's southern border?
 

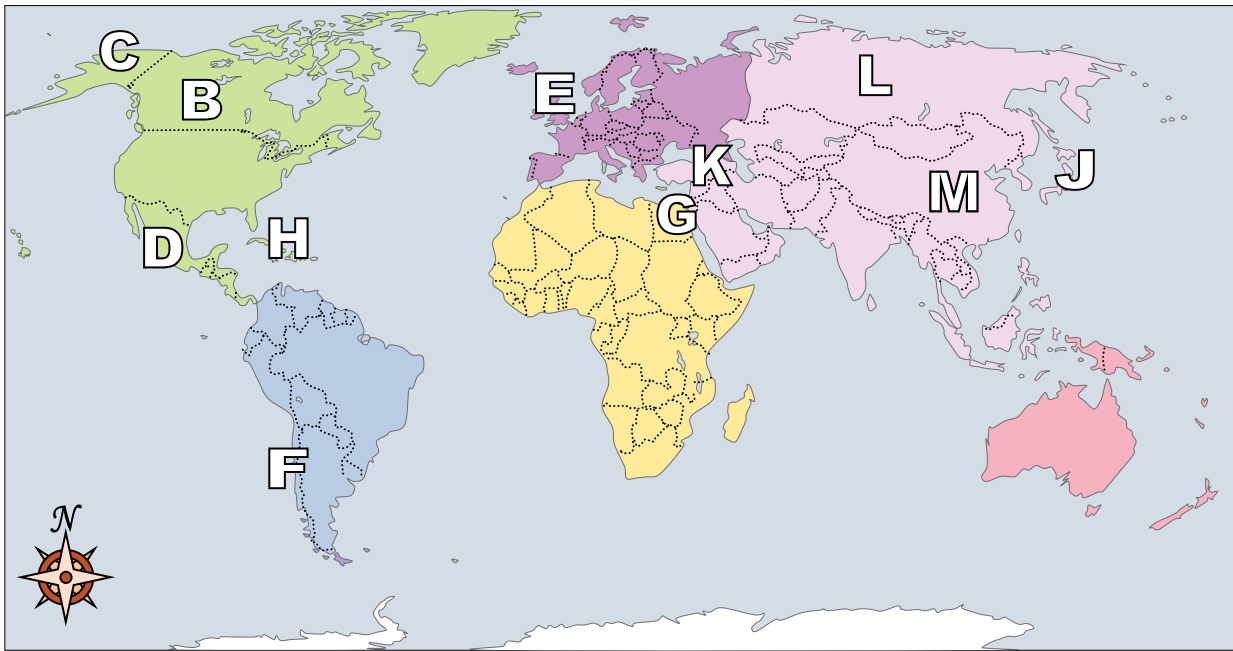
A. Japan	C. Mexico
B. Canada	D. Egypt
- 15) Alaska is \_\_\_\_\_ of the rest of the United States?
 

A. east	C. west
B. north	D. south
- 16) The state of Alaska is touching which country?
 

A. Britain	C. Canada
B. France	D. Mexico



Using the map below, determine which letter represents each continent or ocean.



**Answers**

1. \_\_\_\_\_
2. \_\_\_\_\_
3. \_\_\_\_\_
4. \_\_\_\_\_
5. \_\_\_\_\_
6. \_\_\_\_\_
7. \_\_\_\_\_
8. \_\_\_\_\_
9. \_\_\_\_\_
10. \_\_\_\_\_
11. \_\_\_\_\_
12. \_\_\_\_\_
13. \_\_\_\_\_
14. \_\_\_\_\_
15. \_\_\_\_\_
16. \_\_\_\_\_

- |                  |                         |
|------------------|-------------------------|
| 1) Canada _____  | 7) Mexico _____         |
| 2) Chile _____   | 8) Alaska (State) _____ |
| 3) Britain _____ | 9) Japan _____          |
| 4) Russia _____  | 10) Cuba _____          |
| 5) Egypt _____   | 11) Iraq _____          |
| 6) China _____   |                         |

- 12) Which country is closest to the state of Florida?
 

A. Russia	C. Britain
B. Cuba	D. Canada
- 13) Alaska is \_\_\_\_\_ of the rest of the United States?
 

A. south	C. east
B. north	D. west
- 14) Which country touches the USA's northern border?
 

A. Mexico	C. Japan
B. Canada	D. Egypt
- 15) Which country is the largest in Asia?
 

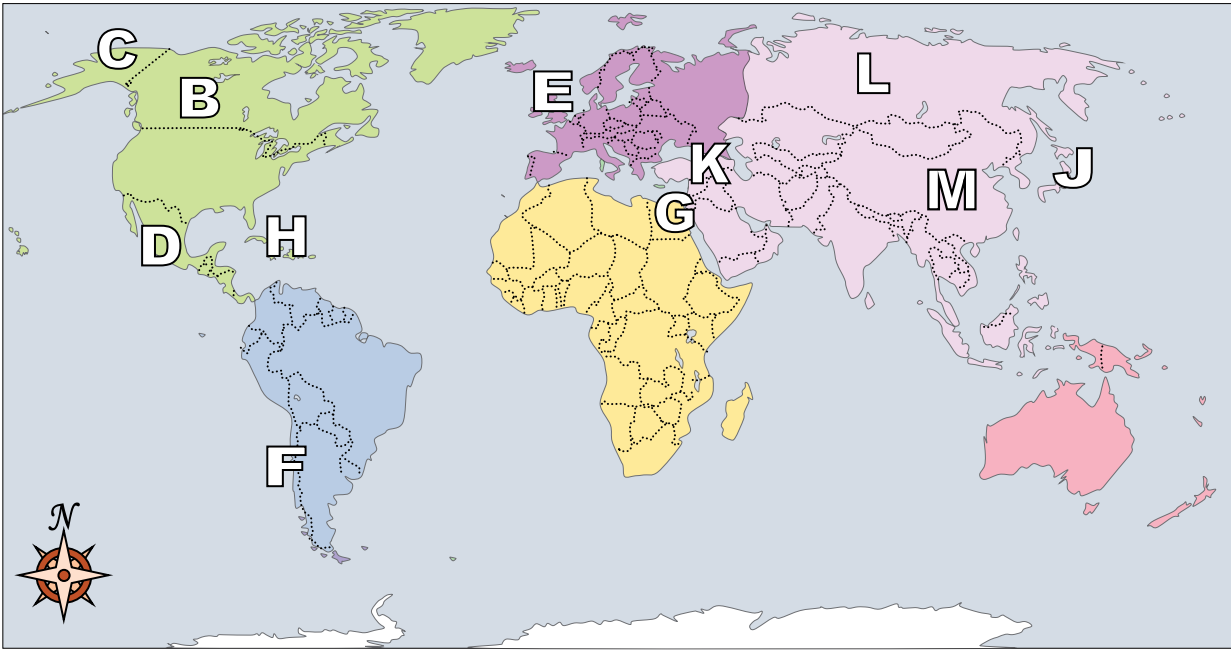
A. Russia	C. Britain
B. Japan	D. Canada
- 16) Which country attacked the United State's base at Pearl Harbor during World War 2?
 

A. Japan	C. Britain
B. China	D. Egypt





Using the map below, determine which letter represents each continent or ocean.



- 1) Canada   B
- 2) Chile   F
- 3) Britain   E
- 4) Russia   L
- 5) Egypt   G
- 6) China   M
- 7) Mexico   D
- 8) Alaska (State)   C
- 9) Japan   J
- 10) Cuba   H
- 11) Iraq   K

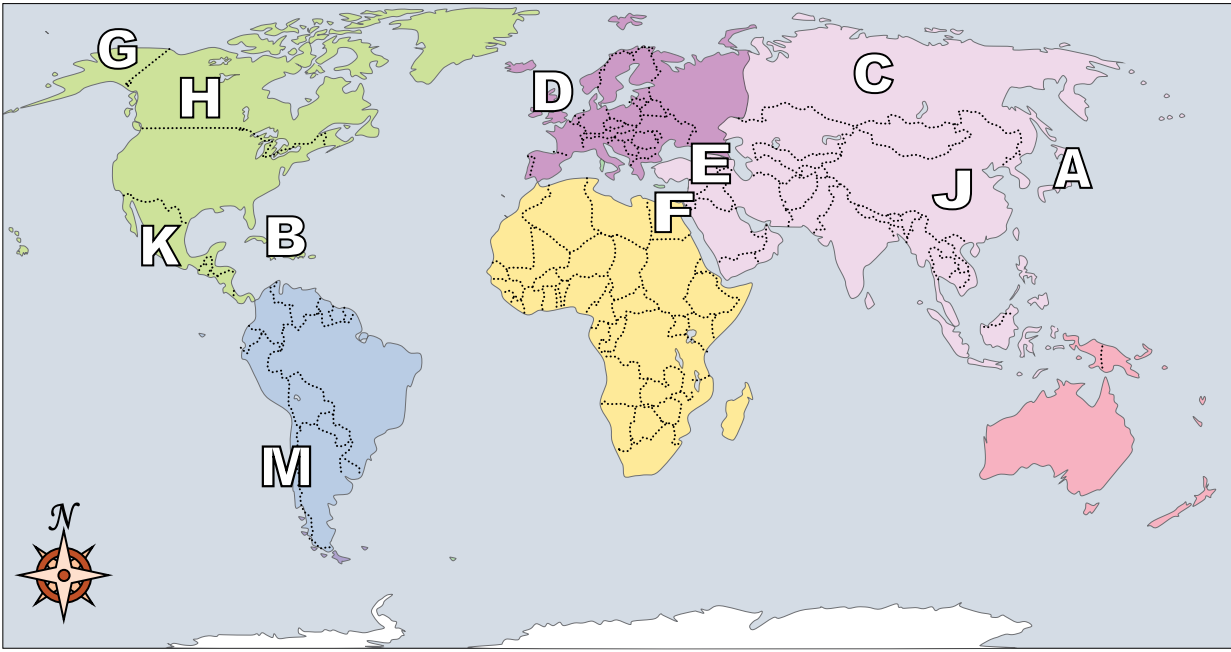
- 12) Which country is closest to the state of Florida?
  - A. Russia
  - B. Cuba
  - C. Britain
  - D. Canada
- 13) Alaska is \_\_\_\_\_ of the rest of the United States?
  - A. south
  - B. north
  - C. east
  - D. west
- 14) Which country touches the USA's northern border?
  - A. Mexico
  - B. Canada
  - C. Japan
  - D. Egypt
- 15) Which country is the largest in Asia?
  - A. Russia
  - B. Japan
  - C. Britain
  - D. Canada
- 16) Which country attacked the United State's base at Pearl Harbor during World War 2?
  - A. Japan
  - B. China
  - C. Britain
  - D. Egypt

**Answers**

- 1.   B
- 2.   F
- 3.   E
- 4.   L
- 5.   G
- 6.   M
- 7.   D
- 8.   C
- 9.   J
- 10.   H
- 11.   K
- 12.   B
- 13.   B
- 14.   B
- 15.   A
- 16.   A



Using the map below, determine which letter represents each continent or ocean.



**Answers**

1. \_\_\_\_\_
2. \_\_\_\_\_
3. \_\_\_\_\_
4. \_\_\_\_\_
5. \_\_\_\_\_
6. \_\_\_\_\_
7. \_\_\_\_\_
8. \_\_\_\_\_
9. \_\_\_\_\_
10. \_\_\_\_\_
11. \_\_\_\_\_
12. \_\_\_\_\_
13. \_\_\_\_\_
14. \_\_\_\_\_
15. \_\_\_\_\_
16. \_\_\_\_\_

- |                  |                         |
|------------------|-------------------------|
| 1) Canada _____  | 7) Mexico _____         |
| 2) Chile _____   | 8) Alaska (State) _____ |
| 3) Britain _____ | 9) Japan _____          |
| 4) Russia _____  | 10) Cuba _____          |
| 5) Egypt _____   | 11) Iraq _____          |
| 6) China _____   |                         |

- 12) Which country is the largest in Asia?
 

A. Mexico	C. Russia
B. China	D. Egypt
- 13) Which country touches the USA's northern border?
 

A. Canada	C. France
B. Britain	D. Japan
- 14) If you wanted to see pyramids where should you go?
 

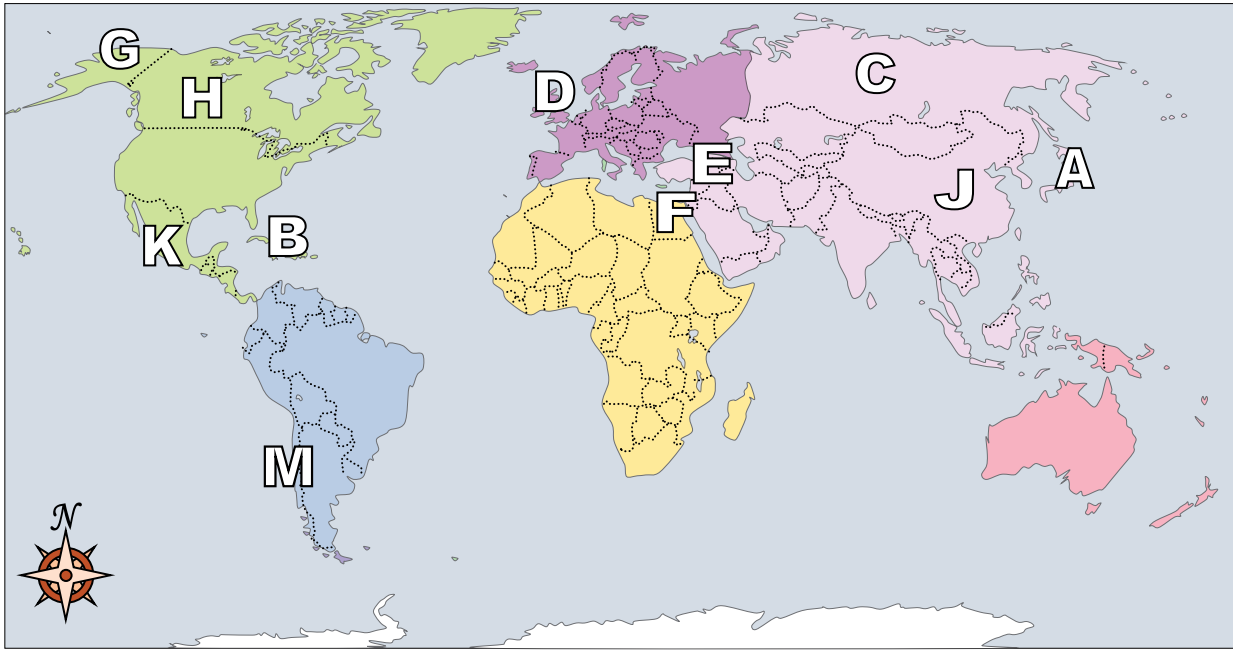
A. Egypt	C. Mexico
B. France	D. China
- 15) Which country is closest to the state of Florida?
 

A. Japan	C. Russia
B. France	D. Cuba
- 16) Who was the United States of America at war with during the American Revolution?
 

A. China	C. France
B. Britain	D. Canada



Using the map below, determine which letter represents each continent or ocean.



- 1) Canada   H
- 2) Chile   M
- 3) Britain   D
- 4) Russia   C
- 5) Egypt   F
- 6) China   J
- 7) Mexico   K
- 8) Alaska (State)   G
- 9) Japan   A
- 10) Cuba   B
- 11) Iraq   E

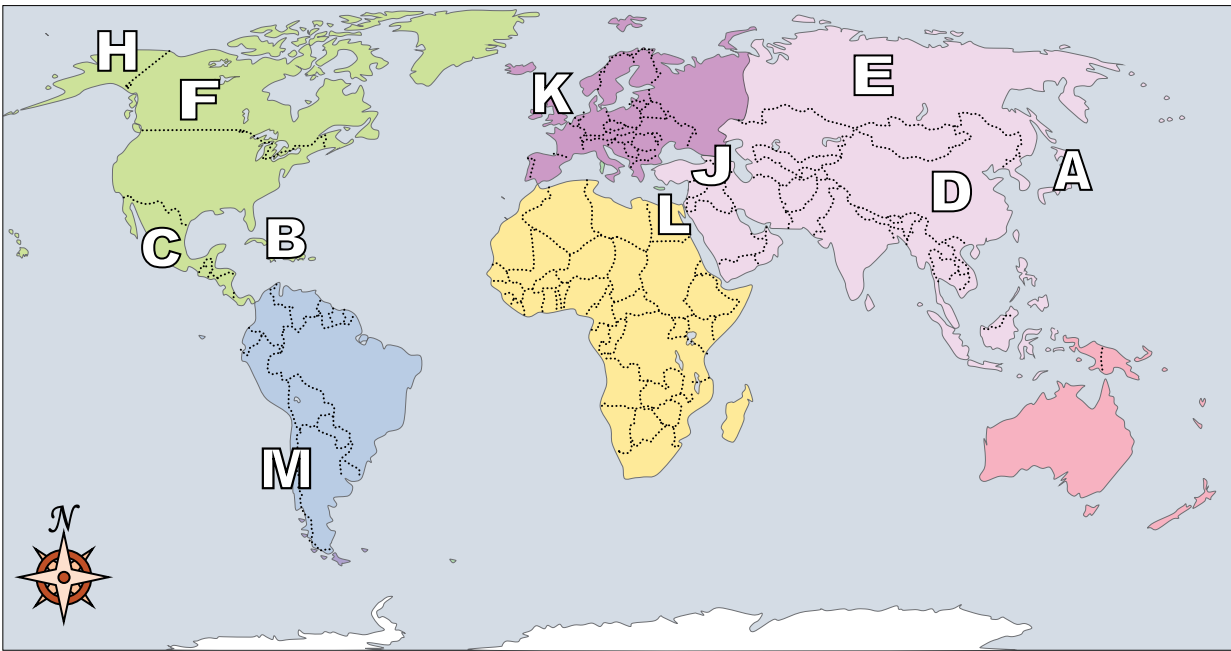
- 12) Which country is the largest in Asia?  
A. Mexico                      C. Russia  
B. China                        D. Egypt
- 13) Which country touches the USA's northern border?  
A. Canada                      C. France  
B. Britain                       D. Japan
- 14) If you wanted to see pyramids where should you go?  
A. Egypt                        C. Mexico  
B. France                        D. China
- 15) Which country is closest to the state of Florida?  
A. Japan                         C. Russia  
B. France                        D. Cuba
- 16) Who was the United States of America at war with during the American Revolution?  
A. China                         C. France  
B. Britain                        D. Canada

**Answers**

- 1.   H
- 2.   M
- 3.   D
- 4.   C
- 5.   F
- 6.   J
- 7.   K
- 8.   G
- 9.   A
- 10.   B
- 11.   E
- 12.   C
- 13.   A
- 14.   A
- 15.   D
- 16.   B



Using the map below, determine which letter represents each continent or ocean.



**Answers**

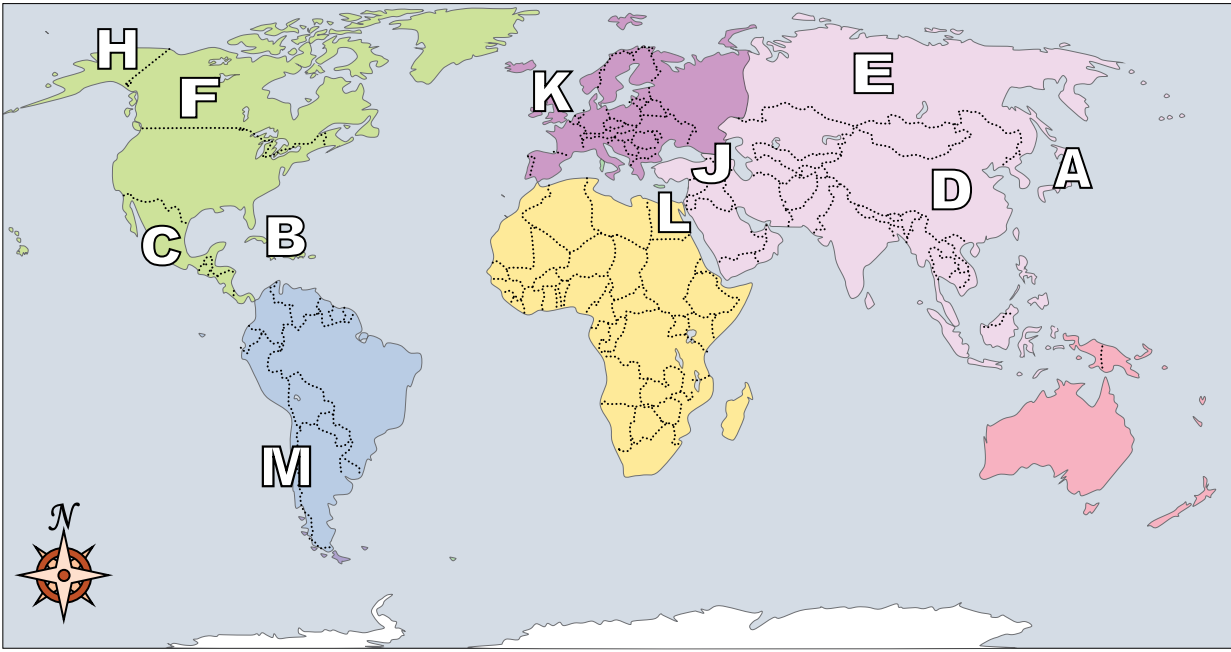
1. \_\_\_\_\_
2. \_\_\_\_\_
3. \_\_\_\_\_
4. \_\_\_\_\_
5. \_\_\_\_\_
6. \_\_\_\_\_
7. \_\_\_\_\_
8. \_\_\_\_\_
9. \_\_\_\_\_
10. \_\_\_\_\_
11. \_\_\_\_\_
12. \_\_\_\_\_
13. \_\_\_\_\_
14. \_\_\_\_\_
15. \_\_\_\_\_
16. \_\_\_\_\_

- |                  |                         |
|------------------|-------------------------|
| 1) Canada _____  | 7) Mexico _____         |
| 2) Chile _____   | 8) Alaska (State) _____ |
| 3) Britain _____ | 9) Japan _____          |
| 4) Russia _____  | 10) Cuba _____          |
| 5) Egypt _____   | 11) Iraq _____          |
| 6) China _____   |                         |

- 12) Who was the United States of America at war with during the American Revolution?
- |            |          |
|------------|----------|
| A. Britain | C. Japan |
| B. Egypt   | D. China |
- 13) The state of Alaska is touching which country?
- |           |           |
|-----------|-----------|
| A. France | C. Mexico |
| B. Russia | D. Canada |
- 14) Which country is closest to the state of Florida?
- |           |          |
|-----------|----------|
| A. Japan  | C. Cuba  |
| B. Canada | D. Egypt |
- 15) Alaska is \_\_\_\_\_ of the rest of the United States?
- |          |          |
|----------|----------|
| A. west  | C. north |
| B. south | D. east  |
- 16) If you wanted to see pyramids where should you go?
- |           |            |
|-----------|------------|
| A. China  | C. Egypt   |
| B. Russia | D. Britain |



Using the map below, determine which letter represents each continent or ocean.



**Answers**

1.   **F**
2.   **M**
3.   **K**
4.   **E**
5.   **L**
6.   **D**
7.   **C**
8.   **H**
9.   **A**
10.   **B**
11.   **J**
12.   **A**
13.   **D**
14.   **C**
15.   **C**
16.   **C**

- |            |                     |                   |                     |
|------------|---------------------|-------------------|---------------------|
| 1) Canada  | <u>  <b>F</b>  </u> | 7) Mexico         | <u>  <b>C</b>  </u> |
| 2) Chile   | <u>  <b>M</b>  </u> | 8) Alaska (State) | <u>  <b>H</b>  </u> |
| 3) Britain | <u>  <b>K</b>  </u> | 9) Japan          | <u>  <b>A</b>  </u> |
| 4) Russia  | <u>  <b>E</b>  </u> | 10) Cuba          | <u>  <b>B</b>  </u> |
| 5) Egypt   | <u>  <b>L</b>  </u> | 11) Iraq          | <u>  <b>J</b>  </u> |
| 6) China   | <u>  <b>D</b>  </u> |                   |                     |

- 12) Who was the United States of America at war with during the American Revolution?
- |            |          |
|------------|----------|
| A. Britain | C. Japan |
| B. Egypt   | D. China |
- 13) The state of Alaska is touching which country?
- |           |           |
|-----------|-----------|
| A. France | C. Mexico |
| B. Russia | D. Canada |
- 14) Which country is closest to the state of Florida?
- |           |          |
|-----------|----------|
| A. Japan  | C. Cuba  |
| B. Canada | D. Egypt |
- 15) Alaska is \_\_\_\_\_ of the rest of the United States?
- |          |          |
|----------|----------|
| A. west  | C. north |
| B. south | D. east  |
- 16) If you wanted to see pyramids where should you go?
- |           |            |
|-----------|------------|
| A. China  | C. Egypt   |
| B. Russia | D. Britain |