



Determine which letter best represents the weight.

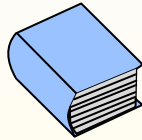
Gram (g)

A gram is about the weight of a paperclip.



Kilogram (kg)

A kilogram is about the weight of a thick book.



Remember:

Kilo means 1,000. So a kilogram is 1,000 grams.

1 Kilogram is also about the same weight as 2 pounds.


Answers

1. _____
2. _____
3. _____
4. _____
5. _____
6. _____
7. _____
8. _____
9. _____



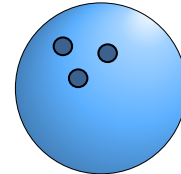
1) Spoon

- A. 25 grams
- B. 3 kilograms
- C. 500 kilograms
- D. 3 grams



2) Apple

- A. 5 kilograms
- B. 200 grams
- C. 5 grams
- D. 200 Kilograms



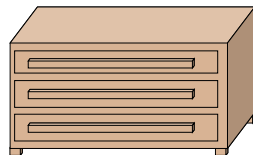
3) Bowling Ball

- A. 50 kilograms
- B. 7 kilograms
- C. 90 kilograms
- D. 200 grams



4) Football

- A. 6 kilograms
- B. 30 kilograms
- C. 500 grams
- D. 5 grams



5) Dresser

- A. 500 kilograms
- B. 20 grams
- C. 350 grams
- D. 70 kilograms



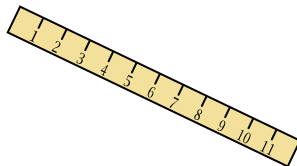
6) Bicycle

- A. 100 kilograms
- B. 100 grams
- C. 15 grams
- D. 15 kilograms




7) Monitor

- A. 500 grams
- B. 8 kilograms
- C. 500 kilograms
- D. 8 grams



8) Ruler

- A. 20 grams
- B. 999 grams
- C. 30 kilograms
- D. 1 gram



9) Car

- A. 15 grams
- B. 2,000 kilograms
- C. 6,000 grams
- D. 2 kilograms



Determine which letter best represents the weight.

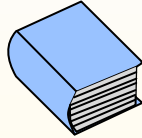
Gram (g)

A gram is about the weight of a paperclip.



Kilogram (kg)

A kilogram is about the weight of a thick book.



Remember:


Kilo means 1,000. So a kilogram is 1,000 grams.

1 Kilogram is also about the same weight as 2 pounds.

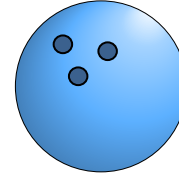
Answers



- 1) Spoon
- A. 25 grams
- B. 3 kilograms
- C. 500 kilograms
- D. 3 grams



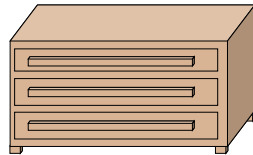
- 2) Apple
- A. 5 kilograms
- B. 200 grams
- C. 5 grams
- D. 200 Kilograms



- 3) Bowling Ball
- A. 50 kilograms
- B. 7 kilograms
- C. 90 kilograms
- D. 200 grams



- 4) Football
- A. 6 kilograms
- B. 30 kilograms
- C. 500 grams
- D. 5 grams



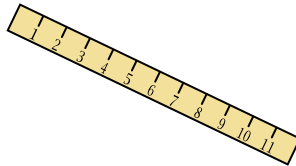
- 5) Dresser
- A. 500 kilograms
- B. 20 grams
- C. 350 grams
- D. 70 kilograms




- 6) Bicycle
- A. 100 kilograms
- B. 100 grams
- C. 15 grams
- D. 15 kilograms



- 7) Monitor
- A. 500 grams
- B. 8 kilograms
- C. 500 kilograms
- D. 8 grams



- 8) Ruler
- A. 20 grams
- B. 999 grams
- C. 30 kilograms
- D. 1 gram



- 9) Car
- A. 15 grams
- B. 2,000 kilograms
- C. 6,000 grams
- D. 2 kilograms

- 1. **A**
- 2. **B**
- 3. **B**
- 4. **C**
- 5. **D**
- 6. **D**
- 7. **B**
- 8. **A**
- 9. **B**