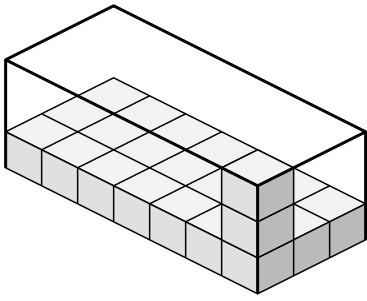


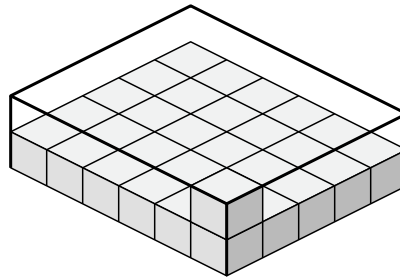


Determine the volume of each box. Each block is 1 cubic unit (u^3).

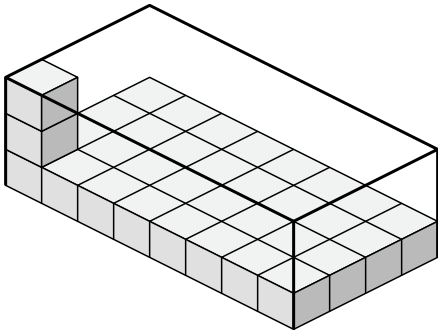
1)



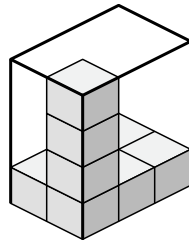
2)



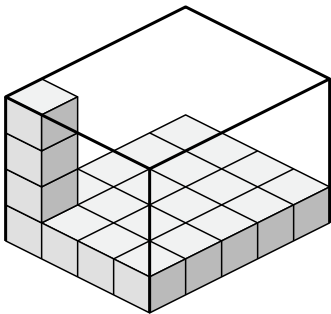
3)



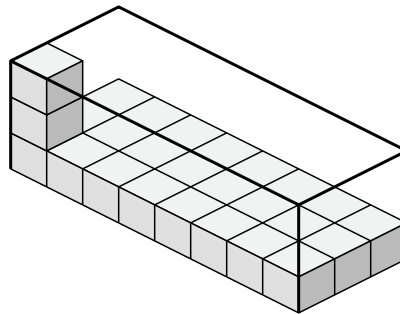
4)



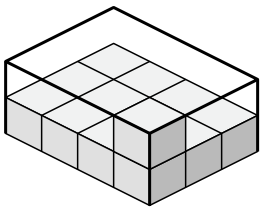
5)



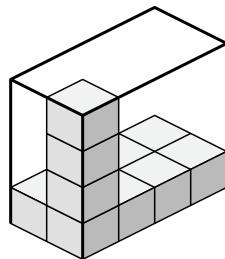
6)



7)



8)



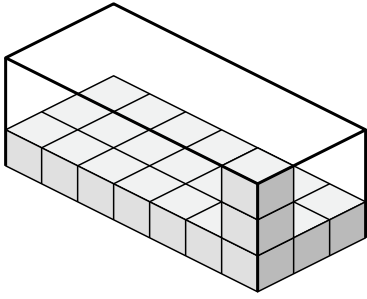
Answers

- 1. _____
- 2. _____
- 3. _____
- 4. _____
- 5. _____
- 6. _____
- 7. _____
- 8. _____

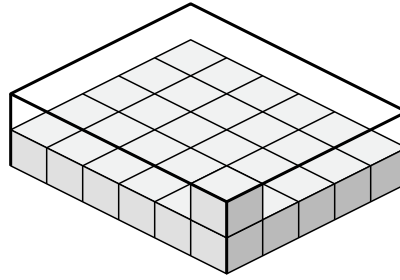


Determine the volume of each box. Each block is 1 cubic unit (u^3).

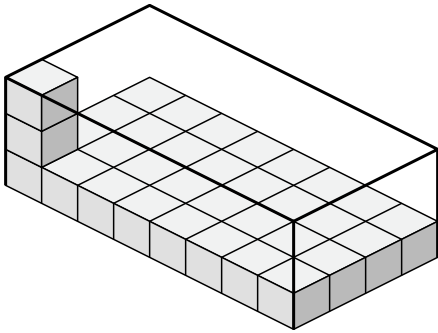
1)



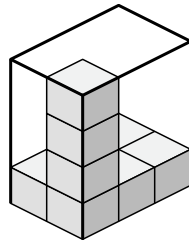
2)



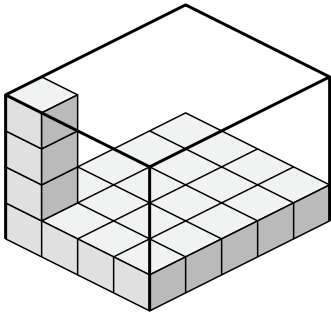
3)



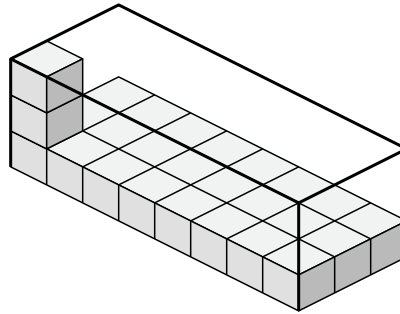
4)



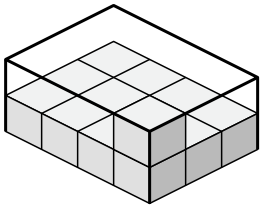
5)



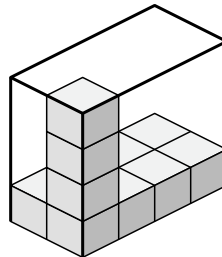
6)



7)



8)



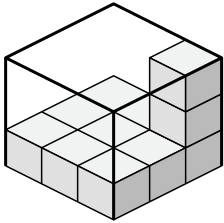
Answers

- 1. 63 u^3
- 2. 60 u^3
- 3. 96 u^3
- 4. 24 u^3
- 5. 80 u^3
- 6. 72 u^3
- 7. 24 u^3
- 8. 32 u^3

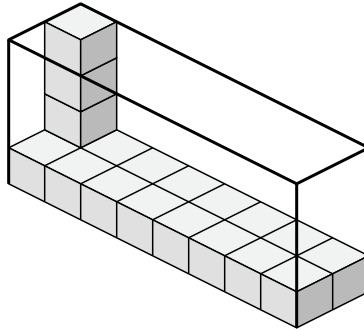


Determine the volume of each box. Each block is 1 cubic unit (u^3).

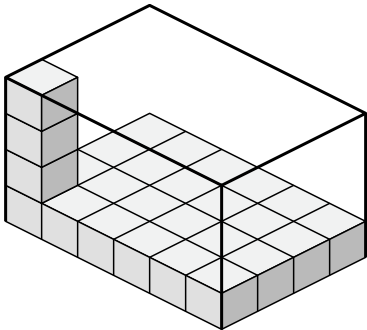
1)



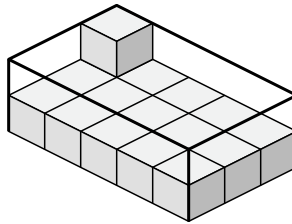
2)



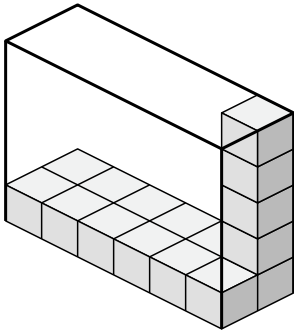
3)



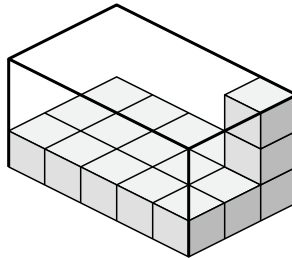
4)



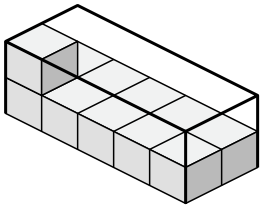
5)



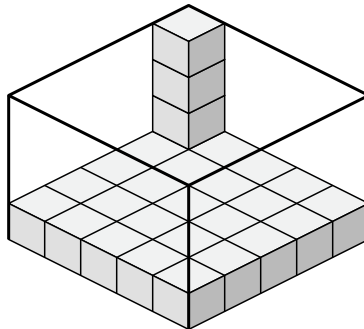
6)



7)



8)



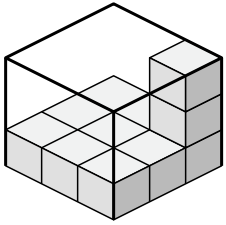
Answers

- 1. _____
- 2. _____
- 3. _____
- 4. _____
- 5. _____
- 6. _____
- 7. _____
- 8. _____

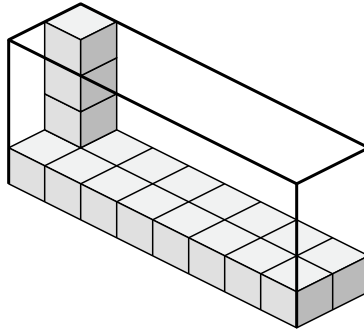


Determine the volume of each box. Each block is 1 cubic unit (u^3).

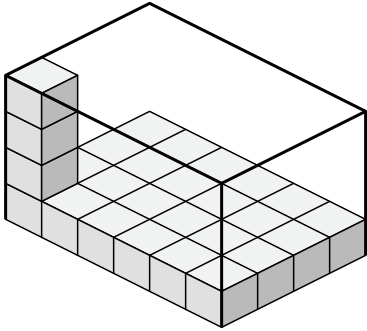
1)



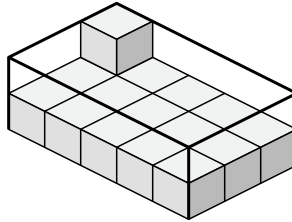
2)



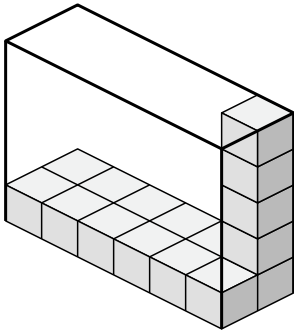
3)



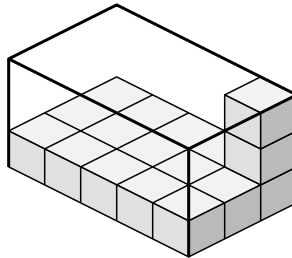
4)



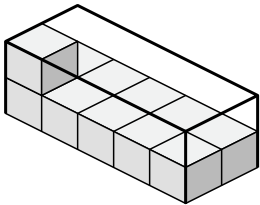
5)



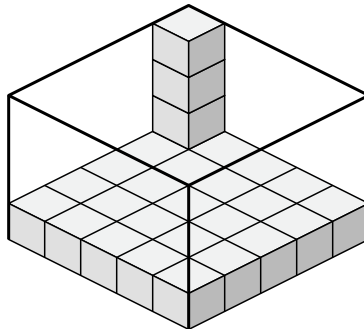
6)



7)



8)



Answers

1. 27 u^3

2. 64 u^3

3. 96 u^3

4. 30 u^3

5. 60 u^3

6. 45 u^3

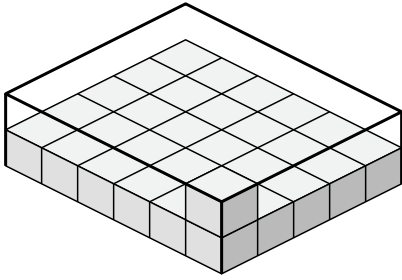
7. 20 u^3

8. 100 u^3

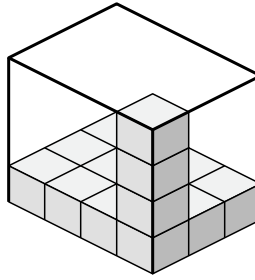


Determine the volume of each box. Each block is 1 cubic unit (u^3).

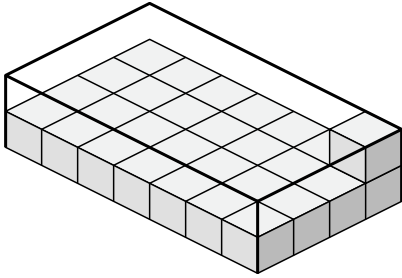
1)



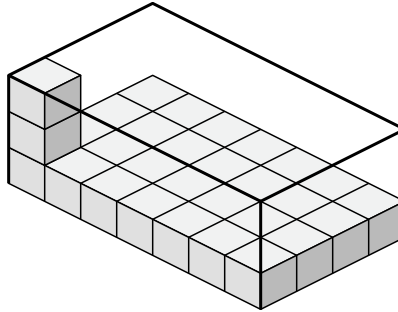
2)



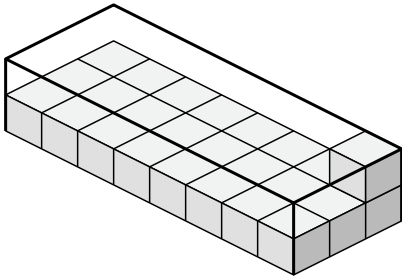
3)



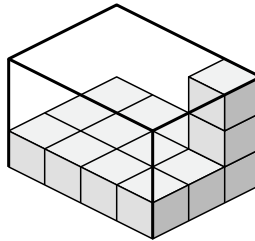
4)



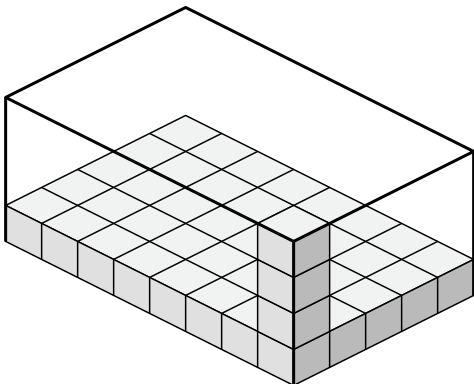
5)



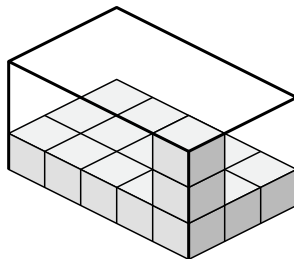
6)



7)



8)



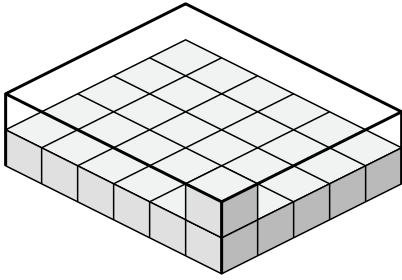
Answers

- 1. _____
- 2. _____
- 3. _____
- 4. _____
- 5. _____
- 6. _____
- 7. _____
- 8. _____

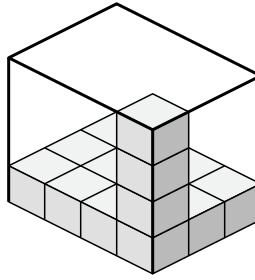


Determine the volume of each box. Each block is 1 cubic unit (u^3).

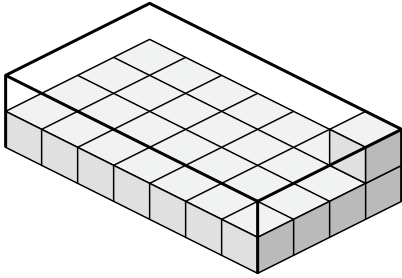
1)



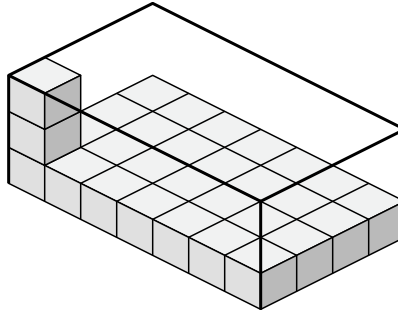
2)



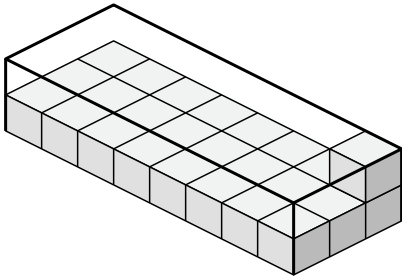
3)



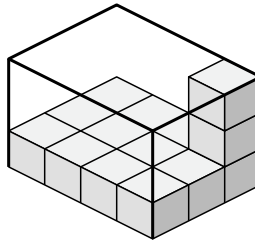
4)



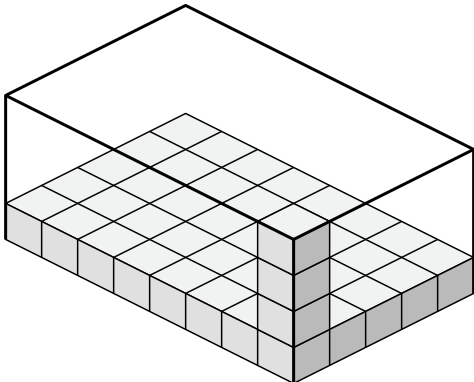
5)



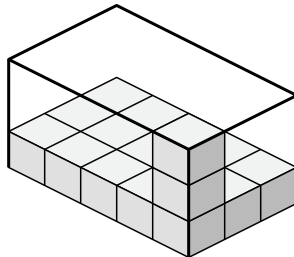
6)



7)



8)



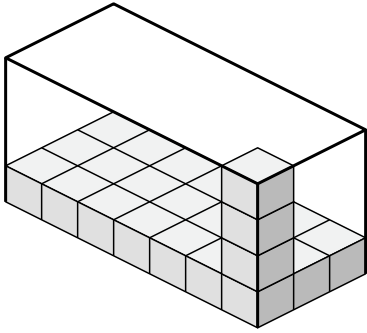
Answers

- 1. 60 u^3
- 2. 48 u^3
- 3. 56 u^3
- 4. 84 u^3
- 5. 48 u^3
- 6. 36 u^3
- 7. 160 u^3
- 8. 45 u^3

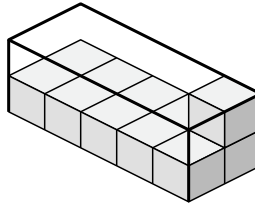


Determine the volume of each box. Each block is 1 cubic unit (u^3).

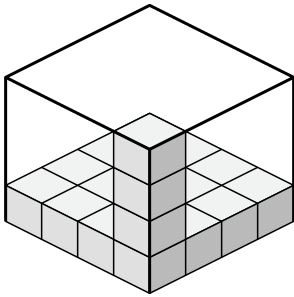
1)



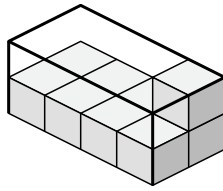
2)



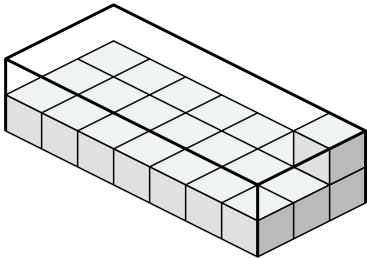
3)



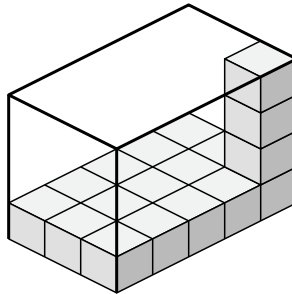
4)



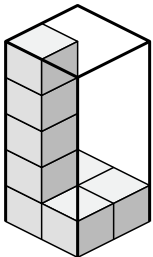
5)



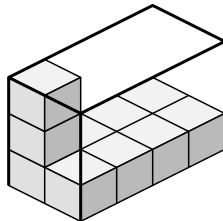
6)



7)



8)



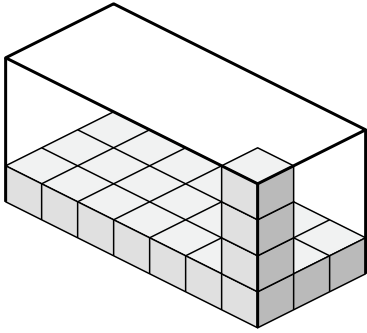
Answers

- 1. _____
- 2. _____
- 3. _____
- 4. _____
- 5. _____
- 6. _____
- 7. _____
- 8. _____

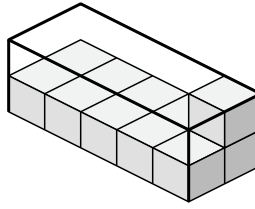


Determine the volume of each box. Each block is 1 cubic unit (u^3).

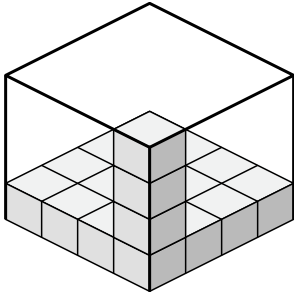
1)



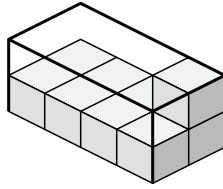
2)



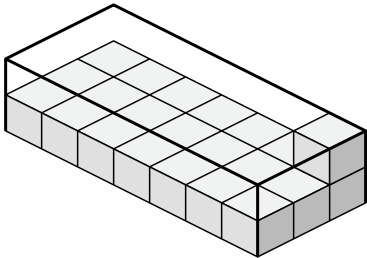
3)



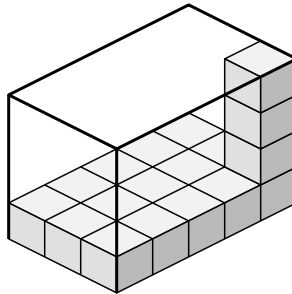
4)



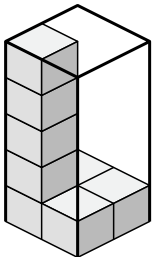
5)



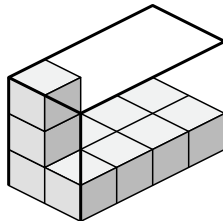
6)



7)



8)



Answers

1. 84 u^3

2. 20 u^3

3. 64 u^3

4. 16 u^3

5. 42 u^3

6. 60 u^3

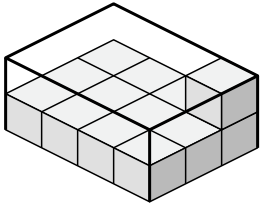
7. 20 u^3

8. 24 u^3

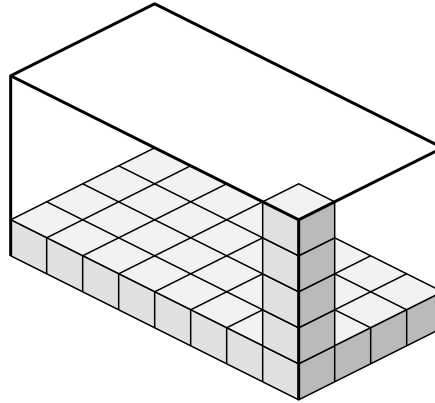


Determine the volume of each box. Each block is 1 cubic unit (u^3).

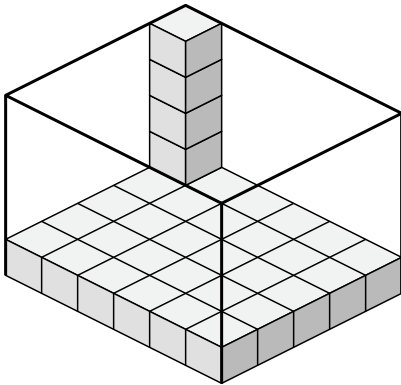
1)



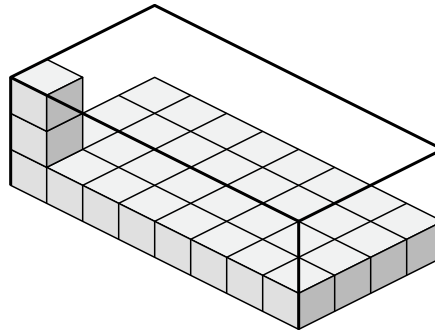
2)



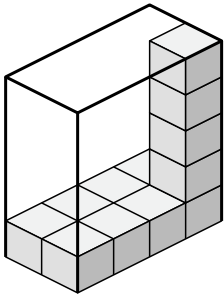
3)



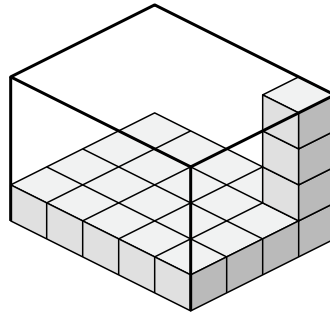
4)



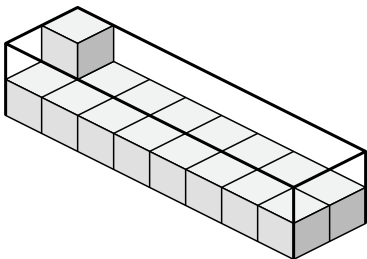
5)



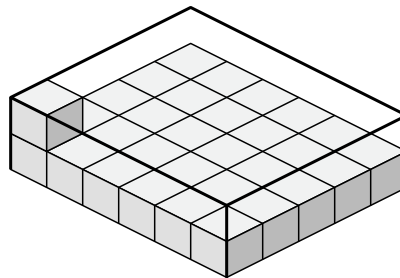
6)



7)



8)



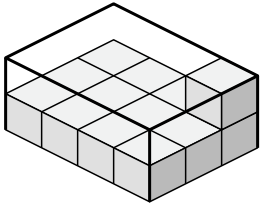
Answers

- 1. _____
- 2. _____
- 3. _____
- 4. _____
- 5. _____
- 6. _____
- 7. _____
- 8. _____

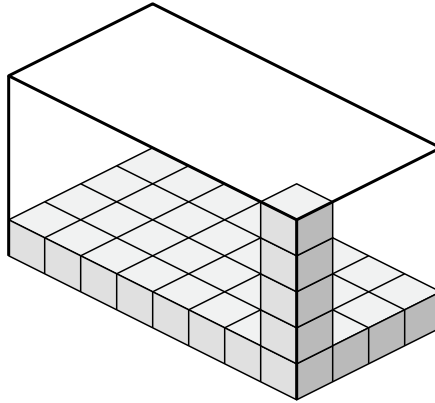


Determine the volume of each box. Each block is 1 cubic unit (u^3).

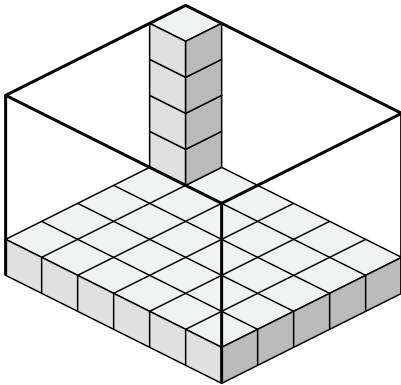
1)



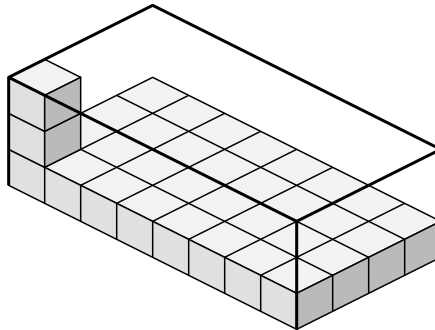
2)



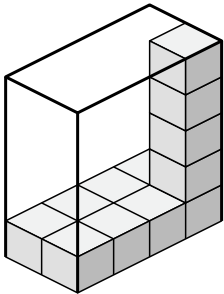
3)



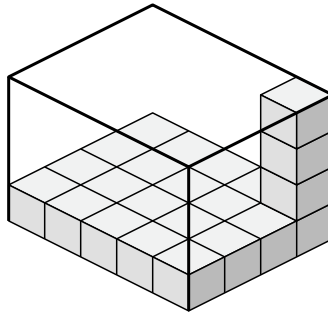
4)



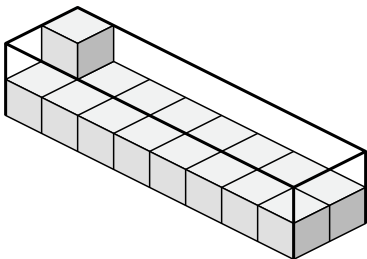
5)



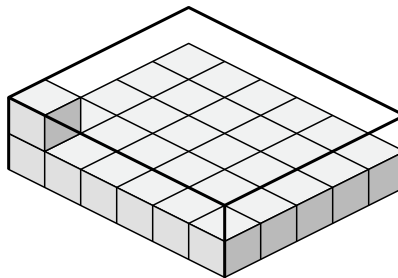
6)



7)



8)



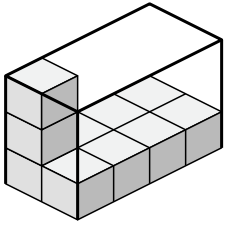
Answers

- 1. 24 u^3
- 2. 160 u^3
- 3. 150 u^3
- 4. 96 u^3
- 5. 40 u^3
- 6. 80 u^3
- 7. 32 u^3
- 8. 60 u^3

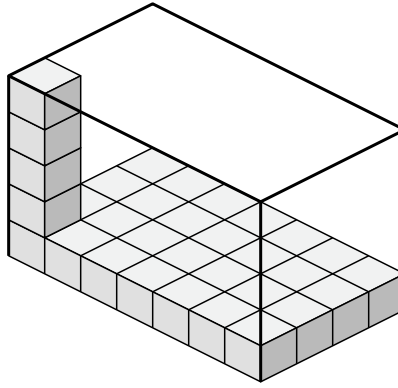


Determine the volume of each box. Each block is 1 cubic unit (u^3).

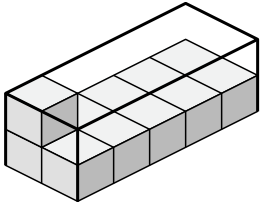
1)



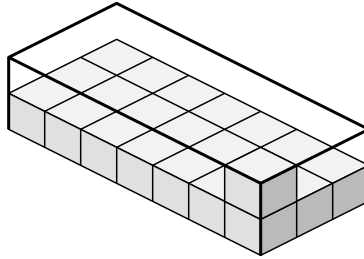
2)



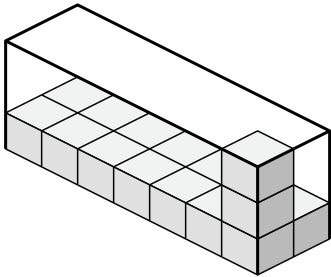
3)



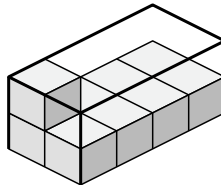
4)



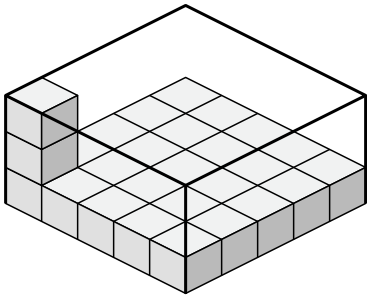
5)



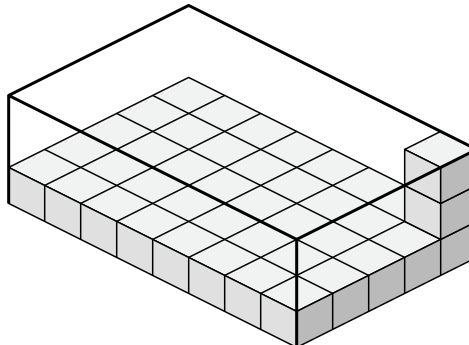
6)



7)



8)



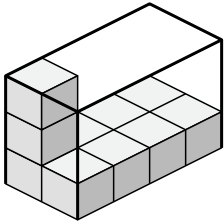
Answers

- 1. _____
- 2. _____
- 3. _____
- 4. _____
- 5. _____
- 6. _____
- 7. _____
- 8. _____

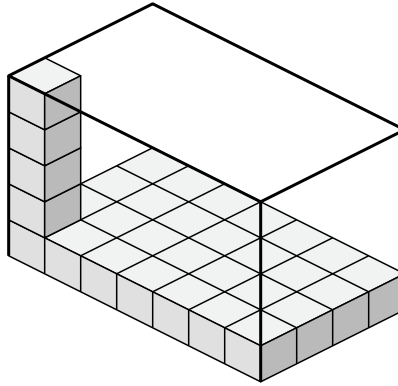


Determine the volume of each box. Each block is 1 cubic unit (u^3).

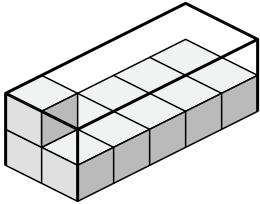
1)



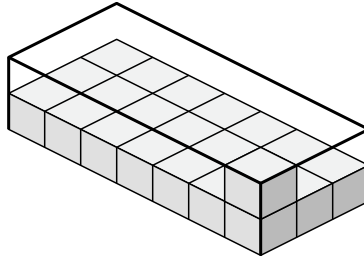
2)



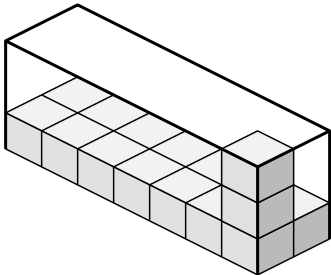
3)



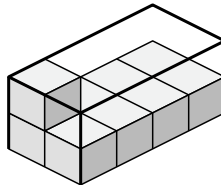
4)



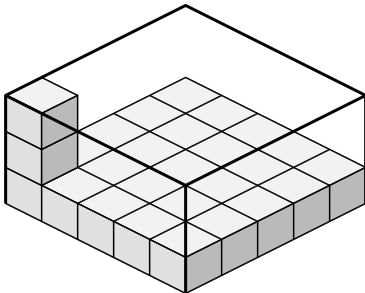
5)



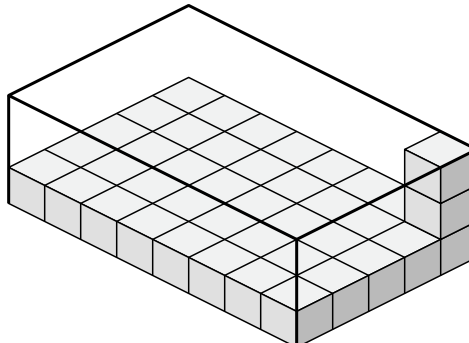
6)



7)



8)



Answers

1. 24 u^3

2. 140 u^3

3. 20 u^3

4. 42 u^3

5. 42 u^3

6. 16 u^3

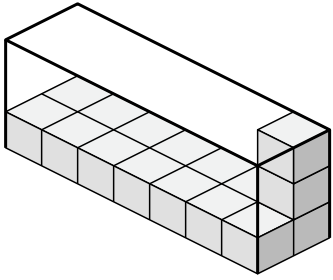
7. 75 u^3

8. 120 u^3

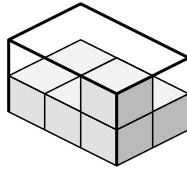


Determine the volume of each box. Each block is 1 cubic unit (u^3).

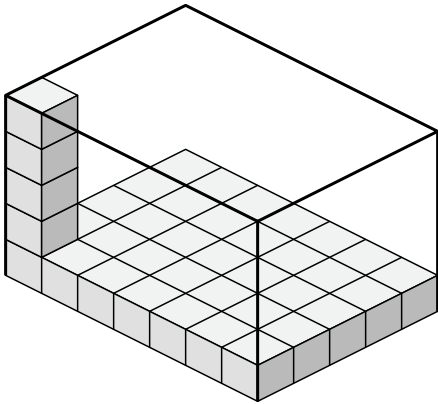
1)



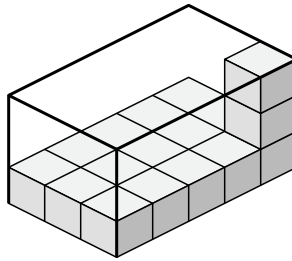
2)



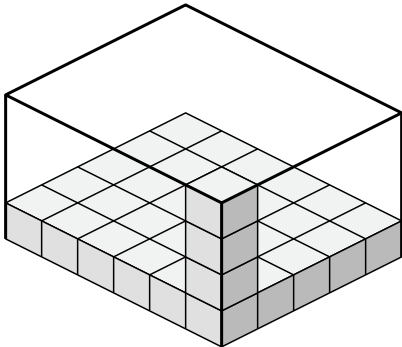
3)



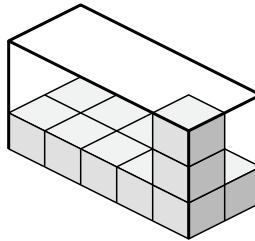
4)



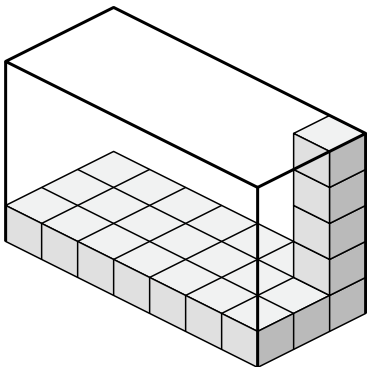
5)



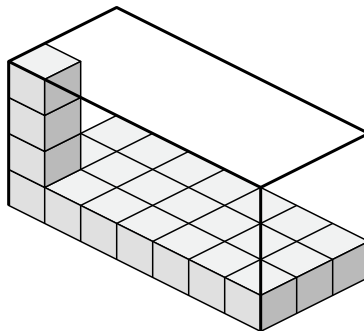
6)



7)



8)



Answers

1. _____

2. _____

3. _____

4. _____

5. _____

6. _____

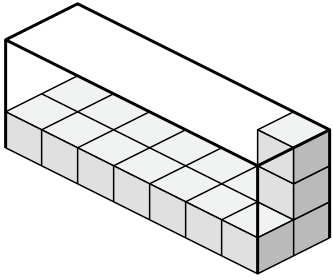
7. _____

8. _____

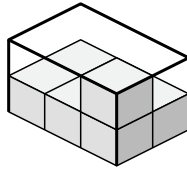


Determine the volume of each box. Each block is 1 cubic unit (u^3).

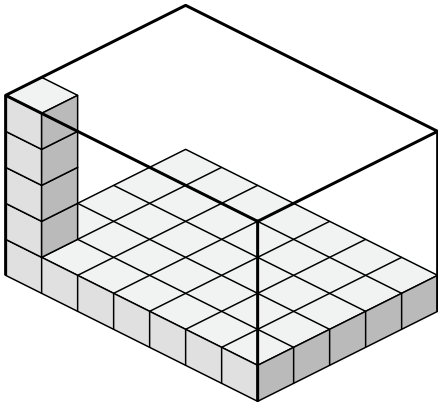
1)



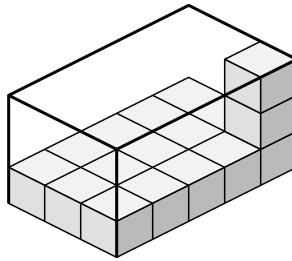
2)



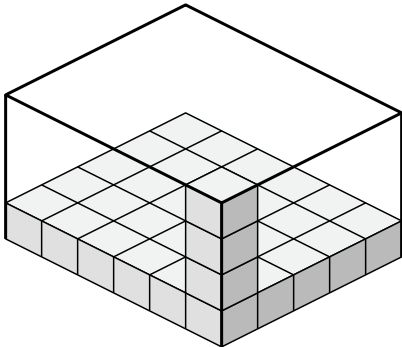
3)



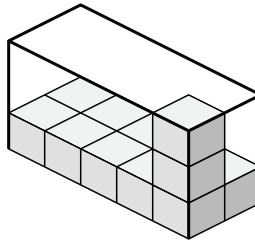
4)



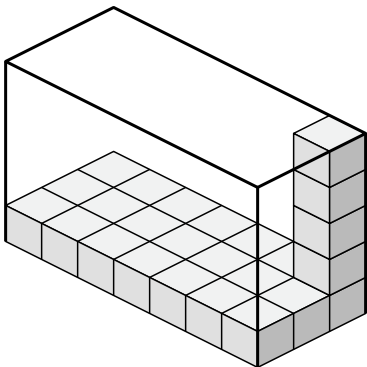
5)



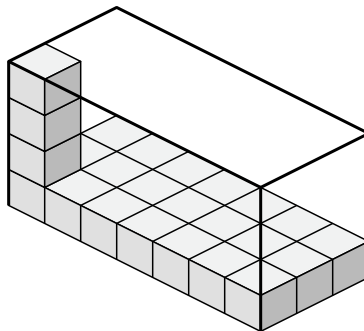
6)



7)



8)



Answers

1. 42 u^3

2. 12 u^3

3. 175 u^3

4. 45 u^3

5. 120 u^3

6. 30 u^3

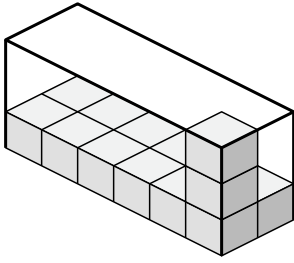
7. 105 u^3

8. 84 u^3

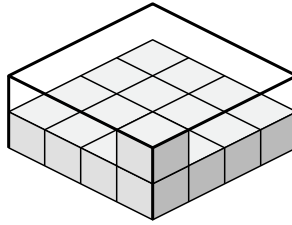


Determine the volume of each box. Each block is 1 cubic unit (u^3).

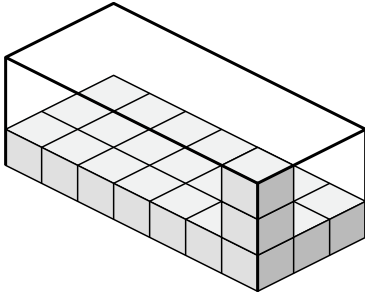
1)



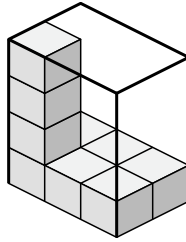
2)



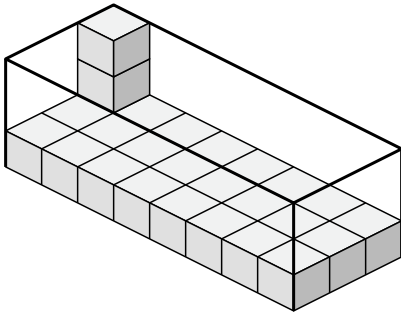
3)



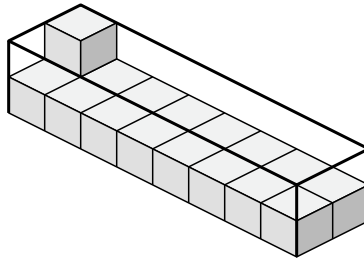
4)



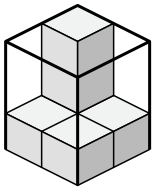
5)



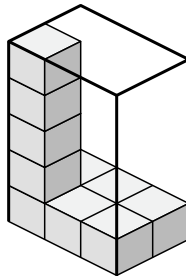
6)



7)



8)



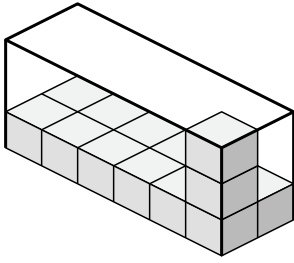
Answers

- 1. _____
- 2. _____
- 3. _____
- 4. _____
- 5. _____
- 6. _____
- 7. _____
- 8. _____

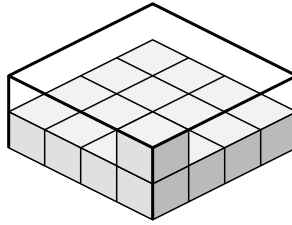


Determine the volume of each box. Each block is 1 cubic unit (u^3).

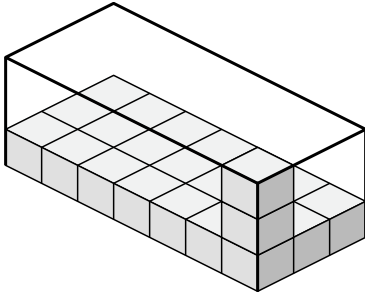
1)



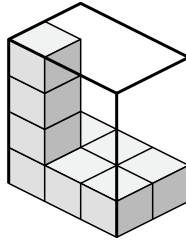
2)



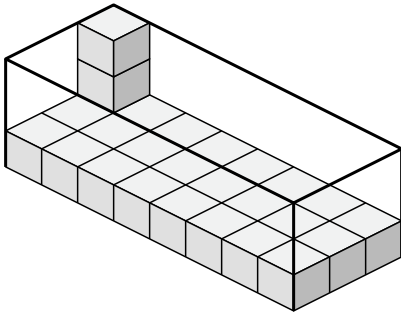
3)



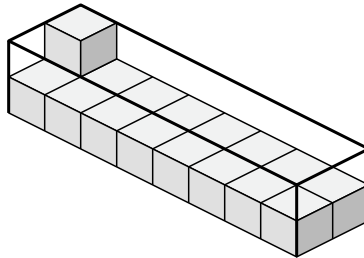
4)



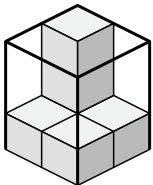
5)



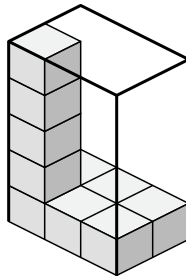
6)



7)



8)



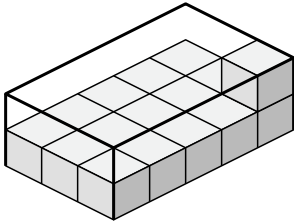
Answers

- 1. 36 u^3
- 2. 32 u^3
- 3. 63 u^3
- 4. 24 u^3
- 5. 72 u^3
- 6. 32 u^3
- 7. 12 u^3
- 8. 30 u^3

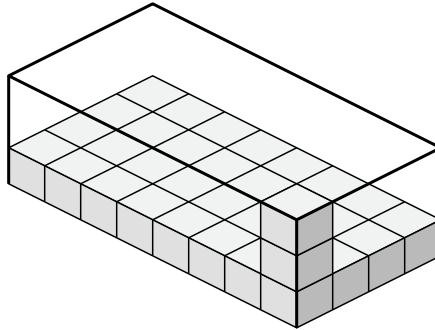


Determine the volume of each box. Each block is 1 cubic unit (u^3).

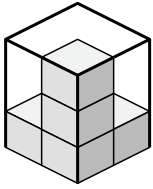
1)



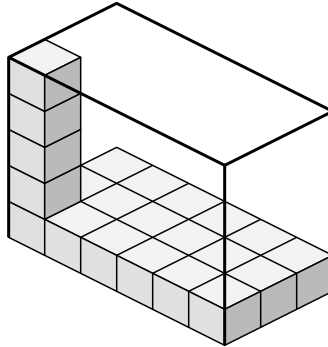
2)



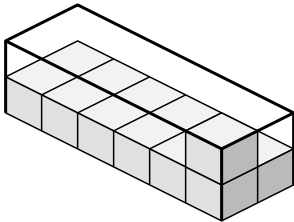
3)



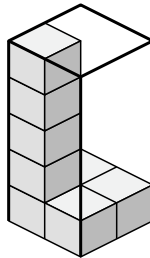
4)



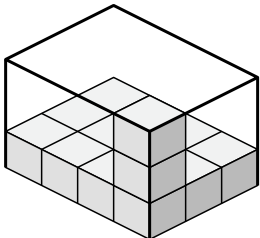
5)



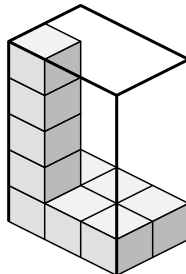
6)



7)



8)



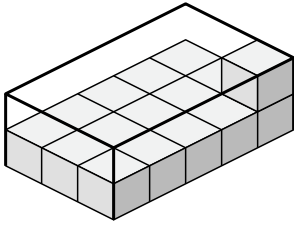
Answers

- 1. _____
- 2. _____
- 3. _____
- 4. _____
- 5. _____
- 6. _____
- 7. _____
- 8. _____

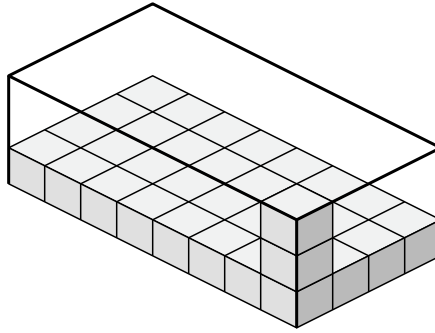


Determine the volume of each box. Each block is 1 cubic unit (u^3).

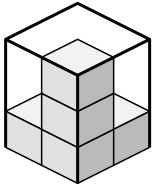
1)



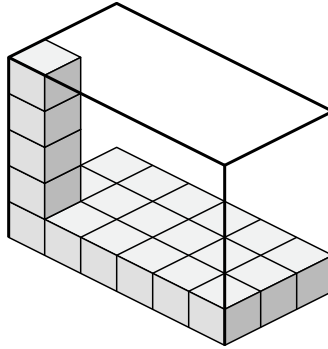
2)



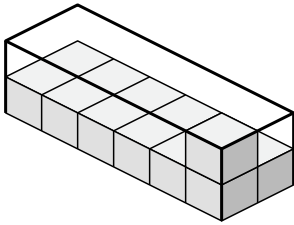
3)



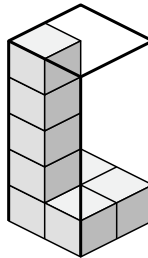
4)



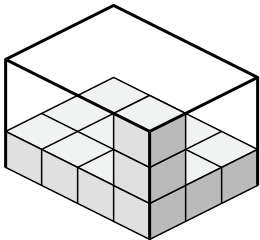
5)



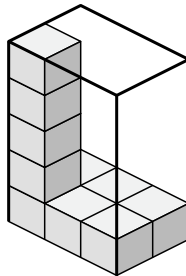
6)



7)



8)



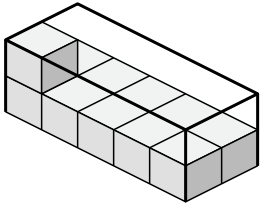
Answers

- 1. 30 u^3
- 2. 96 u^3
- 3. 12 u^3
- 4. 90 u^3
- 5. 24 u^3
- 6. 20 u^3
- 7. 36 u^3
- 8. 30 u^3

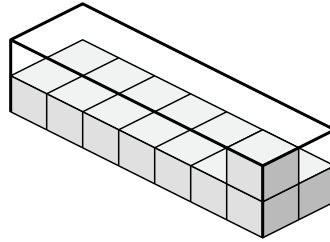


Determine the volume of each box. Each block is 1 cubic unit (u^3).

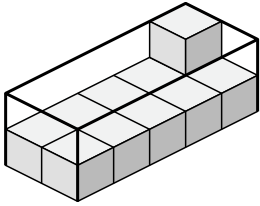
1)



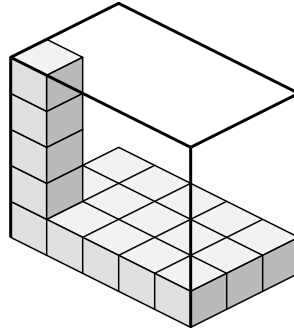
2)



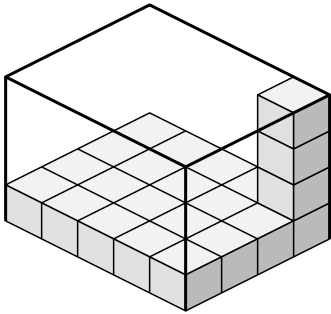
3)



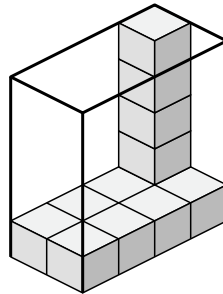
4)



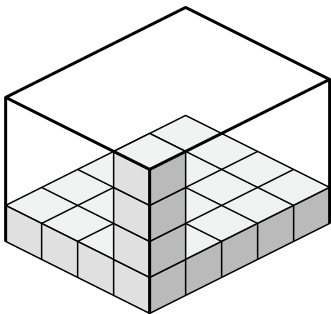
5)



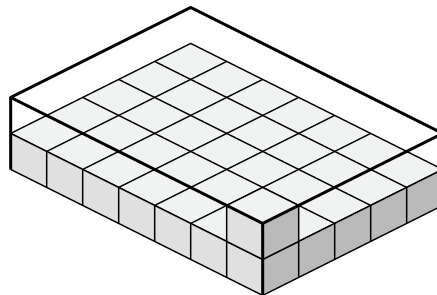
6)



7)



8)



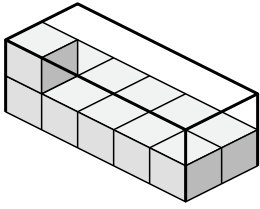
Answers

- 1. _____
- 2. _____
- 3. _____
- 4. _____
- 5. _____
- 6. _____
- 7. _____
- 8. _____

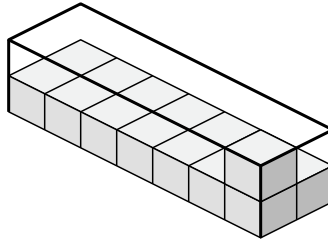


Determine the volume of each box. Each block is 1 cubic unit (u^3).

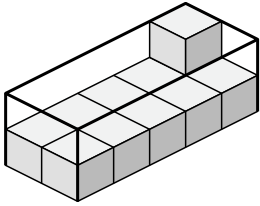
1)



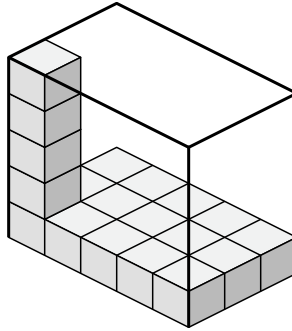
2)



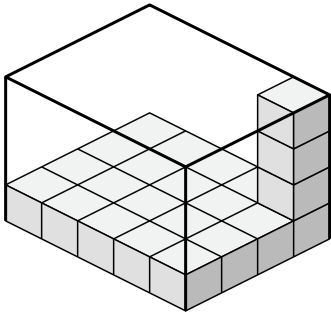
3)



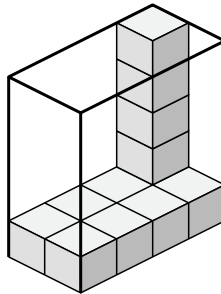
4)



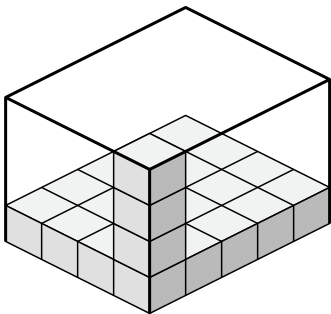
5)



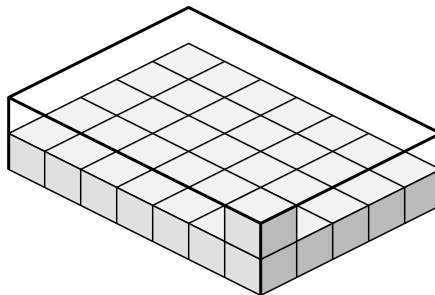
6)



7)



8)



Answers

1. 20 u^3

2. 28 u^3

3. 20 u^3

4. 75 u^3

5. 80 u^3

6. 40 u^3

7. 80 u^3

8. 70 u^3