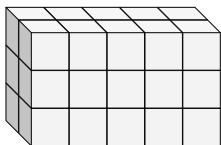


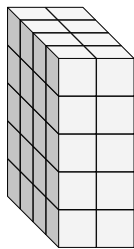


Find the length, width and height of the rectangular prism. Then find the volume.

Ex)



1)



Answers

Ex. 2 5 3 30

1. \_\_\_\_\_

2. \_\_\_\_\_

3. \_\_\_\_\_

4. \_\_\_\_\_

5. \_\_\_\_\_

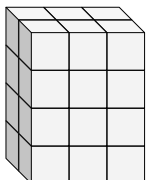
6. \_\_\_\_\_

7. \_\_\_\_\_

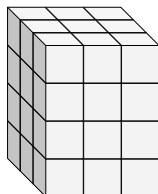
8. \_\_\_\_\_

9. \_\_\_\_\_

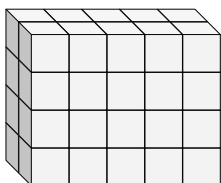
2)



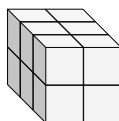
3)



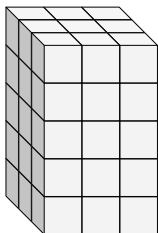
4)



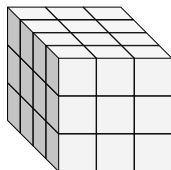
5)



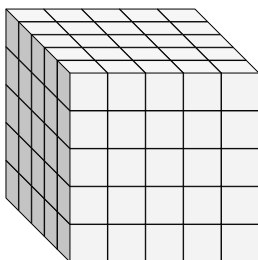
6)



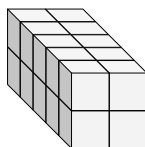
7)



8)



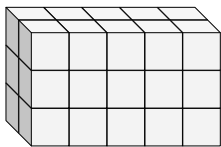
9)



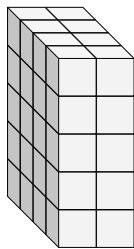


Find the length, width and height of the rectangular prism. Then find the volume.

Ex)



1)



**Answers**

Ex. 2 5 3 30

1. 4 2 5 40

2. 2 3 4 24

3. 3 3 4 36

4. 2 5 4 40

5. 3 2 2 12

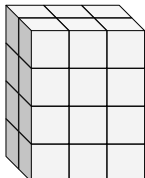
6. 3 3 5 45

7. 4 3 3 36

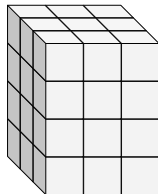
8. 5 5 5 125

9. 5 2 2 20

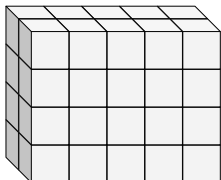
2)



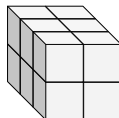
3)



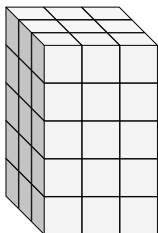
4)



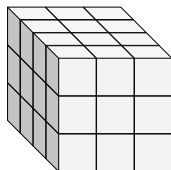
5)



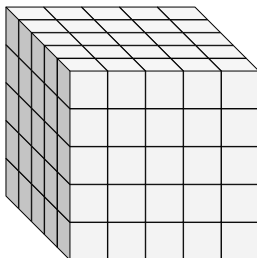
6)



7)



8)



9)

