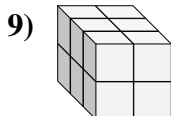
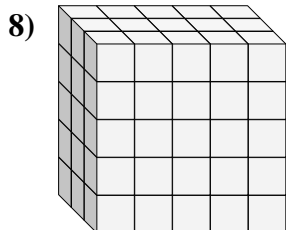
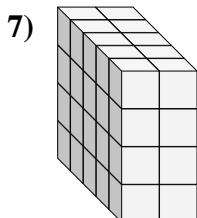
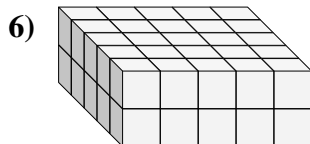
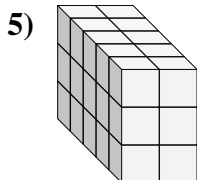
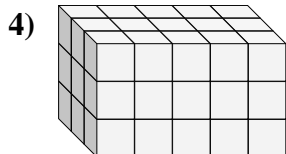
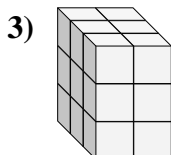
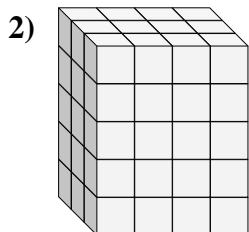
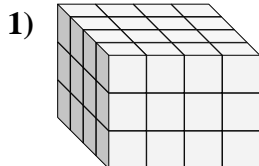
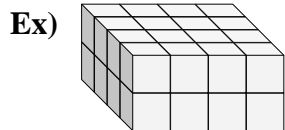




Find the length, width and height of the rectangular prism. Then find the volume.



Answers

D W H V

Ex. 4 4 2 32

1. \_\_\_\_\_

2. \_\_\_\_\_

3. \_\_\_\_\_

4. \_\_\_\_\_

5. \_\_\_\_\_

6. \_\_\_\_\_

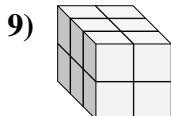
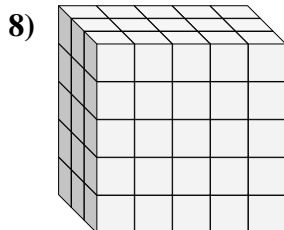
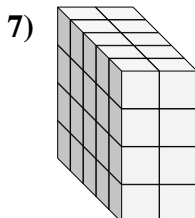
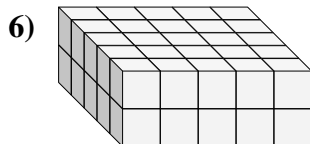
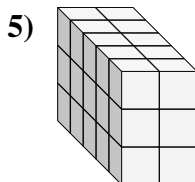
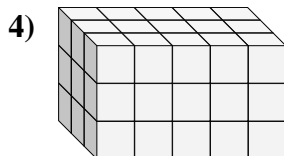
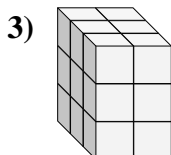
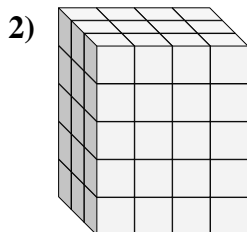
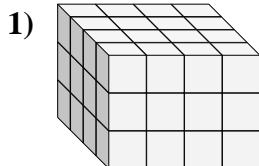
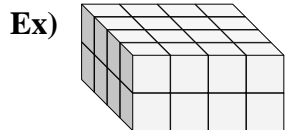
7. \_\_\_\_\_

8. \_\_\_\_\_

9. \_\_\_\_\_



Find the length, width and height of the rectangular prism. Then find the volume.

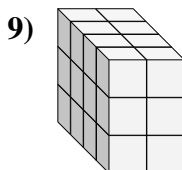
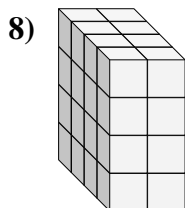
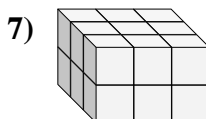
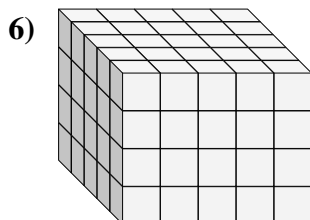
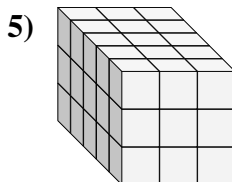
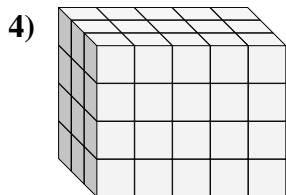
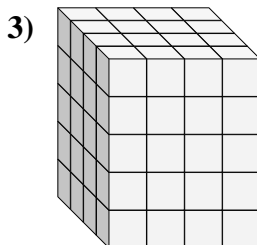
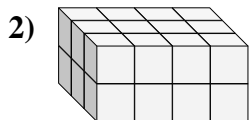
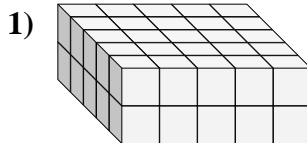
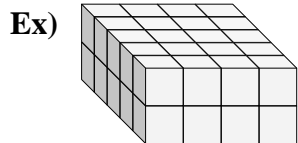


Answers

	D	W	H	V
Ex.	4	4	2	32
1.	4	4	3	48
2.	3	4	5	60
3.	3	2	3	18
4.	3	5	3	45
5.	5	2	3	30
6.	5	5	2	50
7.	5	2	4	40
8.	3	5	5	75
9.	3	2	2	12



Find the length, width and height of the rectangular prism. Then find the volume.



Answers

D W H V

Ex. 5 4 2 40

1. \_\_\_\_\_

2. \_\_\_\_\_

3. \_\_\_\_\_

4. \_\_\_\_\_

5. \_\_\_\_\_

6. \_\_\_\_\_

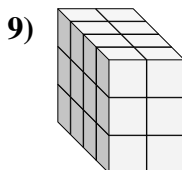
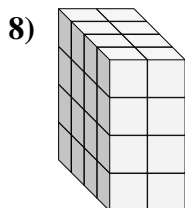
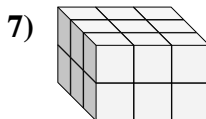
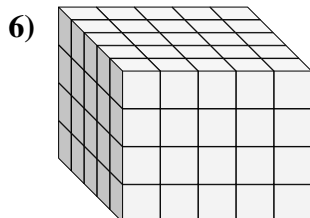
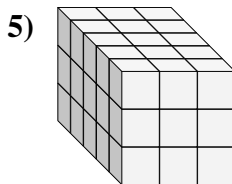
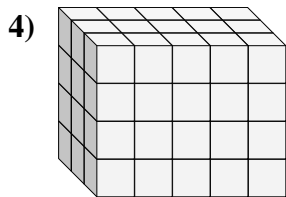
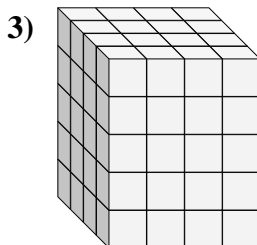
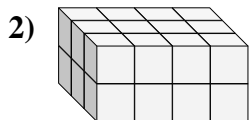
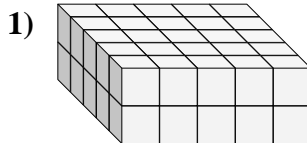
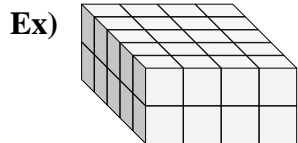
7. \_\_\_\_\_

8. \_\_\_\_\_

9. \_\_\_\_\_



Find the length, width and height of the rectangular prism. Then find the volume.

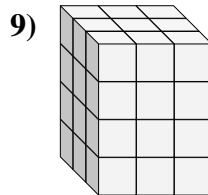
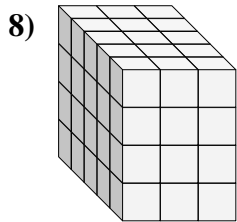
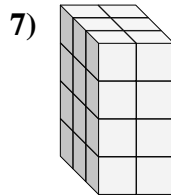
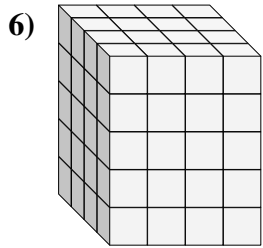
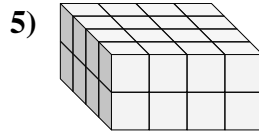
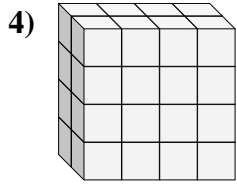
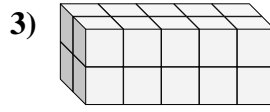
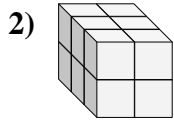
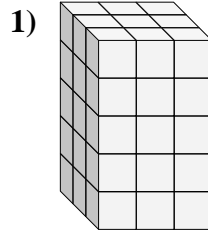
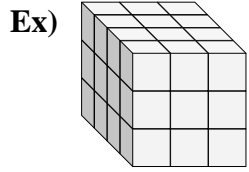


Answers

	D	W	H	V
Ex.	5	4	2	40
1.	5	5	2	50
2.	3	4	2	24
3.	4	4	5	80
4.	3	5	4	60
5.	5	3	3	45
6.	5	5	4	100
7.	3	3	2	18
8.	4	2	4	32
9.	4	2	3	24



Find the length, width and height of the rectangular prism. Then find the volume.



Answers

D W H V

Ex. 4 3 3 36

1. \_\_\_\_\_

2. \_\_\_\_\_

3. \_\_\_\_\_

4. \_\_\_\_\_

5. \_\_\_\_\_

6. \_\_\_\_\_

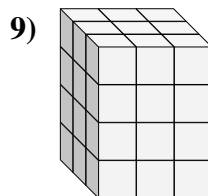
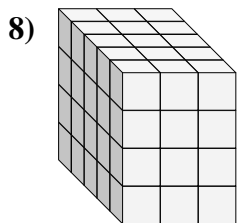
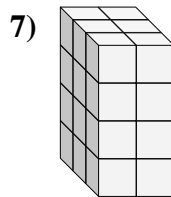
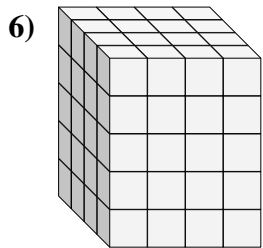
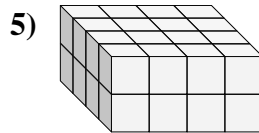
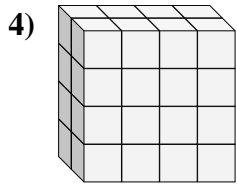
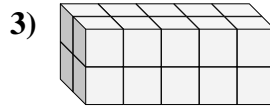
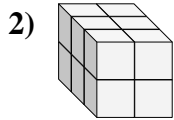
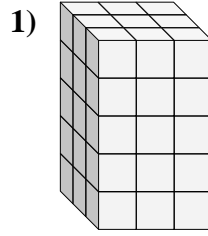
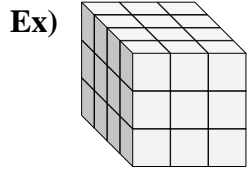
7. \_\_\_\_\_

8. \_\_\_\_\_

9. \_\_\_\_\_



Find the length, width and height of the rectangular prism. Then find the volume.

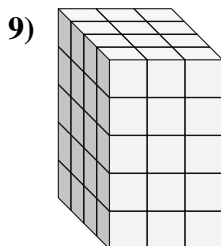
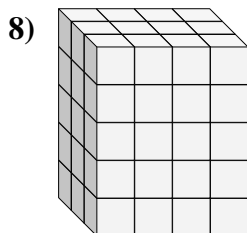
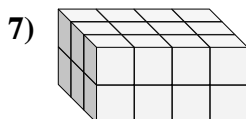
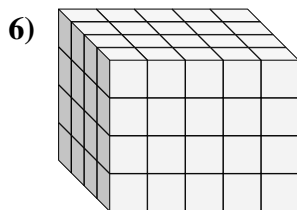
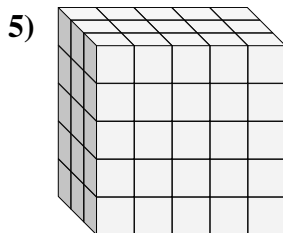
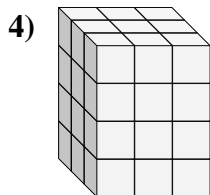
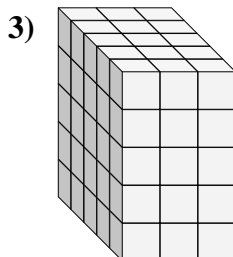
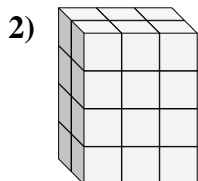
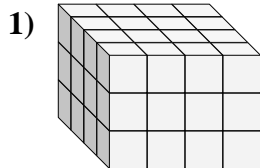
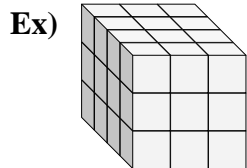


Answers

	D	W	H	V
Ex.	4	3	3	36
1.	3	3	5	45
2.	3	2	2	12
3.	2	5	2	20
4.	2	4	4	32
5.	4	4	2	32
6.	4	4	5	80
7.	3	2	4	24
8.	5	3	4	60
9.	3	3	4	36



Find the length, width and height of the rectangular prism. Then find the volume.



Answers

D W H V

Ex. 4 3 3 36

1. \_\_\_\_\_

2. \_\_\_\_\_

3. \_\_\_\_\_

4. \_\_\_\_\_

5. \_\_\_\_\_

6. \_\_\_\_\_

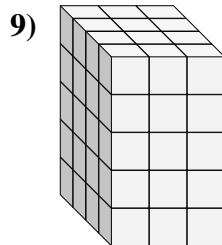
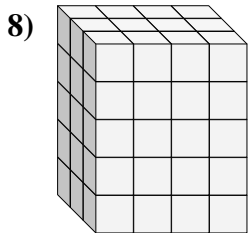
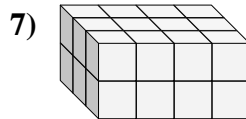
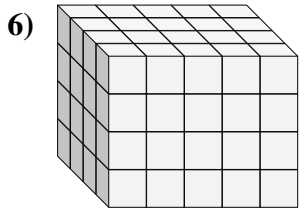
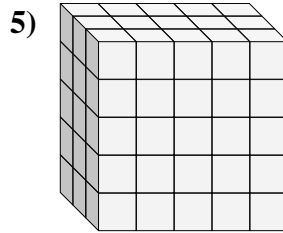
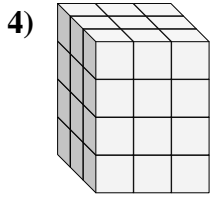
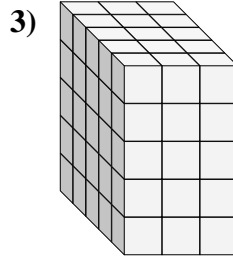
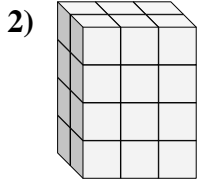
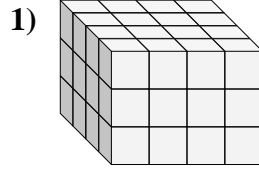
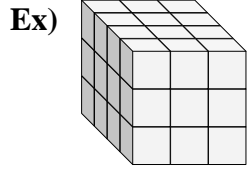
7. \_\_\_\_\_

8. \_\_\_\_\_

9. \_\_\_\_\_



Find the length, width and height of the rectangular prism. Then find the volume.



Answers

D W H V

Ex. 4 3 3 36

1. 4 4 3 48

2. 2 3 4 24

3. 5 3 5 75

4. 3 3 4 36

5. 3 5 5 75

6. 4 5 4 80

7. 3 4 2 24

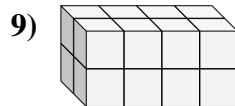
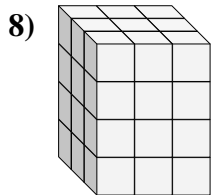
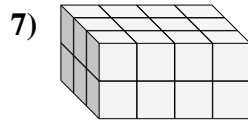
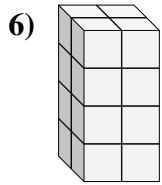
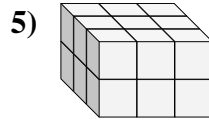
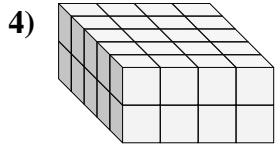
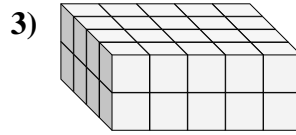
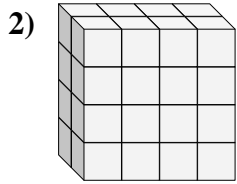
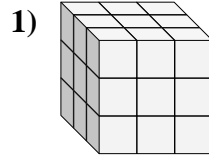
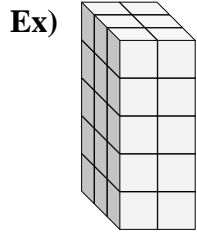
8. 3 4 5 60

9. 4 3 5 60





Find the length, width and height of the rectangular prism. Then find the volume.



Answers

D W H V

Ex. 3 2 5 30

1. \_\_\_\_\_

2. \_\_\_\_\_

3. \_\_\_\_\_

4. \_\_\_\_\_

5. \_\_\_\_\_

6. \_\_\_\_\_

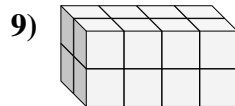
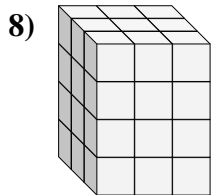
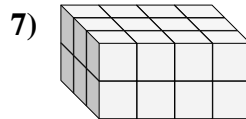
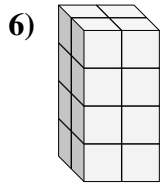
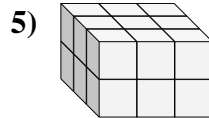
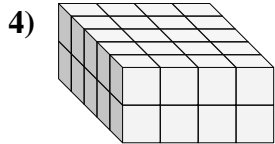
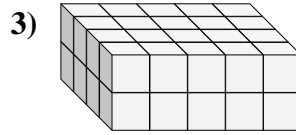
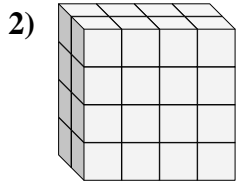
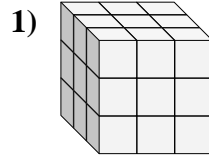
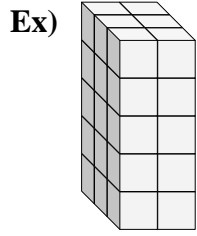
7. \_\_\_\_\_

8. \_\_\_\_\_

9. \_\_\_\_\_



Find the length, width and height of the rectangular prism. Then find the volume.

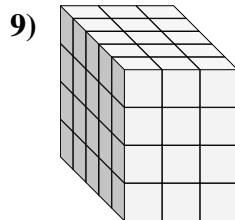
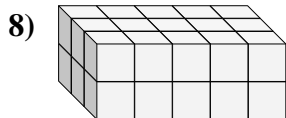
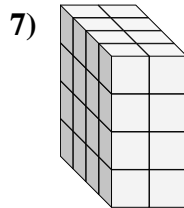
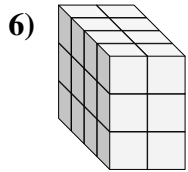
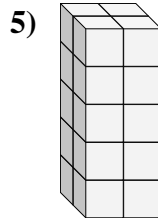
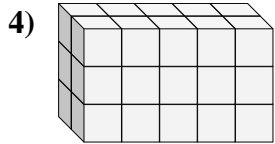
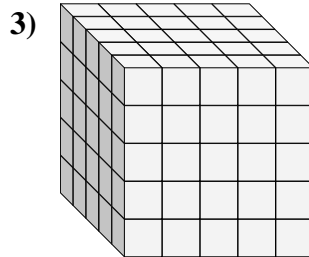
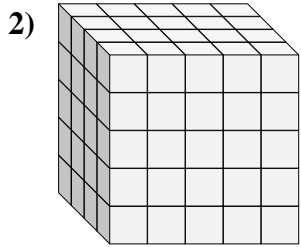
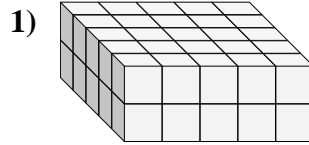
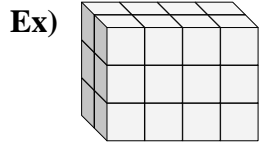


Answers

	D	W	H	V
Ex.	3	2	5	30
1.	3	3	3	27
2.	2	4	4	32
3.	4	5	2	40
4.	5	4	2	40
5.	3	3	2	18
6.	2	2	4	16
7.	3	4	2	24
8.	3	3	4	36
9.	2	4	2	16



Find the length, width and height of the rectangular prism. Then find the volume.



Answers

D W H V

Ex. 2 4 3 24

1. \_\_\_\_\_

2. \_\_\_\_\_

3. \_\_\_\_\_

4. \_\_\_\_\_

5. \_\_\_\_\_

6. \_\_\_\_\_

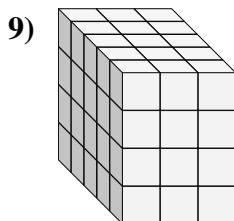
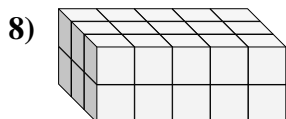
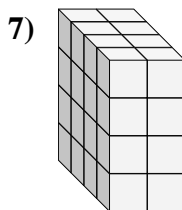
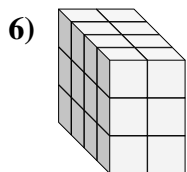
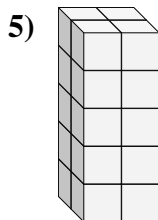
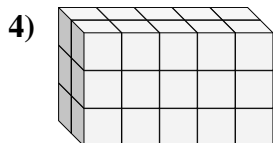
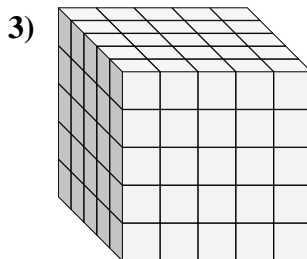
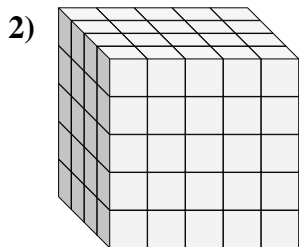
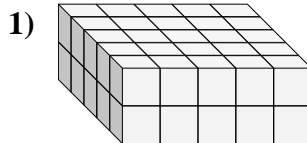
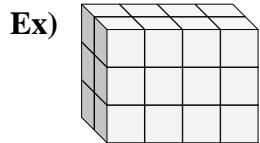
7. \_\_\_\_\_

8. \_\_\_\_\_

9. \_\_\_\_\_



Find the length, width and height of the rectangular prism. Then find the volume.

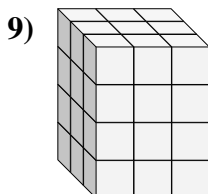
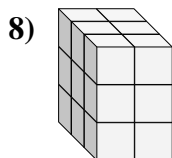
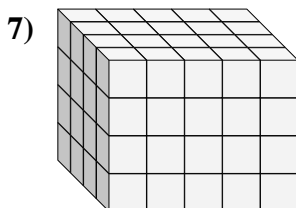
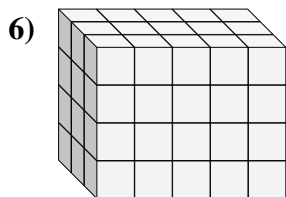
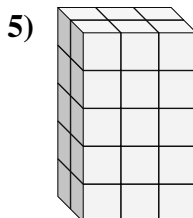
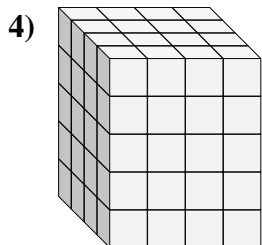
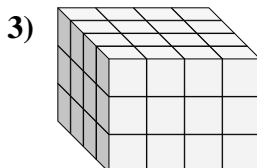
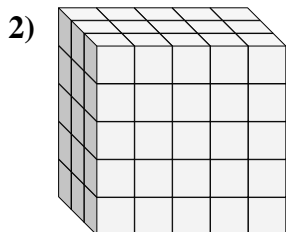
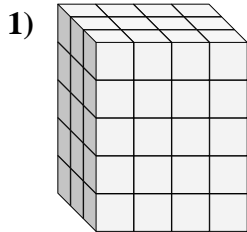
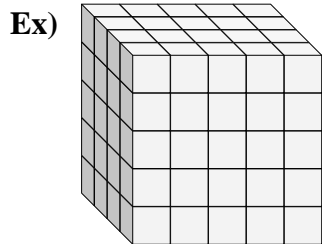


**Answers**

	D	W	H	V
Ex.	<u>2</u>	<u>4</u>	<u>3</u>	<u>24</u>
1.	<u>5</u>	<u>5</u>	<u>2</u>	<u>50</u>
2.	<u>4</u>	<u>5</u>	<u>5</u>	<u>100</u>
3.	<u>5</u>	<u>5</u>	<u>5</u>	<u>125</u>
4.	<u>2</u>	<u>5</u>	<u>3</u>	<u>30</u>
5.	<u>2</u>	<u>2</u>	<u>5</u>	<u>20</u>
6.	<u>4</u>	<u>2</u>	<u>3</u>	<u>24</u>
7.	<u>4</u>	<u>2</u>	<u>4</u>	<u>32</u>
8.	<u>3</u>	<u>5</u>	<u>2</u>	<u>30</u>
9.	<u>5</u>	<u>3</u>	<u>4</u>	<u>60</u>



Find the length, width and height of the rectangular prism. Then find the volume.



Answers

D W H V

Ex. 4 5 5 100

1. \_\_\_\_\_

2. \_\_\_\_\_

3. \_\_\_\_\_

4. \_\_\_\_\_

5. \_\_\_\_\_

6. \_\_\_\_\_

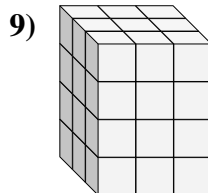
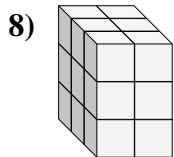
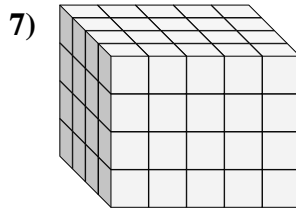
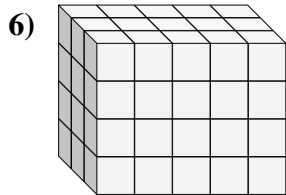
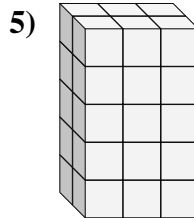
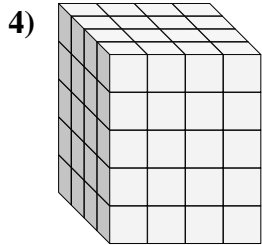
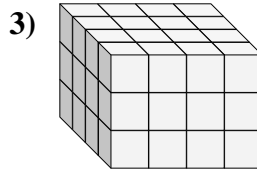
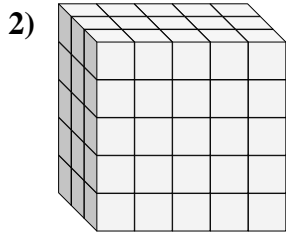
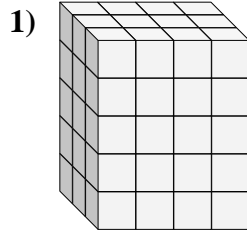
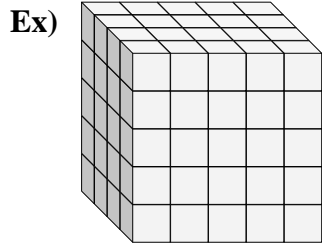
7. \_\_\_\_\_

8. \_\_\_\_\_

9. \_\_\_\_\_



Find the length, width and height of the rectangular prism. Then find the volume.

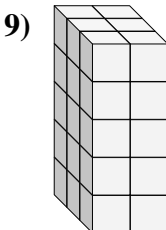
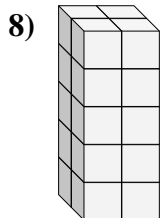
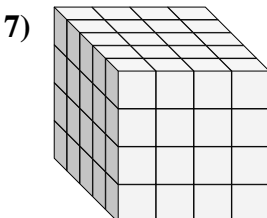
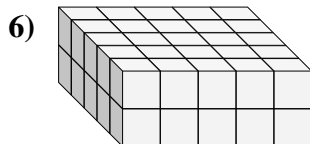
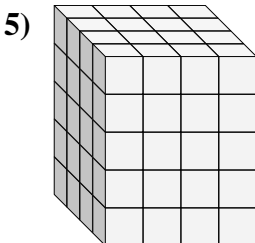
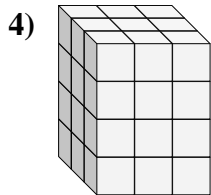
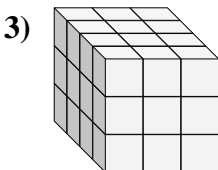
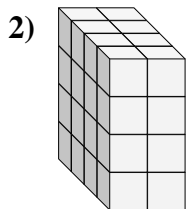
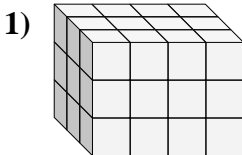
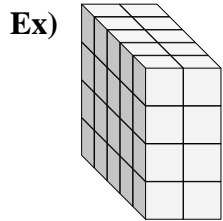


Answers

	D	W	H	V
Ex.	<u>4</u>	<u>5</u>	<u>5</u>	<u>100</u>
1.	<u>3</u>	<u>4</u>	<u>5</u>	<u>60</u>
2.	<u>3</u>	<u>5</u>	<u>5</u>	<u>75</u>
3.	<u>4</u>	<u>4</u>	<u>3</u>	<u>48</u>
4.	<u>4</u>	<u>4</u>	<u>5</u>	<u>80</u>
5.	<u>2</u>	<u>3</u>	<u>5</u>	<u>30</u>
6.	<u>3</u>	<u>5</u>	<u>4</u>	<u>60</u>
7.	<u>4</u>	<u>5</u>	<u>4</u>	<u>80</u>
8.	<u>3</u>	<u>2</u>	<u>3</u>	<u>18</u>
9.	<u>3</u>	<u>3</u>	<u>4</u>	<u>36</u>



Find the length, width and height of the rectangular prism. Then find the volume.



Answers

D W H V

Ex. 5 2 4 40

1. \_\_\_\_\_

2. \_\_\_\_\_

3. \_\_\_\_\_

4. \_\_\_\_\_

5. \_\_\_\_\_

6. \_\_\_\_\_

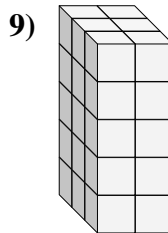
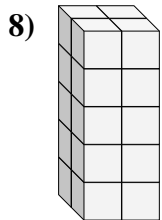
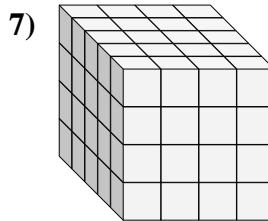
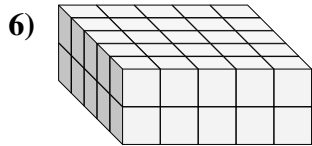
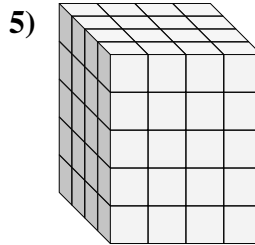
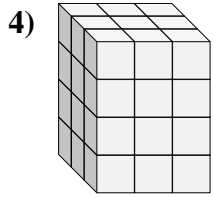
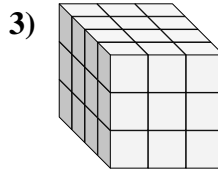
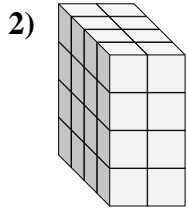
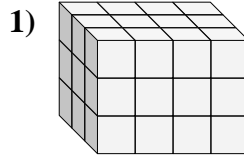
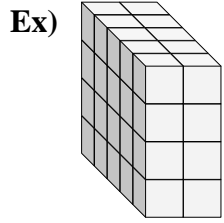
7. \_\_\_\_\_

8. \_\_\_\_\_

9. \_\_\_\_\_



Find the length, width and height of the rectangular prism. Then find the volume.



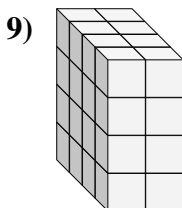
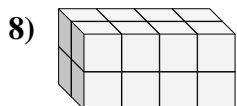
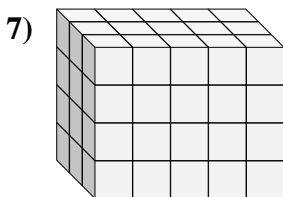
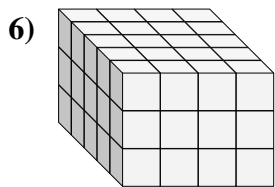
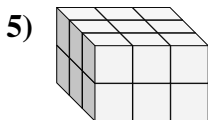
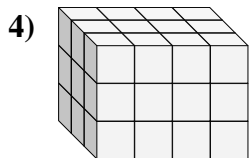
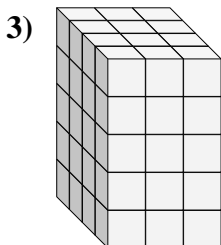
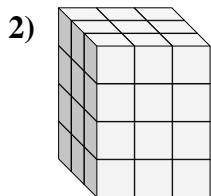
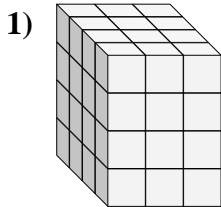
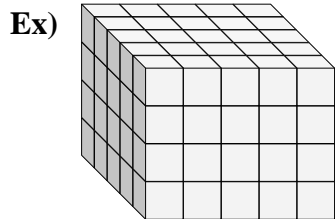
Answers

	D	W	H	V
Ex.	5	2	4	40
1.	3	4	3	36
2.	4	2	4	32
3.	4	3	3	36
4.	3	3	4	36
5.	4	4	5	80
6.	5	5	2	50
7.	5	4	4	80
8.	2	2	5	20
9.	3	2	5	30





Find the length, width and height of the rectangular prism. Then find the volume.



**Answers**

D W H V

Ex. 5 5 4 100

1. \_\_\_\_\_

2. \_\_\_\_\_

3. \_\_\_\_\_

4. \_\_\_\_\_

5. \_\_\_\_\_

6. \_\_\_\_\_

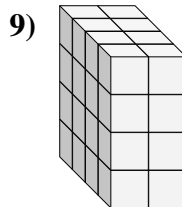
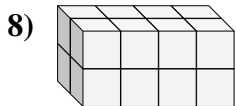
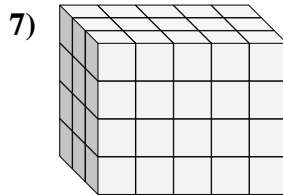
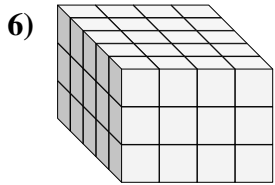
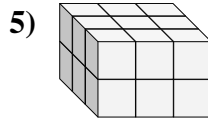
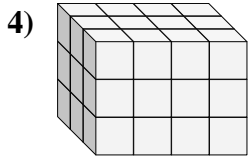
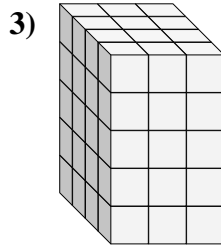
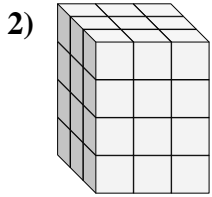
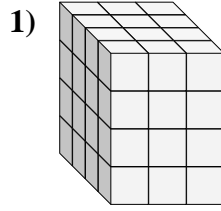
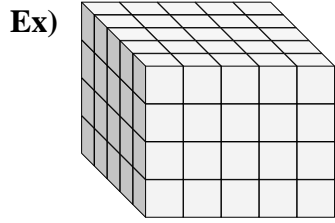
7. \_\_\_\_\_

8. \_\_\_\_\_

9. \_\_\_\_\_



Find the length, width and height of the rectangular prism. Then find the volume.



Answers

D W H V

Ex. 5 5 4 100

1. 4 3 4 48

2. 3 3 4 36

3. 4 3 5 60

4. 3 4 3 36

5. 3 3 2 18

6. 5 4 3 60

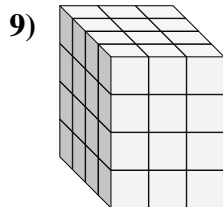
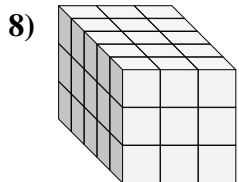
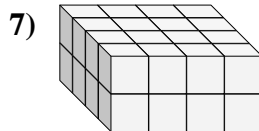
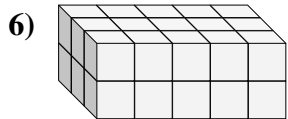
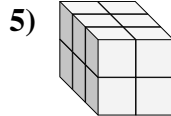
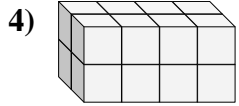
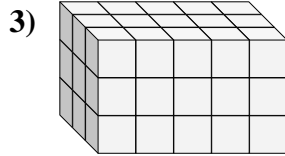
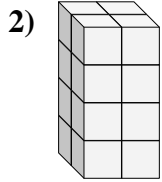
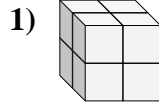
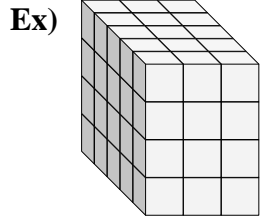
7. 3 5 4 60

8. 2 4 2 16

9. 4 2 4 32



Find the length, width and height of the rectangular prism. Then find the volume.



Answers

D W H V

Ex. 5 3 4 60

1. \_\_\_\_\_

2. \_\_\_\_\_

3. \_\_\_\_\_

4. \_\_\_\_\_

5. \_\_\_\_\_

6. \_\_\_\_\_

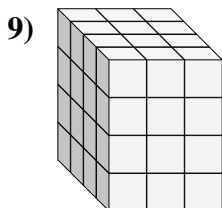
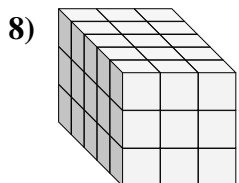
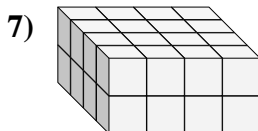
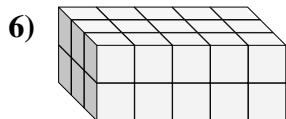
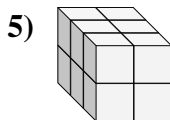
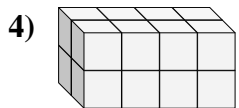
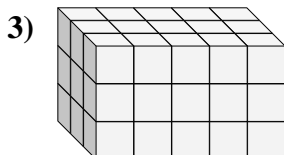
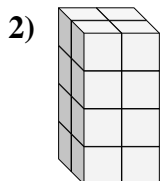
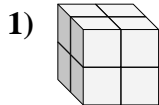
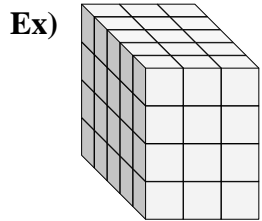
7. \_\_\_\_\_

8. \_\_\_\_\_

9. \_\_\_\_\_



Find the length, width and height of the rectangular prism. Then find the volume.



Answers

	D	W	H	V
Ex.	<u>5</u>	<u>3</u>	<u>4</u>	<u>60</u>
1.	<u>2</u>	<u>2</u>	<u>2</u>	<u>8</u>
2.	<u>2</u>	<u>2</u>	<u>4</u>	<u>16</u>
3.	<u>3</u>	<u>5</u>	<u>3</u>	<u>45</u>
4.	<u>2</u>	<u>4</u>	<u>2</u>	<u>16</u>
5.	<u>3</u>	<u>2</u>	<u>2</u>	<u>12</u>
6.	<u>3</u>	<u>5</u>	<u>2</u>	<u>30</u>
7.	<u>4</u>	<u>4</u>	<u>2</u>	<u>32</u>
8.	<u>5</u>	<u>3</u>	<u>3</u>	<u>45</u>
9.	<u>4</u>	<u>3</u>	<u>4</u>	<u>48</u>