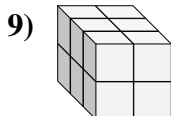
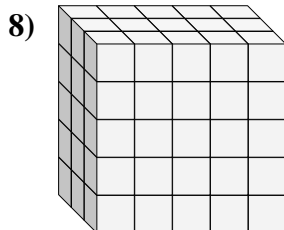
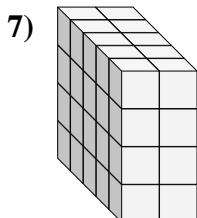
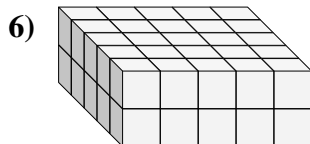
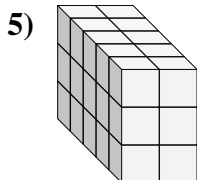
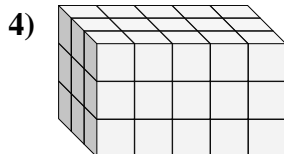
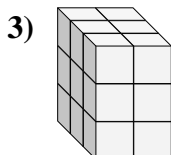
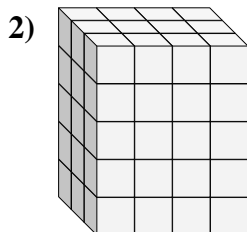
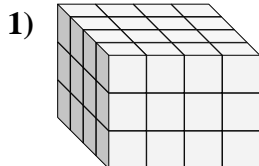
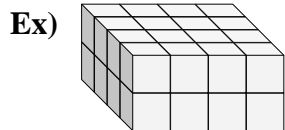




Find the length, width and height of the rectangular prism. Then find the volume.



Answers

D W H V

Ex. 4 4 2 32

1. _____

2. _____

3. _____

4. _____

5. _____

6. _____

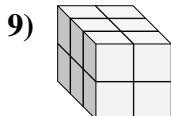
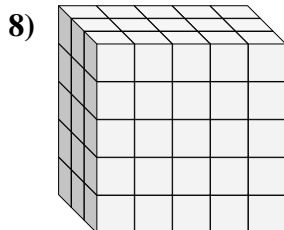
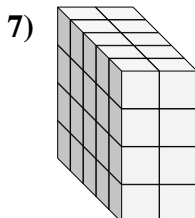
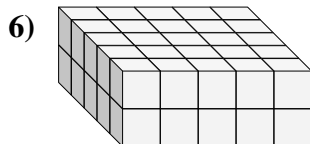
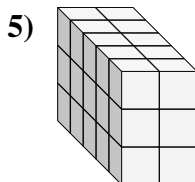
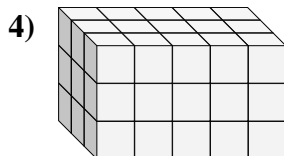
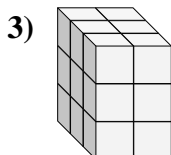
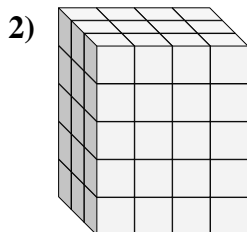
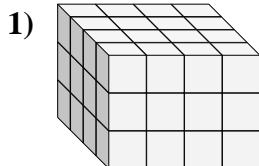
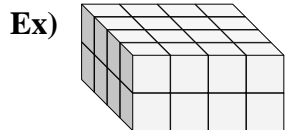
7. _____

8. _____

9. _____



Find the length, width and height of the rectangular prism. Then find the volume.



Answers

D W H V

Ex. 4 4 2 32

1. 4 4 3 48

2. 3 4 5 60

3. 3 2 3 18

4. 3 5 3 45

5. 5 2 3 30

6. 5 5 2 50

7. 5 2 4 40

8. 3 5 5 75

9. 3 2 2 12