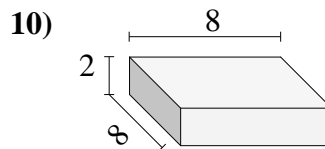
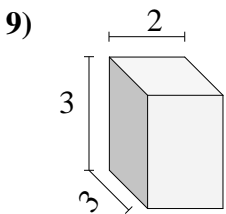
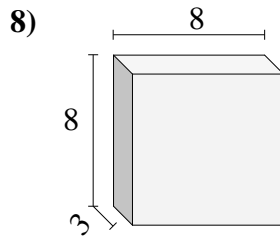
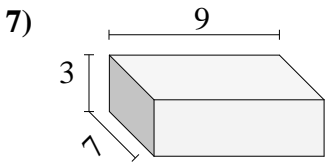
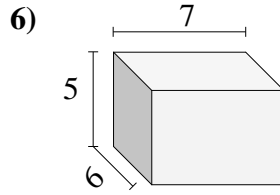
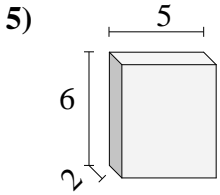
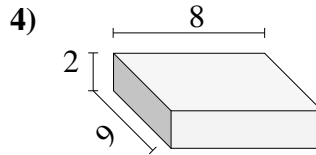
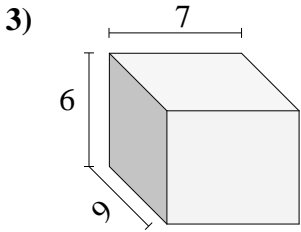
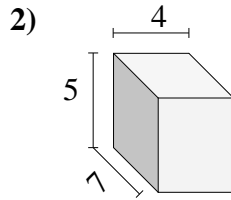
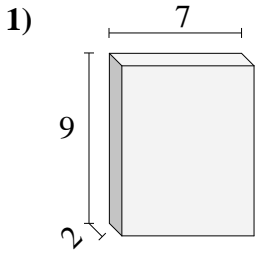


Find the volume of each of the rectangular prisms. Measured in cm (not to scale).

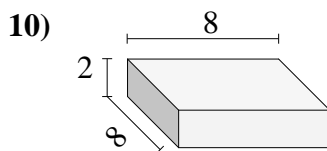
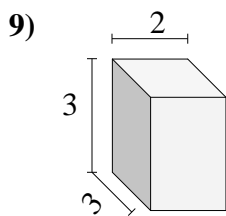
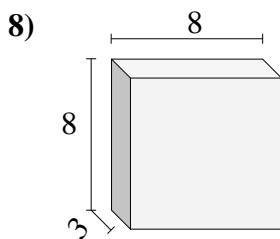
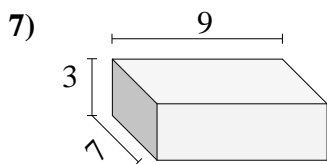
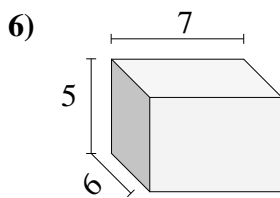
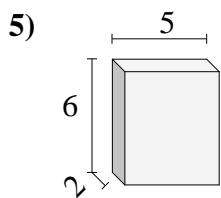
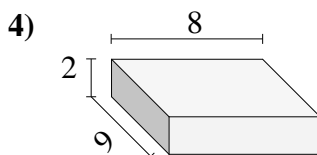
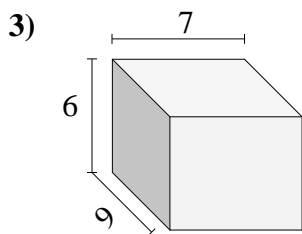
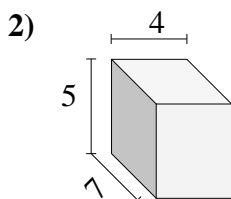
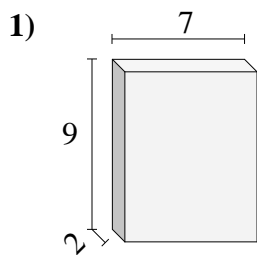


Answers

- 1. _____
- 2. _____
- 3. _____
- 4. _____
- 5. _____
- 6. _____
- 7. _____
- 8. _____
- 9. _____
- 10. _____



Find the volume of each of the rectangular prisms. Measured in cm (not to scale).



Answers

- 1. 126
- 2. 140
- 3. 378
- 4. 144
- 5. 60
- 6. 210
- 7. 189
- 8. 192
- 9. 18
- 10. 128