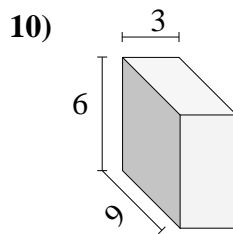
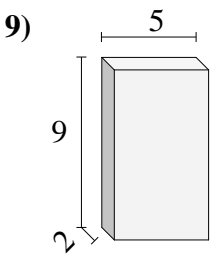
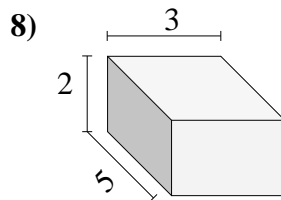
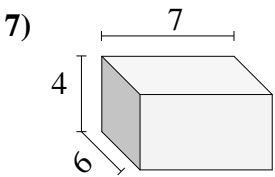
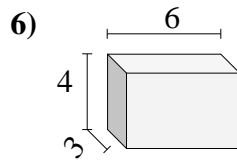
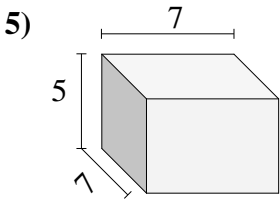
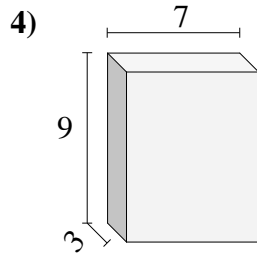
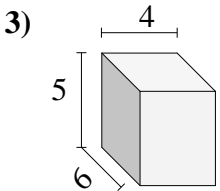
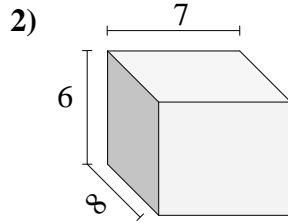
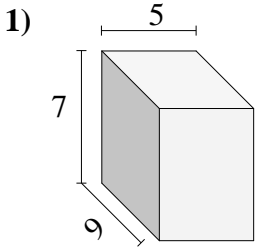




Find the volume of each of the rectangular prisms. Measured in cm (not to scale).

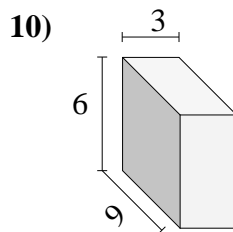
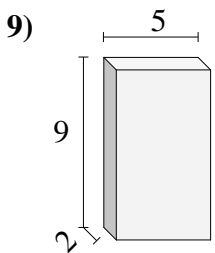
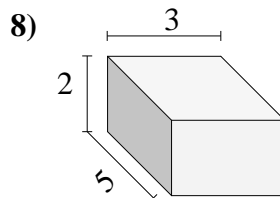
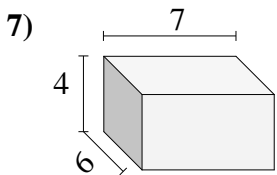
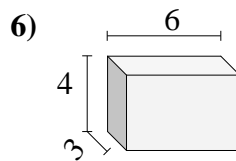
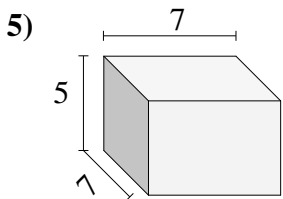
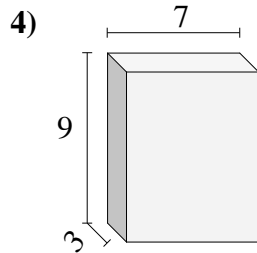
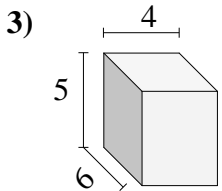
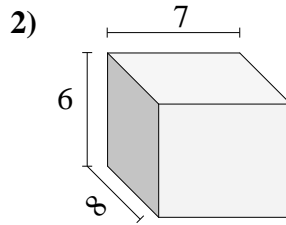
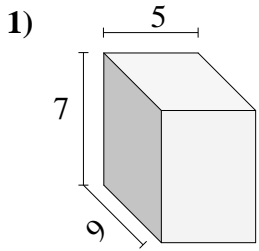


Answers

- 1. _____
- 2. _____
- 3. _____
- 4. _____
- 5. _____
- 6. _____
- 7. _____
- 8. _____
- 9. _____
- 10. _____



Find the volume of each of the rectangular prisms. Measured in cm (not to scale).



Answers

- 1. 315
- 2. 336
- 3. 120
- 4. 189
- 5. 245
- 6. 72
- 7. 168
- 8. 30
- 9. 90
- 10. 162