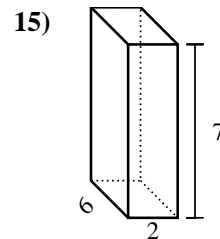
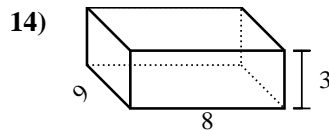
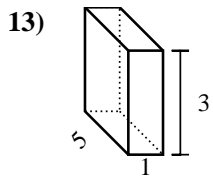
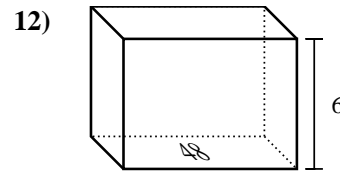
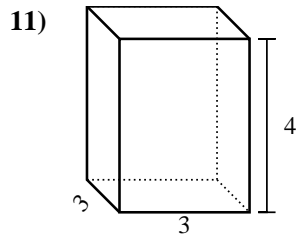
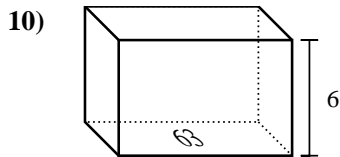
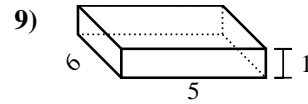
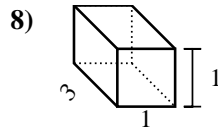
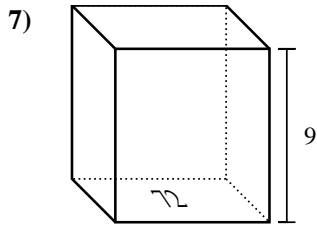
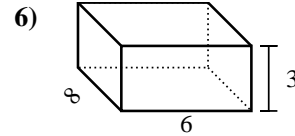
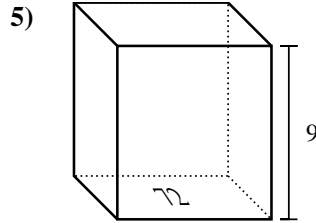
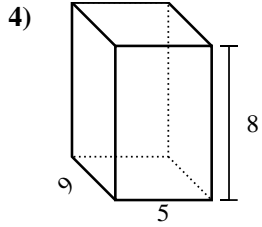
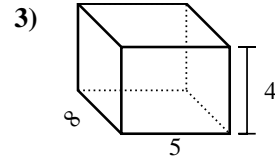
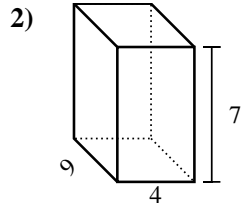
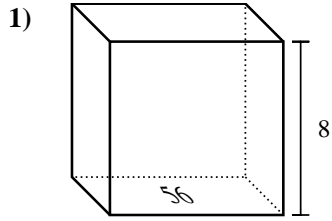




Find the volume of each rectangular prism. Units are in cm (not to scale). Remember $V =$

BH and $V = L \times W \times H$



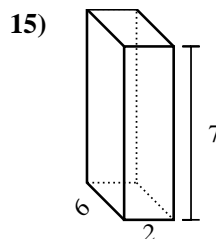
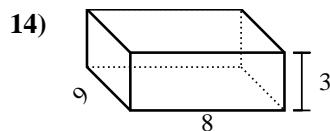
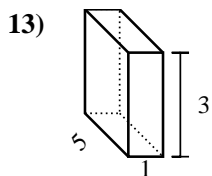
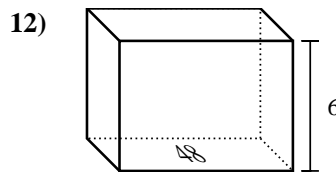
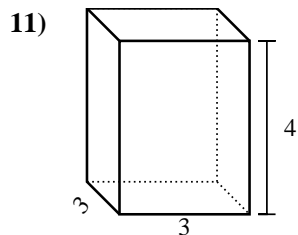
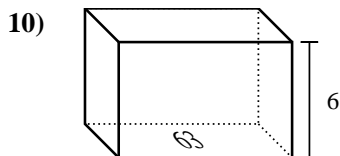
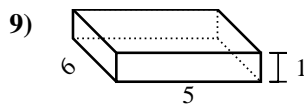
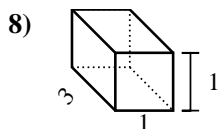
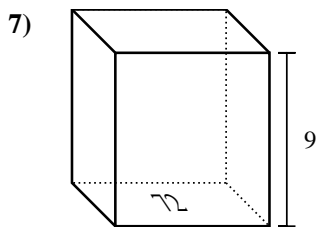
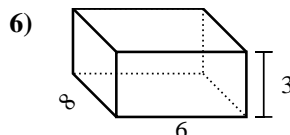
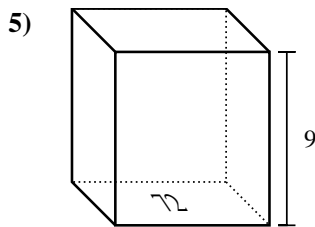
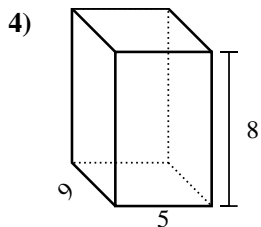
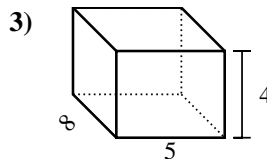
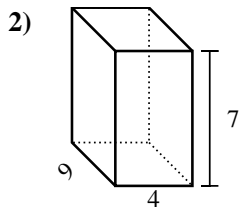
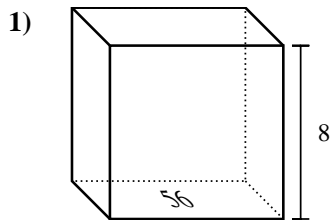
Answers

1. _____
2. _____
3. _____
4. _____
5. _____
6. _____
7. _____
8. _____
9. _____
10. _____
11. _____
12. _____
13. _____
14. _____
15. _____



Find the volume of each rectangular prism. Units are in cm (not to scale). Remember $V =$

$L \times W \times H$



Answers

1. **448 cm³**

2. **252 cm³**

3. **160 cm³**

4. **360 cm³**

5. **648 cm³**

6. **144 cm³**

7. **648 cm³**

8. **3 cm³**

9. **30 cm³**

10. **378 cm³**

11. **36 cm³**

12. **288 cm³**

13. **15 cm³**

14. **216 cm³**

15. **84 cm³**