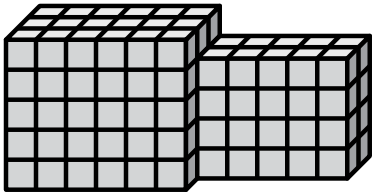




Find the total volume of each figure. Measurement is in cm (not to scale).

Answers

1)



1. \_\_\_\_\_

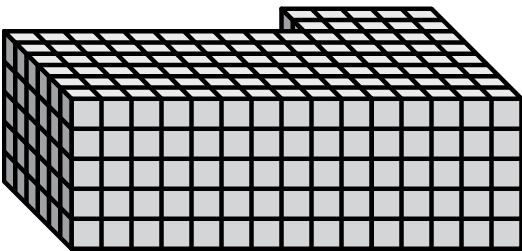
2. \_\_\_\_\_

3. \_\_\_\_\_

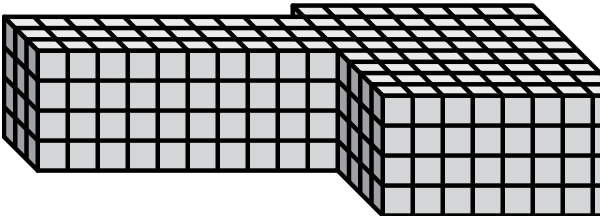
4. \_\_\_\_\_

5. \_\_\_\_\_

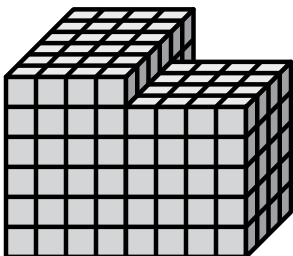
2)



3)


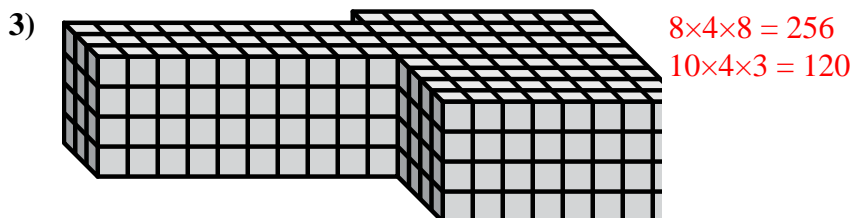
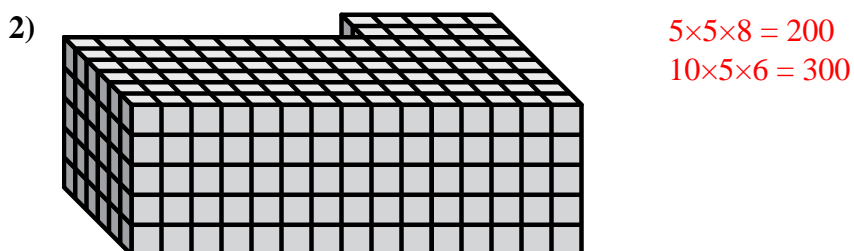
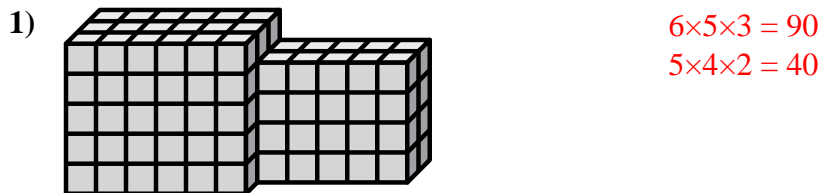


4)





Find the total volume of each figure. Measurement is in cm (not to scale).

**Answers**

1. 130 cm<sup>3</sup>

2. 500 cm<sup>3</sup>

3. 376 cm<sup>3</sup>

4. 224 cm<sup>3</sup>

5. 152 cm<sup>3</sup>