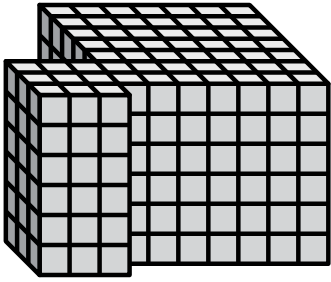





Find the total volume of each figure. Measurement is in cm (not to scale).

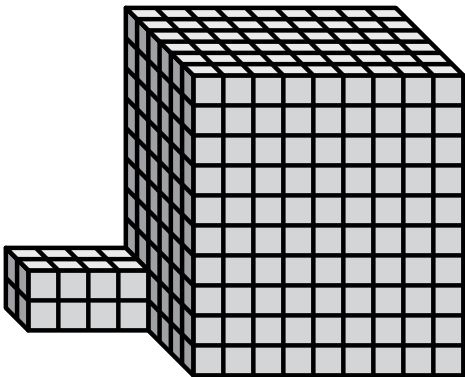
1)



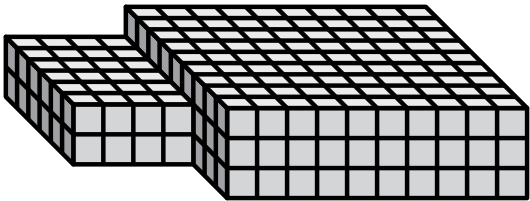
2)



3)



4)



Answers

1. \_\_\_\_\_

2. \_\_\_\_\_

3. \_\_\_\_\_

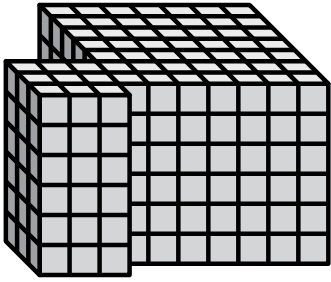
4. \_\_\_\_\_

5. \_\_\_\_\_



Find the total volume of each figure. Measurement is in cm (not to scale).


1)



$$7 \times 6 \times 7 = 294$$

$$3 \times 6 \times 3 = 54$$

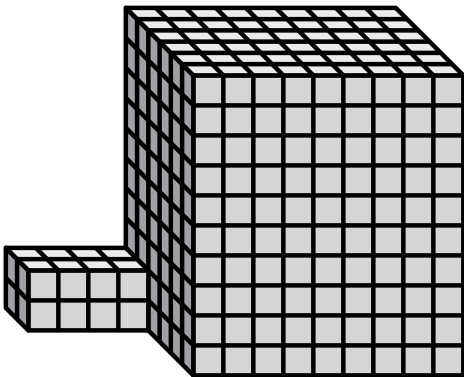
2)



$$7 \times 3 \times 6 = 126$$

$$5 \times 2 \times 4 = 40$$

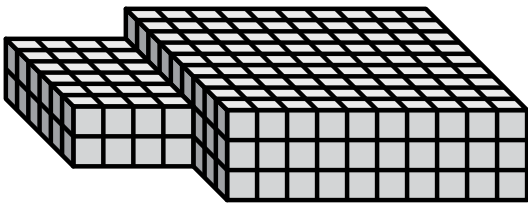
3)



$$9 \times 10 \times 6 = 540$$

$$4 \times 2 \times 2 = 16$$

4)



$$10 \times 3 \times 9 = 270$$

$$4 \times 2 \times 6 = 48$$

Answers

1. 348 cm<sup>3</sup>

2. 166 cm<sup>3</sup>

3. 556 cm<sup>3</sup>

4. 318 cm<sup>3</sup>

5. 340 cm<sup>3</sup>