


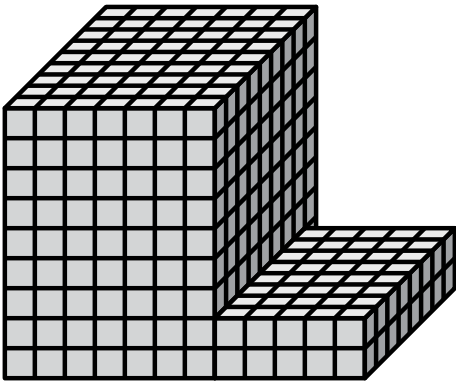


Find the total volume of each figure. Measurement is in cm (not to scale).

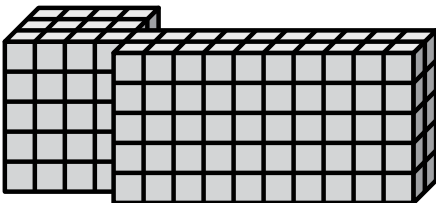
1)



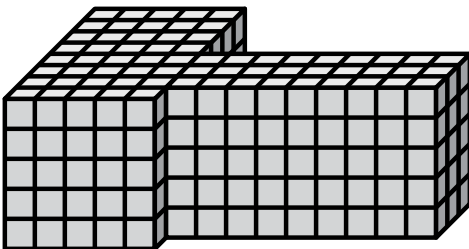
2)



3)



4)



Answers

1. _____

2. _____

3. _____


4. _____

5. _____



Find the total volume of each figure. Measurement is in cm (not to scale).

1)



$$7 \times 2 \times 9 = 126$$

$$2 \times 2 \times 3 = 12$$

Answers

1. 138 cm³

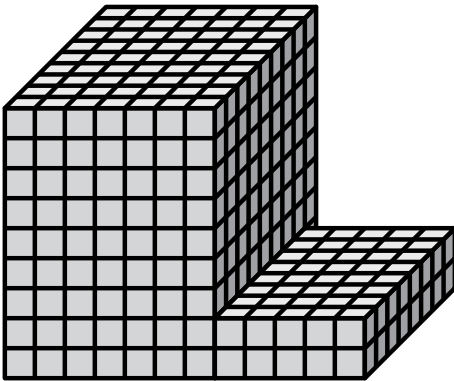
2. 647 cm³

3. 160 cm³

4. 335 cm³

5. 321 cm³

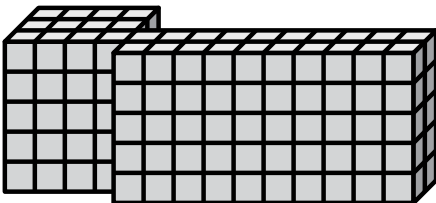
2)



$$7 \times 9 \times 9 = 567$$

$$5 \times 2 \times 8 = 80$$

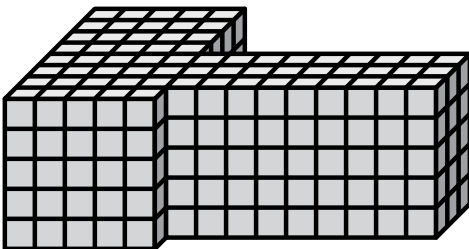
3)



$$4 \times 5 \times 3 = 60$$

$$10 \times 5 \times 2 = 100$$

4)



$$5 \times 5 \times 8 = 200$$

$$9 \times 5 \times 3 = 135$$