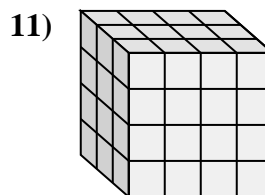
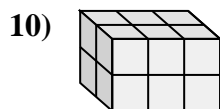
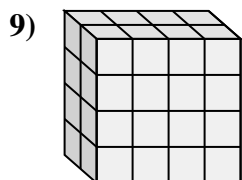
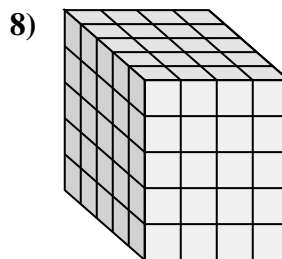
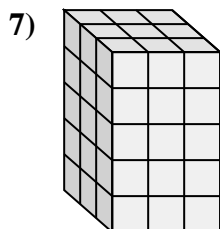
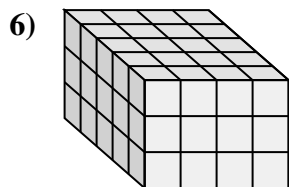
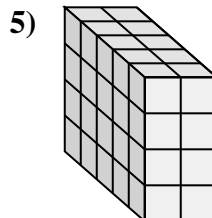
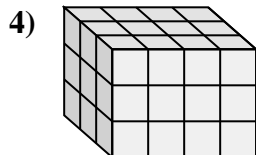
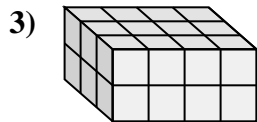
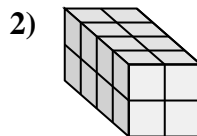
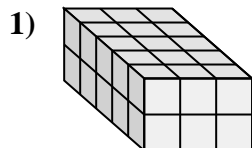
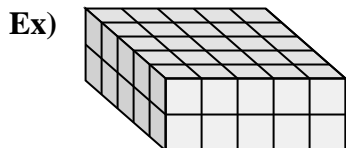




Match each problem with the equation that could represent it. Answer with the missing term and letter.



A. $5 \times 3 \times 2 = \underline{\quad}$

B. $5 \times 4 \times 3 = \underline{\quad}$

C. $3 \times 4 \times 4 = \underline{\quad}$

D. $5 \times 2 \times 4 = \underline{\quad}$

E. $3 \times \underline{\quad} \times 2 = 24$

F. $4 \times \underline{\quad} \times 2 = 16$

G. $\underline{\quad} \times 3 \times 5 = 45$

H. $5 \times 4 \times 5 = \underline{\quad}$

I. $\underline{\quad} \times 4 \times 3 = 36$

J. $\underline{\quad} \times 3 \times 2 = 12$

K. $2 \times 4 \times \underline{\quad} = 32$

L. $5 \times 5 \times \underline{\quad} = 50$

Answers

Ex. L 2

1. A 30

2. F 2

3. E 4

4. I 3

5. D 40

6. B 60

7. G 3

8. H 100

9. K 4

10. J 2

11. C 48