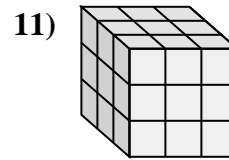
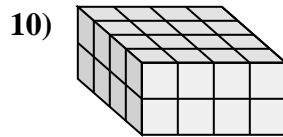
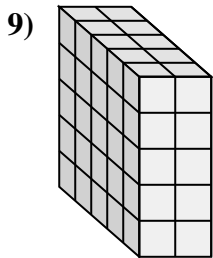
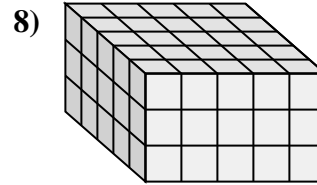
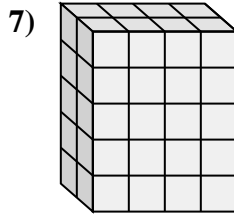
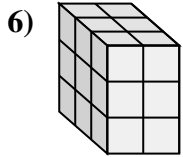
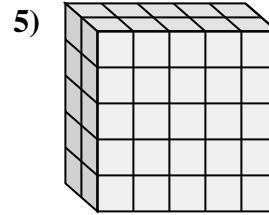
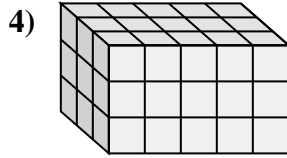
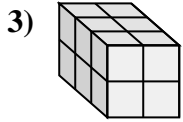
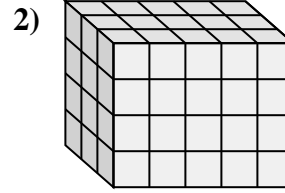
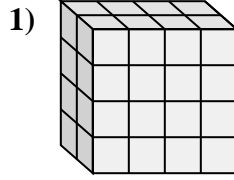
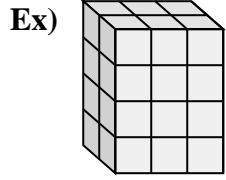




Match each problem with the equation that could represent it. Answer with the missing term and letter.



Answers

Ex. F, 3

1. \_\_\_\_\_

2. \_\_\_\_\_

3. \_\_\_\_\_

4. \_\_\_\_\_

5. \_\_\_\_\_

6. \_\_\_\_\_

7. \_\_\_\_\_

8. \_\_\_\_\_

9. \_\_\_\_\_

10. \_\_\_\_\_

11. \_\_\_\_\_

A)  $2 \times \underline{\quad} \times 4 = 32$

B)  $2 \times \underline{\quad} \times 5 = 40$

C)  $4 \times 4 \times \underline{\quad} = 32$

D)  $5 \times \underline{\quad} \times 5 = 50$

E)  $\underline{\quad} \times 5 \times 4 = 60$

F)  $2 \times \underline{\quad} \times 4 = 24$

G)  $\underline{\quad} \times 5 \times 3 = 45$

H)  $3 \times \underline{\quad} \times 3 = 27$

I)  $2 \times 5 \times \underline{\quad} = 50$

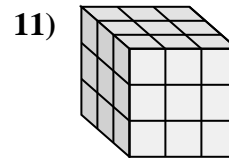
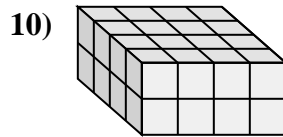
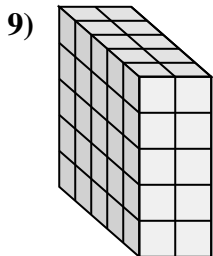
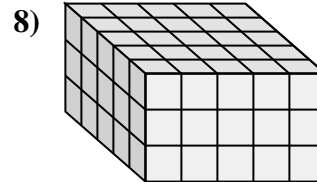
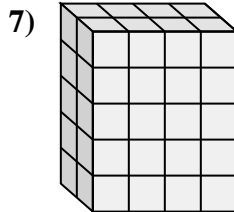
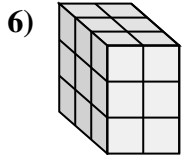
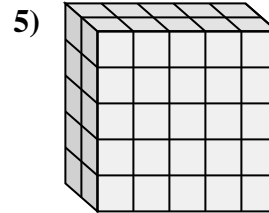
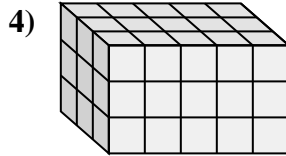
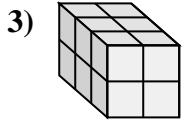
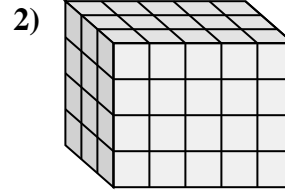
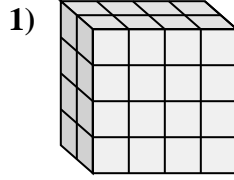
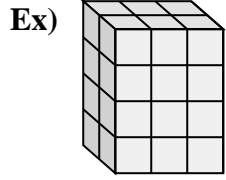
J)  $5 \times 5 \times \underline{\quad} = 75$

K)  $3 \times \underline{\quad} \times 3 = 18$

L)  $3 \times 2 \times \underline{\quad} = 12$



Match each problem with the equation that could represent it. Answer with the missing term and letter.



Answers

Ex. F, 3

1. A, 4

2. E, 3

3. L, 2

4. G, 3

5. I, 5

6. K, 2

7. B, 4

8. J, 3

9. D, 2

10. C, 2

11. H, 3

A)  $2 \times \underline{\quad} \times 4 = 32$

B)  $2 \times \underline{\quad} \times 5 = 40$

C)  $4 \times 4 \times \underline{\quad} = 32$

D)  $5 \times \underline{\quad} \times 5 = 50$

E)  $\underline{\quad} \times 5 \times 4 = 60$

F)  $2 \times \underline{\quad} \times 4 = 24$

G)  $\underline{\quad} \times 5 \times 3 = 45$

H)  $3 \times \underline{\quad} \times 3 = 27$

I)  $2 \times 5 \times \underline{\quad} = 50$

J)  $5 \times 5 \times \underline{\quad} = 75$

K)  $3 \times \underline{\quad} \times 3 = 18$

L)  $3 \times 2 \times \underline{\quad} = 12$