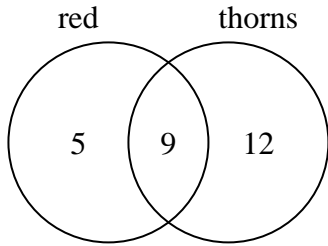




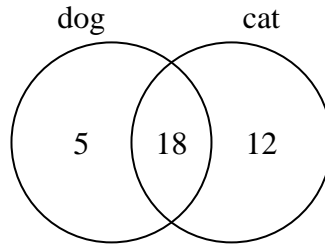
Use the diagram to solve each problem.

- 1) The diagram below shows the attributes of flowers in a flower shop.



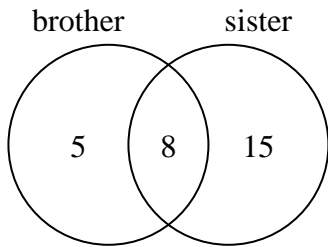
How many flowers had thorns?

- 2) The diagram below shows the pets students in a class owned.



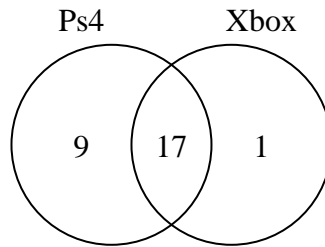
How many people did not have both a cat and a dog?

- 3) The diagram below shows the gender of students siblings.



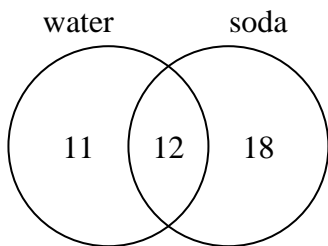
How many students had a brother?

- 4) The diagram below shows the game consoles students owned.



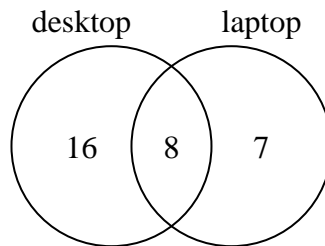
How many people owned both a Ps4 and a Xbox?

- 5) The diagram below shows the drinks people consumed at the football game.



How many people did not drink both water and soda?

- 6) The diagram below shows the types of computers students owned.



How many students owned a desktop computer?

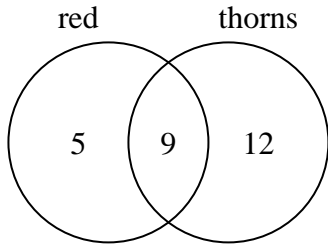
Answers

- 1. _____
- 2. _____
- 3. _____
- 4. _____
- 5. _____
- 6. _____



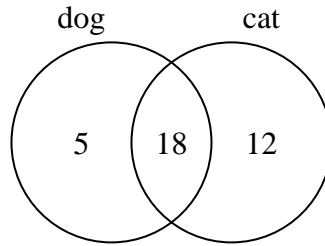
Use the diagram to solve each problem.

- 1) The diagram below shows the attributes of flowers in a flower shop.



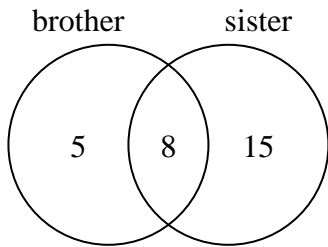
How many flowers had thorns?

- 2) The diagram below shows the pets students in a class owned.



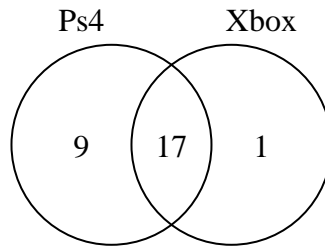
How many people did not have both a cat and a dog?

- 3) The diagram below shows the gender of students siblings.



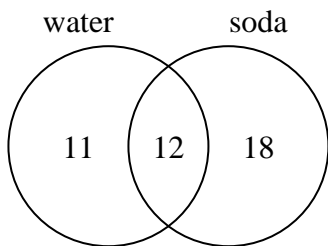
How many students had a brother?

- 4) The diagram below shows the game consoles students owned.



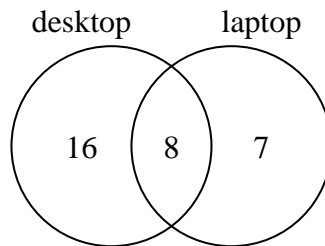
How many people owned both a Ps4 and a Xbox?

- 5) The diagram below shows the drinks people consumed at the football game.



How many people did not drink both water and soda?

- 6) The diagram below shows the types of computers students owned.



How many students owned a desktop computer?

Answers

- 1. 21
- 2. 17
- 3. 13
- 4. 17
- 5. 29
- 6. 24