



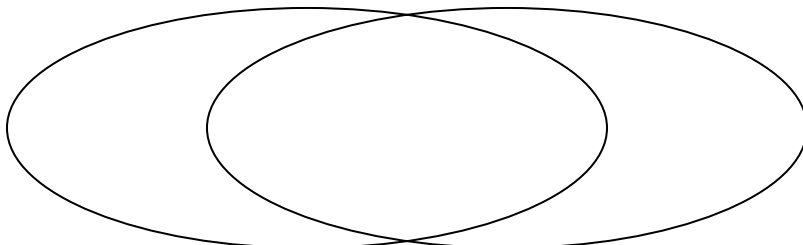
Solve each problem.

- 1) The table below shows the physical traits of different students. Use the chart to fill in the Venn Diagram.

	Adam	Gary	Pam	Sam	Emma	Tom
Eye Color	Blue	Blue	Blue	Blue	Green	Blue
Hair Color	Blonde	Blonde	Red	Red	Blonde	Blonde

**Blue Eyes**

**Blonde Hair**

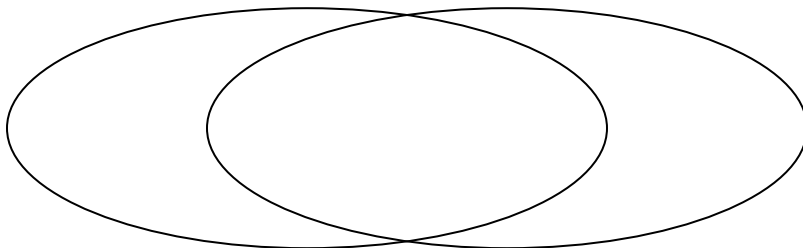


- 2) The table below shows the physical traits of several pets in a pet shelter. Use the chart to fill in the Venn Diagram.

	Emily	Coco	Lucky	Sparkles	Bubbles	Alfus
Type	Cat	Dog	Cat	Dog	Dog	Dog
Breed	Pure	Mixed	Pure	Pure	Pure	Mixed

**Dog**

**Pure Breed**

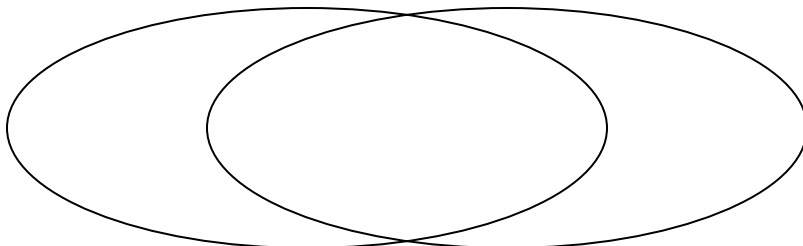


- 3) The table below shows the information on several pizza places. Use the chart to fill in the Venn Diagram.

	Pizza Bros	Za Pizza	Slice of Life	Oven Baked	Luigi's Pizza	Italy's Best
Delivery	Free	Pay	Free	Pay	Free	Pay
Type	Chain	Chain	Chain	Chain	Family Owned	Chain

**Free Delivery**

**Chain Store**

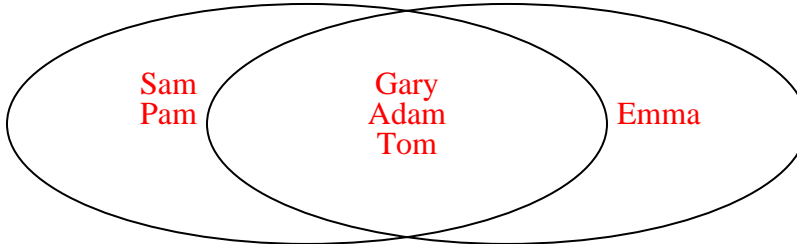




Solve each problem.

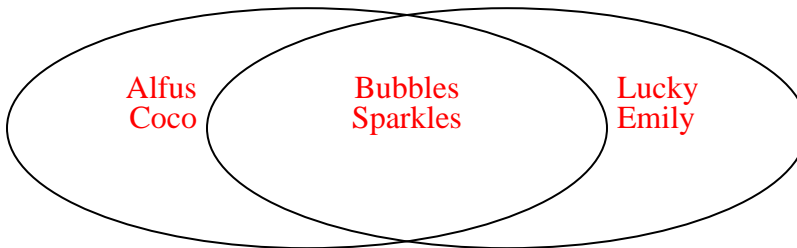
- 1) The table below shows the physical traits of different students. Use the chart to fill in the Venn Diagram.

	Adam	Gary	Pam	Sam	Emma	Tom
Eye Color	Blue	Blue	Blue	Blue	Green	Blue
Hair Color	Blonde	Blonde	Red	Red	Blonde	Blonde

**Blue Eyes****Blonde Hair**

- 2) The table below shows the physical traits of several pets in a pet shelter. Use the chart to fill in the Venn Diagram.

	Emily	Coco	Lucky	Sparkles	Bubbles	Alfus
Type	Cat	Dog	Cat	Dog	Dog	Dog
Breed	Pure	Mixed	Pure	Pure	Pure	Mixed

**Dog****Pure Breed**

- 3) The table below shows the information on several pizza places. Use the chart to fill in the Venn Diagram.

	Pizza Bros	Za Pizza	Slice of Life	Oven Baked	Luigi's Pizza	Italy's Best
Delivery	Free	Pay	Free	Pay	Free	Pay
Type	Chain	Chain	Chain	Chain	Family Owned	Chain

**Free Delivery****Chain Store**