
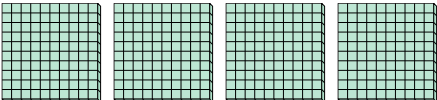






Use the blocks to determine the total quantities.


Ex)    
 \_\_\_\_\_ Hundreds = \_\_\_\_\_ Tens = \_\_\_\_\_ Ones

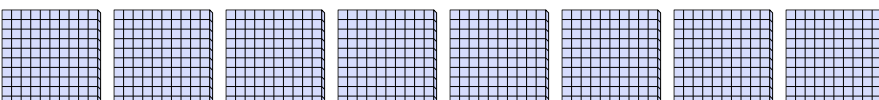
1)    
 \_\_\_\_\_ Hundreds = \_\_\_\_\_ Tens = \_\_\_\_\_ Ones


2)    
 \_\_\_\_\_ Hundreds = \_\_\_\_\_ Tens = \_\_\_\_\_ Ones

3)    
 \_\_\_\_\_ Hundreds = \_\_\_\_\_ Tens = \_\_\_\_\_ Ones

4)    
 \_\_\_\_\_ Hundreds = \_\_\_\_\_ Tens = \_\_\_\_\_ Ones

5)    
 \_\_\_\_\_ Hundreds = \_\_\_\_\_ Tens = \_\_\_\_\_ Ones

6)    
 \_\_\_\_\_ Hundreds = \_\_\_\_\_ Tens = \_\_\_\_\_ Ones

7)    
 \_\_\_\_\_ Hundreds = \_\_\_\_\_ Tens = \_\_\_\_\_ Ones

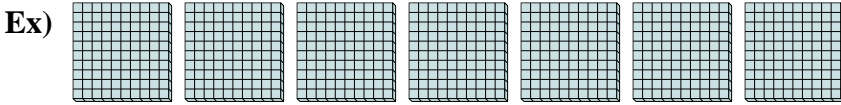
8)    
 \_\_\_\_\_ Hundreds = \_\_\_\_\_ Tens = \_\_\_\_\_ Ones

**Answers**

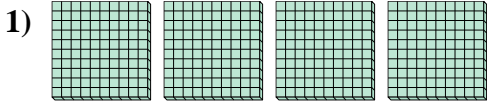
Ex.	<u>7</u>	<u>70</u>	<u>700</u>
1.	_____	_____	_____
2.	_____	_____	_____
3.	_____	_____	_____
4.	_____	_____	_____
5.	_____	_____	_____
6.	_____	_____	_____
7.	_____	_____	_____
8.	_____	_____	_____



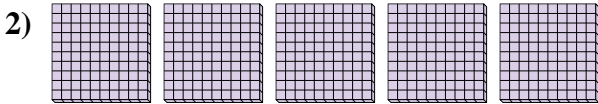
Use the blocks to determine the total quantities.



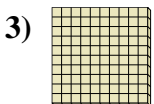
7 Hundreds = 70 Tens = 700 Ones



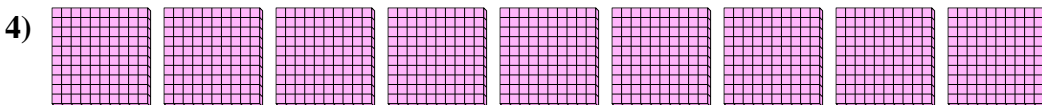
4 Hundreds = 40 Tens = 400 Ones



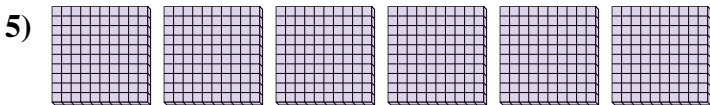
5 Hundreds = 50 Tens = 500 Ones



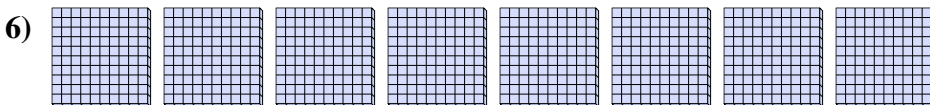
1 Hundreds = 10 Tens = 100 Ones



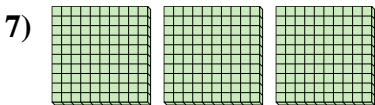
9 Hundreds = 90 Tens = 900 Ones



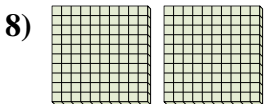
6 Hundreds = 60 Tens = 600 Ones



8 Hundreds = 80 Tens = 800 Ones



3 Hundreds = 30 Tens = 300 Ones



2 Hundreds = 20 Tens = 200 Ones

Answers

Ex. 7    70    700

1. 4    40    400

2. 5    50    500

3. 1    10    100

4. 9    90    900

5. 6    60    600

6. 8    80    800

7. 3    30    300

8. 2    20    200