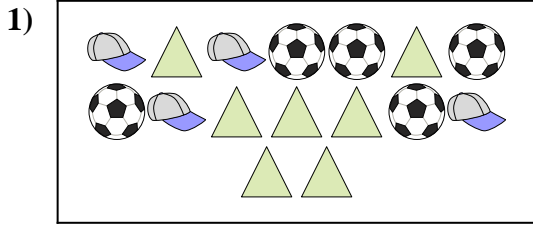




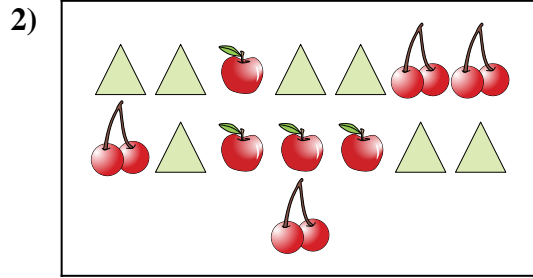
Compare the number of shapes.



Are there less or less ?

A.

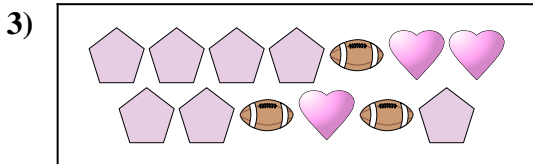
B.



Are there more or more ?

A.

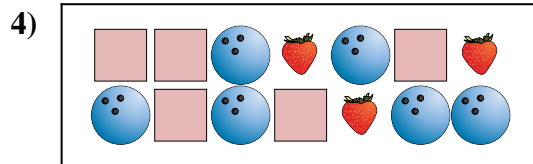
B.



Are there more or more ?

A.

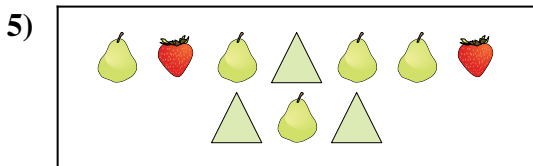
B.



Are there more or more ?

A.

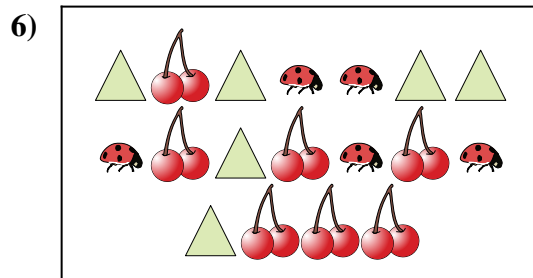
B.



Are there less or less ?

A.

B.



Are there less or less ?

A.

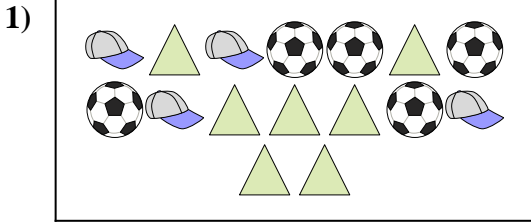
B.

Answers

1. _____
2. _____
3. _____
4. _____
5. _____
6. _____



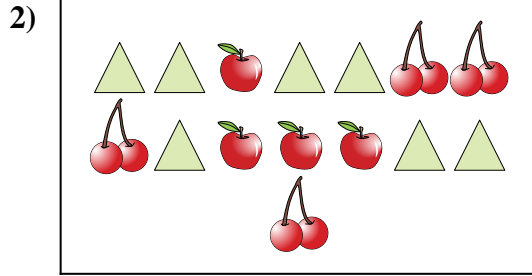
Compare the number of shapes.



Are there less or less ?

A.

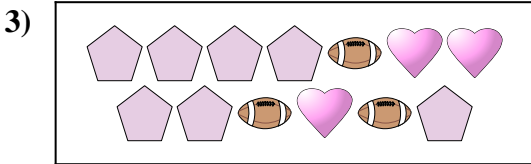
B.



Are there more or more ?

A.

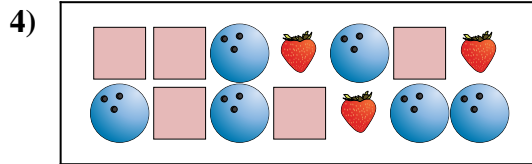
B.



Are there more or more ?

A.

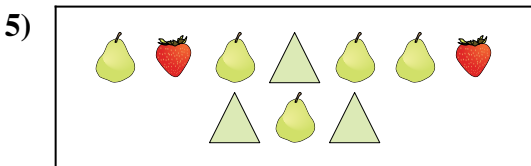
B.



Are there more or more ?

A.

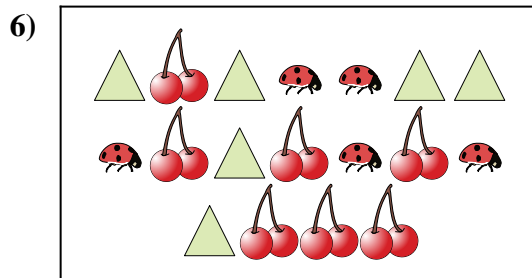
B.



Are there less or less ?

A.

B.



Are there less or less ?

A.

B.

Answers

1. **B**

2. **A**

3. **A**


4. **A**

5. **A**

6. **B**



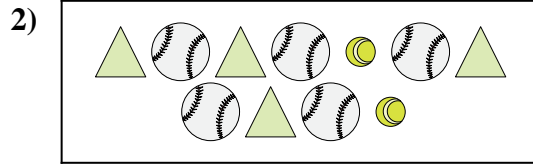
Compare the number of shapes.



Are there less or less ?

A.

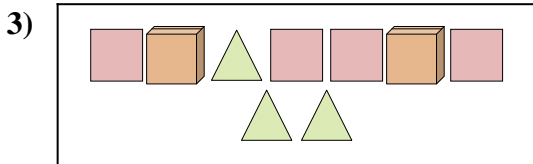
B.



Are there less or less ?

A.


B.



Are there less or less ?

A.


B.



Are there more or more ?

A.

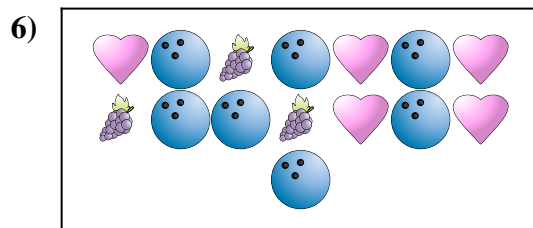
B.



Are there less or less ?

A.

B.



Are there more or more ?

A.


B.

Answers

1. _____
2. _____
3. _____
4. _____
5. _____
6. _____



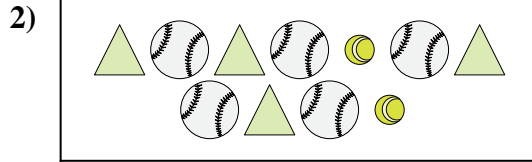
Compare the number of shapes.



Are there less or less ?

A.

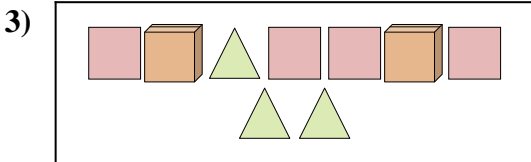
B.



Are there less or less ?

A.


B.



Are there less or less ?

A.


B.



Are there more or more ?

A.

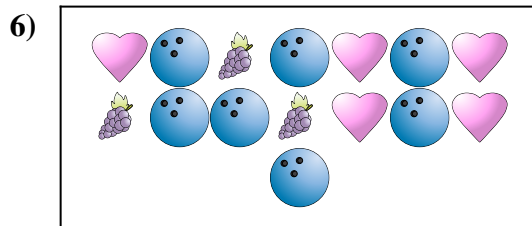
B.



Are there less or less ?

A.

B.



Are there more or more ?

A.

B.

Answers

1. **B**

2. **A**

3. **A**


4. **B**

5. **B**

6. **B**




Compare the number of shapes.



Are there less or less ?

A.

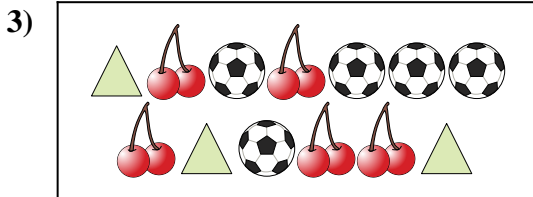
B.



Are there less or less ?

A.


B.



Are there less or less ?

A.

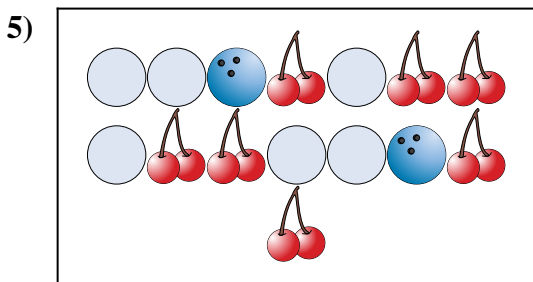
B.



Are there less or less ?

A.

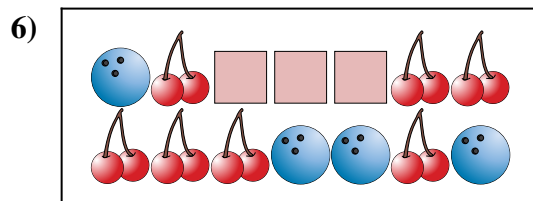
B.



Are there less or less ?

A.

B.



Are there more or more ?

A.


B.

Answers

1. _____
2. _____
3. _____
4. _____
5. _____
6. _____




Compare the number of shapes.



Are there less or less ?

A.

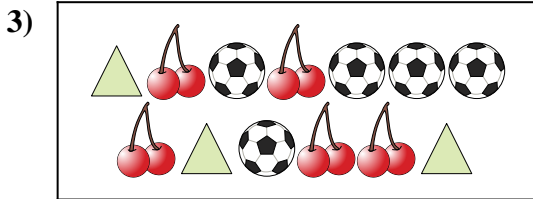
B.



Are there less or less ?

A.


B.



Are there less or less ?

A.

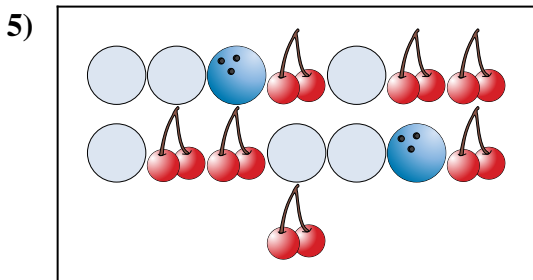
B.



Are there less or less ?

A.

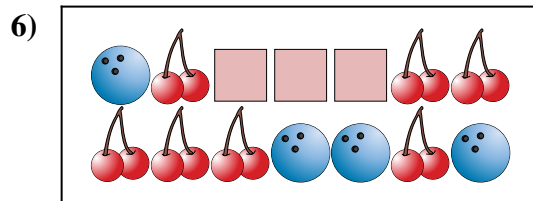
B.



Are there less or less ?

A.

B.



Are there more or more ?

A.

B.

Answers

1. **B**

2. **B**

3. **A**

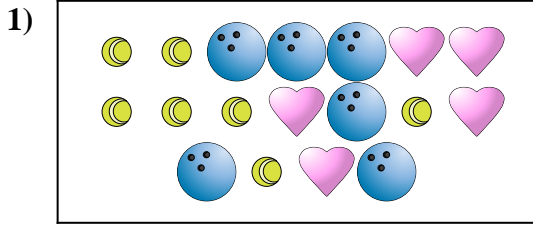
4. **A**

5. **B**

6. **B**

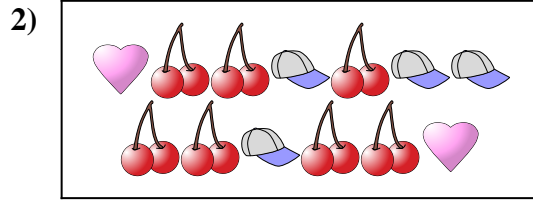


Compare the number of shapes.




Are there less or less ?

- A.
- B.



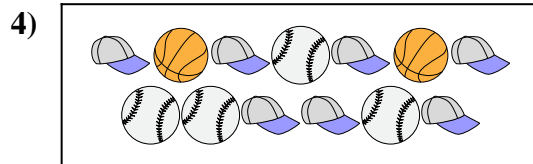
Are there more or more ?

- A.
- B.



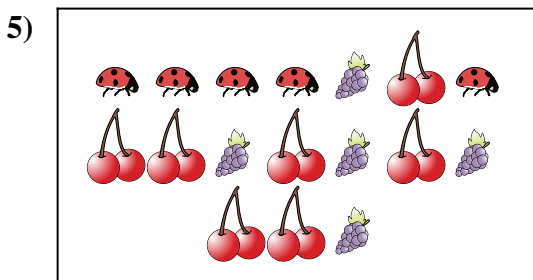
Are there less or less ?

- A.
- B.



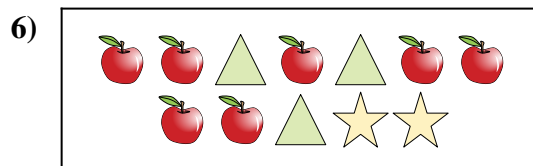
Are there less or less ?

- A.
- B.



Are there more or more ?

- A.
- B.



Are there more or more ?

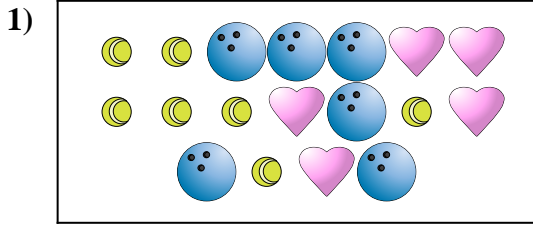
- A.
- B.

Answers

- 1. _____
- 2. _____
- 3. _____
- 4. _____
- 5. _____
- 6. _____

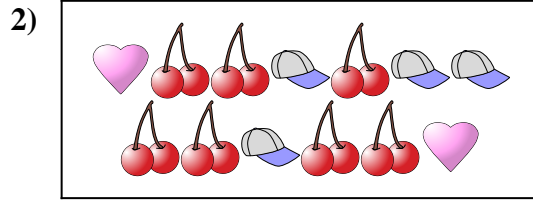


Compare the number of shapes.




Are there less or less ?

- A.
- B.



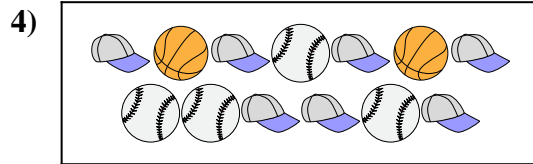
Are there more or more ?

- A.
- B.



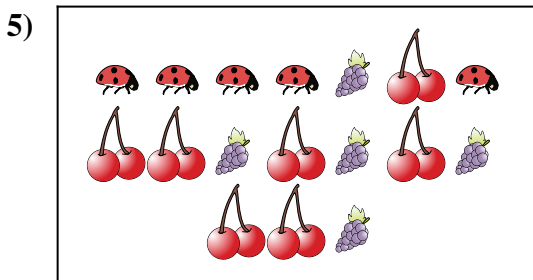
Are there less or less ?

- A.
- B.



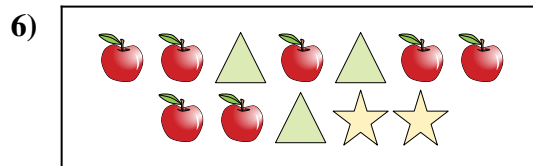
Are there less or less ?

- A.
- B.



Are there more or more ?

- A.
- B.



Are there more or more ?


- A.
- B.

Answers

- 1. **A**
- 2. **B**
- 3. **B**
- 4. **B**
- 5. **A**
- 6. **B**



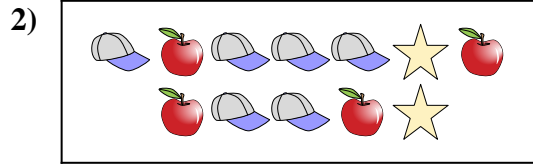
Compare the number of shapes.



Are there more or more ?

A.

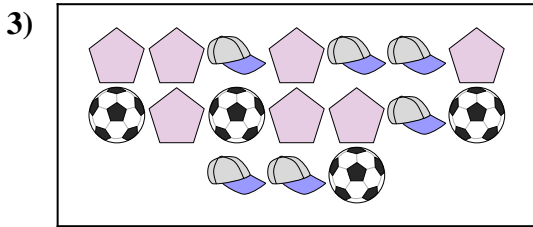
B.



Are there less or less ?

A.

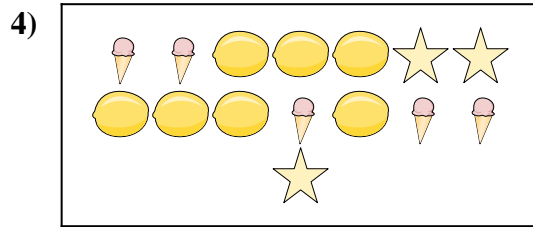
B.



Are there more or more ?

A.

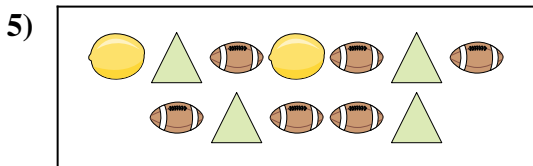
B.



Are there more or more ?

A.

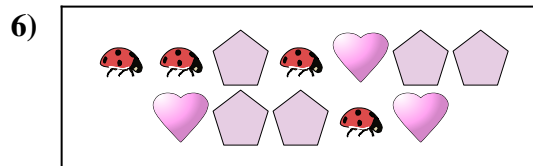
B.



Are there less or less ?

A.

B.



Are there more or more ?

A.


B.

Answers

1. _____
2. _____
3. _____
4. _____
5. _____
6. _____



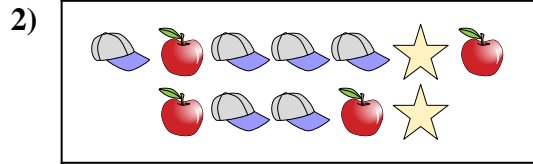
Compare the number of shapes.



Are there more or more ?

A.

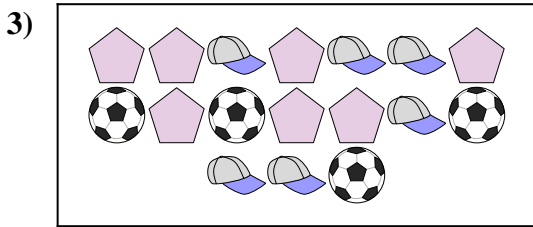
B.



Are there less or less ?

A.

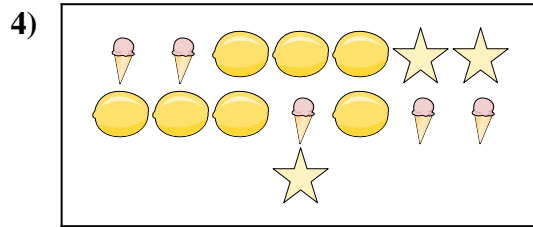
B.



Are there more or more ?

A.

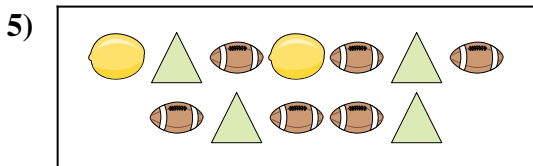
B.



Are there more or more ?

A.

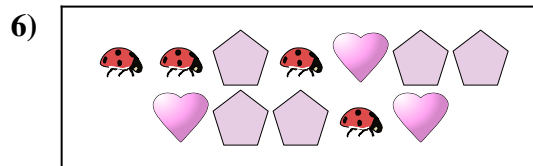
B.



Are there less or less ?

A.

B.



Are there more or more ?

A.

B.

Answers

1. **A**

2. **B**

3. **B**

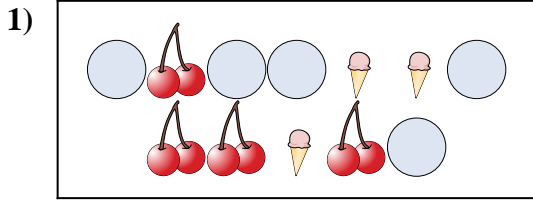
4. **A**

5. **A**


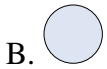
6. **A**




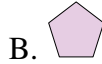
Compare the number of shapes.




Are there more or more ?




Are there less or less ?



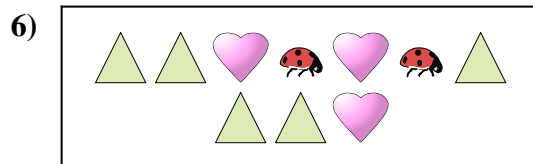
Are there less or less ?



Are there more or more ?



Are there more or more ?



Are there less or less ?

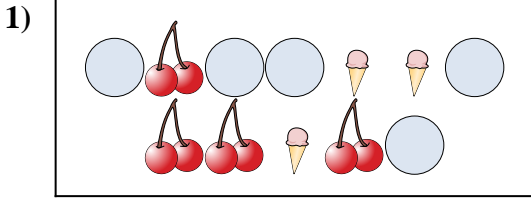


Answers

1. _____
2. _____
3. _____
4. _____
5. _____
6. _____




Compare the number of shapes.



Are there more or more ?

A.


B.



Are there less or less ?

A.


B.



Are there less or less ?

A.


B.



Are there more or more ?

A.

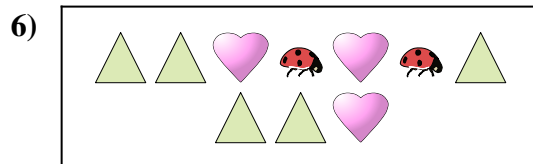
B.



Are there more or more ?

A.

B.



Are there less or less ?

A.

B.

Answers

1. **B**

2. **B**

3. **B**


4. **A**

5. **B**

6. **B**




Compare the number of shapes.



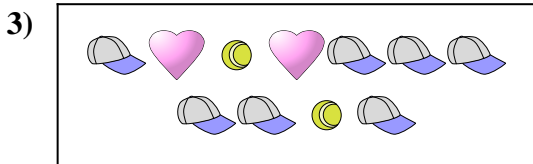
Are there less or less ?

- A.
- B.



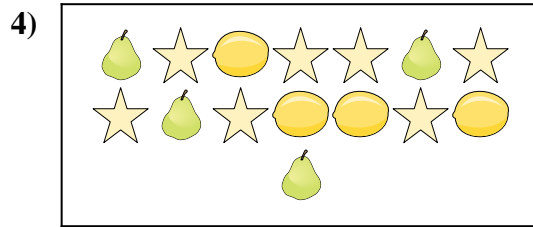
Are there less or less ?

- A.
- B.



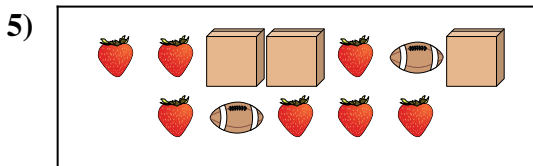
Are there more or more ?

- A.
- B.



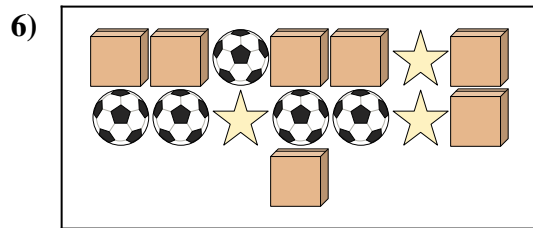
Are there more or more ?

- A.
- B.



Are there less or less ?

- A.
- B.



Are there more or more ?


- A.
- B.

Answers

- 1. _____
- 2. _____
- 3. _____
- 4. _____
- 5. _____
- 6. _____




Compare the number of shapes.



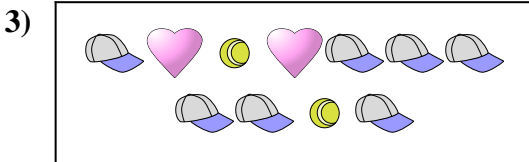
Are there less or less ?

- A.
- B.



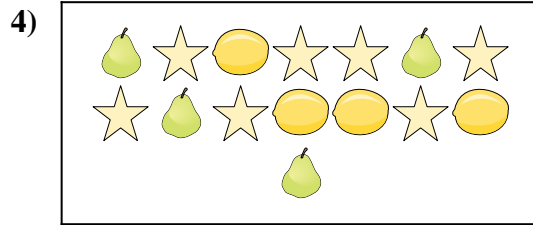
Are there less or less ?

- A.
- B.



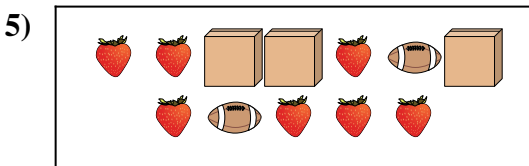
Are there more or more ?

- A.
- B.



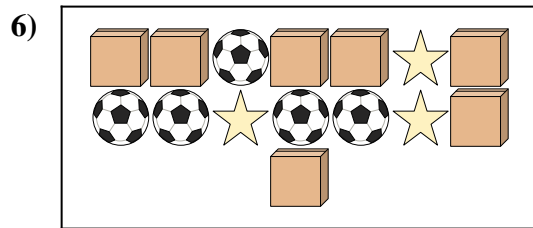
Are there more or more ?

- A.
- B.



Are there less or less ?

- A.
- B.



Are there more or more ?

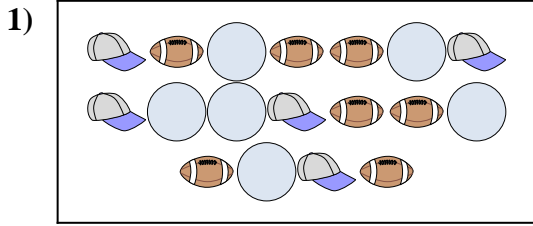
- A.
- B.

Answers

- 1. **A**
- 2. **A**
- 3. **A**
- 4. **A**
- 5. **B**
- 6. **A**



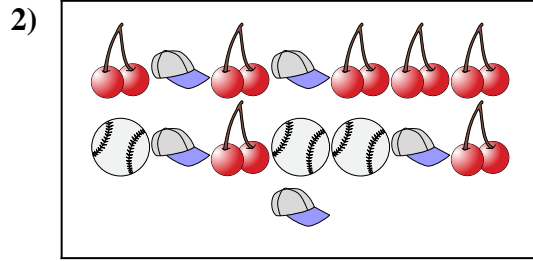
Compare the number of shapes.



Are there more or more ?

A.


B.



Are there more or more ?

A.

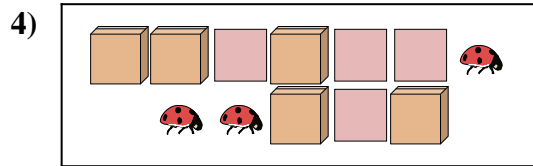
B.



Are there more or more ?

A.


B.



Are there more or more ?

A.

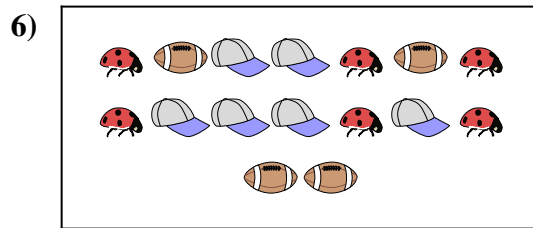
B.



Are there less or less ?

A.

B.



Are there less or less ?

A.

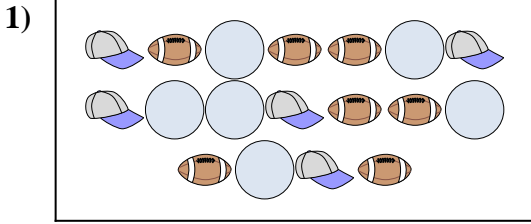
B.

Answers

1. _____
2. _____
3. _____
4. _____
5. _____
6. _____



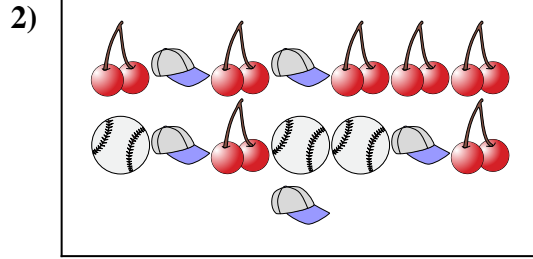
Compare the number of shapes.



Are there more or more ?

A.


B.



Are there more or more ?

A.


B.



Are there more or more ?

A.


B.



Are there more or more ?

A.

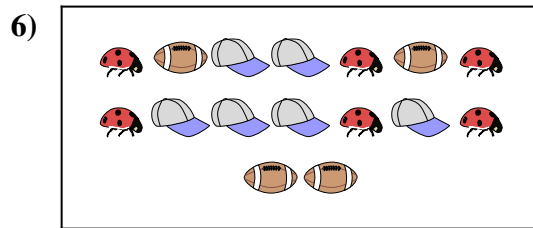
B.



Are there less or less ?

A.

B.



Are there less or less ?

A.

B.

Answers

1. **A**

2. **A**

3. **A**


4. **B**

5. **B**

6. **A**



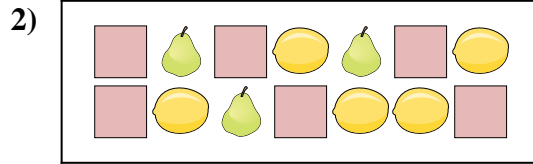
Compare the number of shapes.



Are there less or less ?

A.

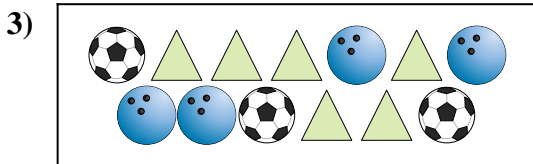
B.



Are there more or more ?

A.


B.



Are there less or less ?

A.

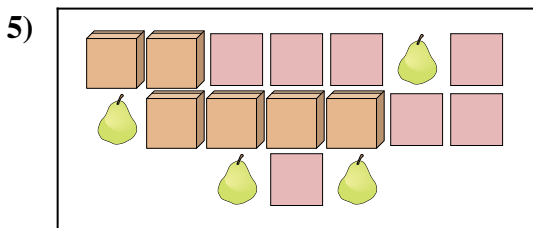
B.



Are there less or less ?

A.

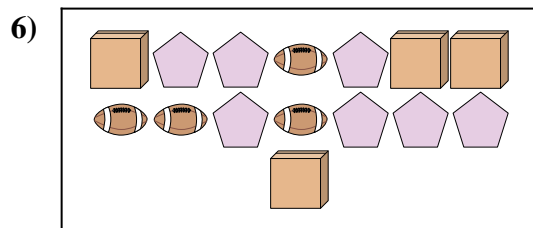
B.



Are there less or less ?

A.

B.



Are there more or more ?

A.


B.

Answers

1. _____
2. _____
3. _____
4. _____
5. _____
6. _____



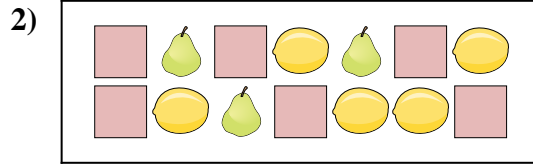
Compare the number of shapes.



Are there less or less ?

A.

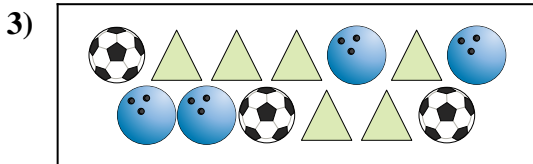
B.



Are there more or more ?

A.


B.



Are there less or less ?

A.

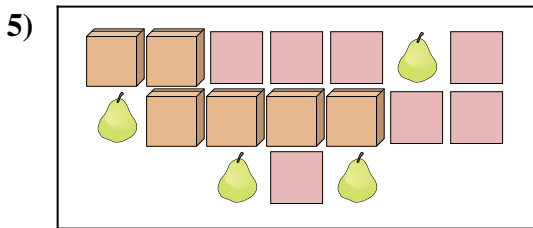
B.



Are there less or less ?

A.

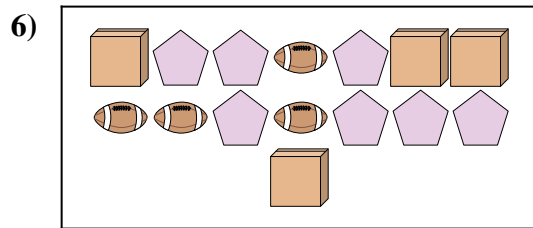
B.



Are there less or less ?

A.

B.



Are there more or more ?

A.

B.

Answers

1. **B**

2. **A**

3. **A**

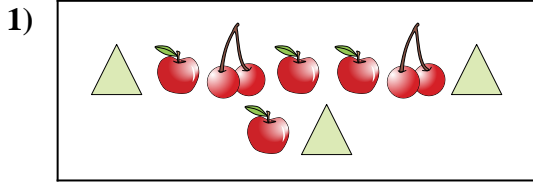
4. **A**

5. **B**

6. **A**




Compare the number of shapes.



Are there less or less ?

A.

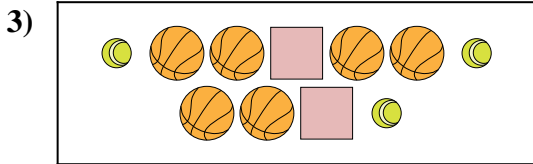
B.



Are there less or less ?

A.


B.



Are there more or more ?

A.


B.



Are there more or more ?

A.


B.



Are there more or more ?

A.

B.



Are there less or less ?

A.

B.

Answers

1. _____

2. _____

3. _____

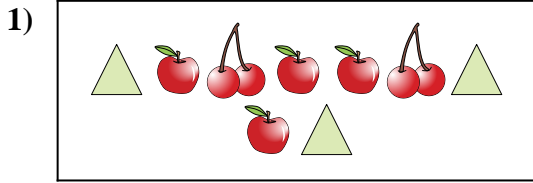
4. _____

5. _____

6. _____




Compare the number of shapes.



Are there less or less ?

A.

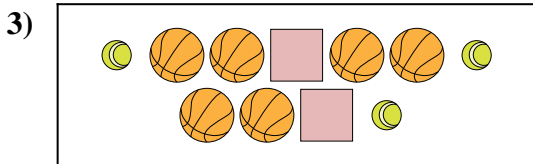
B.



Are there less or less ?

A.


B.



Are there more or more ?

A.


B.



Are there more or more ?

A.


B.



Are there more or more ?

A.

B.



Are there less or less ?

A.

B.

Answers

1. **A**

2. **B**

3. **B**

4. **B**

5. **A**

6. **B**