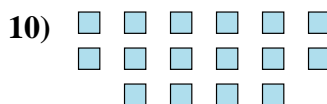
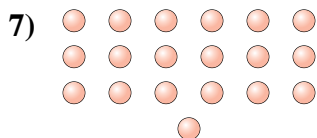
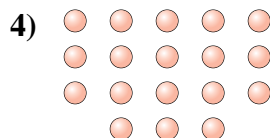





Determine if the number of shapes is even or odd.



Answers

1. _____

2. _____

3. _____

4. _____

5. _____

6. _____

7. _____


8. _____


9. _____

10. _____

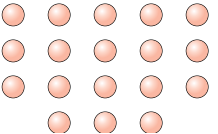


Determine if the number of shapes is even or odd.

1) 
20

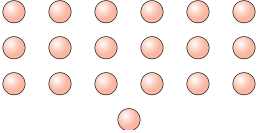
2) 
5


3) 
11

4) 
18

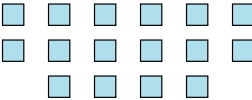
5) 
6

6) 
14

7) 
19

8) 
9

9) 
11

10) 
16

Answers

1. even

2. odd

3. odd

4. even

5. even

6. even

7. odd

8. odd

9. odd

10. even