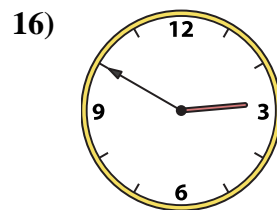
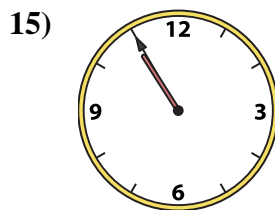
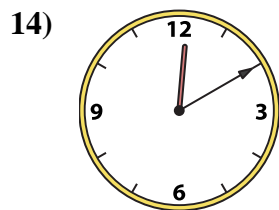
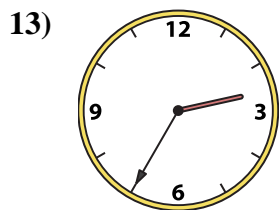
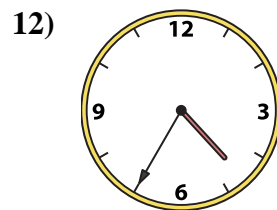
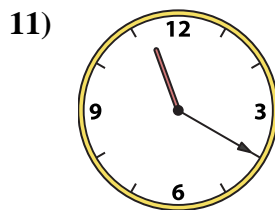
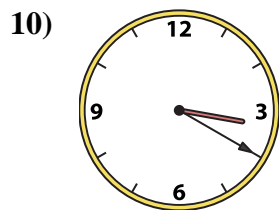
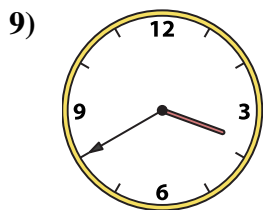
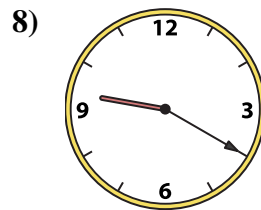
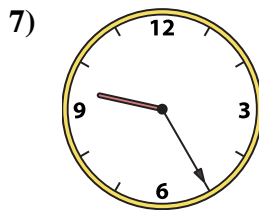
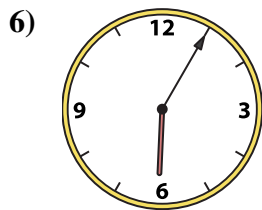
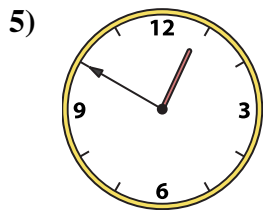
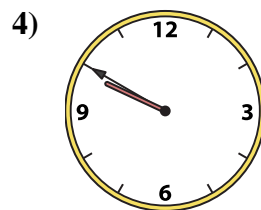
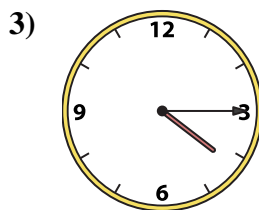
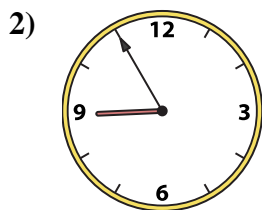





Matching Clocks

Name: _____

Match the analog clock to the digital clock.



A. **9:50**

B. **9:20**

C. **11:20**

D. **12:10**

E. **2:50**

F. **2:35**

G. **4:35**

H. **9:25**

I. **3:40**

J. **12:50**

K. **4:15**

L. **12:20**

M. **8:55**

N. **3:20**

O. **6:05**

P. **10:55**

Answers

1. _____

2. _____

3. _____

4. _____

5. _____

6. _____

7. _____

8. _____

9. _____

10. _____

11. _____

12. _____

13. _____

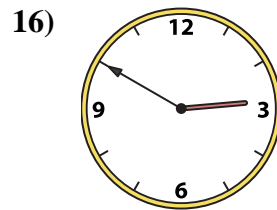
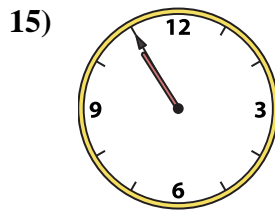
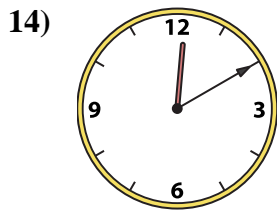
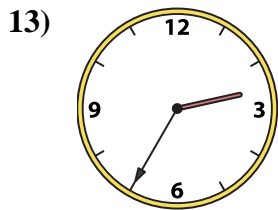
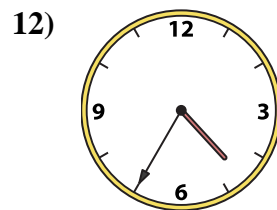
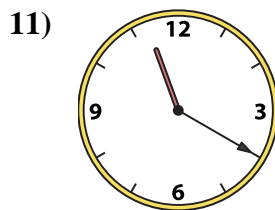
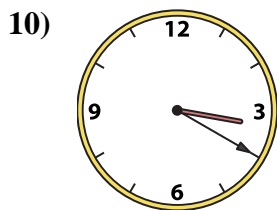
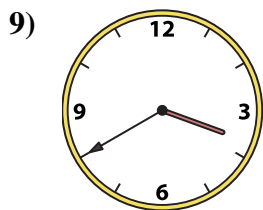
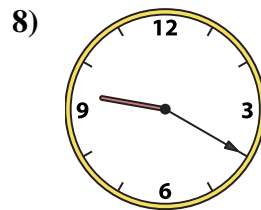
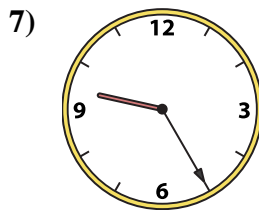
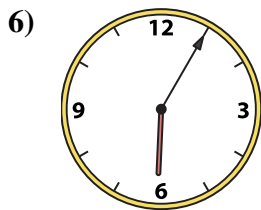
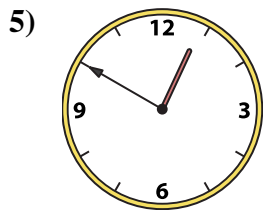
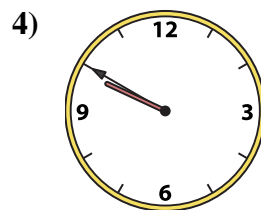
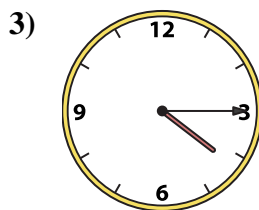
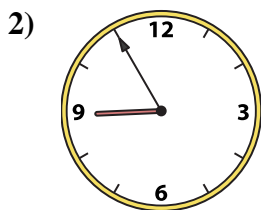

14. _____

15. _____

16. _____



Match the analog clock to the digital clock.



A. **9:50**

B. **9:20**

C. **11:20**

D. **12:10**

E. **2:50**

F. **2:35**

G. **4:35**

H. **9:25**

I. **3:40**

J. **12:50**

K. **4:15**

L. **12:20**

M. **8:55**

N. **3:20**

O. **6:05**

P. **10:55**

Answers

1. **L**

2. **M**

3. **K**

4. **A**

5. **J**

6. **O**

7. **H**

8. **B**

9. **I**

10. **N**

11. **C**

12. **G**

13. **F**

14. **D**

15. **P**

16. **E**