



Solve each problem.

1) Start: _____

Elapsed: 1 hr & 35 mins

End: 6:45



2) Start: _____

Elapsed: 2 hrs & 40 mins

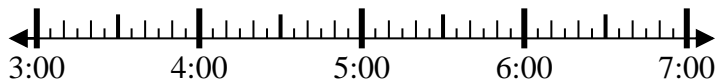
End: 4:50



3) Start: _____

Elapsed: 1 hr & 35 mins

End: 4:40



4) Start: _____

Elapsed: 1 hr & 40 mins

End: 1:55



5) Start: _____

Elapsed: 1 hr & 40 mins

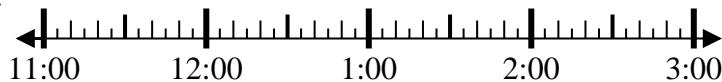
End: 5:55



6) Start: _____

Elapsed: 1 hr & 35 mins

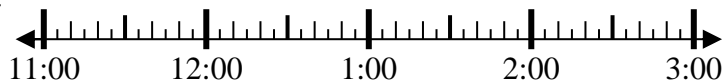
End: 1:05



7) Start: _____

Elapsed: 1 hr & 20 mins

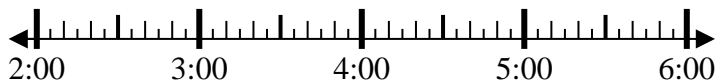
End: 1:05



8) Start: _____

Elapsed: 1 hr & 25 mins

End: 3:55



Answers

1. _____

2. _____

3. _____

4. _____

5. _____

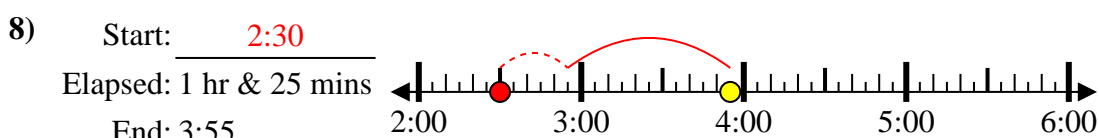
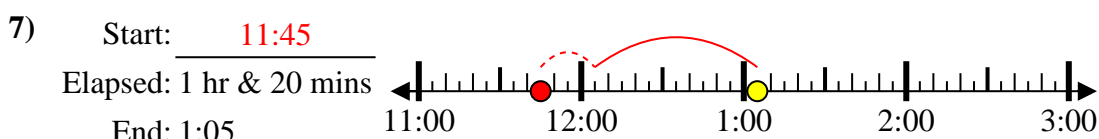
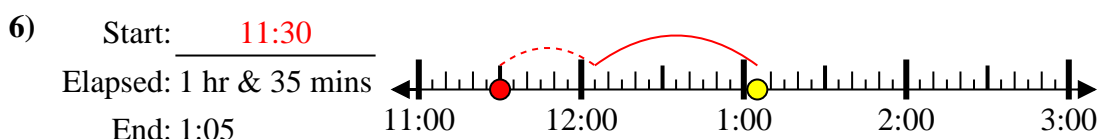
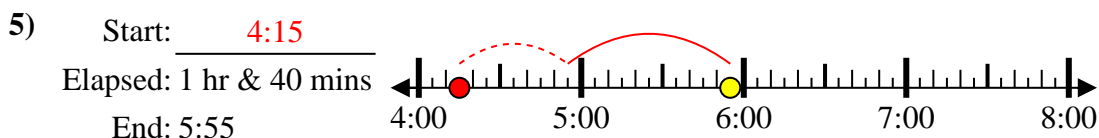
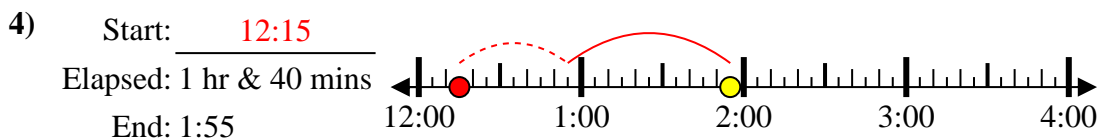
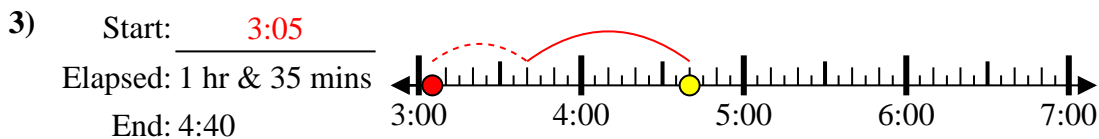
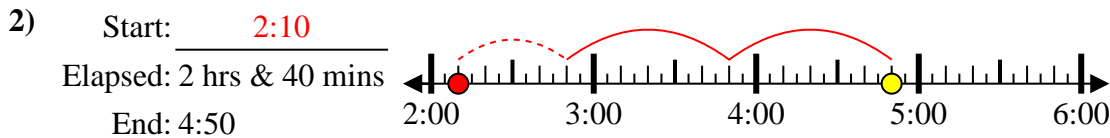
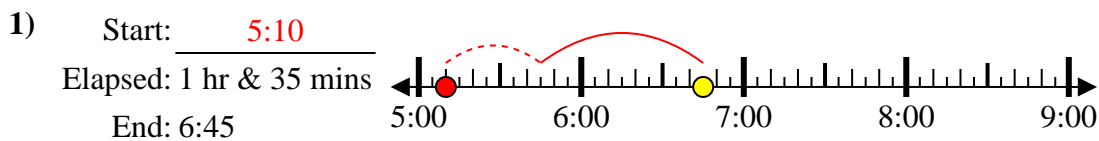
6. _____

7. _____

8. _____



Solve each problem.



Answers

1. 5:10
2. 2:10
3. 3:05
4. 12:15
5. 4:15
6. 11:30
7. 11:45
8. 2:30