



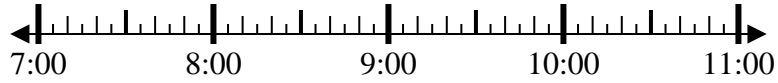
Solve each problem.

Answers

1) Start: 7:25

Elapsed: 1 hr & 10 mins

End: _____



1. _____

2) Start: 1:25

Elapsed: 1 hr & 40 mins

End: _____

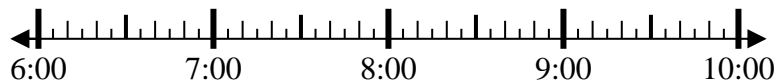


2. _____

3) Start: 6:10

Elapsed: 1 hr & 25 mins

End: _____



3. _____

4) Start: 7:15

Elapsed: 1 hr & 30 mins

End: _____



4. _____

5) Start: 5:55

Elapsed: 2 hrs & 15 mins

End: _____



5. _____

6) Start: 5:50

Elapsed: 2 hrs & 45 mins

End: _____



6. _____

7) Start: 11:20

Elapsed: 1 hr & 30 mins

End: _____



7. _____

8) Start: 4:05

Elapsed: 2 hrs & 30 mins

End: _____



8. _____

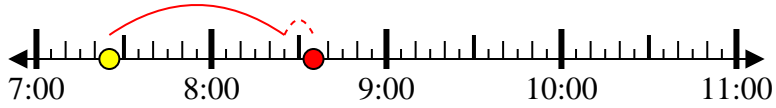


Solve each problem.

1) Start: 7:25

Elapsed: 1 hr & 10 mins

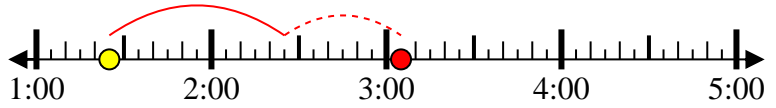
End: 8:35



2) Start: 1:25

Elapsed: 1 hr & 40 mins

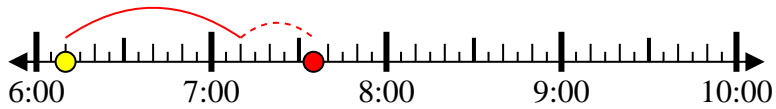
End: 3:05



3) Start: 6:10

Elapsed: 1 hr & 25 mins

End: 7:35



4) Start: 7:15

Elapsed: 1 hr & 30 mins

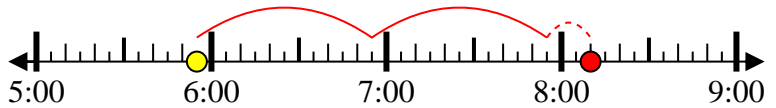
End: 8:45



5) Start: 5:55

Elapsed: 2 hrs & 15 mins

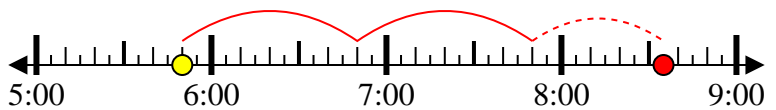
End: 8:10



6) Start: 5:50

Elapsed: 2 hrs & 45 mins

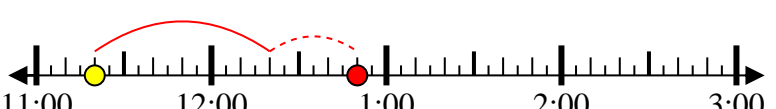
End: 8:35



7) Start: 11:20

Elapsed: 1 hr & 30 mins

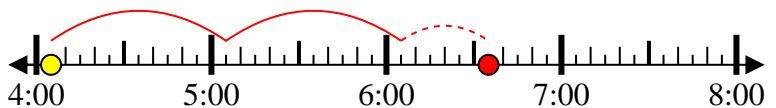
End: 12:50



8) Start: 4:05

Elapsed: 2 hrs & 30 mins

End: 6:35



Answers

1. 8:35

2. 3:05

3. 7:35

4. 8:45

5. 8:10

6. 8:35

7. 12:50

8. 6:35



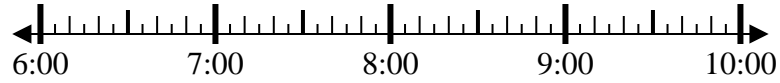
Solve each problem.

Answers

1) Start: 6:45

Elapsed: 1 hr & 25 mins

End: _____

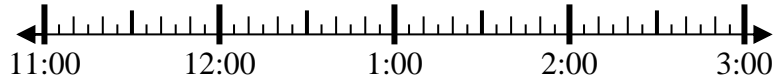


1. _____

2) Start: 11:05

Elapsed: 1 hr & 50 mins

End: _____

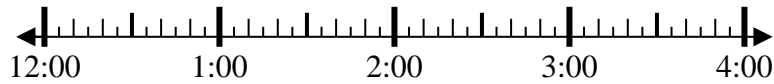


2. _____

3) Start: 12:00

Elapsed: 2 hrs & 20 mins

End: _____

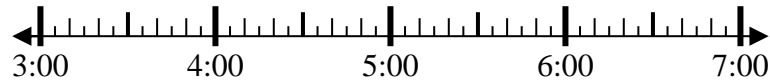


3. _____

4) Start: 3:10

Elapsed: 1 hr & 50 mins

End: _____

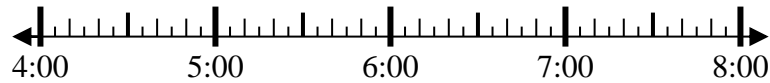


4. _____

5) Start: 4:20

Elapsed: 1 hr & 30 mins

End: _____

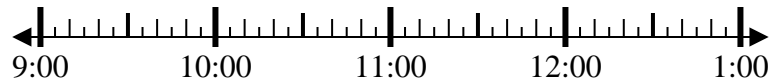


5. _____

6) Start: 9:10

Elapsed: 1 hr & 15 mins

End: _____

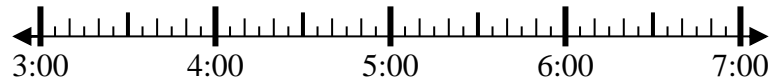


6. _____

7) Start: 3:30

Elapsed: 2 hrs & 40 mins

End: _____

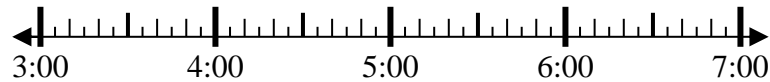


7. _____

8) Start: 3:55

Elapsed: 2 hrs & 25 mins

End: _____



8. _____



Solve each problem.

1) Start: 6:45

Elapsed: 1 hr & 25 mins

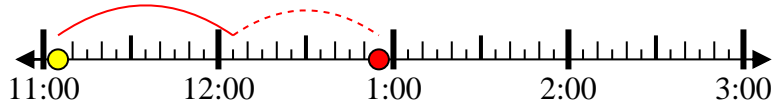
End: 8:10



2) Start: 11:05

Elapsed: 1 hr & 50 mins

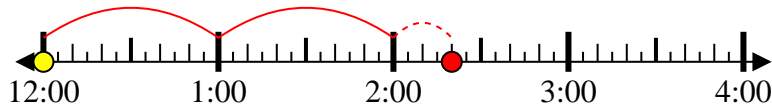
End: 12:55



3) Start: 12:00

Elapsed: 2 hrs & 20 mins

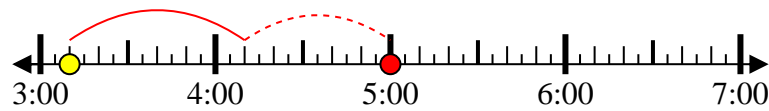
End: 2:20



4) Start: 3:10

Elapsed: 1 hr & 50 mins

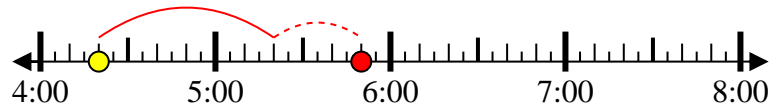
End: 5:00



5) Start: 4:20

Elapsed: 1 hr & 30 mins

End: 5:50



6) Start: 9:10

Elapsed: 1 hr & 15 mins

End: 10:25



7) Start: 3:30

Elapsed: 2 hrs & 40 mins

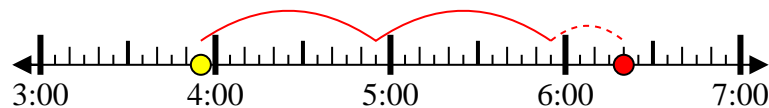
End: 6:10



8) Start: 3:55

Elapsed: 2 hrs & 25 mins

End: 6:20



Answers

1. 8:10
2. 12:55
3. 2:20
4. 5:00
5. 5:50
6. 10:25
7. 6:10
8. 6:20



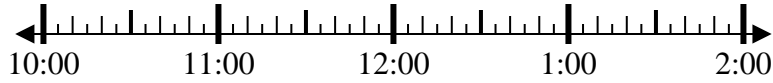
Solve each problem.

Answers

1) Start: 10:15

Elapsed: 2 hrs & 20 mins

End: _____

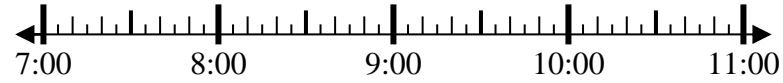


1. _____

2) Start: 7:50

Elapsed: 2 hrs & 10 mins

End: _____



2. _____

3) Start: 2:10

Elapsed: 2 hrs & 30 mins

End: _____

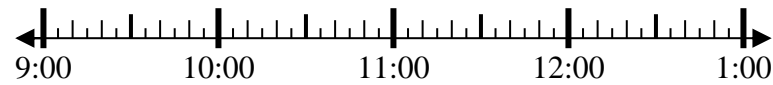


3. _____

4) Start: 9:20

Elapsed: 2 hrs & 45 mins

End: _____

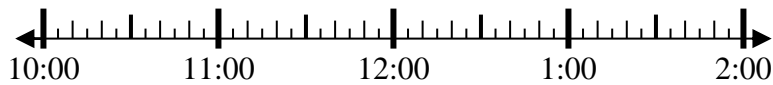


4. _____

5) Start: 10:00

Elapsed: 1 hr & 20 mins

End: _____

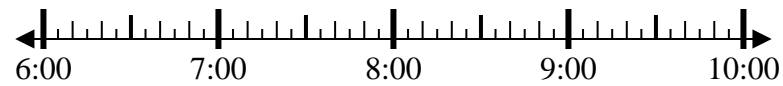


5. _____

6) Start: 6:20

Elapsed: 1 hr & 50 mins

End: _____

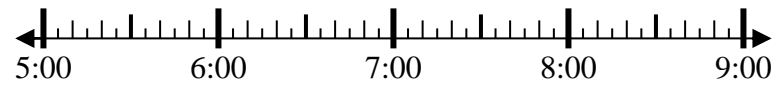


6. _____

7) Start: 5:15

Elapsed: 1 hr & 20 mins

End: _____



7. _____

8) Start: 8:50

Elapsed: 1 hr & 15 mins

End: _____



8. _____



Solve each problem.

1) Start: 10:15

Elapsed: 2 hrs & 20 mins

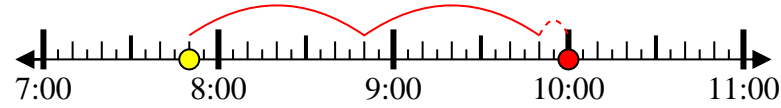
End: 12:35



2) Start: 7:50

Elapsed: 2 hrs & 10 mins

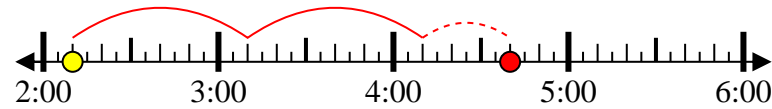
End: 10:00



3) Start: 2:10

Elapsed: 2 hrs & 30 mins

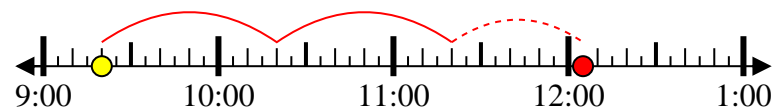
End: 4:40



4) Start: 9:20

Elapsed: 2 hrs & 45 mins

End: 12:05



5) Start: 10:00

Elapsed: 1 hr & 20 mins

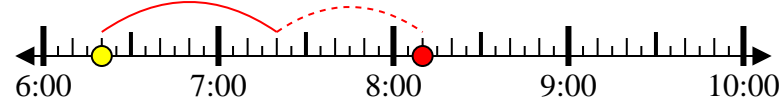
End: 11:20



6) Start: 6:20

Elapsed: 1 hr & 50 mins

End: 8:10



7) Start: 5:15

Elapsed: 1 hr & 20 mins

End: 6:35



8) Start: 8:50

Elapsed: 1 hr & 15 mins

End: 10:05



Answers

1. 12:35
2. 10:00
3. 4:40
4. 12:05
5. 11:20
6. 8:10
7. 6:35
8. 10:05



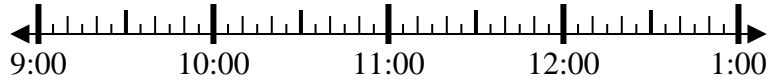
Solve each problem.

Answers

1) Start: 9:05

Elapsed: 1 hr & 30 mins

End: _____

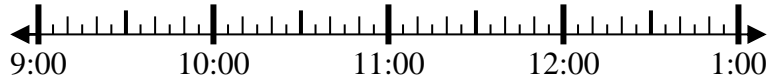


1. _____

2) Start: 9:10

Elapsed: 1 hr & 15 mins

End: _____



2. _____

3) Start: 1:30

Elapsed: 1 hr & 20 mins

End: _____



3. _____

4) Start: 7:20

Elapsed: 1 hr & 30 mins

End: _____



4. _____

5) Start: 8:00

Elapsed: 2 hrs & 15 mins

End: _____

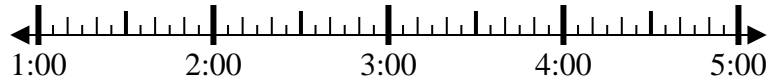


5. _____

6) Start: 1:25

Elapsed: 2 hrs & 50 mins

End: _____

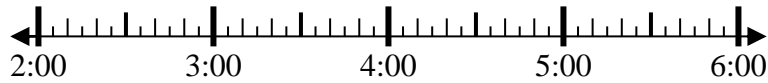


6. _____

7) Start: 2:10

Elapsed: 1 hr & 55 mins

End: _____

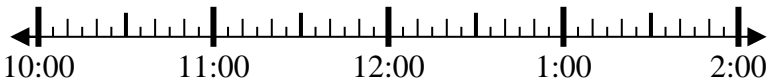


7. _____

8) Start: 10:10

Elapsed: 2 hrs & 10 mins

End: _____



8. _____



Solve each problem.

1) Start: 9:05

Elapsed: 1 hr & 30 mins

End: 10:35



2) Start: 9:10

Elapsed: 1 hr & 15 mins

End: 10:25



3) Start: 1:30

Elapsed: 1 hr & 20 mins

End: 2:50



4) Start: 7:20

Elapsed: 1 hr & 30 mins

End: 8:50



5) Start: 8:00

Elapsed: 2 hrs & 15 mins

End: 10:15



6) Start: 1:25

Elapsed: 2 hrs & 50 mins

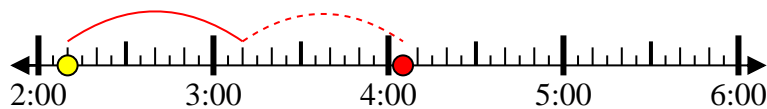
End: 4:15



7) Start: 2:10

Elapsed: 1 hr & 55 mins

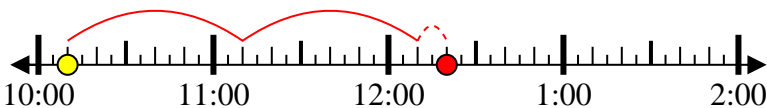
End: 4:05



8) Start: 10:10

Elapsed: 2 hrs & 10 mins

End: 12:20



Answers

1. 10:35
2. 10:25
3. 2:50
4. 8:50
5. 10:15
6. 4:15
7. 4:05
8. 12:20

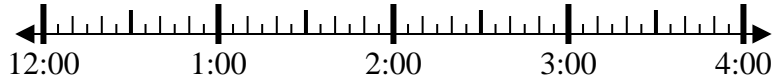


Solve each problem.

1) Start: 12:30

Elapsed: 2 hrs & 30 mins

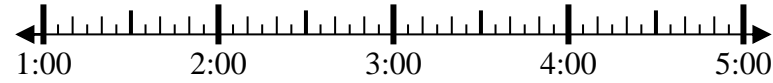
End: _____



2) Start: 1:00

Elapsed: 2 hrs & 25 mins

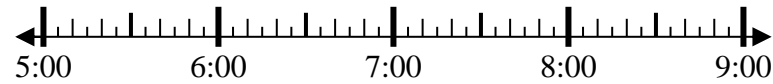
End: _____



3) Start: 5:30

Elapsed: 1 hr & 20 mins

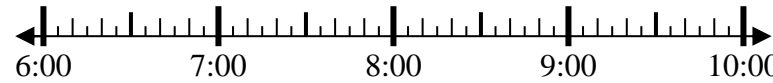
End: _____



4) Start: 6:50

Elapsed: 1 hr & 30 mins

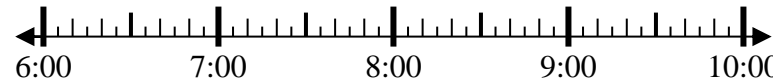
End: _____



5) Start: 6:15

Elapsed: 1 hr & 20 mins

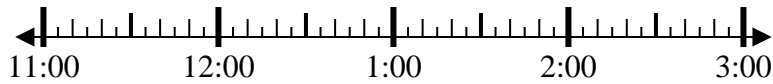
End: _____



6) Start: 11:25

Elapsed: 1 hr & 50 mins

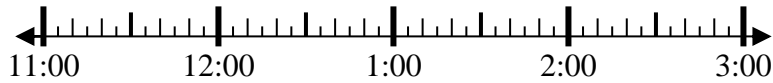
End: _____



7) Start: 11:25

Elapsed: 2 hrs & 30 mins

End: _____



8) Start: 2:10

Elapsed: 2 hrs & 20 mins

End: _____



Answers

1. _____
2. _____
3. _____
4. _____
5. _____
6. _____
7. _____
8. _____



Solve each problem.

1) Start: 12:30

Elapsed: 2 hrs & 30 mins

End: 3:00



2) Start: 1:00

Elapsed: 2 hrs & 25 mins

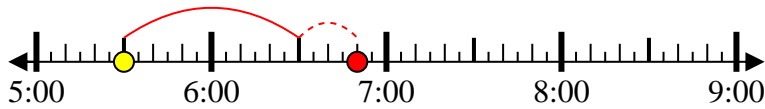
End: 3:25



3) Start: 5:30

Elapsed: 1 hr & 20 mins

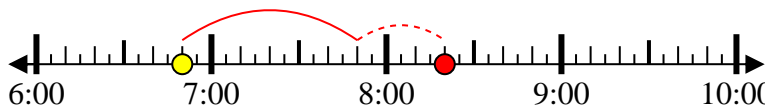
End: 6:50



4) Start: 6:50

Elapsed: 1 hr & 30 mins

End: 8:20



5) Start: 6:15

Elapsed: 1 hr & 20 mins

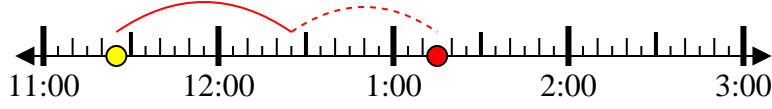
End: 7:35



6) Start: 11:25

Elapsed: 1 hr & 50 mins

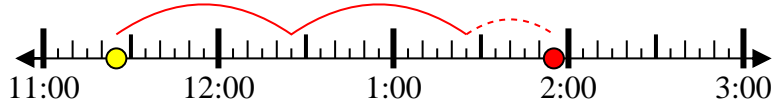
End: 1:15



7) Start: 11:25

Elapsed: 2 hrs & 30 mins

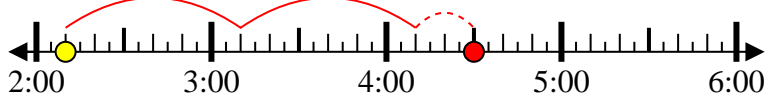
End: 1:55



8) Start: 2:10

Elapsed: 2 hrs & 20 mins

End: 4:30



Answers

1. 3:00
2. 3:25
3. 6:50
4. 8:20
5. 7:35
6. 1:15
7. 1:55
8. 4:30

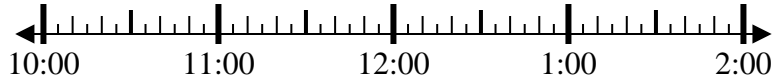


Solve each problem.

1) Start: 10:05

Elapsed: 2 hrs & 50 mins

End: _____



2) Start: 4:50

Elapsed: 2 hrs & 25 mins

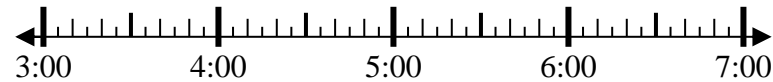
End: _____



3) Start: 3:15

Elapsed: 2 hrs & 25 mins

End: _____



4) Start: 11:40

Elapsed: 1 hr & 55 mins

End: _____



5) Start: 2:15

Elapsed: 2 hrs & 50 mins

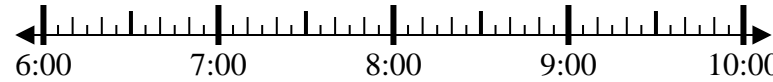
End: _____



6) Start: 6:15

Elapsed: 1 hr & 30 mins

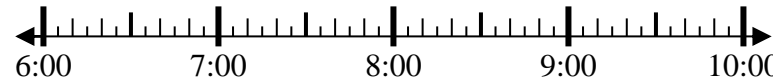
End: _____



7) Start: 6:50

Elapsed: 1 hr & 20 mins

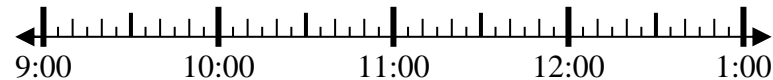
End: _____



8) Start: 9:20

Elapsed: 1 hr & 35 mins

End: _____



Answers

1. _____
2. _____
3. _____
4. _____
5. _____
6. _____
7. _____
8. _____



Solve each problem.

1) Start: 10:05

Elapsed: 2 hrs & 50 mins

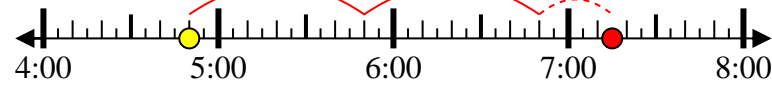
End: 12:55



2) Start: 4:50

Elapsed: 2 hrs & 25 mins

End: 7:15



3) Start: 3:15

Elapsed: 2 hrs & 25 mins

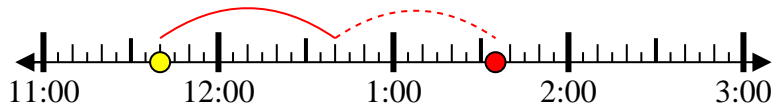
End: 5:40



4) Start: 11:40

Elapsed: 1 hr & 55 mins

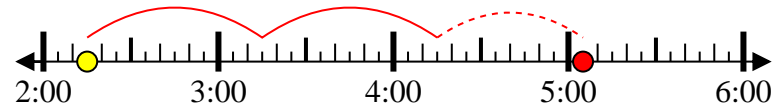
End: 1:35



5) Start: 2:15

Elapsed: 2 hrs & 50 mins

End: 5:05



6) Start: 6:15

Elapsed: 1 hr & 30 mins

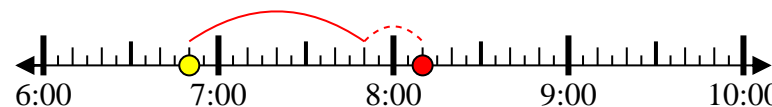
End: 7:45



7) Start: 6:50

Elapsed: 1 hr & 20 mins

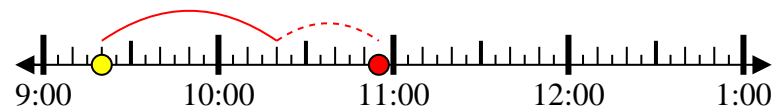
End: 8:10



8) Start: 9:20

Elapsed: 1 hr & 35 mins

End: 10:55



Answers

1. 12:55
2. 7:15
3. 5:40
4. 1:35
5. 5:05
6. 7:45
7. 8:10
8. 10:55

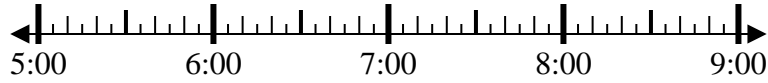


Solve each problem.

1) Start: 5:40

Elapsed: 1 hr & 15 mins

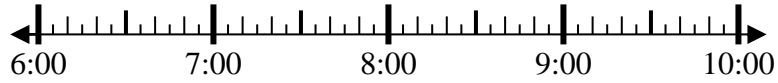
End: _____



2) Start: 6:40

Elapsed: 1 hr & 30 mins

End: _____



3) Start: 7:40

Elapsed: 2 hrs & 40 mins

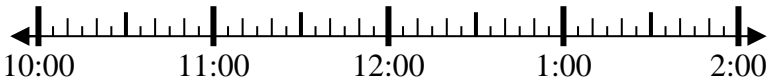
End: _____



4) Start: 10:05

Elapsed: 1 hr & 30 mins

End: _____



5) Start: 10:20

Elapsed: 2 hrs & 30 mins

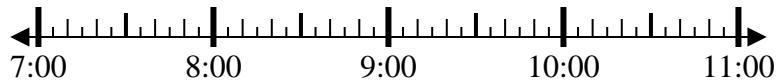
End: _____



6) Start: 7:50

Elapsed: 1 hr & 35 mins

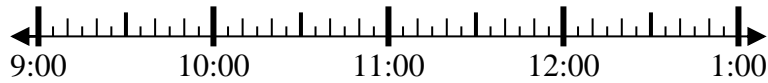
End: _____



7) Start: 9:20

Elapsed: 1 hr & 20 mins

End: _____



8) Start: 6:50

Elapsed: 1 hr & 30 mins

End: _____



Answers

1. _____
2. _____
3. _____
4. _____
5. _____
6. _____
7. _____
8. _____



Solve each problem.

1) Start: 5:40

Elapsed: 1 hr & 15 mins

End: 6:55



2) Start: 6:40

Elapsed: 1 hr & 30 mins

End: 8:10



3) Start: 7:40

Elapsed: 2 hrs & 40 mins

End: 10:20



4) Start: 10:05

Elapsed: 1 hr & 30 mins

End: 11:35



5) Start: 10:20

Elapsed: 2 hrs & 30 mins

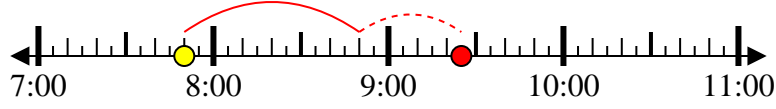
End: 12:50



6) Start: 7:50

Elapsed: 1 hr & 35 mins

End: 9:25



7) Start: 9:20

Elapsed: 1 hr & 20 mins

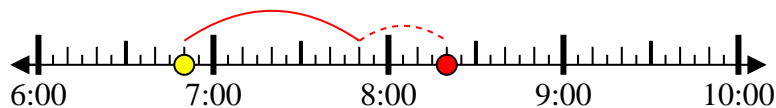
End: 10:40



8) Start: 6:50

Elapsed: 1 hr & 30 mins

End: 8:20



Answers

1. 6:55

2. 8:10

3. 10:20

4. 11:35

5. 12:50

6. 9:25

7. 10:40

8. 8:20

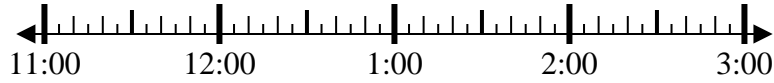


Solve each problem.

1) Start: 11:00

Elapsed: 2 hrs & 30 mins

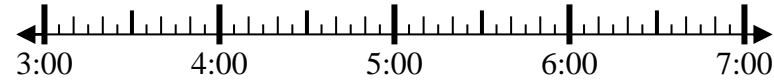
End: _____



2) Start: 3:00

Elapsed: 1 hr & 15 mins

End: _____



3) Start: 7:15

Elapsed: 2 hrs & 40 mins

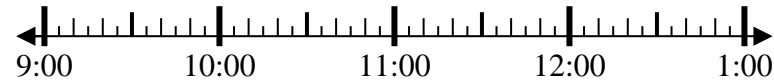
End: _____



4) Start: 9:50

Elapsed: 1 hr & 45 mins

End: _____



5) Start: 2:15

Elapsed: 1 hr & 45 mins

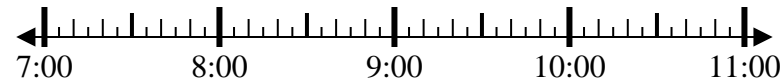
End: _____



6) Start: 7:25

Elapsed: 2 hrs & 25 mins

End: _____



7) Start: 5:45

Elapsed: 2 hrs & 40 mins

End: _____



8) Start: 6:20

Elapsed: 1 hr & 30 mins

End: _____



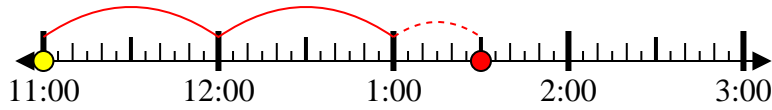
Answers

1. _____
2. _____
3. _____
4. _____
5. _____
6. _____
7. _____
8. _____



Solve each problem.

1) Start: 11:00
 Elapsed: 2 hrs & 30 mins
 End: 1:30



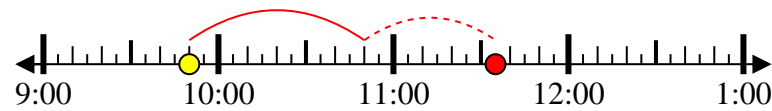
2) Start: 3:00
 Elapsed: 1 hr & 15 mins
 End: 4:15



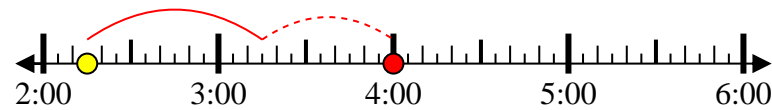
3) Start: 7:15
 Elapsed: 2 hrs & 40 mins
 End: 9:55



4) Start: 9:50
 Elapsed: 1 hr & 45 mins
 End: 11:35



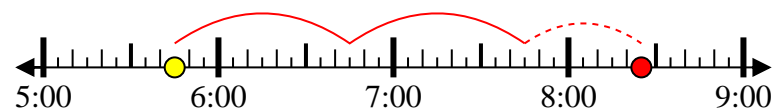
5) Start: 2:15
 Elapsed: 1 hr & 45 mins
 End: 4:00



6) Start: 7:25
 Elapsed: 2 hrs & 25 mins
 End: 9:50



7) Start: 5:45
 Elapsed: 2 hrs & 40 mins
 End: 8:25



8) Start: 6:20
 Elapsed: 1 hr & 30 mins
 End: 7:50



Answers

1. 1:30
2. 4:15
3. 9:55
4. 11:35
5. 4:00
6. 9:50
7. 8:25
8. 7:50

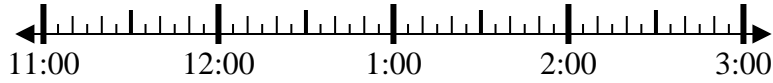


Solve each problem.

1) Start: 11:40

Elapsed: 1 hr & 40 mins

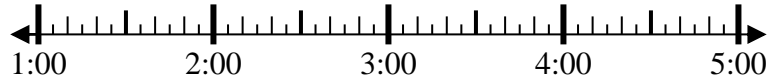
End: _____



2) Start: 1:25

Elapsed: 2 hrs & 40 mins

End: _____



3) Start: 7:40

Elapsed: 1 hr & 35 mins

End: _____



4) Start: 1:15

Elapsed: 2 hrs & 50 mins

End: _____



5) Start: 7:10

Elapsed: 2 hrs & 35 mins

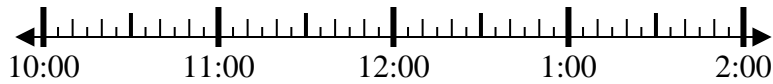
End: _____



6) Start: 10:20

Elapsed: 1 hr & 10 mins

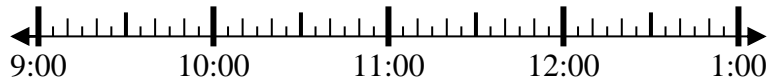
End: _____



7) Start: 9:50

Elapsed: 2 hrs & 25 mins

End: _____



8) Start: 1:25

Elapsed: 1 hr & 10 mins

End: _____



Answers

1. _____
2. _____
3. _____
4. _____
5. _____
6. _____
7. _____
8. _____



Solve each problem.

1) Start: 11:40

Elapsed: 1 hr & 40 mins

End: 1:20



2) Start: 1:25

Elapsed: 2 hrs & 40 mins

End: 4:05



3) Start: 7:40

Elapsed: 1 hr & 35 mins

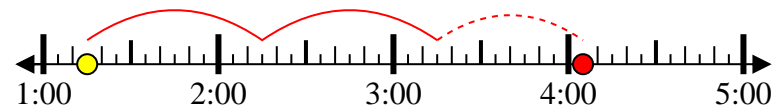
End: 9:15



4) Start: 1:15

Elapsed: 2 hrs & 50 mins

End: 4:05



5) Start: 7:10

Elapsed: 2 hrs & 35 mins

End: 9:45



6) Start: 10:20

Elapsed: 1 hr & 10 mins

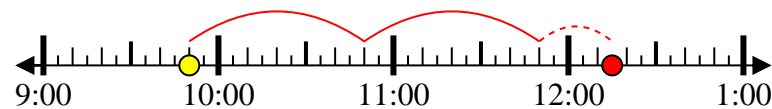
End: 11:30



7) Start: 9:50

Elapsed: 2 hrs & 25 mins

End: 12:15



8) Start: 1:25

Elapsed: 1 hr & 10 mins

End: 2:35



Answers

1. 1:20

2. 4:05

3. 9:15

4. 4:05

5. 9:45

6. 11:30

7. 12:15

8. 2:35

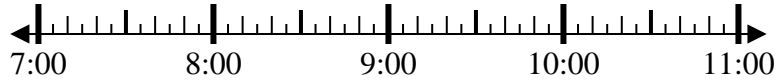


Solve each problem.

1) Start: 7:35

Elapsed: 2 hrs & 45 mins

End: _____



2) Start: 7:40

Elapsed: 2 hrs & 20 mins

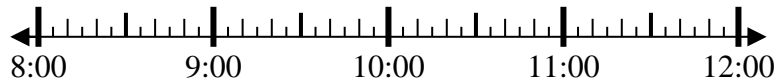
End: _____



3) Start: 8:25

Elapsed: 1 hr & 40 mins

End: _____



4) Start: 2:10

Elapsed: 1 hr & 10 mins

End: _____



5) Start: 12:50

Elapsed: 2 hrs & 25 mins

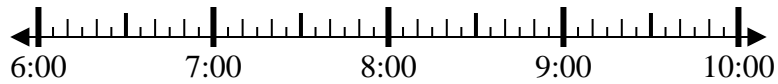
End: _____



6) Start: 6:05

Elapsed: 2 hrs & 35 mins

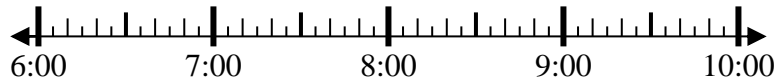
End: _____



7) Start: 6:35

Elapsed: 2 hrs & 35 mins

End: _____



8) Start: 4:10

Elapsed: 1 hr & 30 mins

End: _____



Answers

1. _____
2. _____
3. _____
4. _____
5. _____
6. _____
7. _____
8. _____

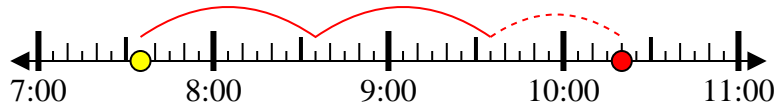


Solve each problem.

1) Start: 7:35

Elapsed: 2 hrs & 45 mins

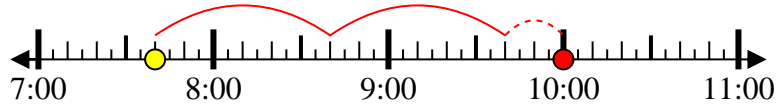
End: 10:20



2) Start: 7:40

Elapsed: 2 hrs & 20 mins

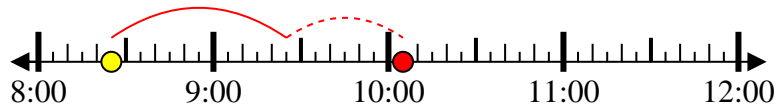
End: 10:00



3) Start: 8:25

Elapsed: 1 hr & 40 mins

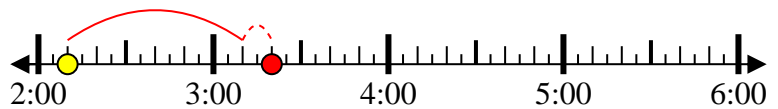
End: 10:05



4) Start: 2:10

Elapsed: 1 hr & 10 mins

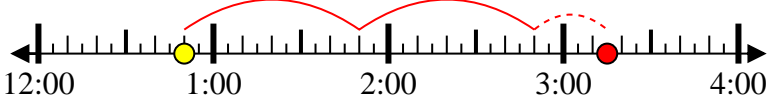
End: 3:20



5) Start: 12:50

Elapsed: 2 hrs & 25 mins

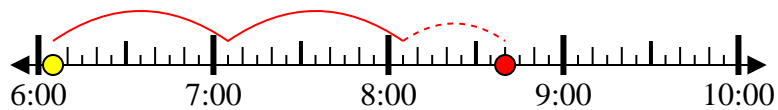
End: 3:15



6) Start: 6:05

Elapsed: 2 hrs & 35 mins

End: 8:40



7) Start: 6:35

Elapsed: 2 hrs & 35 mins

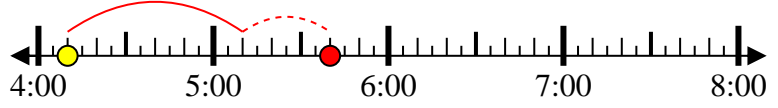
End: 9:10



8) Start: 4:10

Elapsed: 1 hr & 30 mins

End: 5:40



Answers

1. 10:20
2. 10:00
3. 10:05
4. 3:20
5. 3:15
6. 8:40
7. 9:10
8. 5:40