

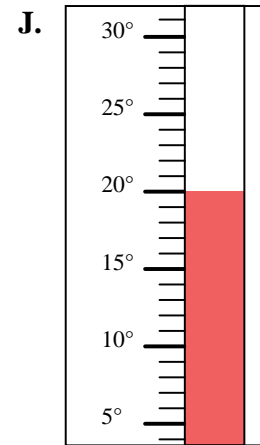
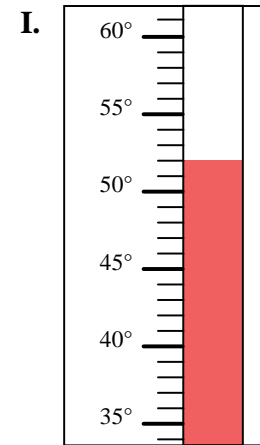
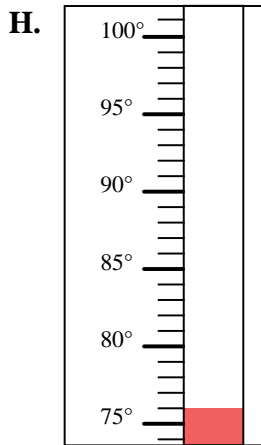
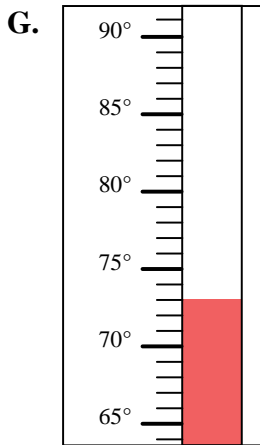
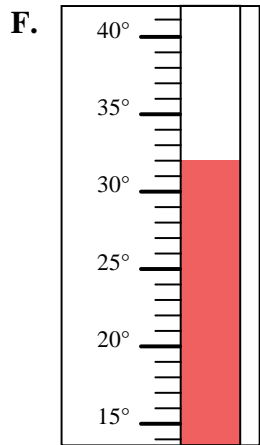
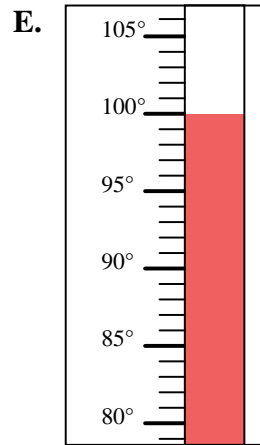
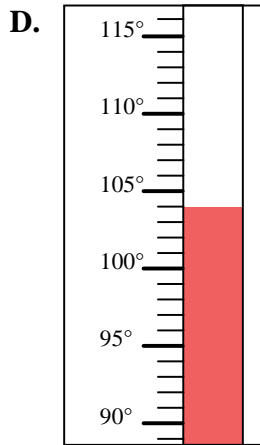
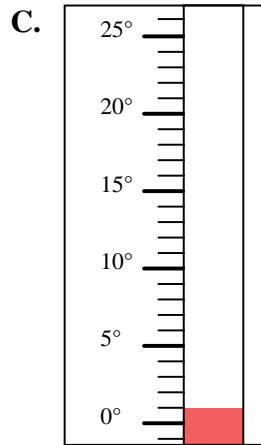
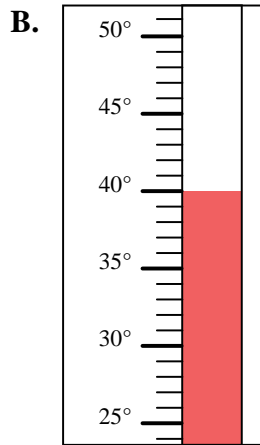
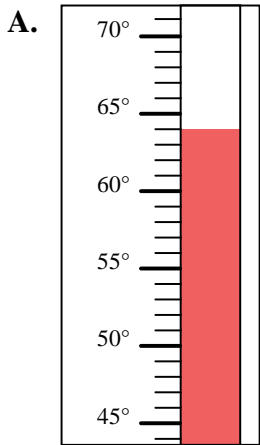


Determine which letter best answers each question.

Answers

- 1) Which thermometer best represents the temperature 100°?
- 2) Which thermometer best represents the temperature 20°?
- 3) Which thermometer best represents the temperature 40°?
- 4) Which thermometer best represents the temperature 64°?
- 5) Which thermometer best represents the temperature 52°?
- 6) Which thermometer best represents the temperature 32°?
- 7) Which thermometer best represents the temperature 1°?
- 8) Which thermometer best represents the temperature 73°?
- 9) Which thermometer best represents the temperature 104°?
- 10) Which thermometer best represents the temperature 76°?

1. _____
2. _____
3. _____
4. _____
5. _____
6. _____
7. _____
8. _____
9. _____
10. _____





Determine which letter best answers each question.

- 1) Which thermometer best represents the temperature 100°?
- 2) Which thermometer best represents the temperature 20°?
- 3) Which thermometer best represents the temperature 40°?
- 4) Which thermometer best represents the temperature 64°?
- 5) Which thermometer best represents the temperature 52°?
- 6) Which thermometer best represents the temperature 32°?
- 7) Which thermometer best represents the temperature 1°?
- 8) Which thermometer best represents the temperature 73°?
- 9) Which thermometer best represents the temperature 104°?
- 10) Which thermometer best represents the temperature 76°?

Answers

1. **E**
2. **J**
3. **B**
4. **A**
5. **I**
6. **F**
7. **C**
8. **G**
9. **D**
10. **H**

