



Solve each problem using a tape diagram.

- 1) For a party John bought 70 cupcakes. If 43 were eaten, how many cupcakes would John have left?

- 2) Gwen had 41 pieces of candy. 30 pieces are chocolate and the rest are sugary. How many pieces of candy does Gwen have that are sugary?

- 3) Billy and Isabel have 56 books. Isabel has 10. How many books does Billy have?

- 4) Maria had 49 photos on her computer. She deleted 30. How many photos does she have left?

- 5) Jerry owned 22 video games for his Playstation and Xbox. 11 of the games were for Xbox. How many games does Jerry have for playstation?

- 6) Bianca could send 56 text messages a day. If she sent 17, how many text messages does she have left she can send?

- 7) Rachel's hair was 61 centimeters long. If she cut off 20 centimeters, how long is her hair now?

Answers

1. _____

2. _____

3. _____

4. _____

5. _____

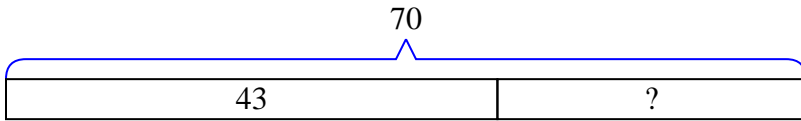
6. _____

7. _____

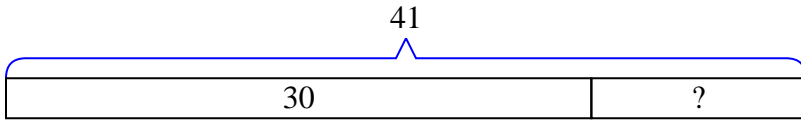


Solve each problem using a tape diagram.

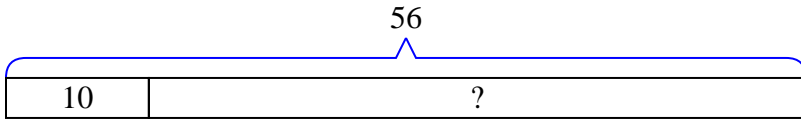
- 1) For a party John bought 70 cupcakes. If 43 were eaten, how many cupcakes would John have left?



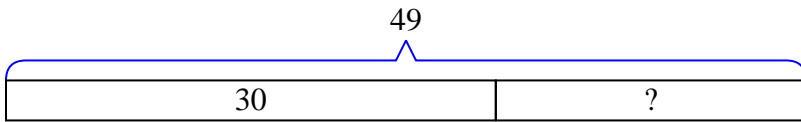
- 2) Gwen had 41 pieces of candy. 30 pieces are chocolate and the rest are sugary. How many pieces of candy does Gwen have that are sugary?



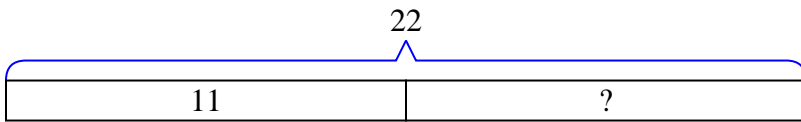
- 3) Billy and Isabel have 56 books. Isabel has 10. How many books does Billy have?



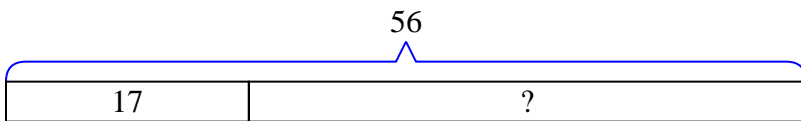
- 4) Maria had 49 photos on her computer. She deleted 30. How many photos does she have left?



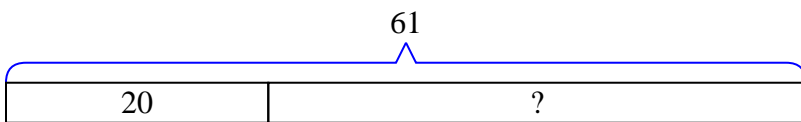
- 5) Jerry owned 22 video games for his Playstation and Xbox. 11 of the games were for Xbox. How many games does Jerry have for playstation?



- 6) Bianca could send 56 text messages a day. If she sent 17, how many text messages does she have left she can send?



- 7) Rachel's hair was 61 centimeters long. If she cut off 20 centimeters, how long is her hair now?



Answers

1. 27
 2. 11
 3. 46
 4. 19
 5. 11
 6. 39
 7. 41