

Solve each problem using a tape diagram.

- 1) While playing a game Billy had 40 lives. He lost 26 lives on a hard level. How many lives does he have left?
  
- 2) Bianca could send 62 text messages a day. If she sent 49, how many text messages does she have left she can send?
  
- 3) At the zoo a cage had 36 snakes. If 12 were hiding, how many snakes were not hiding?
  
- 4) Roger had 69 cherries. He ate 39 of them. How many cherries does Roger have left?
  
- 5) Emily had 73 pieces of candy. 31 pieces are chocolate and the rest are sugary. How many pieces of candy does Emily have that are sugary?
  
- 6) Dave owned 38 video games for his Playstation and Xbox. 27 of the games were for Xbox. How many games does Dave have for playstation?
  
- 7) Faye had 42 3DS games. If she gave 26 to her friend, how many would she have left?

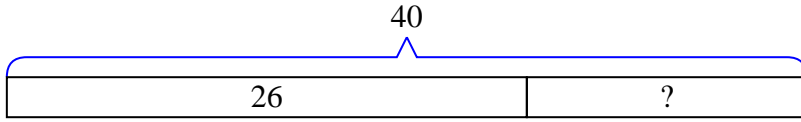
Answers

1. \_\_\_\_\_
2. \_\_\_\_\_
3. \_\_\_\_\_
4. \_\_\_\_\_
5. \_\_\_\_\_
6. \_\_\_\_\_
7. \_\_\_\_\_

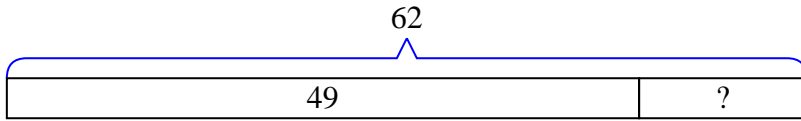


Solve each problem using a tape diagram.

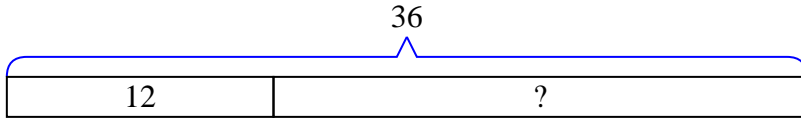
- 1) While playing a game Billy had 40 lives. He lost 26 lives on a hard level. How many lives does he have left?



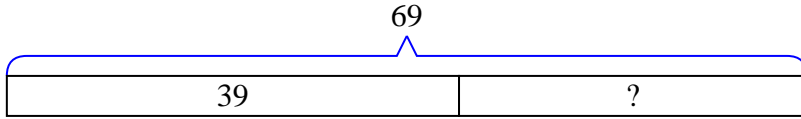
- 2) Bianca could send 62 text messages a day. If she sent 49, how many text messages does she have left she can send?



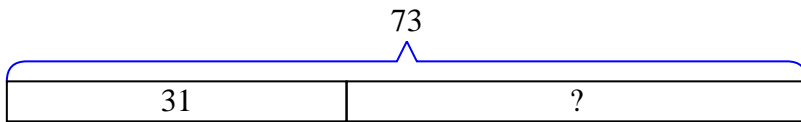
- 3) At the zoo a cage had 36 snakes. If 12 were hiding, how many snakes were not hiding?



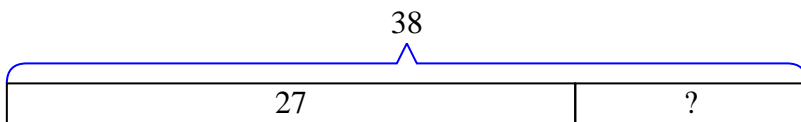
- 4) Roger had 69 cherries. He ate 39 of them. How many cherries does Roger have left?



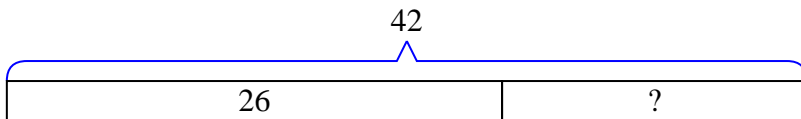
- 5) Emily had 73 pieces of candy. 31 pieces are chocolate and the rest are sugary. How many pieces of candy does Emily have that are sugary?



- 6) Dave owned 38 video games for his Playstation and Xbox. 27 of the games were for Xbox. How many games does Dave have for playstation?



- 7) Faye had 42 3DS games. If she gave 26 to her friend, how many would she have left?



Answers

1. 14
2. 13
3. 24
4. 30
5. 42
6. 11
7. 16