



Solve each problem using a tape diagram.

- 1) A store had 72 sodas on Monday. If they sold 24 of them on Tuesday, how many would they have left on Wednesday?

- 2) Bianca could send 75 text messages a day. If she sent 35, how many text messages does she have left she can send?

- 3) A museum had 50 paintings. If they got rid of 15 of them, how many pictures would they have left?

- 4) While playing a game Roger had 45 lives. He lost 23 lives on a hard level. How many lives does he have left?

- 5) For Halloween Oliver got 56 pounds of candy. If he gave 10 pounds to Emily, how many pounds would he have left?

- 6) Olivia's hair was 53 centimeters long. If she cut off 14 centimeters, how long is her hair now?

- 7) There were 41 people on the train. At the first stop 25 people got off. How many people are left on the train?

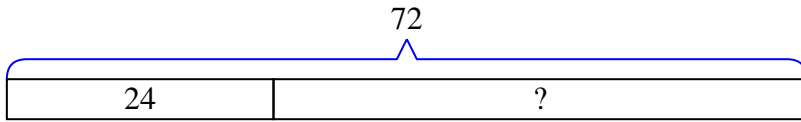
Answers

1. _____
2. _____
3. _____
4. _____
5. _____
6. _____
7. _____

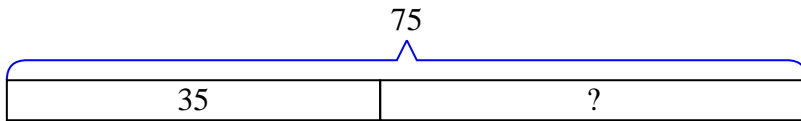


Solve each problem using a tape diagram.

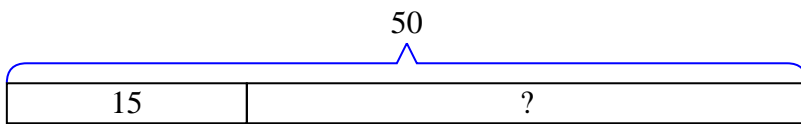
- 1) A store had 72 sodas on Monday. If they sold 24 of them on Tuesday, how many would they have left on Wednesday?



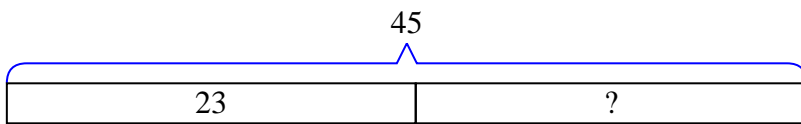
- 2) Bianca could send 75 text messages a day. If she sent 35, how many text messages does she have left she can send?



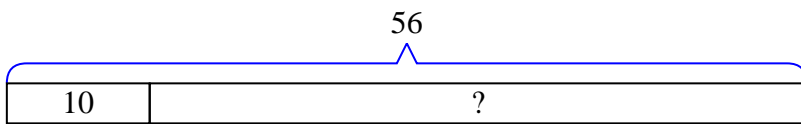
- 3) A museum had 50 paintings. If they got rid of 15 of them, how many pictures would they have left?



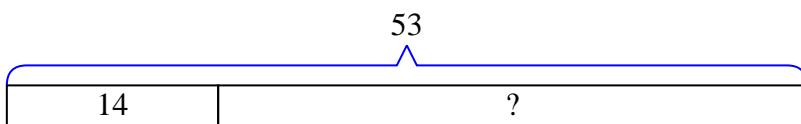
- 4) While playing a game Roger had 45 lives. He lost 23 lives on a hard level. How many lives does he have left?



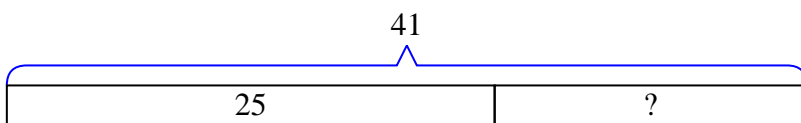
- 5) For Halloween Oliver got 56 pounds of candy. If he gave 10 pounds to Emily, how many pounds would he have left?



- 6) Olivia's hair was 53 centimeters long. If she cut off 14 centimeters, how long is her hair now?



- 7) There were 41 people on the train. At the first stop 25 people got off. How many people are left on the train?



Answers

1. 48
2. 40
3. 35
4. 22
5. 46
6. 39
7. 16