



Solve each problem using a tape diagram.

1) A museum had 75 paintings. If they got rid of 48 of them, how many pictures would they have left?

2) Bianca had 81 pieces of candy. 40 pieces are chocolate and the rest are sugary. How many pieces of candy does Bianca have that are sugary?

3) For Halloween Kaleb got 70 pounds of candy. If he gave 20 pounds to Katie, how many pounds would he have left?

4) A chef has 52 cherries. He sets aside 18 of them to make a pie. How many cherries would he still have?

5) A store has 47 shirts. If 24 are long sleeve, how many are short sleeve?

6) At the zoo a cage had 69 snakes. If 22 were hiding, how many snakes were not hiding?

7) Faye could send 62 text messages a day. If she sent 23, how many text messages does she have left she can send?

Answers

1. \_\_\_\_\_

2. \_\_\_\_\_

3. \_\_\_\_\_

4. \_\_\_\_\_

5. \_\_\_\_\_

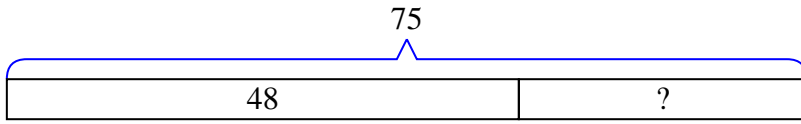
6. \_\_\_\_\_

7. \_\_\_\_\_

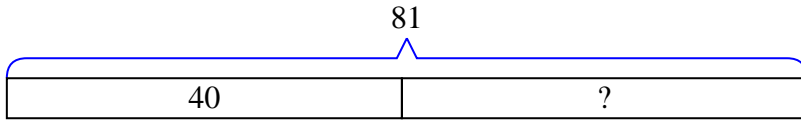


Solve each problem using a tape diagram.

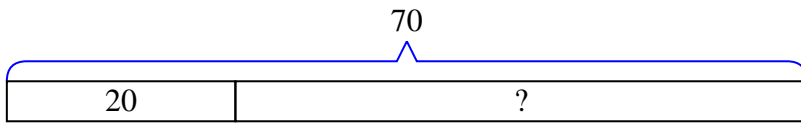
- 1) A museum had 75 paintings. If they got rid of 48 of them, how many pictures would they have left?



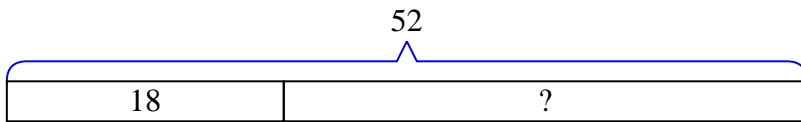
- 2) Bianca had 81 pieces of candy. 40 pieces are chocolate and the rest are sugary. How many pieces of candy does Bianca have that are sugary?



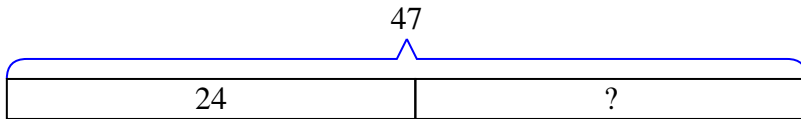
- 3) For Halloween Kaleb got 70 pounds of candy. If he gave 20 pounds to Katie, how many pounds would he have left?



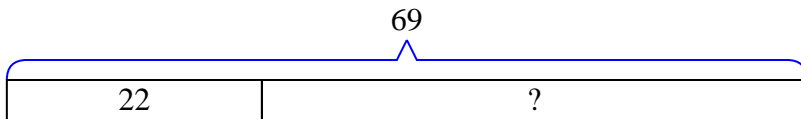
- 4) A chef has 52 cherries. He sets aside 18 of them to make a pie. How many cherries would he still have?



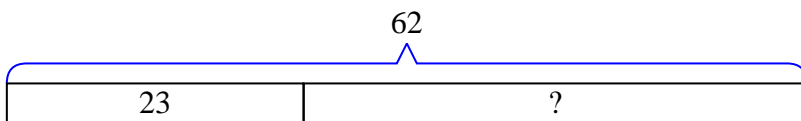
- 5) A store has 47 shirts. If 24 are long sleeve, how many are short sleeve?



- 6) At the zoo a cage had 69 snakes. If 22 were hiding, how many snakes were not hiding?



- 7) Faye could send 62 text messages a day. If she sent 23, how many text messages does she have left she can send?



Answers

1. 27
2. 41
3. 50
4. 34
5. 23
6. 47
7. 39