



Solve each problem using a tape diagram.

Answers

- 1) Billy had 66 apps on his phone. He deleted 34 of them. How many apps does Billy have left?

- 2) A clown had 70 balloons. He gave 27 away at a party. How many balloons would he have left over?

- 3) Kaleb owned 62 video games for his Playstation and Xbox. 30 of the games were for Xbox. How many games does Kaleb have for playstation?

- 4) A store has 80 shirts. If 31 are long sleeve, how many are short sleeve?

- 5) A baker made 79 cakes. 46 were chocolate and the rest were vanilla. How many cakes were vanilla?

- 6) A fast food restaurant sold 44 ice cream cones. They used waffle cones on 32 of them and the rest were sugar cones. How many sugar cones did they use?

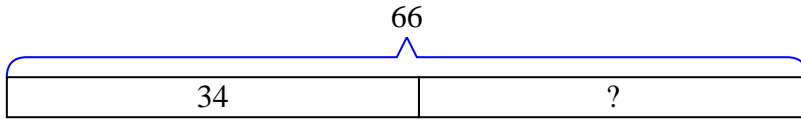
- 7) A chef has 79 cherries. He sets aside 32 of them to make a pie. How many cherries would he still have?

1. _____
2. _____
3. _____
4. _____
5. _____
6. _____
7. _____

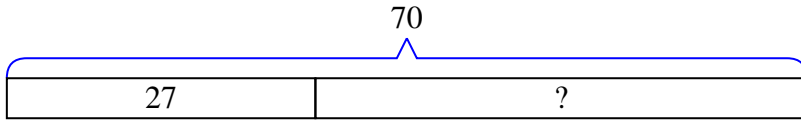


Solve each problem using a tape diagram.

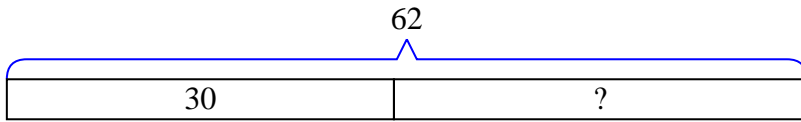
- 1) Billy had 66 apps on his phone. He deleted 34 of them. How many apps does Billy have left?



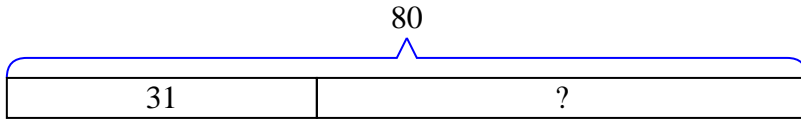
- 2) A clown had 70 balloons. He gave 27 away at a party. How many balloons would he have left over?



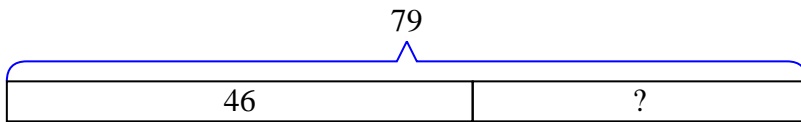
- 3) Kaleb owned 62 video games for his Playstation and Xbox. 30 of the games were for Xbox. How many games does Kaleb have for playstation?



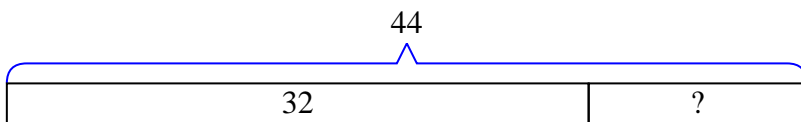
- 4) A store has 80 shirts. If 31 are long sleeve, how many are short sleeve?



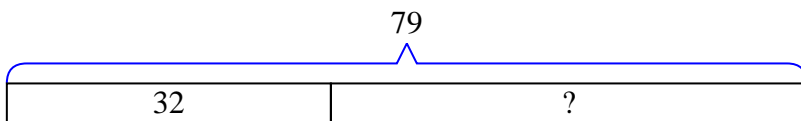
- 5) A baker made 79 cakes. 46 were chocolate and the rest were vanilla. How many cakes were vanilla?



- 6) A fast food restaurant sold 44 ice cream cones. They used waffle cones on 32 of them and the rest were sugar cones. How many sugar cones did they use?



- 7) A chef has 79 cherries. He sets aside 32 of them to make a pie. How many cherries would he still have?

Answers

1. 32
2. 43
3. 32
4. 49
5. 33
6. 12
7. 47