



Solve each problem using a tape diagram.

- 1) Billy has \$57. He decides to spend \$22 on new video game. How much money would he have left?
  
- 2) Bianca could send 47 text messages a day. If she sent 13, how many text messages does she have left she can send?
  
- 3) A baker made 87 cakes. 39 were chocolate and the rest were vanilla. How many cakes were vanilla?
  
- 4) For Halloween Roger got 85 pounds of candy. If he gave 44 pounds to Amy, how many pounds would he have left?
  
- 5) A museum had 64 paintings. If they got rid of 49 of them, how many pictures would they have left?
  
- 6) Dave and Olivia have 62 books. Olivia has 17. How many books does Dave have?
  
- 7) Sam owned 65 video games for his Playstation and Xbox. 46 of the games were for Xbox. How many games does Sam have for playstation?

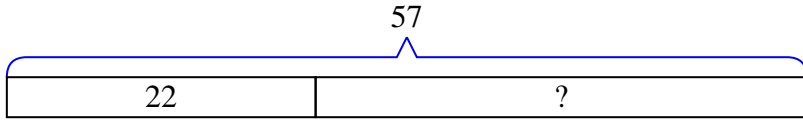
Answers

1. \_\_\_\_\_
2. \_\_\_\_\_
3. \_\_\_\_\_
4. \_\_\_\_\_
5. \_\_\_\_\_
6. \_\_\_\_\_
7. \_\_\_\_\_

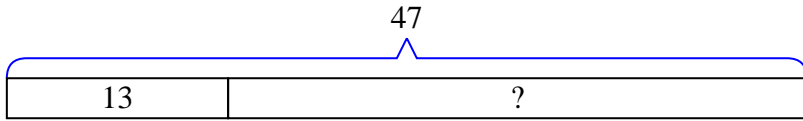


Solve each problem using a tape diagram.

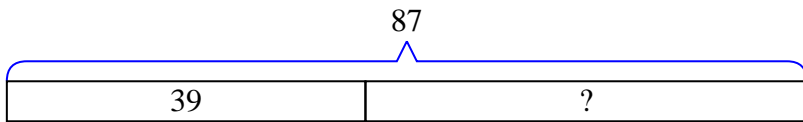
- 1) Billy has \$57. He decides to spend \$22 on new video game. How much money would he have left?



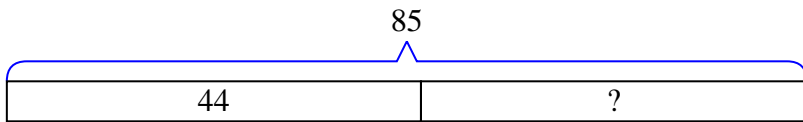
- 2) Bianca could send 47 text messages a day. If she sent 13, how many text messages does she have left she can send?



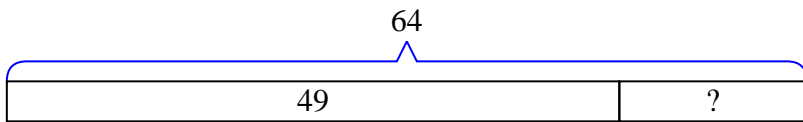
- 3) A baker made 87 cakes. 39 were chocolate and the rest were vanilla. How many cakes were vanilla?



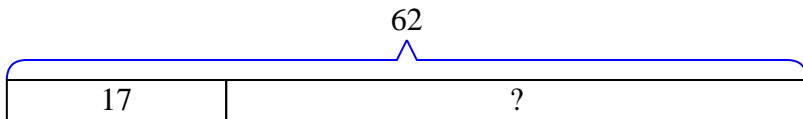
- 4) For Halloween Roger got 85 pounds of candy. If he gave 44 pounds to Amy, how many pounds would he have left?



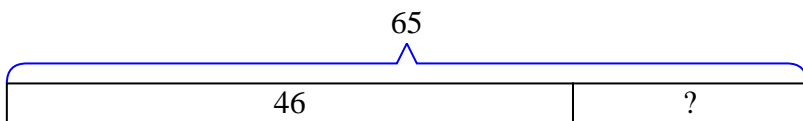
- 5) A museum had 64 paintings. If they got rid of 49 of them, how many pictures would they have left?



- 6) Dave and Olivia have 62 books. Olivia has 17. How many books does Dave have?



- 7) Sam owned 65 video games for his Playstation and Xbox. 46 of the games were for Xbox. How many games does Sam have for playstation?



Answers

1. 35
2. 34
3. 48
4. 41
5. 15
6. 45
7. 19