



Solve each problem using a tape diagram.

Answers

1) Victor was reading a book. He read 16 pages on Monday and 4 times as many pages on Tuesday. On Wednesday he read 10 fewer pages than the amount he read on Tuesday. How many pages did he read total?

1. _____

2) In April, Larry's Lawn Care mowed 15 lawns. They mowed 4 times as many in May and 8 fewer in June. How many lawns did they mow over those three months?

2. _____

3. _____

3) Alice, Bobby and Charles were collecting cans. Charles collected 5 times as many cans as Alice. Alice collected 12 cans. And Bobby collected 8 more cans than Alice. How many cans did they collect total?

4. _____

5. _____


4) Amy, Billy and Carl were working on a school project. Amy spent 21 minutes on her portion. Billy spent 4 times as long on his portion. And Carl spent 5 minutes fewer than Billy did. How many minutes total were they working?

5) Emily was organizing her pictures on her computer. In folder 1 she had 18 pictures. In folder 2 she had 10 more pictures than folder 1. And in folder 3 she had 3 times as many pictures as folder 1. How many pictures does she have total?

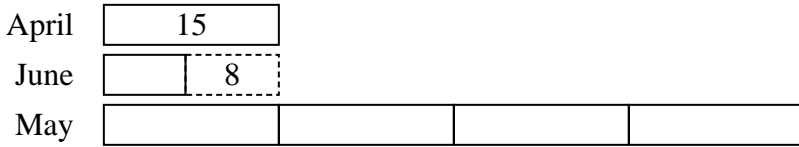


Solve each problem using a tape diagram.

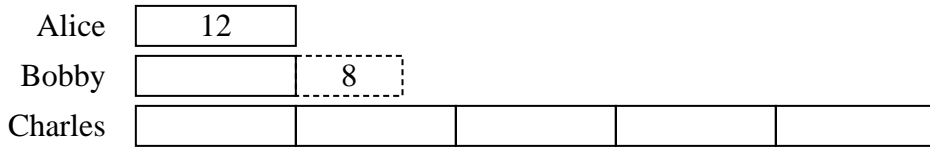
- 1) Victor was reading a book. He read 16 pages on Monday and 4 times as many pages on Tuesday. On Wednesday he read 10 fewer pages than the amount he read on Tuesday. How many pages did he read total?




- 2) In April, Larry's Lawn Care mowed 15 lawns. They mowed 4 times as many in May and 8 fewer in June. How many lawns did they mow over those three months?



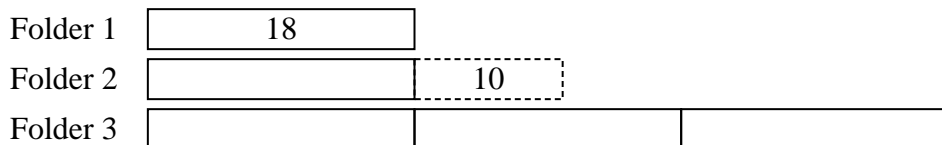
- 3) Alice, Bobby and Charles were collecting cans. Charles collected 5 times as many cans as Alice. Alice collected 12 cans. And Bobby collected 8 more cans than Alice. How many cans did they collect total?



- 4) Amy, Billy and Carl were working on a school project. Amy spent 21 minutes on her portion. Billy spent 4 times as long on his portion. And Carl spent 5 minutes fewer than Billy did. How many minutes total were they working?



- 5) Emily was organizing her pictures on her computer. In folder 1 she had 18 pictures. In folder 2 she had 10 more pictures than folder 1. And in folder 3 she had 3 times as many pictures as folder 1. How many pictures does she have total?



Answers

1. **134**
2. **82**
3. **92**
4. **184**
5. **100**