



Solve each problem using a tape diagram.

- 1) On Super Bowl Sunday a store sold 576 sodas. They sold  $\frac{3}{6}$  as many bags of chips. They also sold  $\frac{2}{3}$  as many jars of dip as bags of chips. How many jars of dip did they sell?
  
- 2) A chef was ordering vegetables for his restaurant. He order \$402 worth of potatoes. He also spent  $\frac{4}{6}$  as much on tomatoes. Finally he spent  $\frac{3}{4}$  as much on green beans as he did on tomatoes. How much did he spend on green beans?
  
- 3) Gwen was looking at her Nintendo collection. She had 315 wiiU games. She had  $\frac{4}{5}$  as many DS games and  $\frac{1}{4}$  as many 3ds games as DS games. How many 3ds games does she have?
  
- 4) At the school fundraiser Adam earned \$456. Bianca earned  $\frac{2}{8}$  as much as Adam. And Cathy earned  $\frac{1}{2}$  as much as Bianca. How much did Cathy earn?
  
- 5) Nancy was trying to determine the weight of a small rock. She determined the small rock was  $\frac{2}{4}$  as heavy as a medium rock. The medium rock was  $\frac{4}{5}$  as heavy as a large rock. The large rock weighed 345 grams. How heavy was the small rock?

Answers

1. \_\_\_\_\_

2. \_\_\_\_\_

3. \_\_\_\_\_

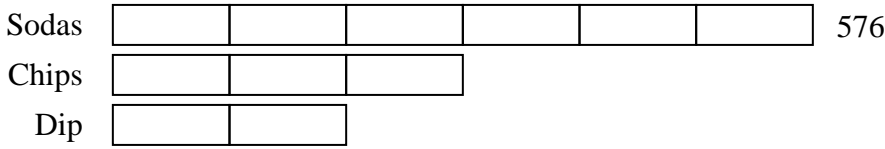
4. \_\_\_\_\_

5. \_\_\_\_\_

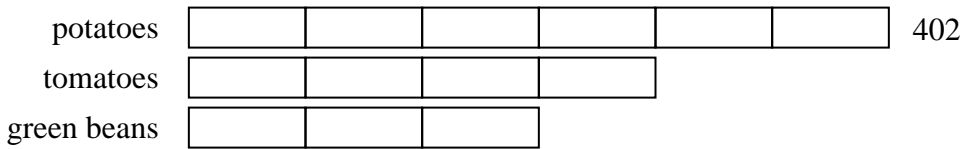


Solve each problem using a tape diagram.


- 1) On Super Bowl Sunday a store sold 576 sodas. They sold  $\frac{3}{6}$  as many bags of chips. They also sold  $\frac{2}{3}$  as many jars of dip as bags of chips. How many jars of dip did they sell?



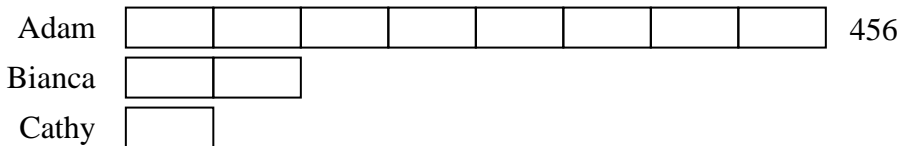
- 2) A chef was ordering vegetables for his restaurant. He order \$402 worth of potatoes. He also spent  $\frac{4}{6}$  as much on tomatoes. Finally he spent  $\frac{3}{4}$  as much on green beans as he did on tomatoes. How much did he spend on green beans?




- 3) Gwen was looking at her Nintendo collection. She had 315 wiiU games. She had  $\frac{4}{5}$  as many DS games and  $\frac{1}{4}$  as many 3ds games as DS games. How many 3ds games does she have?



- 4) At the school fundraiser Adam earned \$456. Bianca earned  $\frac{2}{8}$  as much as Adam. And Cathy earned  $\frac{1}{2}$  as much as Bianca. How much did Cathy earn?



- 5) Nancy was trying to determine the weight of a small rock. She determined the small rock was  $\frac{2}{4}$  as heavy as a medium rock. The medium rock was  $\frac{4}{5}$  as heavy as a large rock. The large rock weighed 345 grams. How heavy was the small rock?



Answers

1. 192

2. 201

3. 63

4. 57

5. 138