



Solve each problem using a tape diagram.

Answers

1) Two years ago the fair had $\frac{2}{5}$ as many people as 1 year ago. 1 year ago the fair had $\frac{5}{8}$ as many people as this year. This year the fair had 496 people. How many people did the fair have 2 years ago?

1. _____

2. _____

3. _____

4. _____

5. _____

2) At the school fundraiser Adam earned \$450. Bianca earned $\frac{5}{6}$ as much as Adam. And Cathy earned $\frac{3}{5}$ as much as Bianca. How much did Cathy earn?

3) Gwen was looking at her Nintendo collection. She had 232 wiiU games. She had $\frac{2}{8}$ as many DS games and $\frac{1}{2}$ as many 3ds games as DS games. How many 3ds games does she have?

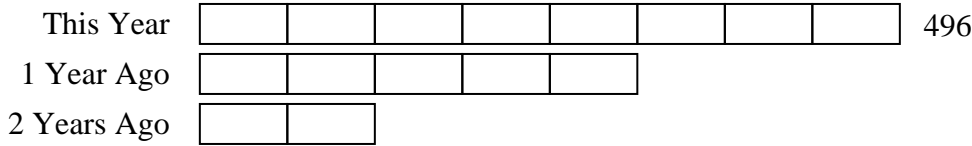
4) Debby was trying to determine the weight of a small rock. She determined the small rock was $\frac{2}{3}$ as heavy as a medium rock. The medium rock was $\frac{3}{9}$ as heavy as a large rock. The large rock weighed 90 grams. How heavy was the small rock?

5) A chef was ordering vegetables for his restaurant. He order \$496 worth of potatoes. He also spent $\frac{5}{8}$ as much on tomatoes. Finally he spent $\frac{4}{5}$ as much on green beans as he did on tomatoes. How much did he spend on green beans?

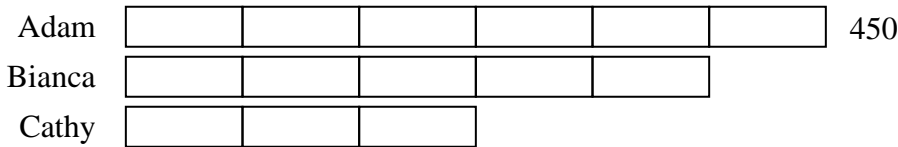


Solve each problem using a tape diagram.

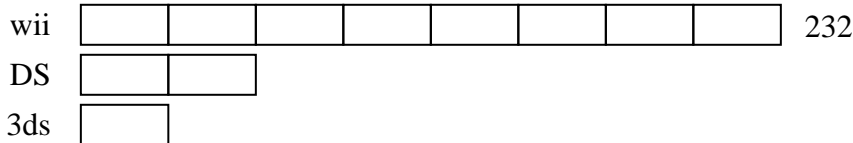
- 1) Two years ago the fair had $\frac{2}{5}$ as many people as 1 year ago. 1 year ago the fair had $\frac{5}{8}$ as many people as this year. This year the fair had 496 people. How many people did the fair have 2 years ago?



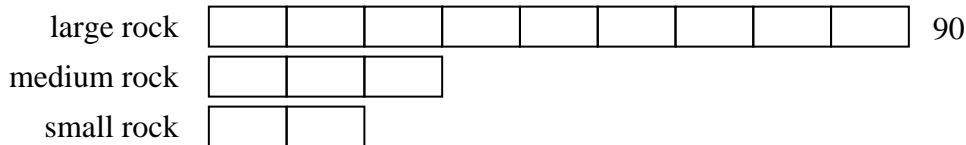
- 2) At the school fundraiser Adam earned \$450. Bianca earned $\frac{5}{6}$ as much as Adam. And Cathy earned $\frac{3}{5}$ as much as Bianca. How much did Cathy earn?



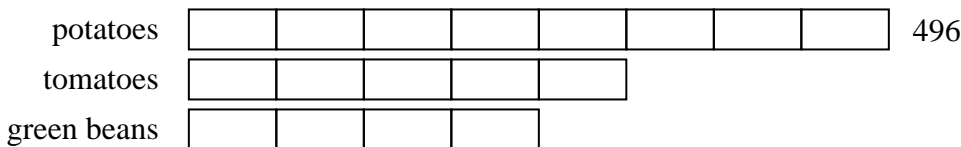
- 3) Gwen was looking at her Nintendo collection. She had 232 wiiU games. She had $\frac{2}{8}$ as many DS games and $\frac{1}{2}$ as many 3ds games as DS games. How many 3ds games does she have?



- 4) Debby was trying to determine the weight of a small rock. She determined the small rock was $\frac{2}{3}$ as heavy as a medium rock. The medium rock was $\frac{3}{9}$ as heavy as a large rock. The large rock weighed 90 grams. How heavy was the small rock?



- 5) A chef was ordering vegetables for his restaurant. He order \$496 worth of potatoes. He also spent $\frac{5}{8}$ as much on tomatoes. Finally he spent $\frac{4}{5}$ as much on green beans as he did on tomatoes. How much did he spend on green beans?



Answers

1. 124

2. 225

3. 29

4. 20

5. 248