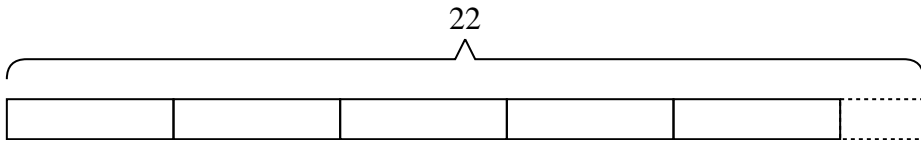


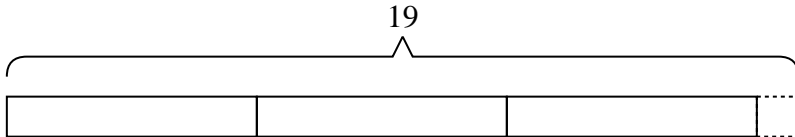


Solve each problem.

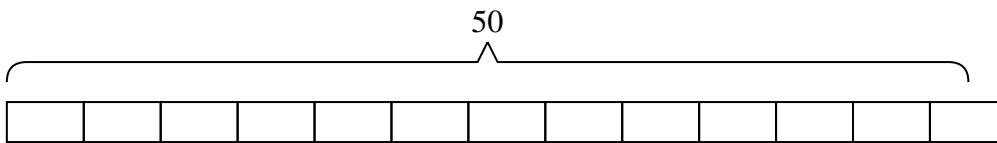
- 1) A box of cupcakes cost \$four. If you had twenty-two dollars and bought as many boxes as you could, how much money would you have left?



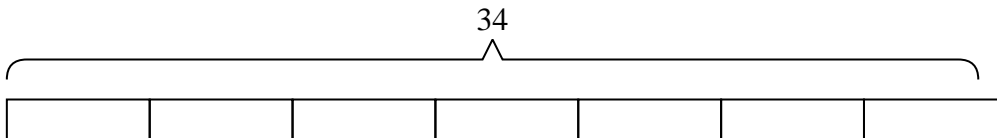
- 2) A machine in a candy company creates nineteen pieces of candy a minute. If a small box of candy has six pieces in it how many full boxes does the machine make in a minute?



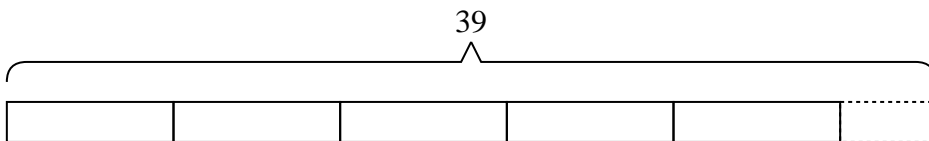
- 3) A restaurant needs to buy fifty new plates. If each box has four plates in it, how many boxes will they need to buy?



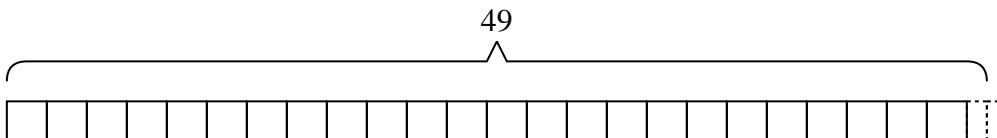
- 4) There are thirty-four people attending a luncheon. If a table can hold five people, how many tables do they need?



- 5) The roller coaster at the state fair costs seven tickets per ride. If you had thirty-nine tickets, how many tickets would you have left if you rode it as many times as you could?



- 6) An art museum had forty-nine pictures to split equally into two different exhibits. How many more pictures would they need to make sure each exhibit had the same amount?



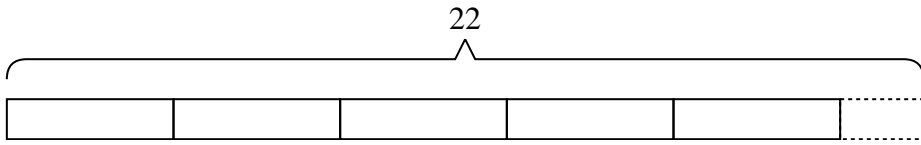
Answers

- 1. _____
- 2. _____
- 3. _____
- 4. _____
- 5. _____
- 6. _____

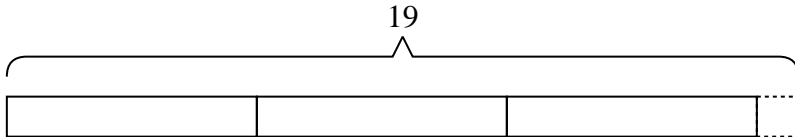


Solve each problem.

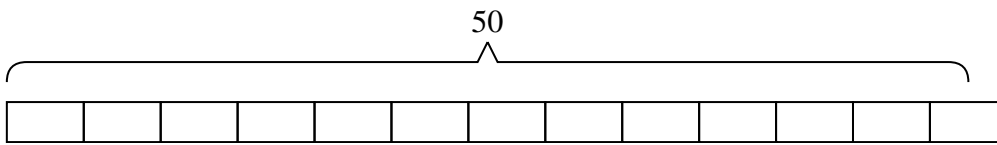
- 1) A box of cupcakes cost \$four. If you had twenty-two dollars and bought as many boxes as you could, how much money would you have left?



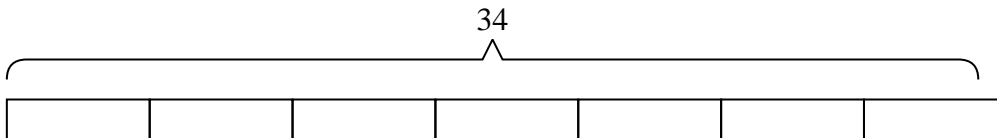
- 2) A machine in a candy company creates nineteen pieces of candy a minute. If a small box of candy has six pieces in it how many full boxes does the machine make in a minute?



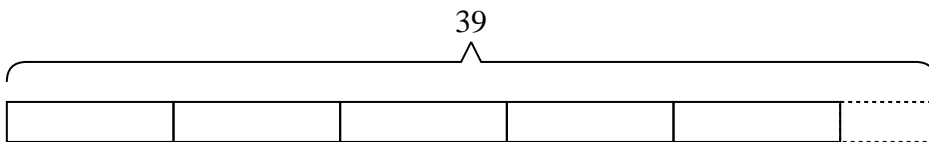
- 3) A restaurant needs to buy fifty new plates. If each box has four plates in it, how many boxes will they need to buy?



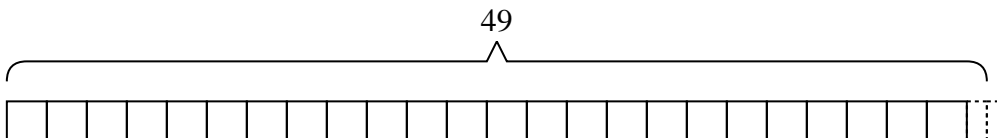
- 4) There are thirty-four people attending a luncheon. If a table can hold five people, how many tables do they need?



- 5) The roller coaster at the state fair costs seven tickets per ride. If you had thirty-nine tickets, how many tickets would you have left if you rode it as many times as you could?



- 6) An art museum had forty-nine pictures to split equally into two different exhibits. How many more pictures would they need to make sure each exhibit had the same amount?



Answers

1. 2
2. 3
3. 13
4. 7
5. 4
6. 1