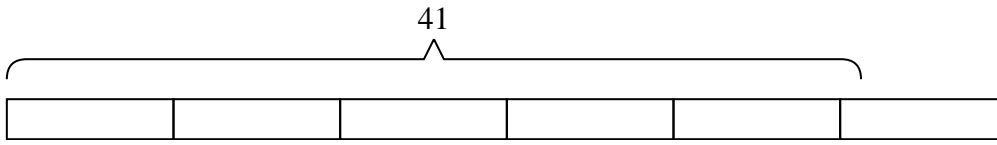


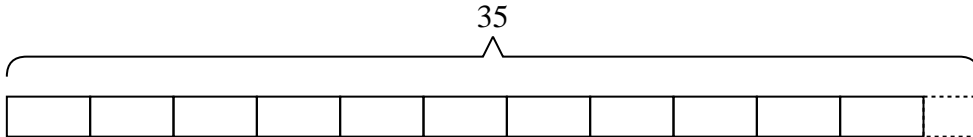


Solve each problem.

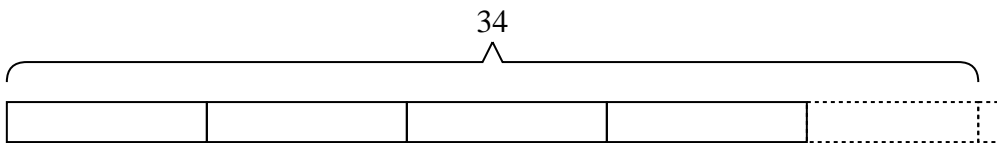
- 1) A movie theater needed forty-one popcorn buckets. If each package has eight buckets in it, how many packages will they need to buy?



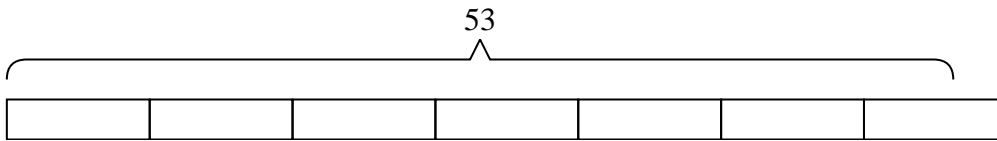
- 2) A box can hold three brownies. If a baker made thirty-five brownies, how many full boxes of brownies did he make?



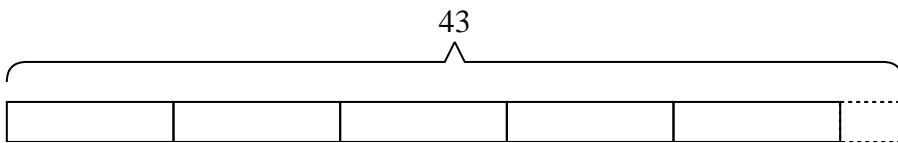
- 3) It takes seven apples to make an apple pie. If a chef bought thirty-four apples, the last pie would need how many more apples?



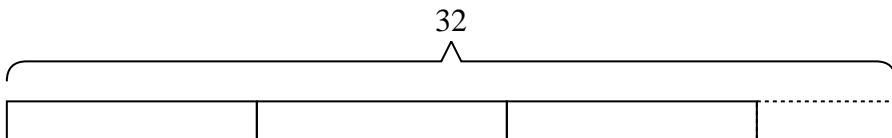
- 4) A restaurant needs to buy fifty-three new plates. If each box has eight plates in it, how many boxes will they need to buy?



- 5) A pizza store had forty-three pieces of pepperoni to put on their pizzas. If each pizza got eight pieces, how many extra pieces of pepperoni would they have?



- 6) A baker had nine boxes for donuts. He ended up making thirty-two donuts and splitting them evenly between the boxes. How many extra donuts did he end up with?



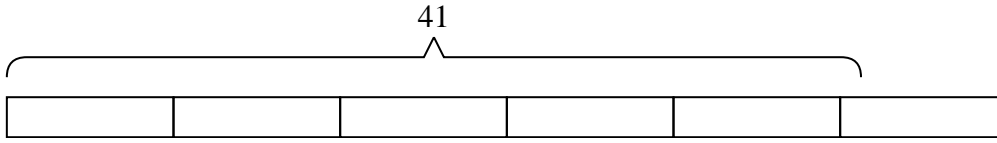
Answers

1. _____
2. _____
3. _____
4. _____
5. _____
6. _____

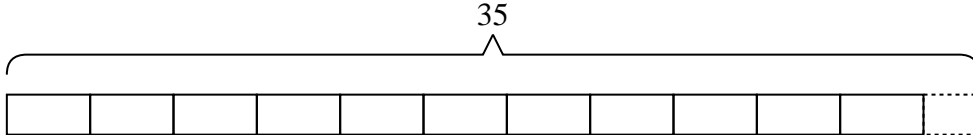


Solve each problem.

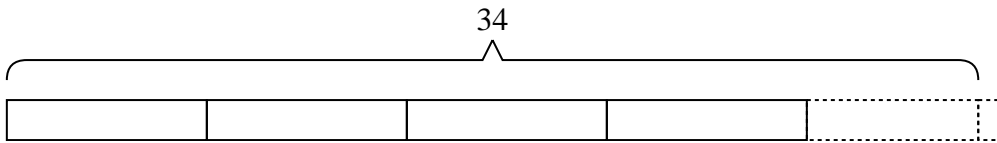
- 1) A movie theater needed forty-one popcorn buckets. If each package has eight buckets in it, how many packages will they need to buy?



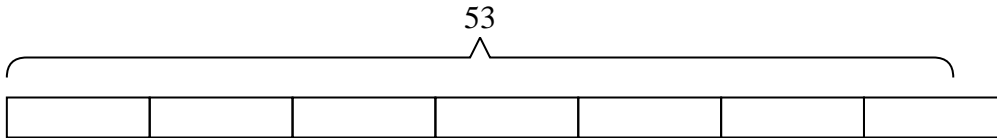
- 2) A box can hold three brownies. If a baker made thirty-five brownies, how many full boxes of brownies did he make?



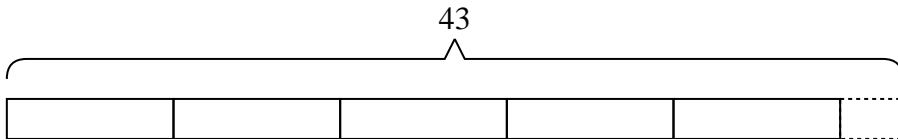
- 3) It takes seven apples to make an apple pie. If a chef bought thirty-four apples, the last pie would need how many more apples?



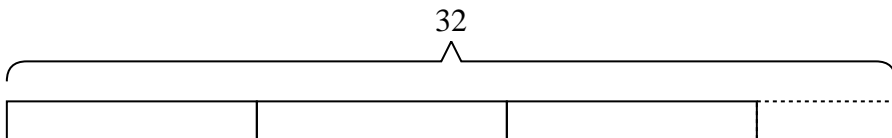
- 4) A restaurant needs to buy fifty-three new plates. If each box has eight plates in it, how many boxes will they need to buy?



- 5) A pizza store had forty-three pieces of pepperoni to put on their pizzas. If each pizza got eight pieces, how many extra pieces of pepperoni would they have?



- 6) A baker had nine boxes for donuts. He ended up making thirty-two donuts and splitting them evenly between the boxes. How many extra donuts did he end up with?



Answers

1. 6
 2. 11
 3. 1
 4. 7
 5. 3
 6. 5