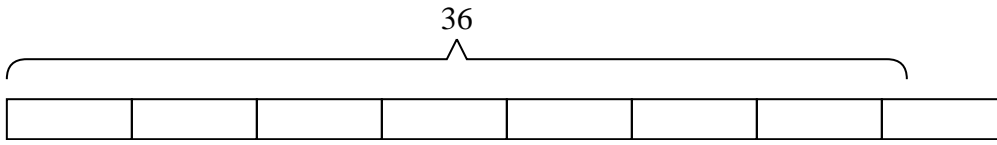


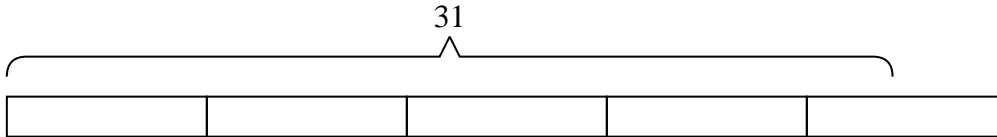


Solve each problem.

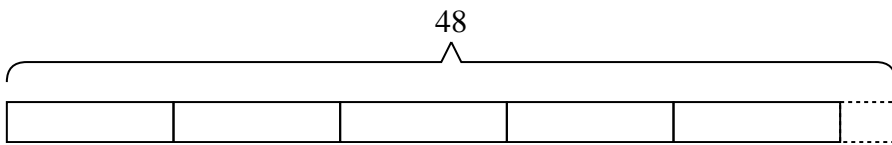
- 1) A truck can hold five boxes. If you needed to move thirty-six boxes across town, how many trips would you need to make?



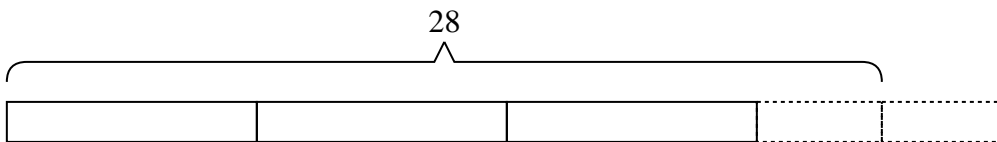
- 2) Ned is trying to earn thirty-one dollars for some new toys. If he charges seven dollars to mow a lawn, how many lawns will he need to mow to earn the money?



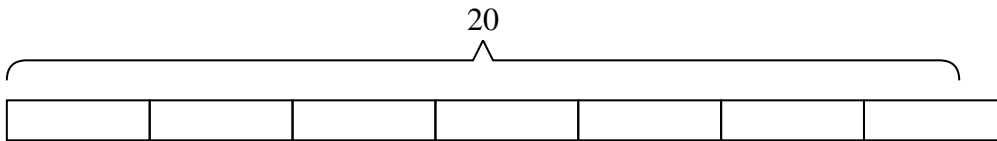
- 3) An airline has forty-eight pieces of luggage to put away. If each luggage compartment will hold nine pieces of luggage, how many will be in the compartment that isn't full?



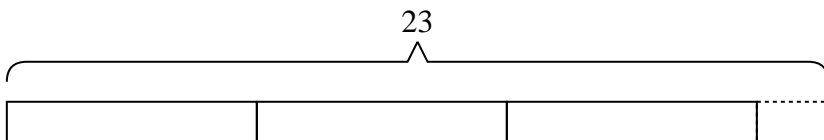
- 4) A movie store had twenty-eight movies they were putting on eight shelves. If the owner wanted to make sure each shelf had the same number of movies how many more movies would he need?



- 5) A restaurant needs to buy twenty new plates. If each box has three plates in it, how many boxes will they need to buy?



- 6) Haley had twenty-three photos to put into a photo album. If each page holds seven photos, how many full pages will she have?



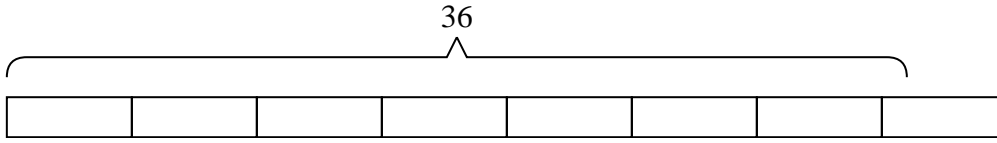
Answers

1. _____
2. _____
3. _____
4. _____
5. _____
6. _____

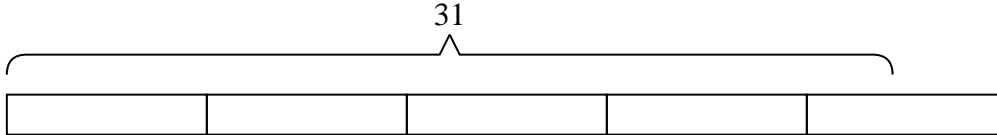


Solve each problem.

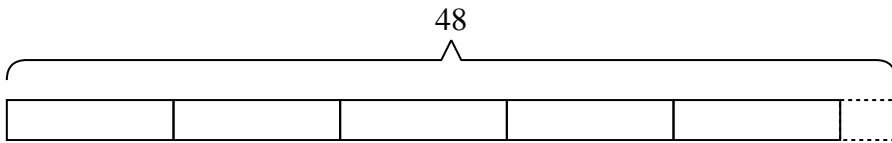
- 1) A truck can hold five boxes. If you needed to move thirty-six boxes across town, how many trips would you need to make?



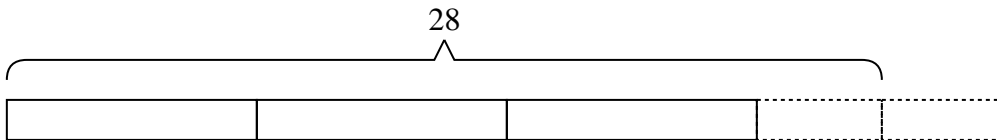
- 2) Ned is trying to earn thirty-one dollars for some new toys. If he charges seven dollars to mow a lawn, how many lawns will he need to mow to earn the money?



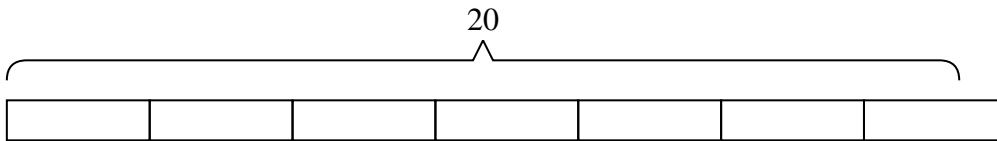
- 3) An airline has forty-eight pieces of luggage to put away. If each luggage compartment will hold nine pieces of luggage, how many will be in the compartment that isn't full?



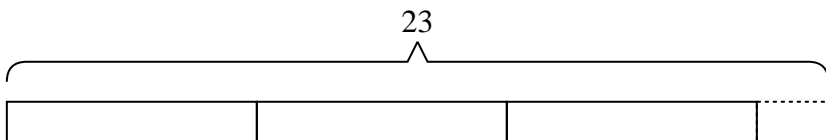
- 4) A movie store had twenty-eight movies they were putting on eight shelves. If the owner wanted to make sure each shelf had the same number of movies how many more movies would he need?



- 5) A restaurant needs to buy twenty new plates. If each box has three plates in it, how many boxes will they need to buy?



- 6) Haley had twenty-three photos to put into a photo album. If each page holds seven photos, how many full pages will she have?



Answers

1. 8
 2. 5
 3. 3
 4. 4
 5. 7
 6. 3