



Solve each problem.

- 1) While playing a game Frank had 14 points. If he scored another 13 points, how many points would he have total?

- 2) Oliver had 13 dollars saved up. After doing some chores his mother gave him another 20 dollars. How much money does he have total?

- 3) There were 48 people in line at lunch when 10 more got in line. How many people were there total in line?

- 4) At the zoo Gwen took 42 pictures. If her sister took another 26 pictures, how many did they take total?

- 5) A restaurant sold 19 sodas in the morning and 37 in the afternoon. How many sodas did they sell total?

- 6) Debby had 14 sheets of paper in her desk and 36 more in her backpack. How many did she have total?

- 7) Kristine had \$15 and Tiffany had \$48. If they combined their money, how much would they have?

Answers

1. _____

2. _____

3. _____

4. _____

5. _____

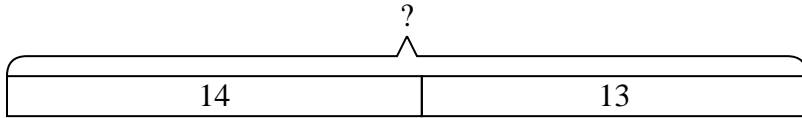
6. _____

7. _____

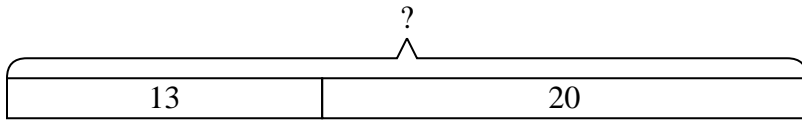


Solve each problem.

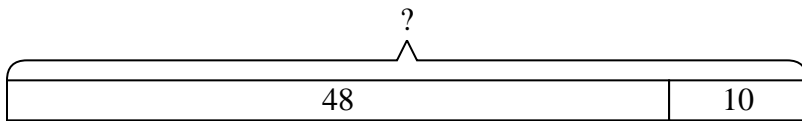
- 1) While playing a game Frank had 14 points. If he scored another 13 points, how many points would he have total?



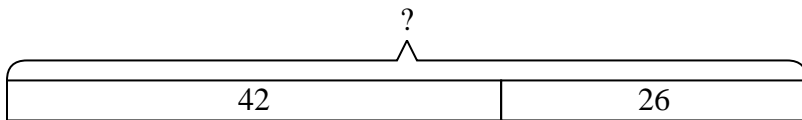
- 2) Oliver had 13 dollars saved up. After doing some chores his mother gave him another 20 dollars. How much money does he have total?



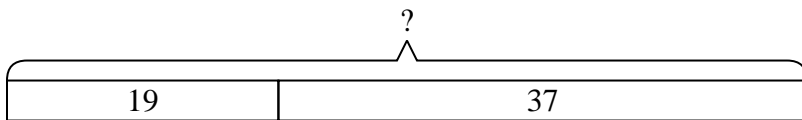
- 3) There were 48 people in line at lunch when 10 more got in line. How many people were there total in line?



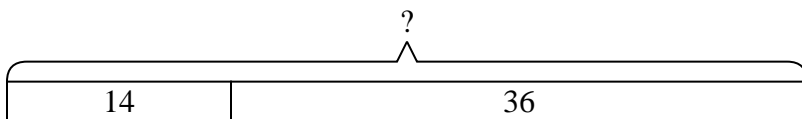
- 4) At the zoo Gwen took 42 pictures. If her sister took another 26 pictures, how many did they take total?



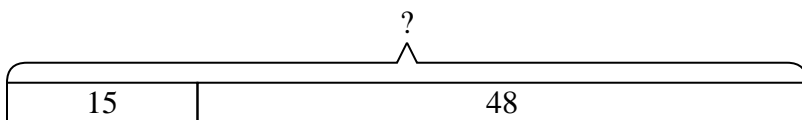
- 5) A restaurant sold 19 sodas in the morning and 37 in the afternoon. How many sodas did they sell total?



- 6) Debby had 14 sheets of paper in her desk and 36 more in her backpack. How many did she have total?



- 7) Kristine had \$15 and Tiffany had \$48. If they combined their money, how much would they have?



Answers

1. 27

2. 33

3. 58

4. 68

5. 56

6. 50

7. 63