

**Solve each problem.**

- 1) There were 14 people in line at lunch when 12 more got in line. How many people were there total in line?
  
- 2) A restaurant sold 36 sodas in the morning and 20 in the afternoon. How many sodas did they sell total?
  
- 3) On Saturday Roger bought 33 trading cards. On Sunday he bought 50 more. How many cards did he buy total?
  
- 4) A store has 46 shirts. Later they got in 27 more shirts. How many shirts does the store have now?
  
- 5) Kristine had \$46 and Tiffany had \$19. If they combined their money, how much would they have?
  
- 6) Haley had 50 pieces of candy. Her friend gave her 18 more pieces. How many pieces of candy did Haley have total?
  
- 7) A pet store had 26 birds that talked and 19 that didn't. How many birds did the pet store have total?

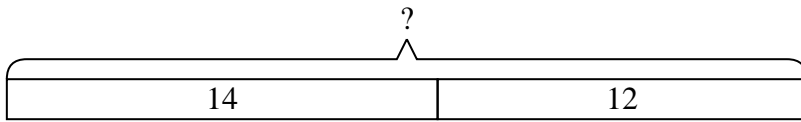
**Answers**

1. \_\_\_\_\_
2. \_\_\_\_\_
3. \_\_\_\_\_
4. \_\_\_\_\_
5. \_\_\_\_\_
6. \_\_\_\_\_
7. \_\_\_\_\_

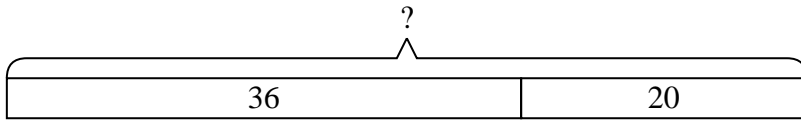


Solve each problem.

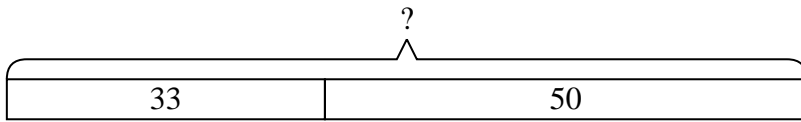
- 1) There were 14 people in line at lunch when 12 more got in line. How many people were there total in line?



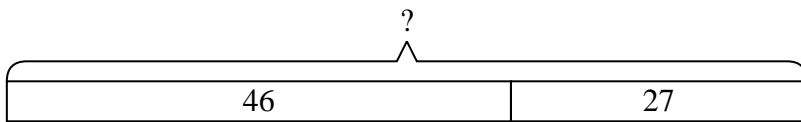
- 2) A restaurant sold 36 sodas in the morning and 20 in the afternoon. How many sodas did they sell total?



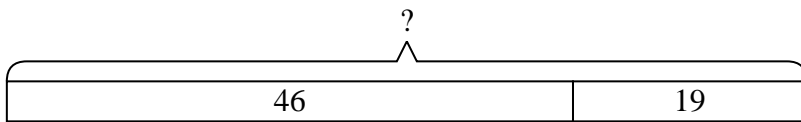
- 3) On Saturday Roger bought 33 trading cards. On Sunday he bought 50 more. How many cards did he buy total?



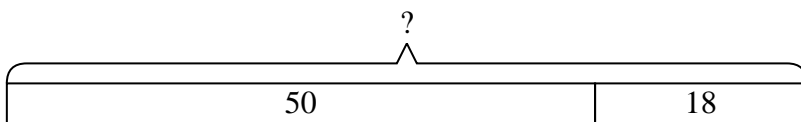
- 4) A store has 46 shirts. Later they got in 27 more shirts. How many shirts does the store have now?



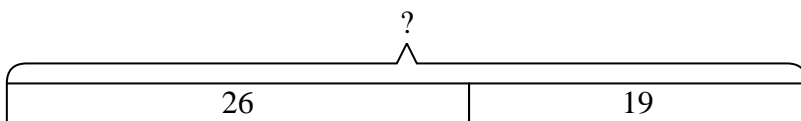
- 5) Kristine had \$46 and Tiffany had \$19. If they combined their money, how much would they have?



- 6) Haley had 50 pieces of candy. Her friend gave her 18 more pieces. How many pieces of candy did Haley have total?



- 7) A pet store had 26 birds that talked and 19 that didn't. How many birds did the pet store have total?



Answers

1. 26
2. 56
3. 83
4. 73
5. 65
6. 68
7. 45