

**Solve each problem.**

- 1) A farmer planted 16 seeds on Wednesday and another 13 seeds on Thursday. How many seeds did he plant total?

- 2) John had \$39. Later he sold some of his old toys and got another \$13. How much money does he have total?

- 3) Faye has 10 Playstation games and 40 Xbox games. How many games does she have total?

- 4) A store sold 32 cold drinks and 28 hot drinks. How many drinks did they sell total?

- 5) A fast food restaurant sold 39 small hotdogs and 15 large hotdogs. How many hotdogs did they sell total?

- 6) Haley picked up 40 pieces of paper from the floor. If Adam picked up 16 pieces, how many did they pick up total?

- 7) On Saturday Jerry bought 19 trading cards. On Sunday he bought 46 more. How many cards did he buy total?

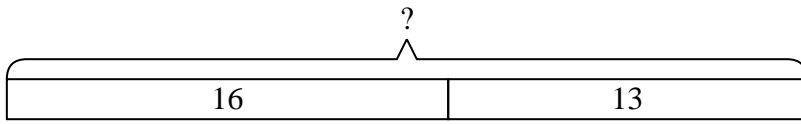
Answers

1. _____
2. _____
3. _____
4. _____
5. _____
6. _____
7. _____

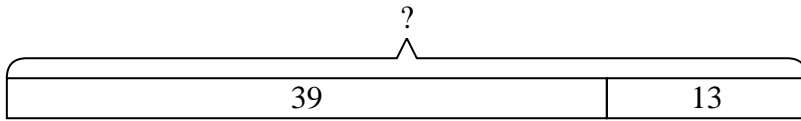


Solve each problem.

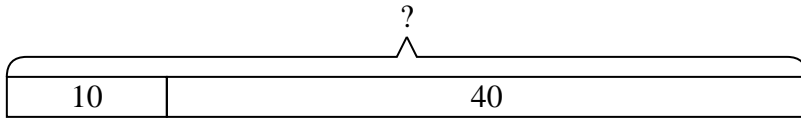
- 1) A farmer planted 16 seeds on Wednesday and another 13 seeds on Thursday. How many seeds did he plant total?



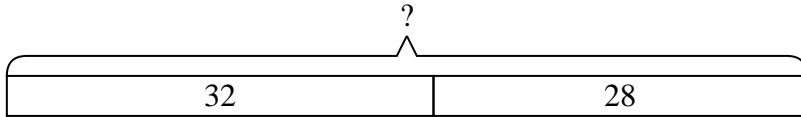
- 2) John had \$39. Later he sold some of his old toys and got another \$13. How much money does he have total?



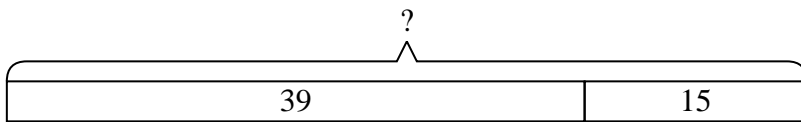
- 3) Faye has 10 Playstation games and 40 Xbox games. How many games does she have total?



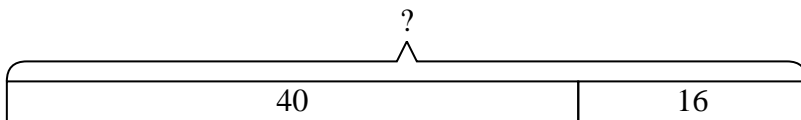
- 4) A store sold 32 cold drinks and 28 hot drinks. How many drinks did they sell total?



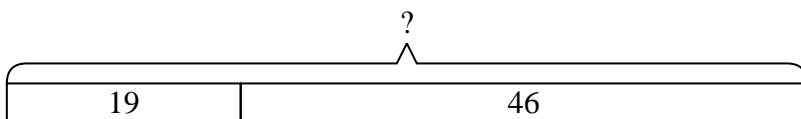
- 5) A fast food restaurant sold 39 small hotdogs and 15 large hotdogs. How many hotdogs did they sell total?



- 6) Haley picked up 40 pieces of paper from the floor. If Adam picked up 16 pieces, how many did they pick up total?



- 7) On Saturday Jerry bought 19 trading cards. On Sunday he bought 46 more. How many cards did he buy total?



Answers

1. 29
2. 52
3. 50
4. 60
5. 54
6. 56
7. 65