

**Solve each problem.**

- 1) A fast food restaurant sold 46 small hotdogs and 22 large hotdogs. How many hotdogs did they sell total?

- 2) A store has 22 shirts. Later they got in 23 more shirts. How many shirts does the store have now?

- 3) Faye went to the movies 11 times last year and 49 times this year. How many times did Faye go to the movies total?

- 4) A grocery store had 32 bottles of regular soda and 29 bottles of diet soda. How many bottles did they have total?

- 5) A clown gave away 24 balloons to girls and 23 balloons to boys. How many balloons did he give away total?

- 6) While playing a game Adam had 43 points. If he scored another 49 points, how many points would he have total?

- 7) A farmer planted 47 seeds on Wednesday and another 33 seeds on Thursday. How many seeds did he plant total?

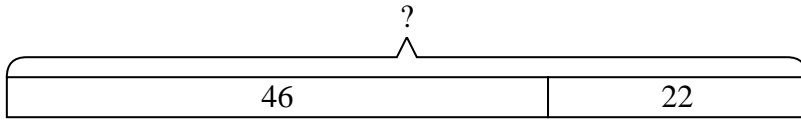
Answers

1. _____
2. _____
3. _____
4. _____
5. _____
6. _____
7. _____

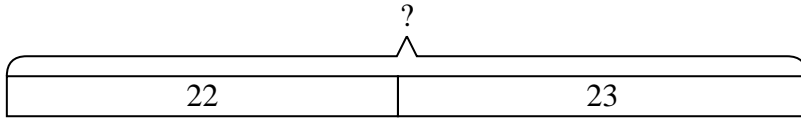


Solve each problem.

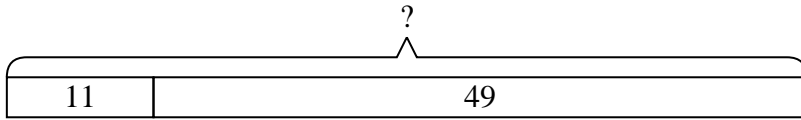
- 1) A fast food restaurant sold 46 small hotdogs and 22 large hotdogs. How many hotdogs did they sell total?



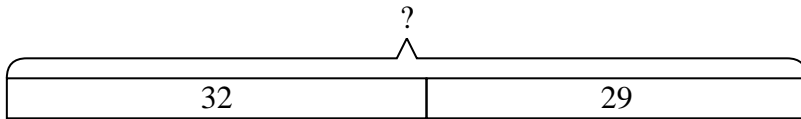
- 2) A store has 22 shirts. Later they got in 23 more shirts. How many shirts does the store have now?



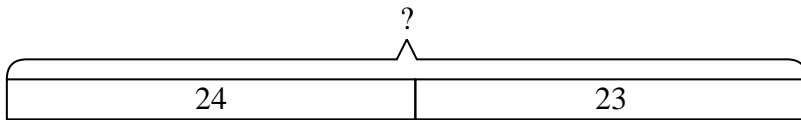
- 3) Faye went to the movies 11 times last year and 49 times this year. How many times did Faye go to the movies total?



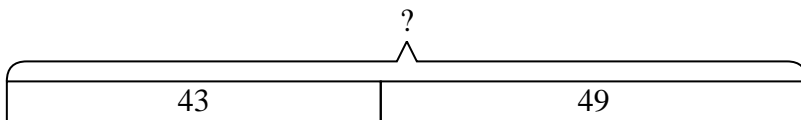
- 4) A grocery store had 32 bottles of regular soda and 29 bottles of diet soda. How many bottles did they have total?



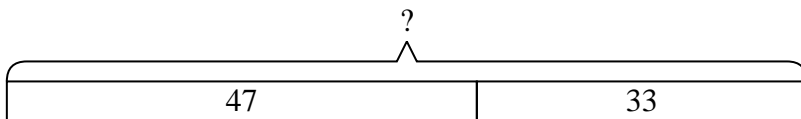
- 5) A clown gave away 24 balloons to girls and 23 balloons to boys. How many balloons did he give away total?



- 6) While playing a game Adam had 43 points. If he scored another 49 points, how many points would he have total?



- 7) A farmer planted 47 seeds on Wednesday and another 33 seeds on Thursday. How many seeds did he plant total?



Answers

1. 68
2. 45
3. 60
4. 61
5. 47
6. 92
7. 80